

Electronics

From Theory into Practice

J. E. Fisher, C.Eng., A.M.I.E.E., A.M.I.E.R.E.

H. B. Gatland, B.Sc., Dip. Electronics
College of Aeronautics, Cranfield



THE COMMONWEALTH AND INTERNATIONAL LIBRARY

Joint Chairmen of the Honorary Editorial Advisory Board

SIR ROBERT ROBINSON, O.M., F.R.S, LONDON

DEAN ATHELSTAN SPILHAUS, MINNESOTA

Publisher: ROBERT MAXWELL, M.C., M.P.

APPLIED ELECTRICITY AND ELECTRONICS DIVISION

General Editor: P. HAMMOND

Electronics – from Theory into Practice

fi 50

Electronics ***from Theory into Practice***

BY

J. E. FISHER, C. Eng., A.M.I.E.E., A.M.I.E.R.E.

AND

H. B. GATLAND, B.Sc., Dip. Electronics

PERGAMON PRESS

OXFORD • LONDON • EDINBURGH • NEW YORK
TORONTO • SYDNEY • PARIS • BRAUNSCHWEIG

Pergamon Press Ltd., Headington Hill Hall, Oxford
4 & 5 Fitzroy Square, London W. 1

Pergamon Press (Scotland) Ltd., 2 & 3 Teviot Place, Edinburgh 1

Pergamon Press Inc., 44-01 21st Street, Long Island City, New York 11101

Pergamon of Canada, Ltd., 6 Adelaide Street East, Toronto, Ontario

Pergamon Press (Aust.) Pty. Ltd., 20-22 Margaret Street, Sydney,
New South Wales

Pergamon Press S. A. R. L., 24 rue des Écoles, Paris 5^e

Vieweg & Sohn GmbH, Burgplatz 1, Braunschweig

Copyright © 1966 Pergamon Press Ltd.

First edition 1966

Library of Congress Catalog Card No. 66-19074

This book is sold subject to the condition
that it shall not, by way of trade, be lent,
resold, hired out, or otherwise disposed
of without the publisher's consent,
in any form of binding or cover
other than that in which
it is published.

(2894/66)

Contents

PREFACE	xi
DESIGN EXAMPLES	xiii
1. <i>The Thermionic Valve</i>	1
Introduction	1
Functional Survey of Valve Types	1
1.1. The Diode	1
1.2. The Triode	3
1.3. The Tetrode	6
1.4. The Pentode	7
1.5. Grid Input Admittance	9
1.6. Auxiliary Voltage Supplies	10
1.7. Screen Grid Supply	11
1.8. Elementary Valve Equivalent Networks	12
1.9. Resistance in the Cathode	14
1.10. Signal injected at Cathode	17
1.11. Design from Characteristics	18
2. <i>The Semiconductor</i>	23
Introduction	23
2.1. The Junction Diode	24
2.2. Leakage Current	25
2.3. The Junction Transistor	26
2.4. Fundamental Current Relationships	28
2.5. Elementary Considerations of Frequency Effects	29
2.6. Voltage Breakdown	31
2.7. Power Dissipation	33
2.8. Summary of Transistor Types	34
2.9. Static Characteristics of the Junction Transistor	36
2.10. Small Signal Representation	39
2.11. Transistor Biasing	42
2.12. Transistor Amplifier Characteristics	50
2.13. Examples	57
2.14. Summary of the Characteristics of Transistor Amplifiers in Terms of r Parameters	59

3. <i>The Capacitively Coupled Amplifier</i>	61
Introduction	61
3.1. Bandwidth	61
3.2. Determination of Gain and Frequency Response	62
3.3. Estimation of Frequency Response using Straight Line Asymptotes	66
3.4. Gain-bandwidth Product	68
3.5. Low Frequency Gain	70
3.6. Effect of Cathode Bypass Capacitor on Frequency Response	73
3.7. Effect of Screen Decoupling on Frequency Response	75
3.8. Anode Decoupling	78
3.9. Amplifier Time Response	80
3.10. Tandem Stages	83
3.11. Triode Amplifier	83
3.12. Pentode Amplifier	86
3.13. High Frequency Performance of Capacitively Coupled Transistor Amplifiers	94
3.14. Low Frequency Performance of Capacitively Coupled Stages	99
3.15. Tandem Stages of Transistor Amplifier	104
 4. <i>Power Amplifiers</i>	 113
4.1. The Class A Power Amplifier	113
4.2. Audio Power Amplifier, Class A	117
4.3. The Class B Push-Pull Amplifier	122
4.4. Transistor Power Amplifiers	127
4.5. Audio Power Amplifier, Class A	131
4.6. The Class B Push-Pull Amplifier	135
 5. <i>Tuned Amplifiers</i>	 138
Introduction	138
5.1. The Parallel Tuned Circuit	138
5.2. Single Tuned Circuit Amplifier	139
5.3. Tunable R.F. Amplifier with Constant Selectivity	147
5.4. Cascaded Single Tuned Amplifiers	152
5.5. Staggered Tuned Amplifiers	154
5.6. Double Tuned Circuits	157
5.7. Tuned Amplifiers using Transistors	164
5.8. Neutralization	166

6. Zero Frequency Amplifiers	179
Introduction	179
6.1. Amplifier Types	179
6.2. Direct Coupled Amplifiers	181
6.3. Pentode Amplifiers	184
6.4. The Cathode Coupled Amplifier	197
6.5. Direct Coupled Transistor Amplifiers	207
6.6. Drift in Transistor D.C. Amplifiers	212
7. Negative Feedback Amplifiers	217
7.1. Introduction	217
7.2. Examples of Negative Feedback Amplifiers	221
7.3. Application of Negative Feedback to stabilize Transistor Operation	236
7.4. Stability of Amplifiers with Negative Feedback	237
7.5. Performance of an Amplifier with Parallel Feedback	242
7.6. High Input Resistance Amplifier	244
7.7. High Input Resistance Transistor Amplifier as an Impedance Changer	246
7.8. Direct Coupled Amplifier with Feedback	250
7.9. The Drift Problem in Feedback Amplifiers	257
7.10. A Shunt-Shunt Amplifier with Defined Transfer Resistance	260
7.11. Current Amplifier with Defined Gain	262
8. Power Supplies	266
Introduction	266
8.1. The Basic Rectifier	266
8.2. Full Wave Rectifier	267
8.3. Effect of Load Capacitance	268
8.4. L - C Smoothing Filter	270
8.5. Choke Input Filter	271
8.6. Voltage Multipliers	274
8.7. Voltage Stabilization	275
8.8. Semiconductor Stabilizer Diodes	277
8.9. Cathode Follower as Voltage Stabilizer	279
8.10. Emitter Follower as Voltage Stabilizer	282
8.11. Closed Loop Voltage Regulator	284
8.12. Transistor Series Regulator	289
8.13. Output Transistor Protection	292
8.14. Constant Current Supplies	293

9. <i>Oscillators</i>	294
Introduction	294
9.1. Sinusoidal Oscillators—Basic Considerations	294
9.2. Negative Resistance	296
9.3. Amplitude Stabilization	298
9.4. Survey of Feedback L - C Oscillators	300
9.5. The Tuned Anode Oscillator	302
9.6. Colpitts Oscillator (Transistor)	307
9.7. Resistance-Capacitance Oscillators	311
9.8. Modified Wien Bridge Oscillator	312
9.9. Multi-range Modified Wien Bridge using Transistors	315
9.10. Frequency Stability	318
9.11. The Tunnel Diode Oscillator	321
10. <i>Waveform Generators</i>	327
Introduction	327
10.1. General Survey of the Three Types	328
10.2. Transistor Switching	330
10.3. Speed of Transistor Switching	333
10.4. Transistor Bistable Multivibrator	334
10.5. Triggering	337
10.6. Alternative Gating Methods	339
10.7. Emitter Coupled Bistable Multivibrator	341
10.8. Symmetrical Trigger B.M.V.	343
10.9. Complementary Bistable Networks	344
10.10. Thermionic Valve B.M.V.	345
10.11. Cathode Coupled B.M.V.	349
10.12. Monostable Multivibrators	351
10.13. The Direct Coupled M.M.V.	355
10.14. Asymmetrical M.M.V.	357
10.15. Astable Multivibrators	358
10.16. Emitter Coupled A.M.V.	361
10.17. Complementary A.M.V.	362
10.18. Differentiating and Integrating Networks	363
10.19. Linear Sweep Generators	365
10.20. Use of a Constant Current Generator	367
10.21. Sawtooth Generator using Avalanche Switching	368
10.22. Miller Timebase Generator	371
10.23. Transistor Miller Timebase Generator	374
10.24. Reduction of Recovery Time	378

CONTENTS

ix

11. <i>Some General Design Considerations</i>	380
11.1. Resistors	380
11.2. Resistor Types	382
11.3. Capacitors	383
11.4. Capacitor Types	384
11.5. Valve Rating Systems	387
11.6. General Recommendations	389
11.7. Screening	390
 APPENDIX A. Solutions of Simple Network Problems	 394
APPENDIX B. Application of the Laplace Transform	398
APPENDIX C. Symbols used in this book	401
BIBLIOGRAPHY	405
INDEX	407

Preface

TO ALL students of electronics there comes a time when a specification is presented to them and they are expected to turn their theoretical knowledge into practice. Many find this is a difficult step to take. The aim of this book is, where possible, to formalize design procedures covering a wide range of electronic circuitry, and thus to bridge the gap between theory and practice. It is also hoped that the book will be of use to practising engineers, particularly those trained in other disciplines, who, due to the widespread application of industrial control and automation, are obliged to undertake a certain amount of electronic design.

The first two chapters introduce the reader to the thermionic valve and the transistor and show how data sheets, provided by the manufacturer, are used in design calculations. There follows eight chapters devoted to specific subjects. Each of these contain a brief treatment of theory limited to the extraction of necessary design relationships. Design procedures are established, followed by worked design examples to meet given specifications. The book is concluded with a chapter on general electronic engineering practice.

The authors wish to express their gratitude to Mrs. D. Swift and Miss D. Sargent for their assistance in the preparation of this book.

Cranfield, 1966

J. E. FISHER
H. B. GATLAND

Design Examples

- D.E. 2.1. Transistor circuit to provide a peak output signal of 3 V without distortion.
- D.E. 3.1. Capacitively coupled valve amplifier having voltage gain of -10 .
- D.E. 3.2. Signal inverting amplifier having a nominal gain of 150 and bandwidth 100 c/s to 50 kc/s.
- D.E. 3.3. Transistor amplifier stage with transfer resistance of $100\text{ k}\Omega$ and bandwidth from 50 c/s to 20 kc/s.
- D.E. 3.4. Transistor amplifier with voltage gain greater than $-50,000$ over a frequency range of 100 c/s to 10 kc/s.
- D.E. 4.1. Power amplifier to provide 0.75 W into a resistive load with less than 5% distortion.
- D.E. 4.2. Thermionic valve audio power amplifier providing 4 W with less than 5% third harmonic distortion.
- D.E. 4.3. Class B_1 push-pull amplifier to provide a peak output power of 3.5 W.
- D.E. 4.4. Transistor power amplifier to provide 0.75 W into a resistive load, with low distortion and a stability factor of 8.
- D.E. 4.5. Audio power amplifier using transistors providing 40 mW output.
- D.E. 4.6. Transistor Class B push-pull output stage giving a peak power output of 450 mW.
- D.E. 5.1. Single tuned circuit stage with gain of 100 at 200 kc/s and having a 10 kc/s bandwidth.
- D.E. 5.2. Tuned amplifier covering the range 540–1600 kc/s, with constant selectivity.

- D.E. 5.3. Bandpass amplifier having a centre frequency of 10 Mc/s and a bandwidth of 250 kc/s, gain to be at least 1500.
- D.E. 5.4. Transistor I.F. amplifier to operate at a centre frequency of 470 kc/s.
- D.E. 6.1. Direct coupled amplifier providing a gain of 10 with signal inversion, the output voltage to be 150 V when the input is zero.
- D.E. 6.2. Pentode-cathode follower amplifier providing an output of ± 50 V into a 20 k Ω load.
- D.E. 6.3. Cathode coupled amplifier with a standing voltage of 100 V at each anode.
- D.E. 6.4. Transistor d.c. amplifier having a voltage gain greater than 5000 with signal inversion, output resistance to be less than 1 k Ω and the output voltage swing to be ± 5 V.
- D.E. 6.5. Longtail pair to provide a voltage gain greater than 40.
- D.E. 7.1. Voltage amplifier with a gain of -40 and an input resistance of 10 M Ω .
- D.E. 7.2. Stabilized voltage amplifier using a transitional lag.
- D.E. 7.3. Direct coupled transistor amplifier with transfer resistance of 100 k Ω and ± 5 V output voltage swing.
- D.E. 8.1. Nominal 100 V supply for a 25 mA load current, derived from a 200 V source.
- D.E. 8.2. Stabilized voltage supply having nominal voltage of 6.8 V and providing a load current of 15 mA \pm 10 mA.
- D.E. 8.3. Stabilized 150 V supply providing a maximum load current of 75 mA.
- D.E. 8.4. Current supply variable over the range 10–60 mA at -10.5 V from a regulated -20 V source.
- D.E. 8.5. A 150 V, 75 mA power supply with nominal output resistance of 20 Ω , with ripple voltage less than 10 mV peak-to-peak at full load current.
- D.E. 8.6. Transistor series regulator to provide 60 mA at -5 V from a -15 V stabilized supply, nominal output impedance to be 0.1 Ω .

- D.E. 9.1. Series fed, tuned anode oscillator covering the frequency range 1–2 Mc/s.
- D.E. 9.2. Colpitts transistor oscillator operating at 500 kc/s.
- D.E. 9.3. Modified Wien bridge oscillator covering the frequency range 1–10 kc/s.
- D.E. 9.4. Modified Wien bridge oscillator covering the frequency range 30 c/s to 30 kc/s.
- D.E. 10.1. Bistable multivibrator capable of operation up to 250 kc/s.
- D.E. 10.2. Symmetrical bistable multivibrator.
- D.E. 10.3. Monostable multivibrator to provide an output pulse of 5 μ sec duration.
- D.E. 10.4. Astable multivibrator having a period of 0.1 msec.
- D.E. 10.5. Timebase generator providing a waveform of 20 V amplitude, 10 msec duration and 10 msec recovery.

CHAPTER 1

The Thermionic Valve

Introduction

A thermionic valve is a device which utilizes the flow of electrons through a vacuum or near vacuum. Electrons are emitted by a heated cathode and collected by an anode which is generally held at a positive voltage with respect to the cathode. The introduction of other electrodes enables the stream of electrons from cathode to anode to be suitably controlled. The whole electrode assembly is usually mounted in a glass envelope from which all gas has been evacuated, although in some types, a trace of gas is intentionally introduced to modify the valve characteristics.⁽¹⁾

Functional Survey of Valve Types

1.1. THE DIODE

The diode is the simplest form of thermionic valve comprising a heated emitting cathode and a collector anode. It has largely been superseded by the semiconductor diode which, in its various forms, has lower forward resistance, better performance at h.f., no heater requirement, and a true zero.

The characteristic curve of a typical thermionic diode has the form shown in Fig. 1.1b. Anode current I_A is plotted against anode voltage V_A , and an increase in heater voltage is seen to raise the value of I_A at which saturation occurs. Because electrons leave the cathode with a finite velocity, some anode current flows when $V_A = 0$. This current increases with cathode

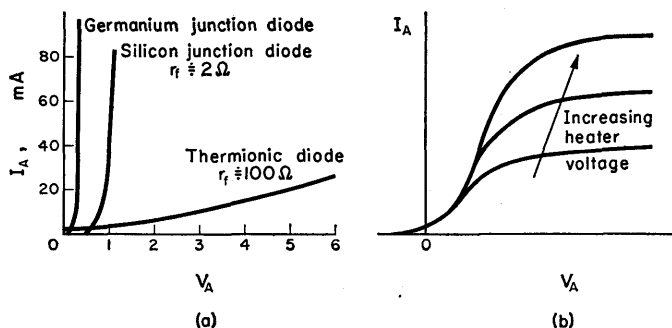


FIG. 1.1. (a) Comparison of thermionic and semiconductor diodes.
(b) Effect of heater voltages on diode characteristics.

temperature giving a displacement of the characteristic to the left, of approximately 0.1 V per 10% change in heater voltage.

Below saturation, the Three-halves Power Law⁽²⁾ holds, i.e.

$$I_A = kV_A^{3/2}, \quad (1.1)$$

where k is a constant determined by the geometry of the valve.

Applications. Typical applications of the thermionic diode are illustrated in Fig. 1.2.

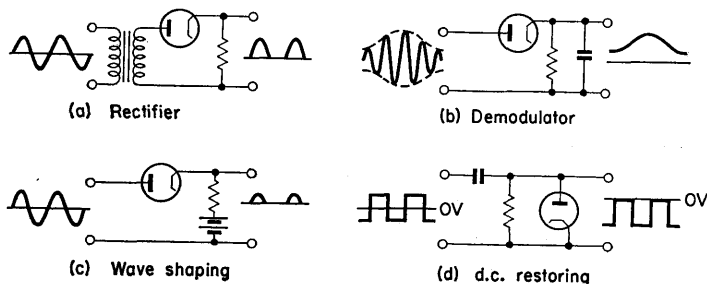


FIG. 1.2. Applications of the thermionic diode.

1.2. THE TRIODE

A triode valve has three electrodes, a control grid being introduced between cathode and anode. The anode current is controlled by varying V_{GK} , the voltage between the grid and cathode. Small changes in V_{GK} can cause large changes in I_A with negligible expenditure of power in the grid circuit.

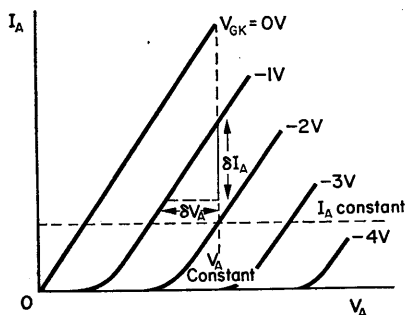


FIG. 1.3. Typical anode characteristics of a triode.

A typical family of anode characteristic curves is given in Fig. 1.3 in which I_A is plotted against V_A with V_{GK} as parameter.

Using these curves, three fundamental relationships may be defined.

(1) *Differential Anode Resistance*

The gradient of a curve at any point is

$$\left[\frac{\partial I_A}{\partial V_A} \right] (V_G \text{ constant}) \equiv g_a = \frac{1}{r_a}, \quad (1.2)$$

where r_a is the differential anode resistance.

(2) *Mutual Conductance*

Intercepts of lines parallel to the current axis give

$$\left[\frac{\delta I_A}{\delta V_G} \right] (V_A \text{ constant})_{\text{def}} g_m, \quad (1.3)$$

where g_m is the mutual conductance or transconductance.

(3) *Amplification Factor*

Intercepts of lines parallel to the voltage axis give

$$\left[\frac{\delta V_A}{\delta V_G} \right] (I_A \text{ constant})_{\text{def}} \mu, \quad (1.4)$$

where μ is the amplification factor.

Expression (1.1), giving the anode current of a diode as a function of anode voltage, can be extended for the triode

$$I_A = K \left(V_G + \frac{V_A}{\mu} \right)^{3/2}. \quad (1.5)$$

Thus if V_G is negative and $V_G = -V_A/\mu$, then $I_A = 0$. This value of grid voltage is the *grid cut-off voltage* $V_{Gc/o}$, and is a function of μ and anode voltage.

EXAMPLE. With an anode voltage of 180 V, a valve having $\mu = 50$ has a grid cut-off voltage,

$$V_{Gc/o} = -V_A/\mu = -180/50 = -3.6 \text{ V}.$$

Since the cut-off voltage is inversely proportional to μ , high μ valves have a smaller input handling capacity than low μ types for a given V_A . Usual operation is with the grid voltage in the range 0 V to $V_{Gc/o}$. If the grid is positive with respect to the cathode, it will attract electrons and grid current will flow. Under these conditions there is a low resistance between grid and cathode, of the order of 1000 Ω .

There are three general types of triode valves, typified by the 12AU7, 12AX7 and 12AT7, whose anode characteristics are given in Fig. 1.4.

- (a) Low μ , low g_m : 12AU7 with $\mu = 20$ and $g_m = 2 \text{ mA/V}$.
- (b) High μ , low g_m : 12AX7 with $\mu = 100$ and $g_m = 2 \text{ mA/V}$.
- (c) Medium μ , high g_m : 12AT7 with $\mu = 50$ and $g_m = 4 \text{ mA/V}$.

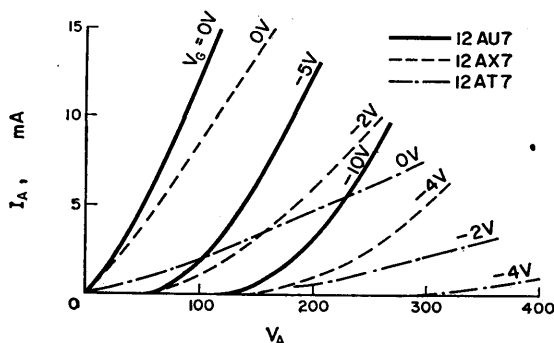


FIG. 1.4. Anode characteristics of 12AT7, 12AU7 and 12AX7 triodes.

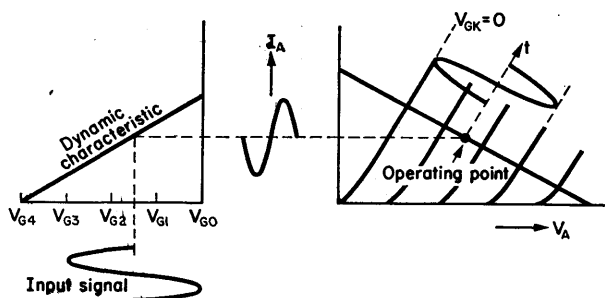


FIG. 1.5. The triode as a linear amplifier.

Suggested uses for these three groups are:

- (a) *Low μ* . Where large input signals are to be handled, such as in frequency multiplying tuned amplifier stages.

- (b) *High g_m .* Cathode follower stage where the output resistance tends to $1/g_m$.
- (c) *High μ .* A voltage amplifier where the highest possible gain is required. For any common cathode amplifier the maximum gain is μ .

The group of valves having high g_m and medium μ is probably the more generally applicable type.

Applications. Amplifiers at low frequencies where inter-electrode capacitance has only limited effect.

Tuned amplifiers at v.h.f. where the low noise performance of a triode makes it preferable to a pentode.⁽³⁾

Oscillators of both sinusoidal and relaxation types. In many cases two triodes are mounted in the same envelope. This is very convenient for pulse networks of the multivibrator type.

1.3. THE TETRODE (FIG. 1.6)

The screen grid was introduced to enable h.f. amplification to be accomplished without the necessity of neutralizing the grid to anode capacitance (§ 1.5). However, secondary emission

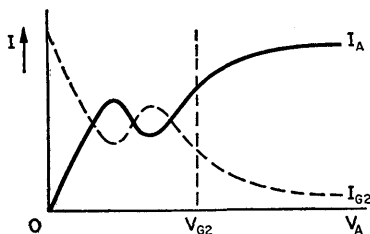


FIG. 1.6. Elementary tetrode characteristics, showing negative resistance region due to secondary emission.

effects,⁽²⁾ when the anode is at a lower voltage than the screen grid, reduce the usefulness of the valve. This limitation led to the introduction of the suppressor grid in the pentode.

Beam tetrodes, in which the electron stream is directed in such a manner as to give a potential minimum between the

screen grid and anode, are widely used for low and medium power amplifiers. The screen current in these types is a very small part of the cathode current as the grids are aligned and the screen grid intercepts few electrons.

Since the screen current performs no useful work, in most cases it is desirable that it should be as small as possible.

Applications. In addition to their use as power amplifiers, tetrodes are also widely used as series regulator valves in stabilized power supplies.

1.4. THE PENTODE

The suppressor grid produces a potential minimum between the anode and screen grid which prevents secondary electrons, generated at the anode, from being collected by the screen grid. The suppressor is usually maintained at the cathode voltage, but it can be used as a control grid with respect to anode current. Generally, $V_{Gc/o}$ is of the order of -50 V, but special purpose pentodes have been developed with suppressor cut-off of only a few volts.

Examination of the typical pentode characteristics of Fig. 1.7 shows that beyond $V_A = 100$ V the curves are nearly parallel to

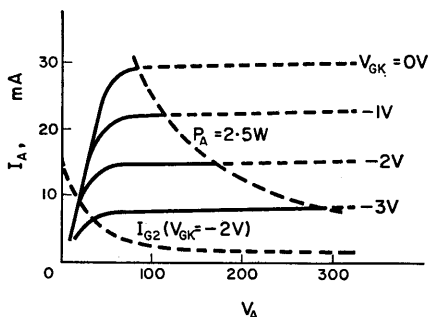


FIG. 1.7. Typical pentode characteristics. The broken line region of the curves shows where the maximum permissible anode dissipation is exceeded.

the voltage axis, indicating a large r_a ($\doteq 1\text{ M}\Omega$). Thus, above the knee of the curves the anode current is largely independent of anode voltage. This is because the screen grid voltage controls the anode current by providing the accelerating electric field. Due to the passive nature of the anode, the μ for pentodes is extremely high, commonly being greater than 1000.

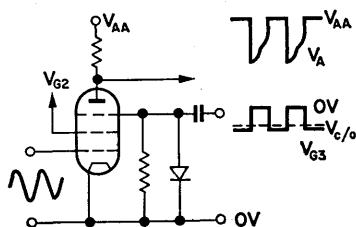


FIG. 1.8. Use of a pentode for gating purposes. The gating waveform is applied to the suppressor grid.

At low values of V_A the curves run together. Thus, for a given load line the value of the minimum anode voltage is fixed. (This is not so for the triode.) The minimum anode voltage for a pentode is known as the *bottoming voltage* and is of importance in many “non-linear” operations. It should be noted that if V_{G2} is fixed, the cathode current $I_A + I_S$ is constant for a given value of V_{G1} .

Applications. Pentodes are widely used as tuned amplifiers because, due to small anode-grid capacitance, stable operation can be achieved without neutralization. Much larger gain-bandwidth products are obtained with pentodes than with triodes, because of their low effective input capacitance. They are also used as voltage amplifiers for low frequency operation where large anode resistors can be used and the inherent high μ of the valves utilized. Very high gain can be obtained with low screen voltage giving the so-called “starvation condition”. The circuit of Fig. 1.8 illustrates how the pentode may be used for gating purposes if the suppressor is used as a control grid. (See § 10.22.)

1.5. GRID INPUT ADMITTANCE

The interelectrode capacitances of a triode may be shown as in Fig. 1.9 in which C_{ag} is the anode-grid capacitance and C_{gk} the capacitance which exists between grid and cathode.

Input admittance = $i_{in}/v_{in} = (i_1 + i_2)/v_{in}$, where

$$i_{in} = v_{in}(1 - A) s C_{ag} \quad \text{and} \quad i_2 = v_{in} s C_{gk}.$$

Therefore

$$\text{Input admittance} = s(C_{gk} + (1 - A) C_{ag}). \quad (1.6)$$

The symbol s is the Laplace variable and where consideration is limited to sinusoidal operation this may be replaced by $j\omega$. Hence,

$$\text{Input admittance} = j\omega [C_{gk} + (1 - A) C_{ag}]. \quad (1.7)$$

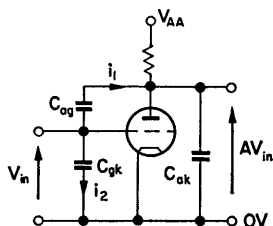


FIG. 1.9. Interelectrode capacitances of a triode.

The input capacitance is thus increased from C_{gk} to

$$C_{gk} + (1 - A) C_{ag},$$

where A is negative and greater than 1 at medium frequencies. This increase in effective input capacitance, due to the presence of anode-grid capacitance is the *Miller effect*,⁽⁴⁾ and it was to reduce this effect that the screen grid was incorporated in the thermionic valve.

1.6. AUXILIARY VOLTAGE SUPPLIES

Cathode Bias

It is common practice to derive the auxiliary voltage supplies from the positive voltage rail which provides the anode supply. For a triode, a grid-cathode bias voltage is normally required to maintain the correct operating point, and cathode bias is used. This has two forms whose use depends on whether the amplifier is capacitor coupled or of the zero frequency type.

The cathode resistor R_K , in Fig. 1.10, in addition to providing the bias voltage, by negative current feedback, stabilizes the working point against variations such as ageing of the valve.

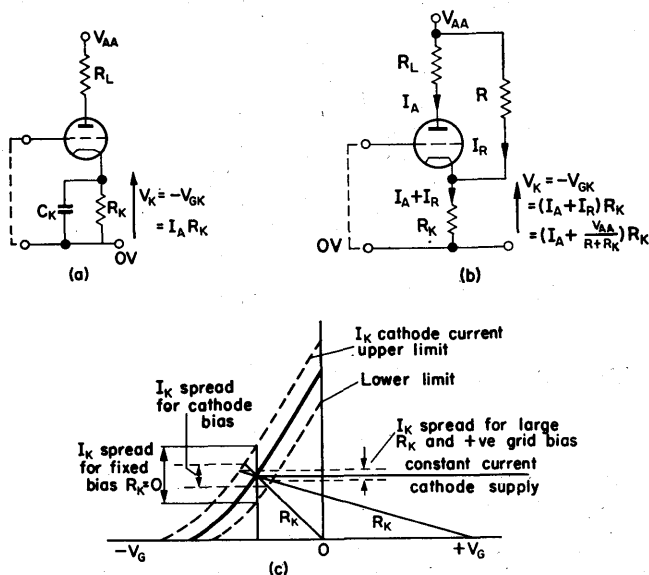


FIG. 1.10. Provision of cathode bias. The possible variation in operating point for cathode bias is less than for fixed grid bias, but is greater than for an ideal constant current supply. This latter can be approached by returning the grid to a positive supply.

To eliminate the negative feedback at signal frequencies and the consequent loss in gain, R_K is bypassed by a capacitor of such value that in the required frequency range its reactance is negligible. (See § 3.6.)

If the loss in gain at zero frequency cannot be tolerated, the circuit of Fig. 1.10b may be used. Negative feedback is greatly

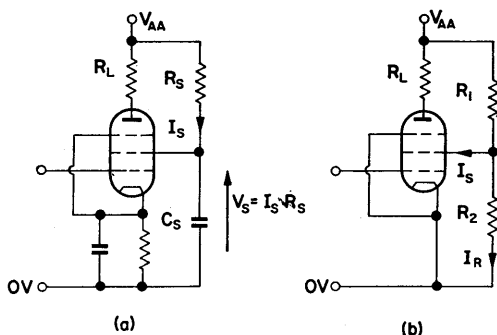


FIG. 1.11. Provision of screen grid supply from positive voltage rail, (a) current, (b) voltage.

reduced by making R_K as small as possible, and the correct bias obtained by the steady current drawn through R . A typical value for I_R is $10I_A$.

Then,

$$I_R = V_{AA}/(R + R_K) \doteq V_{AA}/R.$$

Also,

$$R_K = V_{GK}/(I_A + I_R) \doteq V_{GK}/I_R.$$

Therefore

$$V_K = -V_{GK} = (I_A + I_R) R_K = [I_A + V_{AA}/(R + R_K)] R_K.$$

1.7. SCREEN GRID SUPPLY

There are two commonly used methods of obtaining the screen grid supply from the positive voltage rail, (1) current and (2) voltage, as shown in Fig. 1.11 a and b.

Screen Current Supply

If V_S is the required screen voltage, the current at that voltage is determined either from the valve characteristic curves or experimentally. Then $R_S = (V_{AA} - V_S)/I_S$. To eliminate gain reduction the screen must be decoupled by the capacitor C_S . Negative feedback makes this method unsuitable for use in Zero Frequency Amplifiers.

Screen Voltage Supply

The voltage V_S is kept relatively constant by making I_R much greater than I_S , typically $I_R = 10I_S$. Then $R_2 = V_S/I_R$, and $R_1 = (V_{AA} - V_S)/(I_R + I_S)$. The disadvantage of this method is the drain on the h.t. power supply.

1.8. ELEMENTARY VALVE EQUIVALENT NETWORKS

For input signals of small amplitude the valve parameters g_m , μ and r_a can be considered as constants whose values are those measured at the operating point. Figure 1.12 shows how these parameters vary with I_A .

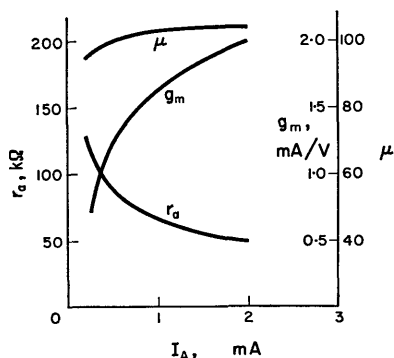


FIG. 1.12. Variation of g_m , μ and r_a , with I_A as parameter, for an ECC85.

The anode current is a function of both grid voltage and anode voltage:

$$I_A = \frac{\delta I_A}{\delta V_G} \Delta V_G + \frac{\delta I_A}{\delta V_A} \Delta V_A. \quad (1.8)$$

If, for convenience, ΔI_A is written as i_a , an incremental change in anode current about the standing value I_A , and if ΔV_A is similarly represented as v_a , then

$$i_a = g_m v_g + g_a v_a. \quad (1.9)$$

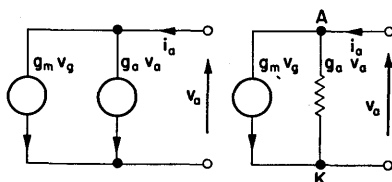


FIG. 1.13. Diagrammatic representation of eqn. (1.9) ($i_a = g_m v_g + g_a v_a$), using current generators.

This may be represented diagrammatically in the forms of Fig. 1.13.

Introducing an anode load resistor R_L as in Fig. 1.14a, the equivalent network may be further developed as in Fig. 1.14b.

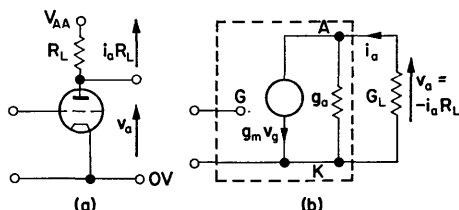


FIG. 1.14. Triode with anode load and its equivalent network.

As the anode voltage v_a is a function of anode current, i.e. $v_a = -i_a R_L$, eqn. (1.9) may be written thus:

$$i_a = g_m v_g - i_a R_L / r_a.$$

Therefore

$$i_a r_a = g_m v_g r_a - i_a R_L.$$

But,

$$\mu = g_m \cdot r_a, \quad (1.10)$$

therefore

$$i_a = \frac{\mu v_g}{r_a + R_L}.$$

This expression provides the alternative equivalent network of Fig. 1.15.

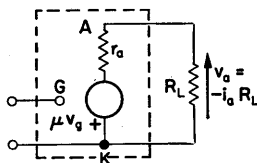


FIG. 1.15. Alternative equivalent network of the circuit of Fig. 1.14, using a voltage generator.

The voltage gain of the circuit may be written in the two forms as represented in the two equivalent networks. Thus:

$$v_a/v_g = -g_m/(g_a + G_L) = -g_m R, \quad (1.11 a)$$

where

$$R = 1/(g_a + G_L),$$

and

$$\frac{v_a}{v_g} = \frac{-\mu R_L}{r_a + R_L}. \quad (1.11 b)$$

A valve used in this way is said to be in *common cathode operation*.

1.9. RESISTANCE IN THE CATHODE

The circuit equations of Fig. 1.16 are

$$i_a = \frac{\mu v_{gk}}{r_a + R_L + R_K} \quad \text{and} \quad v_{gk} = v_{in} - i_a R_K.$$

Therefore

$$i_a = \frac{\mu v_{in}}{r_a + R_L + (\mu + 1) R_K} = \frac{\mu v_{in}}{r'_a + R_L}, \quad (1.12)$$

where

$$r'_a = r_a + (\mu + 1) R_K.$$

The effective value of anode resistance is thus increased by the term $(\mu + 1) R_K$, and the equivalent network redrawn as in Fig. 1.17.

EXAMPLE. Given a valve having an anode resistance $r_a = 10 \text{ k}\Omega$ and gain $\mu = 50$, let $R_K = 1 \text{ k}\Omega$, and $R_L = 10 \text{ k}\Omega$. $r'_a = r_a + (\mu + 1) R_K = 10 \text{ k}\Omega + 51 \text{ k}\Omega = 61 \text{ k}\Omega$.

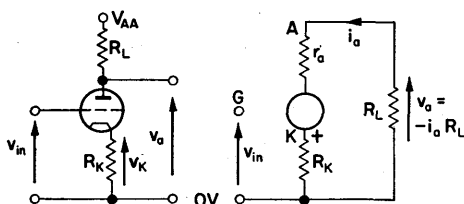


FIG. 1.16. Effect of cathode resistor.

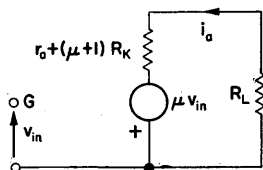


FIG. 1.17. Alternative equivalent network of the circuit of Fig. 1.16.

R_K is multiplied by $(\mu + 1)$ and transferred to the anode circuit.

In the absence of a cathode resistor, the voltage gain would be

$$A_v = -\mu R_L / (r_a + R_L) = -25.$$

This is modified by the cathode resistor thus:

$$A_v = -\mu R_L / (r'_a + R_L) = -7.$$

In the presence of both anode and cathode resistors, cathode voltage,

$$v_k = i_a R_K = \frac{\mu R_K}{r_a + R_L + (\mu + 1) R_K} v_{in}. \quad (1.13)$$

$$\frac{\mu R_K / (\mu + 1)}{[(r_a + R_L) / (\mu + 1)] + R_K} v_{in} = \frac{\mu'' R_K}{r_a'' + R_K} v_{in}, \quad (1.14)$$

where

$$\mu'' = \frac{\mu}{\mu + 1} \quad \text{and} \quad r_a'' = \frac{r_a + R_L}{\mu + 1}.$$

EXAMPLE. Using the same values as in the previous example,

$$\mu'' = 50/51 = 0.98, \quad r_a'' = 20 \text{ k}\Omega / 51 = 390 \Omega,$$

and using expression (1.14),

$$\frac{v_k}{v_{in}} = \frac{0.98 \times 1 \text{ k}\Omega}{390 + 1 \text{ k}\Omega} = 0.7.$$

In the special case when $R_L = 0$, the valve is operated as a *cathode follower*.

Then,

$$\text{gain} = \frac{v_k}{v_{in}} = \frac{\mu R_K / (\mu + 1)}{[r_a / (\mu + 1)] + R_K} = 0.81. \quad (1.15)$$

The gain of a cathode follower tends to unity if R_K is much greater than $r_a / (\mu + 1)$, and μ is much greater than 1.

The output resistance $r_a'' = r_a / (\mu + 1) \doteq 192 \Omega$.

The output resistance of a cathode follower tends to $1/g_m$ if μ is much greater than 1.

The cathode follower is widely used as an impedance converter providing low output impedance from a high impedance source.

1.10. SIGNAL INJECTED AT CATHODE

The circuit of Fig. 1.18 is that of a common of "grounded grid" amplifier:

$$i_a = \frac{\mu v_{gk} - v_{in}}{r_a + R_L} \quad \text{and} \quad v_{gk} = v_{in}.$$

Therefore

$$i_a = \frac{-(\mu + 1) v_{in}}{r_a + R_L}, \quad (1.16)$$

and

$$v_a = \frac{(\mu + 1) v_{in} R_L}{r_a + R_L}. \quad (1.17)$$

This is similar to eqn. (1.11) except that μ has been replaced by $(\mu + 1)$. The main difference between common cathode and

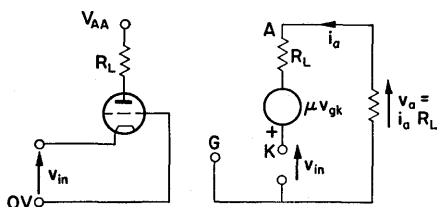


FIG. 1.18. Grounded grid amplifier. The input resistance is $(r_a + R_L)/(\mu + 1)$ because the anode current flows through the input circuit. No signal inversion occurs.

common grid operation is the resistance which the valve presents to the input signal source. In the common cathode case this is ideally infinite. The input resistance of a common grid amplifier, however, is

$$R_{in} = \frac{v_{in}}{i_a} \quad (\text{since the anode current flows through the input circuit}) \quad (1.18)$$

$$= v_{in} \times \frac{r_a + R_L}{(\mu + 1) v_{in}} = \frac{r_a + R_L}{(\mu + 1)}.$$

This normally has a value of a few hundred ohms, which means that the amplifier must be fed from a low resistance source such as a cathode follower.

1.11. DESIGN FROM CHARACTERISTICS

The Load Line

For a given resistive load a line can be drawn on the anode characteristic giving the locus of points representing the anode voltage and current corresponding to the grid-to-cathode voltage. This line, the load line, has slope $-1/R_L$ (Fig. 1.19).

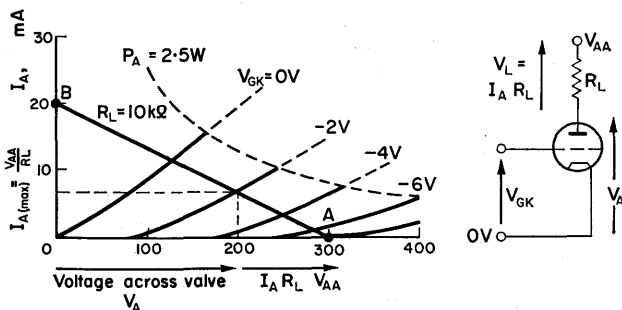


FIG. 1.19. Load line relationships, $R_L = 15 \text{ k}\Omega$, $V_{AA} = 300 \text{ V}$, operating grid bias $= -2 \text{ V}$.

Points *A* and *B* are the limits of the locus. When the valve is "cut off" the anode current is zero and the anode voltage is the supply voltage, that is, point *A* on the characteristics ($V_A = V_{AA}$, $I_A = 0$). Point *B* is found by determining the current that would flow if the voltage across the valve was zero, that is $I_{A(\text{max})} = V_{AA}/R_L$.

The equation of the load line is thus:

$$I_A = -G_L V_A + I_{A(\text{max})}. \quad (1.19)$$

For normal linear operation a point on the load line is chosen as operating point so that equal excursions in grid voltage about

that point give equal intervals on the load line, as shown in Fig. 1.5.

Modification for Cathode Bias

In the presence of a cathode resistor some modification of Fig. 1.19 is necessary. Let the cathode resistor be used to provide a bias of 2 V, then, at a standing anode current of $I_A = 6.4$ mA,

$$R_K = -V_{GK}/I_A = 310 \Omega.$$

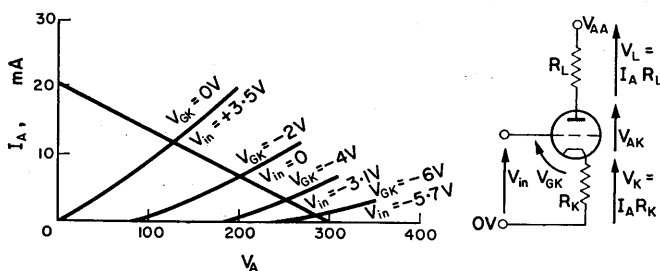


FIG. 1.20. Effect of cathode bias resistor. Note the increased range of input voltage.

This is negligible compared with $R_L = 15$ k Ω and the load line is unchanged. However, the voltage V_{GK} on the characteristics is no longer the input voltage, since

$$V_{in} = V_{GK} + I_A R_K. \quad (1.20)$$

Using this expression Table 1.1 can be constructed, and Fig. 1.19 redrawn as in Fig. 1.20.

It is apparent that the gain has been reduced and that the voltage handling capacity of the valve increased from 6 to 9 V. It is now also possible for the input voltage to go positive without the valve drawing grid current. In a.c. amplifiers the cathode resistor is normally bypassed with a large capacitor, and at the operating frequencies this effect of R_K is eliminated.

TABLE 1.1

V_{GK}	I_A (mA)	$V_K = I_A R_K$	$V_{in} = V_{GK} + I_A R_K$
0	11.4	3.5	3.5
-2	6.4	2.0	0
-4	3.0	0.93	-3.1
-6	0.9	0.28	-5.7

Valve with Large Cathode Resistor

If R_K is large it is necessary to plot a load line having the value $R_L + R_K$, and, as previously, consider the circuit as having an input voltage $V_{in} = V_{GK} + I_A R_K$.

EXAMPLE. The symmetrical cathode coupled amplifier of Fig. 1.21. The anode voltages can be determined by considering

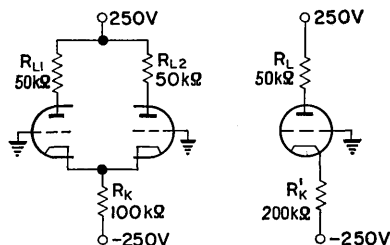


FIG. 1.21. Symmetrical cathode coupled amplifier with an equivalent single valve circuit for the balanced condition.

one valve. Since the anode currents of both valves pass through R_K , the cathode voltage is $V_K = 2I_A R_K = I_A \times 2R_K$, i.e. as if the anode current of one valve passes through a cathode resistor equal to $2R_K$. A load line must therefore be drawn having a value $R_L + 2R_K$ as in Fig. 1.22. The approximate d.c. conditions can be found in the following way. With the grids earthed the voltage between the negative rail and grid, $V_{in} = 250$ V. If the valves are to work in a linear manner the voltage dropped across R_K must be within a few volts of that between the negative rail

and the grid, i.e. 250 V. The cathode current is thus determined by the value of the cathode resistor.

$$I_K = V_K/R_K = 250/100 \text{ k}\Omega = 2.5 \text{ mA}.$$

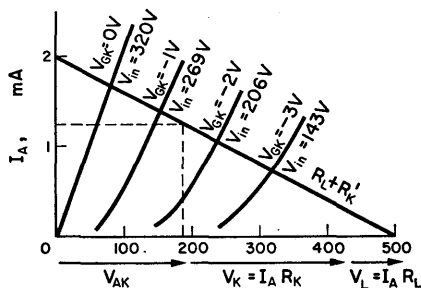


FIG. 1.22. Load line for $R_L + 2R_K$.

This current is shared between the two valves

$$I_{A1} = I_{A2} = 1.25 \text{ mA}$$

in the balanced condition.

$$V_{A1} = V_{A2} = V_{AA} - I_A R_L = 250 - (1.25 \times 50 \text{ k}\Omega) = 187.5 \text{ V}.$$

From the load line $V_{GK} = -1.3 \text{ V}$.

This method of determining the approximate d.c. conditions can often be used with cathode coupled circuits.

Cathode Follower

In Fig. 1.23 the load line for $R_K = 10 \text{ k}\Omega$ is set up on the characteristic curves

$$V_{in} = V_{GK} + V_K = I_A R_K,$$

where V_K is the output voltage V_{out} . From the load line the V_{out}/V_{in} curve of Fig. 1.24 can be constructed.

When the input voltage $V_{in} = 0$ the output voltage equals $V_{out} = -V_{GK} = 6.5 \text{ V}$ from the load line. When the cathode resistor is reduced, the voltage that the cathode follower can use

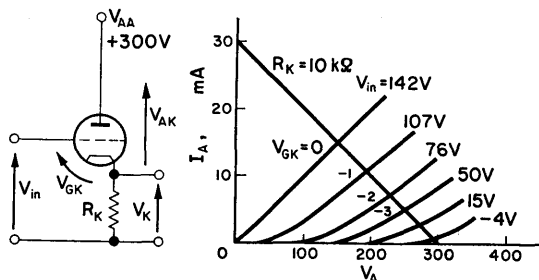


FIG. 1.23. The cathode follower. A load line for $R_K = 10\text{ k}\Omega$ is plotted on the characteristic curves, together with the equivalent input voltages.

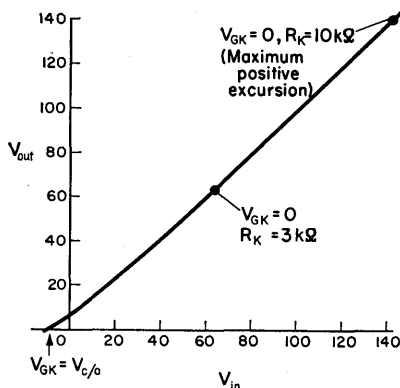


FIG. 1.24. V_{out}/V_{in} curve for the cathode follower. Note that an increase in the value of R_K increases the signal handling ability without changing the gain from unity.

over its linear range is reduced, but the input/output voltage relationship is little changed. The output voltage is a linear function of the input voltage and largely independent of the output current.

CHAPTER 2

The Semiconductor

Introduction

A semiconductor material is one having a specific resistance intermediate between that of an insulator and a conductor, the value of which decreases rapidly with rising temperature. Considering the atomic structure of such material, if sufficient energy is provided, by heating for instance, electrons will be released from their nuclei, each leaving behind it a hole. Under the influence of an electric field, an electric current will flow, which may be regarded as a movement of electrons in one direction and a movement of holes in the opposite direction. In the case of a pure or intrinsic semiconductor the numbers of holes and free electrons are always equal. The two materials commonly in use are germanium and silicon, both of which come from chemical Group IV.

If a semiconductor is doped with an element from Group V, say arsenic, the equality of free electrons and holes will no longer exist, there being an excess of free electrons. An electric current through such a material will then consist mostly of a flow of electrons in one direction and relatively few holes moving in the opposite direction. In this case the electrons are called *majority carriers* and the holes, *minority carriers*. A semiconductor doped in this way is known as *n* type material since the majority carriers possess negative charge.

A similar state of affairs will occur if the semiconductor is doped with an element such as indium from Group III. However, in this case an excess of holes will exist and these are the

majority carriers. Since the majority carrier possesses positive charge such a material is known as p type.

2.1. THE JUNCTION DIODE⁽⁵⁾

If a piece of semiconductor material is doped with p type impurity at one end and n type impurity at the other, then there will exist a junction between the two types. Some holes in the p region will diffuse into the n region leaving the p region slightly

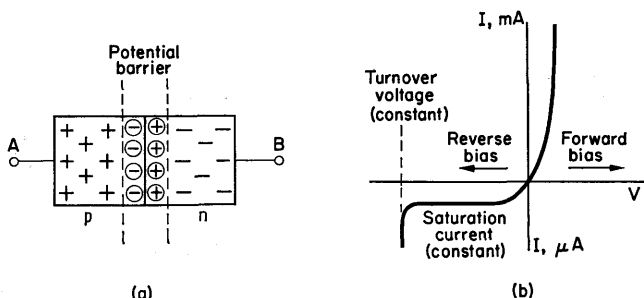


FIG. 2.1. (a) Semiconductor junction showing the potential barrier caused by the diffusion of charge carriers. Under these conditions a potential exists between A and B . (b) Characteristic curve of a semiconductor diode. Note the change in current scale as the curve passes through the origin.

negative. Similarly, electrons from the n region will diffuse into the p region causing it to become even more negative and leaving the n region slightly positive. Due to this diffusion the junction assumes a condition of dynamic equilibrium and acts as a potential barrier which opposes any further diffusion of charge. The condition is illustrated in Fig. 2.1a.

If bias is applied to the terminals such that A is positive with respect to B , it has the effect of reducing the potential barrier, and current will flow. This current increases exponentially with increasing voltage until the potential barrier is reduced to zero, when it is limited only by the resistance of the semiconductor material. If the bias is now reversed, the potential barrier is

increased and the majority carrier is blocked. There is, however, a finite current which flows, called the reverse saturation current. As the reverse bias is increased this current remains constant until the turnover point is reached, when the current increases rapidly at constant voltage (Fig. 2.1 b).

Thus, if a junction is biased in the forward direction, a fairly large current will flow, but under reverse bias conditions, provided the turnover voltage is not reached, the current is extremely small. In other words the device acts as a rectifier.

2.2. LEAKAGE CURRENT

This current varies from 1 to 200 μA for small germanium units, while silicon units have values much less than this. In both cases the current is dependent on temperature as is shown in Fig. 2.2 for a transistor with open circuit emitter.

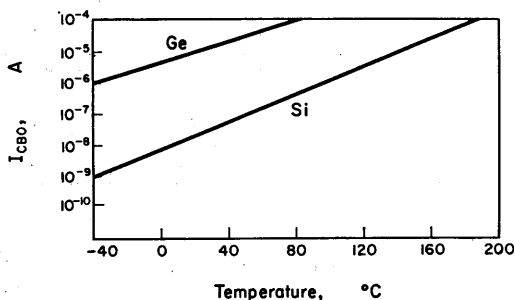


FIG. 2.2. Relationship between reverse saturation current and temperature for germanium and silicon.

The main causes of leakage current are:

- (a) Minority carriers generated thermally, radiation effects and crystal imperfections. In these cases hole-electron pairs are formed and the charge carrier, which is the minority carrier, travels across the junction which is biased against the majority carrier. Generally, thermal generation is the more significant cause and the reverse saturation

current will increase by 10% for 1°C rise (or doubles for an 8°C rise). Because of this, the use of germanium devices is restricted to temperatures below about 70°C. Silicon, however, is usable up to 150°C.

- (b) Surface leakage. This is a significant factor with silicon devices as the thermal current is very small within the unit itself, and surface paths, often caused by contamination, reduce the reverse resistance.

2.3. THE JUNCTION TRANSISTOR⁽⁶⁾

A typical alloy type junction transistor is illustrated in Fig. 2.3a and consists of a sandwich of doped semiconductor material, the base being more lightly doped than the collector and emitter,

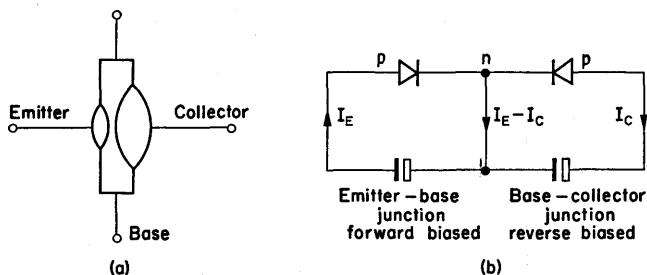


FIG. 2.3. (a) Schematic representation of an alloy transistor. (b) Representation of a *pnp* transistor by two diodes. I_E is the emitter current, I_C is the collector current and the base current

$$I_B = I_E - I_C.$$

and very thin. As the names suggest, the emitter roughly corresponds to the cathode of a thermionic valve, and the collector to the anode. A *pnp* transistor is one in which the emitter and collector are *p* type materials and the base is *n* type. There is a *pn* junction between emitter and base, and an *np* junction between base and collector, so it may be represented by two diodes as in Fig. 2.3b. With the batteries connected as shown, the emitter-base junction is forward biased, thus reducing the potential

barrier, while the base-collector junction is reverse biased and its potential barrier therefore increased, as illustrated in Fig. 2.4. The forward bias of the emitter-base junction causes holes to be injected into the base where, since the base is n type, they are minority carriers. Provided that they do not recombine with

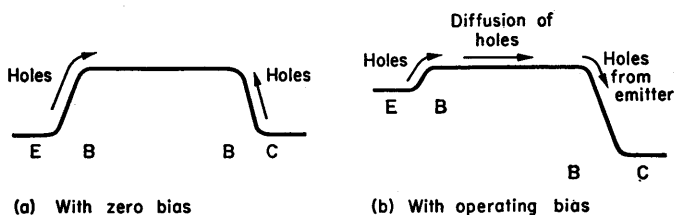


FIG. 2.4. Potential diagrams of a *pnp* transistor showing the effect of biasing. The potential barriers are drawn as hills which the holes have to surmount.

electrons in the base region, these holes will diffuse towards the base-collector junction. This junction is, however, forward biased for such minority carriers, which are swept into the collector region and give rise to a current in the collector circuit.

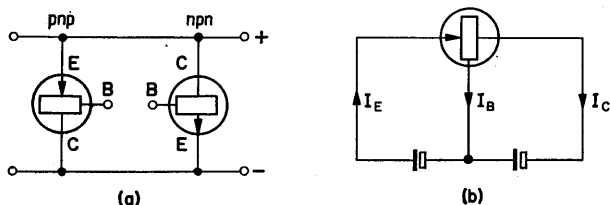


FIG. 2.5. (a) Diagrammatic representation of *pnp* and *npn* transistors. (b) Representation of the fundamental current relationships in a junction transistor.

Not all the holes flowing from the emitter into the base will pass into the collector region as a small proportion will recombine with electrons in the n type base. This loss of charge in the base layer is made good by a flow of base current. Varying

the base current varies the voltage across the emitter junction, and so controls the emitter-collector current.

The action of an *npn* transistor is similar, except that the minority carriers through the base region are electrons instead of holes. Whichever type of transistor is used, it is necessary that the emitter-base junction be forward biased, that is, with the supply negative connected to device *n* and the supply positive connected to device *p*. Likewise, the base-collector junction must have reverse bias. This means that a *pnp* transistor has its collector taken to negative while an *npn* type has its collector taken to positive. Since in thermionic valve circuits it is conventional to draw the positive rail at the top of the circuit diagram, in this book this convention is maintained for transistor circuits also. The two types of transistors are therefore represented diagrammatically as in Fig. 2.5a.

2.4. FUNDAMENTAL CURRENT RELATIONSHIPS

In Fig. 2.5b,

$$I_E = I_B + I_C. \quad (2.1)$$

Let

$$\Delta I_B = i_b,$$

$$\Delta I_C = i_c,$$

$$\Delta I_E = i_e.$$

Let the symbol α denote the ratio between collector current and emitter current thus, $\alpha = i_c/i_e$. This will be less than unity, since i_c is less than i_e because of recombination of the minority carriers in the base region. A typical value for α (*the short circuit current gain*) is 0.98.

When a circuit is arranged such that the signal enters at the emitter and is recovered at the collector, the transistor is said to be in *common base* operation. Since $i_b = i_e - i_c$,

$$\frac{i_c}{i_b} = \frac{i_c}{i_e - i_c} = \frac{\alpha}{1 - \alpha}.$$

The ratio between collector current and base current is denoted by the symbol β :

$$\beta = \alpha / (1 - \alpha) \quad (\beta = 49 \text{ for } \alpha = 0.98).$$

Usually β ranges from 10 to 150. This implies a current gain if the signal current enters at the base and is recovered at the collector. A transistor used in this way is said to be in *common emitter* operation. This is the most frequently used mode of operation, because of the current gain which may be achieved in this way.

In common emitter operation, the leakage current I_{CEO} that flows (when $I_E = 0$) is approximately βI_{CBO} . That is, β times the leakage current in common base operation. As the collector current is small, and current gain is a function of collector current (low for small currents), the effective β will be of the order of half the usual value. Thus, in the case where $\alpha = 0.98$ and $\beta = 49$, if $I_{CBO} = 5 \mu\text{A}$, then $I_{CEO} \doteq 125 \mu\text{A}$.

2.5. ELEMENTARY CONSIDERATIONS OF FREQUENCY EFFECTS⁽⁷⁾

Charge carriers take a finite time to diffuse through the base and this causes a reduction in current gain at high frequencies. If the current gain at zero frequency $\alpha_0 = i_c/i_e$, then

$$\alpha = \alpha_0 \left/ \left(1 + \frac{jf}{f_\alpha} \right) \right., \quad (2.2)$$

with reasonable accuracy, where f_α is the frequency at which the gain falls to $0.7\alpha_0$. Similarly, since $\beta = \alpha/(1 - \alpha)$,

$$\beta = \beta_0 \left/ \left(1 + \frac{jf}{f_\beta} \right) \right., \quad (2.3)$$

where β falls to $0.7\beta_0$ at $f_\beta = (1 - \alpha)f_\alpha$. This is illustrated for the OC206 in Fig. 2.6.

The curve for the short circuit current gain follows closely the

locus of a passive lag (a capacitor shunted by a resistor) up to a frequency of $f_a/2$. This relationship is used by Ebers and Moll in switching analysis.⁽⁸⁾ The common emitter short circuit current gain β can be obtained from Fig. 2.6b. It falls from β_0 to

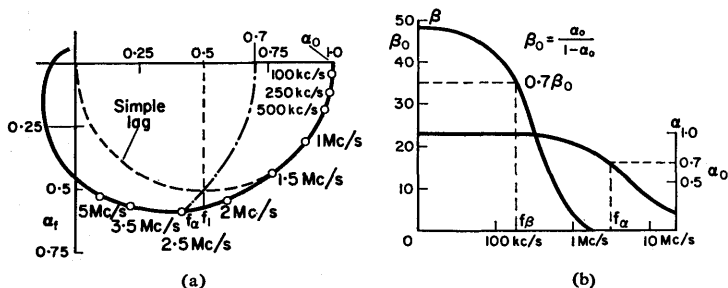


FIG. 2.6. Variation of short circuit current gain α with frequency, for an OC206. Up to 1.5 Mc/s the curve for α closely follows that of a passive lag.

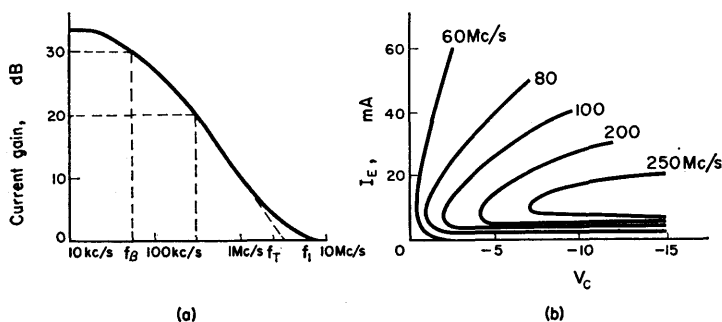


FIG. 2.7. (a) Curve showing relationship between f_β , f_T and f_1 . For $f_T = 3$ Mc/s and $\beta = 10$ (20 dB), bandwidth $= f_T/\beta = 300$ kc/s. (b) Variation in gain-bandwidth product, with operating conditions, for a high frequency transistor.

$0.7\beta_0$ at approximately $(1 - \alpha)f_\alpha$, and to unity at $\alpha_R = 0.5$. This latter frequency is known as f_1 :

$$f_1 = \frac{f_\alpha}{1 + \varphi}, \quad (2.4)$$

where $\varphi = 0.2$ for homogeneous base transistors and varies between 0.2 and unity for graded base transistors (§ 2.8).

Gain-bandwidth Product $f_T^{(7)}$

If β is plotted against frequency, both on logarithmic scales, the relationship is as shown in Fig. 2.7a. The gain-bandwidth product f_T is obtained by projecting the straight section of the curve to intercept the unity gain line (0 dB). It can thus be determined by finding β at any frequency on the 20 dB/decade slope and multiplying this value by the frequency at which it is measured. Thus, in Fig. 2.7a, $f_T = 3$ Mc/s, and, at 20 dB ($\beta = 10$) the bandwidth is 300 kc/s. The gain-bandwidth product varies with operating conditions, as illustrated in Fig. 2.7b.

2.6. VOLTAGE BREAKDOWN⁽⁹⁾

When the reverse voltage applied to a junction is increased above a certain figure a "breakdown" will occur and the reverse resistance will fall from the usual high value to a low one. This, in itself, will not damage the unit, but it is possible, under the breakdown condition, for large currents to flow if there is no controlling external resistance.

The three mechanisms of breakdown are:

- (a) Punch through.
- (b) Zener.
- (c) Avalanche.

(a) Punch Through

The width of the depletion layer of a reverse biased junction is approximately proportional to the square root of the voltage, and it is possible for it to extend to the emitter junction. This provides a way for holes to reach the collector, independent of the base, and causes a short circuit between emitter and collector. Thin based transistors, such as surface barrier types, have voltage

limitations due to punch through, typically having punch through values of $V_{PT} = -5$ V.

(b) Zener Breakdown

This occurs when the number of added impurities is high (the n and p materials have low resistivity). Application of reverse bias can cause the valence band of the p material to overlap the conduction band of the n material and the junction will break down. This is usually of no significance in the case of transistors where the doping levels are low, but the phenomenon is usefully employed in Zener and tunnel diodes. Zener breakdown is usually confined to below 10 V.

(c) Avalanche

In lightly doped junctions, carriers entering the depletion layer are accelerated by the field set up by the collector-base voltage. If this voltage is high enough, the carriers can ionize fixed atoms giving rise to hole-electron pairs which, in turn, can cause further ionization. The voltage at which this happens is the "avalanche voltage".

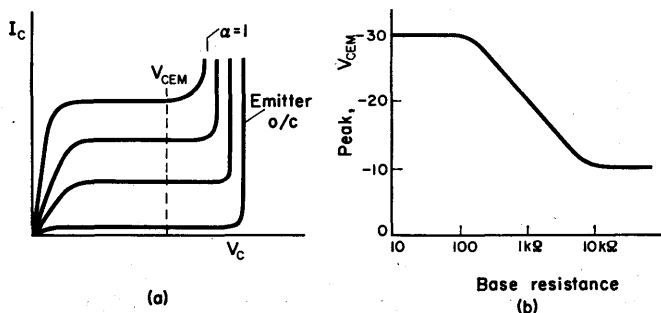


FIG. 2.8. (a) Typical collector characteristic, with V_C extended into the breakdown region, for common base operation. (b) Maximum permissible collector voltage, for a given base resistance, with transistor in common emitter connection.

The maximum collector voltage rating is frequently low for applications where the base resistance is high, and is a minimum for open circuited base V_{CEM} . The maximum collector rating is V_{CBM} which is the collector-base voltage with emitter open circuit. In pulse circuits, the base-emitter junction is frequently reverse biased, and there is similarly a maximum reverse voltage V_{BEM} .

Typical values for a transistor could be:

$$V_{CEM} = 40 \text{ V}; \quad V_{CBM} = 20 \text{ V}; \quad V_{BEM} = 6 \text{ V}.$$

In most applications a safe working voltage will be between V_{CEM} and V_{CBM} .

In Fig. 2.8a is plotted a typical collector characteristic with V_C extended into the breakdown region. Figure 2.8b illustrates how the maximum peak collector voltage, for an OC122, varies with base resistance.

2.7. POWER DISSIPATION⁽¹⁰⁾

In a transistor most power dissipation occurs in the collector-base junction where the voltage gradient is a maximum. Using peak instantaneous values, collector dissipation,

$$P_C \doteq v_{CE} i_C \doteq \frac{T_{JM} - T}{\theta}, \quad (2.5)$$

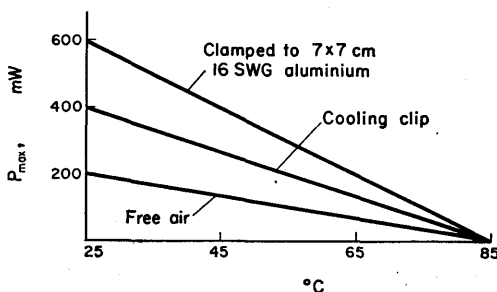


FIG. 2.9. The use of a heat sink reduces the thermal resistance θ , and thus increases the maximum permissible dissipation for a given transistor.

where T_{JM} is the maximum junction temperature, T is the ambient temperature, and θ is the rise in temperature, for a given unit of power dissipation (thermal resistance).

EXAMPLE. Ambient temperature 35°C , $T_{JM} = 70^{\circ}\text{C}$ and $\theta = 1^{\circ}\text{C/mW}$,

$$P_C = \frac{35^{\circ}\text{C}}{1^{\circ}\text{C/mW}} = 35 \text{ mW}.$$

Figure 2.9 illustrates how the use of a heat sink reduces the value of θ for a given transistor.

2.8. SUMMARY OF TRANSISTOR TYPES

Low and Medium Frequency Types

Two general processes are employed, (a) alloy, and (b) grown junction. Alloy types have a low collector resistance when bot-tomed and are suitable for amplifiers and switches at low and high powers. However, f_1 is limited to approximately 20 Mc/s and beyond this frequency base thinness leads to mechanical weakness.

Medium to High Frequency Types

Most new techniques are developing devices in this category, providing values of f_1 between 20 and 1000 Mc/s.

Surface Barrier

Historically, the first mass produced h.f. transistor, the sur-face barrier type, uses an accurately controlled etching process to produce a very thin base upon which the emitter and collector are electro-deposited. The main limitation is low punch through voltage (6 V), and this manufacturing technique has been super-seded by the micro-alloy process.

Diffused Base

These are sometimes known as Graded Base, or Drift Transistors. By varying the resistivity of the base material, an electric field is formed which causes the charge carriers to drift across the base, rather than diffuse across, as with a homogeneous base. This reduces the transit time and consequently increases the upper frequency limit.

Mesa

The device is built up on material that forms the collector, and opposite type material is diffused in to form the base. Two strips are alloyed on to the diffused region, one forming the emitter and the other the base contact. The narrow base width provides a high f_1 , and the collector allows high power dissipation.

Epitaxial Mesa

The disadvantage of the Mesa transistor is the large carrier storage which limits switching speed, and the high saturation resistance. Both these limitations are overcome in the epitaxial mesa, by laying a high resistance region on a low resistance substrate, as illustrated in Fig. 2.10.

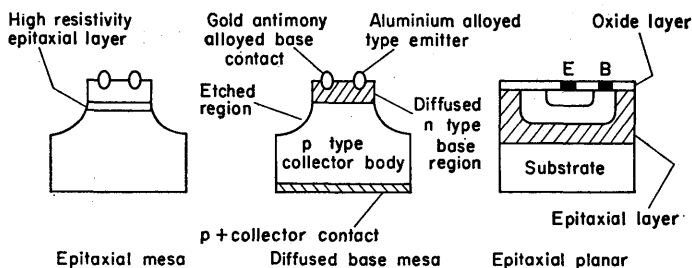


FIG. 2.10. Construction of three widely used transistor types. Compared with the alloy device of Fig. 2.3, the larger collector volume permits much greater dissipation.

Planar

Using silicon as the substrate, the surface is passivated by oxidation, and diffusion is carried out through etched areas. Such a technique reduces leakage current and provides high gain at low current levels. Because of surface passivation the shoulders do not have to be etched away, as is done in the mesa transistor.

2.9. STATIC CHARACTERISTICS OF THE JUNCTION TRANSISTOR

In normal operation the input junction of a transistor is forward biased and, unlike the idealized valve, power has to be supplied to the input terminals. The output current is consequently a function of both the input current and voltage.

Input Characteristics

In Fig. 2.11 curves are plotted of base current against base voltage, with collector voltage constant, for the common emitter mode of operation.

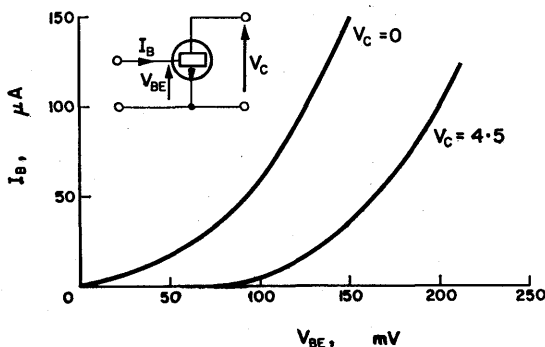


FIG. 2.11. The input characteristic.

$$\text{Differential input resistance } h_i = \left[\frac{\delta V_B}{\delta I_B} \right] (V_C \text{ constant}).$$

Let the differential input resistance be denoted by the symbol h_i , such that

$$h_i \stackrel{\text{def}}{=} \left[\frac{\delta V_B}{\delta I_B} \right] \quad (V_C \text{ constant}). \quad (2.6)$$

Then on the input characteristic curve the slope at any working point is equal to the reciprocal of h_i . It is apparent that the input curves are a function of the collector voltage. The input resistance does not change greatly with collector voltage but varies widely with base voltage. Typical operating values of h_i are in the range 500–2000 Ω for small units.

The Transfer Characteristic

This relates output current to input current and is linear except for very small and very large currents (Fig. 2.12).

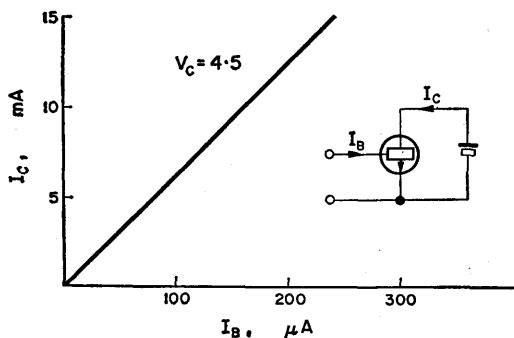


FIG. 2.12. The transfer characteristic. This is linear except for very small and very large currents. The slope of this graph is the

$$\text{current gain, } h_f = \left[\frac{\delta I_B}{\delta I_C} \right] \quad (V_C \text{ constant}).$$

The slope of the transfer characteristic is the current gain, which for the common emitter case is defined as

$$h_f \stackrel{\text{def}}{=} \left[\frac{\delta I_C}{\delta I_B} \right] \quad (V_C \text{ constant}) \text{ previously denoted by } \beta. \quad (2.7)$$

Both the input and transfer characteristics can be easily measured in the laboratory by supplying the input current from a constant current generator.

The Output Characteristic

A family of curves is drawn (Fig. 2.13) relating collector current to collector voltage with base current as parameter. This can be used in the same manner as the thermionic valve anode characteristics in which grid voltage is the parameter.

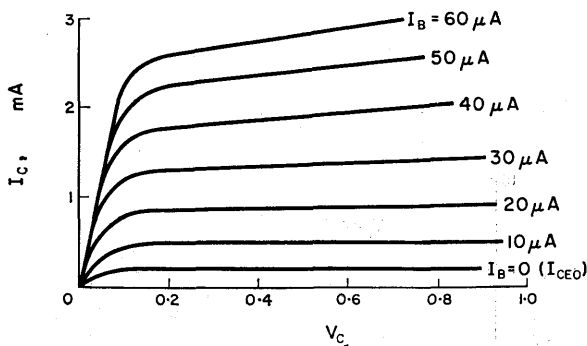


FIG. 2.13. The output characteristic.

$$\text{Output conductance } h_o = \left[\frac{\delta I_C}{\delta V_C} \right] (I_B \text{ constant}).$$

The slope of the curves is the output conductance, defined as:

$$h_o \text{ |}_{\text{def}} \left[\frac{\delta I_C}{\delta V_C} \right] (I_B \text{ constant}). \quad (2.8)$$

It is commonly of the order of 50×10^{-6} mho.

Voltage Feedback Characteristic

The fourth relationship is between output and input voltage and is the voltage feedback characteristic. The slope of this

curve is:

$$h_{r \text{ def}} = \left[\frac{\partial V_B}{\partial V_C} \right] (I_B \text{ constant}). \quad (2.9)$$

Voltage feedback ratios are typically of the order of 5×10^{-4} .

2.10. SMALL SIGNAL REPRESENTATION

Hybrid Equivalent Circuit

This representation makes use of h parameters. For given operating conditions and small signals, the network of Fig. 2.14 represents a transistor at low frequency.

The equations of this network are:

$$v_1 = h_{11}i_1 + h_{12}v_2, \quad (2.10)$$

$$i_2 = h_{21}i_1 + h_{22}v_2. \quad (2.11)$$

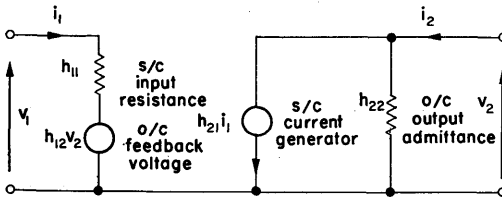


FIG. 2.14. Small signal representation of a transistor by a hybrid equivalent network. A voltage generator is used in the input circuit, and in the output circuit a current generator is employed.

And, in matrix form,

$$\begin{bmatrix} v_1 \\ i_2 \end{bmatrix} = \begin{bmatrix} h_{11} & h_{12} \\ h_{21} & h_{22} \end{bmatrix} \begin{bmatrix} i_1 \\ v_2 \end{bmatrix}, \quad (2.12)$$

where

$$(a) \ h_{11} = h_i = \left[\frac{\partial V_{in}}{\partial I_{in}} \right] (V_C \text{ constant}), \quad (2.13)$$

$$= \frac{v_1}{i_1} \text{ when } v_2 \text{ is zero,}$$

that is when the output is short circuited for signal currents;

$$\begin{aligned} \text{(b) } h_{12} = h_r &= \left[\frac{\delta V_{in}}{\delta V_{out}} \right] (I_B \text{ constant}), & (2.14) \\ &= \frac{v_1}{v_{out}} \text{ when } i_1 \text{ is zero,} \end{aligned}$$

that is when the input is open circuited;

$$\begin{aligned} \text{(c) } h_{21} = h_f &= \left[\frac{\delta I_{out}}{\delta I_{in}} \right] (V_C \text{ constant}), & (2.15) \\ &= \frac{i_2}{i_1} \text{ when } v_2 \text{ is zero,} \end{aligned}$$

that is when the output is short circuited;

$$\begin{aligned} \text{(d) } h_{22} = h_{out} &= \left[\frac{\delta I_{out}}{\delta V_{out}} \right] (I_B \text{ constant}), & (2.16) \\ &= \frac{i_2}{v_2} \text{ when } i_1 \text{ is zero,} \end{aligned}$$

that is when the input is open circuited.

The values of these h parameters will vary according to the mode of operation of the transistor. To denote which mode is in use a second subscript, e , b or c , is added to the h symbol. Thus,

- h_{ie} = Input impedance, common emitter.
- h_{rb} = Voltage feedback ratio, common base.
- h_{oc} = Output admittance, common collector.
- h_{fe} = Forward current transfer ratio, common emitter.

T Representation

In this representation of the transistor the component parts retain their identity in all configurations and this enables a rapid appreciation of a network to be made (see Fig. 2.15a).

It is possible to obtain the values of r parameters from known h parameters, and vice versa.

EXAMPLE. (See Fig. 2.15b.)

$$\begin{aligned} h_{11} &= h_{ie} \text{ for common emitter operation,} \\ &= v_1/i_1 \text{ with output short circuited.} \end{aligned}$$

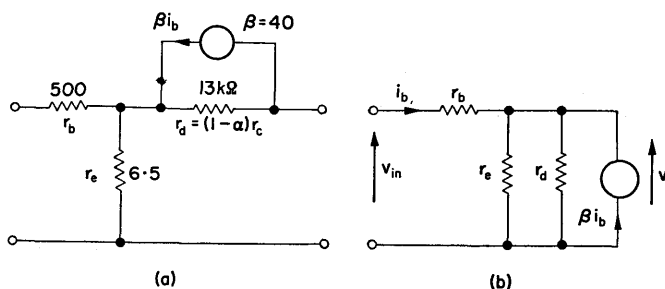


FIG. 2.15. (a) T representation for common emitter operation, using r parameters. (b) The output is short circuited for the determination of h_{11} from r parameters.

Then,

$$i_b = v \left[\frac{1}{r_e} + \frac{1}{r_d} \right] - \beta i_b,$$

and

$$v = i_b(1 + \beta) \left[\frac{r_e \cdot r_d}{r_e + r_d} \right],$$

also,

$$v_i = v + i_b r_b.$$

Therefore

$$h_{11} = r_b + (1 + \beta) \left[\frac{r_e \cdot r_d}{r_e + r_d} \right].$$

Therefore

$$h_{11} \doteq r_b + r_e \quad \text{since } r_d \text{ is much greater than } r_e.$$

In Table 2.1 is given the relationships between h and r parameters, in both exact and approximate form. Using these approximations, r parameters may readily be obtained in terms

of h parameters. For example, in terms of common emitter parameters,

$$r_e = \frac{h_{re}}{h_{oe}}, \quad r_c = \frac{1 + h_{fe}}{h_{oe}}, \quad \alpha = \frac{h_{fe}}{1 + h_{fe}}, \quad \beta = h_{fe},$$

$$r_b = h_{ie} \frac{h_{re}}{h_{oe}} (1 + h_{fe}) = h_{ie} - h_{re} r_c.$$

2.11. TRANSISTOR BIASING⁽¹¹⁾

For operation the emitter-base junction must be forward biased. This is different to the thermionic valve which can operate with the grid-cathode reversed biased and consequently drawing zero current.

The simplest bias method is to supply a base current which will allow the required operating conditions. (See Fig. 2.16.)

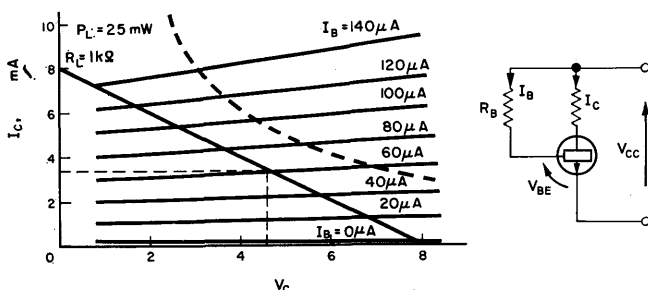


FIG. 2.16. Determination of the necessary bias current for a given operating condition. Note that the operating point must lie below the curve indicating maximum permissible collector dissipation.

Base Current Biasing

$$I_B = \frac{V_{CC} - V_{BE}}{R_B}. \quad (2.17)$$

Since V_{BE} is very much less than V_{CC} , $I_B \doteq V_{CC}/R_B$.

TABLE 2.1

Exact	Approximate, $r_d \gg r_b, r_e$
$h_{ie} = \frac{\Delta}{r_e + r_d}$	$r_b + \frac{r_e}{1 - \alpha}$
$h_{ib} = \frac{\Delta}{r_b + r_c}$	$r_e + r_b(1 - \alpha)$
$h_{ic} = \frac{\Delta}{r_e + r_d}$	$r_b + \frac{r_e}{1 - \alpha}$
$h_{fe} = \frac{-(r_e - \alpha r_c)}{r_e + r_d}$	$\frac{\alpha}{1 - \alpha}$
$h_{fb} = \frac{-(r_b + \alpha r_c)}{r_c + r_b}$	$-\alpha$
$h_{fc} = \frac{-r_c}{r_c + r_d}$	$-\frac{1}{1 - \alpha}$
$h_{re} = \frac{r_e}{r_e + r_d}$	$\frac{r_e}{r_d}$
$h_{rb} = \frac{r_b}{r_b + r_c}$	$\frac{r_b}{r_c}$
$h_{rc} = \frac{r_d}{r_e + r_d}$	1
$h_{oe} = \frac{1}{r_e + r_d}$	$\frac{1}{r_d}$
$h_{ob} = \frac{1}{r_b + r_c}$	$\frac{1}{r_c}$
$h_{oc} = \frac{1}{r_e + r_d}$	$\frac{1}{r_d}$

Where $\Delta = r_e r_b + r_c [r_e + r_b(1 - \alpha)]$

$$= r_e(r_b + r_c) + r_b r_d,$$

and $r_d = r_c(1 - \alpha)$

Thus, for $R_L = 1 \text{ k}\Omega$ and $V_{CC} = 8 \text{ V}$, for a bias current of $60 \text{ }\mu\text{A}$,

$$R_B = \frac{V_{CC}}{I_B} = \frac{8 \text{ V}}{60 \text{ }\mu\text{A}} = 133 \text{ k}\Omega.$$

$I_C = \beta I_B + I_{CEO}$, where β is the large signal current gain.

$$\beta = \frac{I_C - I_{CEO}}{I_B} = 57 \text{ in this case.} \quad (2.18)$$

The small signal current gain β , evaluated at the working point, is 52, showing that the error involved in using β in place of β is negligible.

Advantages of current biasing

1. Simplicity and small number of components required.
2. Biasing is largely independent of V_{BE} , the base-emitter voltage. The V_{BE} required to maintain a given collector current falls with increasing temperature. If V_{BE} is very much less than V_{CC} (or V_{BB}) the bias current I_B is largely independent of V_{BE} .

Disadvantages

1. I_{CEO} is not controlled and can limit the collector swing or even bottom the transistor in extreme conditions. (I_{CEO} is doubled for each 8°C rise in temperature.)

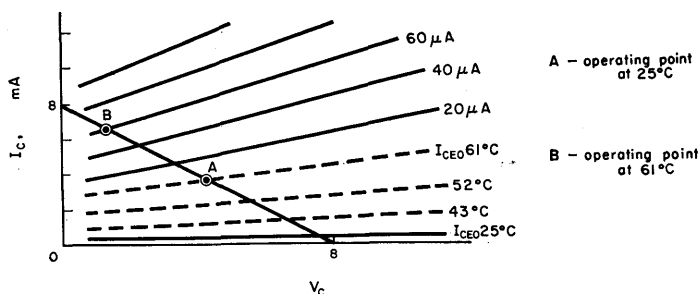


FIG. 2.17. Change in operating point due to increasing temperature, for a germanium transistor with base current biasing.

2. The current gain increases with temperature and can vary greatly with different transistors. Since the standing current $I_C = \beta I_B + I_{CEO}$, the working point can also differ. This is illustrated in Fig. 2.17.

In spite of the disadvantages, current biasing is very useful, especially for experimental work. The change in operating point is greatly reduced if large collector currents are used (so that I_{CEO} is only a small fraction of I_C), and the loads are small.

Collector Feedback Biasing

Ideally, the transistor should be biased by a method which prevents excessive shift of the working point, due to temperature changes. Indeed, in the absence of such stabilization, or where the stabilization is insufficient, thermal runaway may result. Thermal runaway occurs when an increase in temperature causes an increase in collector current, which in turn results in a further increase in temperature. The effect is cumulative and can result in the destruction of the transistor, although it normally only occurs in high power stages.

The circuit of Fig. 2.18a is the simplest method of providing a degree of stabilization to the operating point.

The performance equations of this circuit are:

$$V_C \doteq V_{CC} - I_C R_C \quad (\text{neglecting } I_B \text{ in comparison with } I_C),$$

$$I_C = \beta I_B + I_{CEO},$$

$$I_B \doteq V_C / R_{BC} \quad (\text{neglecting } V_{BE} \text{ in comparison with } V_C).$$

Combining these equations,

$$I_C \doteq \frac{\beta V_{CC}}{R_{BC} + \beta R_C} + \frac{I_{CEO} \cdot R_{BC}}{R_{BC} + \beta R_C}. \quad (2.19)$$

Differentiating with respect to the leakage current I_{CEO} ,

$$\frac{\delta I_C}{\delta I_{CEO}} = \frac{1}{1 + \beta R_C / R_{BC}}. \quad (2.20)$$

That is, a change δI_{CEO} causes a change of $(1/K) \delta I_C$, where

$$\frac{1}{K} = \frac{1}{1 + \beta R_C / R_{BC}}. \quad (2.21)$$

The factor K is the stabilization factor and should obviously be as large as possible. In this case this is achieved by using a transistor with a large β .

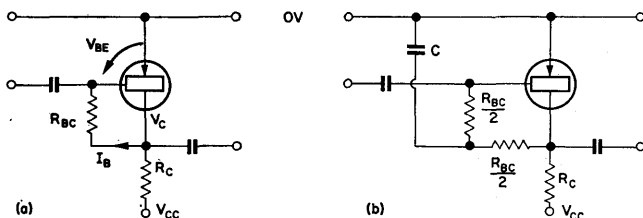


FIG. 2.18. (a) Stabilization of the operating point using collector feedback biasing. (b) The feedback resistor is decoupled to eliminate loss in gain due to negative feedback.

Calculation of R_{BC}

If, as in the previous example,

$$\beta = 57, R_C = 1 \text{ k}\Omega, I_B = 60 \mu\text{A} \quad \text{and} \quad V_C = 4.5 \text{ V},$$

$$R_{BC} = V_C / I_B = 4.5 \text{ V} / 60 \mu\text{A} = 75 \text{ k}\Omega.$$

This provides a stabilization factor $K = 1 + \beta R_C / R_{BC} = 1.75$.

Disadvantages

1. The collector current must always be greater than I_{CEO} .
2. There is negative feedback at signal frequency unless decoupling is employed, as in Fig. 2.18 b.
3. The degree of stabilization is relatively small.

The method is applicable for amplifiers in which overall signal inversion occurs. It has the advantage that only one

capacitor is used and consequently introduces only one additional time constant. This is a very important consideration in the case of feedback amplifiers. This form of biasing can be applied over more than one stage, for amplifiers that have overall signal inversion, as shown in Fig. 2.19.

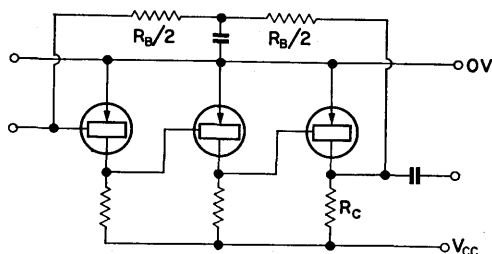


FIG. 2.19. A three-stage amplifier with feedback stabilization. If the collector voltage of the output transistor is half V_{CC} , the stabilization factor is $K = 2$.

Emitter Resistor Stabilization

This method is generally used with a voltage dividing network to provide the base voltage, and is similar to cathode bias used to stabilize the operation of a thermionic valve. Referring to the

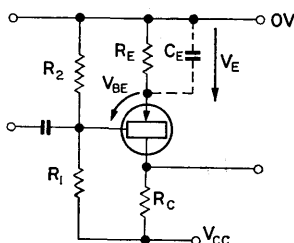


FIG. 2.20. Emitter resistor stabilization. The capacitor C_E decouples R_E to prevent loss in gain due to negative feedback.

circuit of Fig. 2.20, the base voltage is set by the voltage divider consisting of R_1 and R_2 :

$$I_E = V_E/R_E = (V_B - V_{BE})/R_E \doteq V_B/R_E,$$

where V_B is much greater than V_{BE} . (V_B is usually of the order of $10 V_{BE}$.)

If R_1 and R_2 are very small and R_E is very large, the circuit is indistinguishable from the common base configuration. The leakage current is then I_{CBO} (not I_{CEO}) and of the order of $10 \mu A$, and $I_C = I_E + I_{CO}$.

Over a wide temperature range α only changes by a small percentage and hence a good degree of stabilization is obtained.

The circuit may be represented by Fig. 2.21, in which

$$R_B = R_1 R_2 / (R_1 + R_2).$$

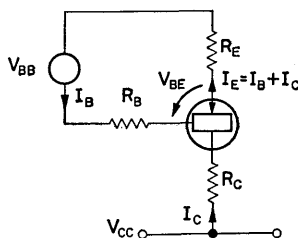


FIG. 2.21. Equivalent representation for determining the stabilization factor.

Then, providing R_C and R_E are not very large,

$$I_C \doteq I_{CEO} + \beta I_B, \quad (2.22)$$

$$I_E = I_C + I_B, \quad (2.1)$$

$$I_B = \frac{V_{BB} - (V_{BE} + R_E I_E)}{R_B}. \quad (2.23)$$

From these three equations,

$$I_B = \frac{V_{BB}}{R_E + R_B} - \frac{V_{BE} + R_E I_C}{R_E + R_B}, \quad (2.24)$$

and

$$I_C = \frac{I_{CEO}}{K} + \frac{\beta V_{BB}}{R_E + R_B} \cdot \frac{1}{K} \quad (2.25)$$

if V_{BE} is much less than V_E , and where

$$K = 1 + \frac{\beta R_E}{R_E + R_B}. \quad (2.26)$$

Differentiating I_C with respect to I_{CEO} ,

$$\frac{\delta I_C}{\delta I_{CEO}} = \frac{1}{K}. \quad (2.27)$$

K is thus the stabilization factor, and if R_E is very much greater than R_B , approximates to $1 + \beta$. The designer can thus select his degree of stabilization by suitable choice of values for R_E and R_B .

DESIGN EXAMPLE 2.1

Required, a peak output signal of 3 V without distortion. From the collector characteristic, let the operating point chosen to suit this requirement be $V_C = -8$ V and $I_C = 3$ mA, for a transistor operating from a supply of -12 V. The collector voltage swing is from -5 to -11 V, so a maximum of 5 V is available for V_E , which should be somewhat less than this figure. Let V_E be -3 V so that, for $I_C = 3$ mA, $R_E = 1$ k Ω .

The ratio R_B/R_E is chosen according to the degree of stabilization required. If $R_B/R_E = 3$,

$$R_B = \frac{R_1 R_2}{R_1 + R_2} = 3 \text{ k}\Omega. \quad (2.28)$$

As I_B is usually small, $V_B \doteq V_{CC} \cdot R_2/(R_1 + R_2)$. But $V_B = V_{BE} + V_E$ and since V_{BE} is much less than V_E ,

$$V_B \doteq \frac{R_2}{R_1 + R_2} \cdot V_{CC} \doteq V_E. \quad (2.29)$$

Therefore

$$\frac{12 R_2}{R_1 + R_2} = 3 \quad \text{and} \quad R_1 = 3 R_2.$$

Substituting in eqn. (2.28), $R_2 = 4 \text{ k}\Omega$ and $R_1 = 12 \text{ k}\Omega$. Make them $4.7 \text{ k}\Omega$ and $12 \text{ k}\Omega$, which are preferred values. To give the required V_C , $R_C = 4 \text{ V}/3 \text{ mA} \div 1.2 \text{ k}\Omega$, and the circuit is as shown in Fig. 2.22. A smaller value of R_B would increase the stability, but would:

- (1) draw extra current from the power supply,
- (2) reduce the amplifier input resistance and provide a lower resistance shunt path for input signal current.

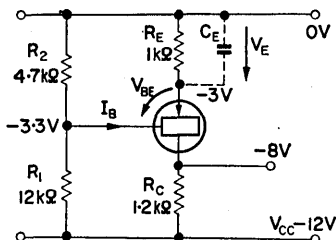


FIG. 2.22. Circuit of Design Example 2.1.

For most a.c. applications R_E is decoupled with a capacitor to eliminate negative feedback. R_E in effect increases r_e to $R_E + r_e$ and the input resistance from (approximately) $r_b + \beta r_e$ to $r_b + \beta(r_e + R_E)$, which reduces the voltage gain.

2.12. TRANSISTOR AMPLIFIER CHARACTERISTICS⁽¹²⁾

The three different modes of operation, illustrated in Fig. 2.23, have widely different characteristics, and these are now compared so that a designer may select the mode most suitable for a given application.

Current Gain

Common base short circuit current gain $= \alpha = -h_{21} = -h_{fb} = 0.98$. Common emitter short circuit current gain $= \beta = h_{21} = h_{fe} = 49$. Common collector short circuit current gain $= 1 + \beta = h_{21} = h_{fc} = 50$.

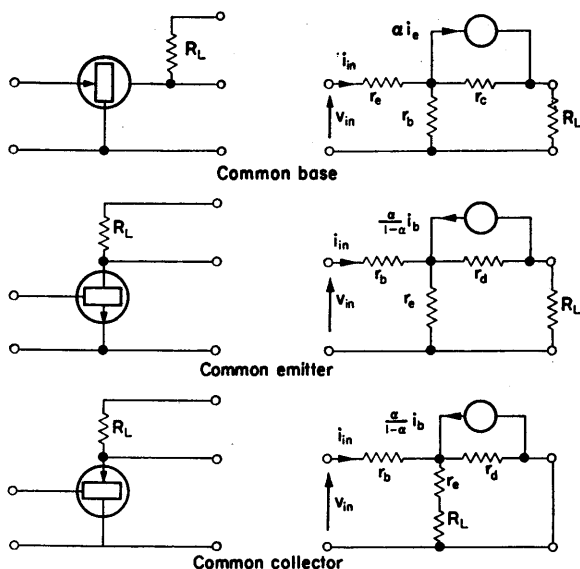


FIG. 2.23. Forms of transistor operation. The common emitter arrangement is the one most frequently used since it can provide current, voltage and power amplification.

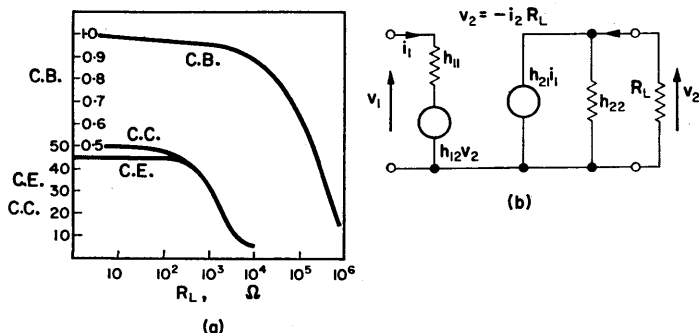


FIG. 2.24. (a) Current gain as a function of load for the three modes of operation. Note that for the common collector arrangement the current gain is much greater than for common base. (b) Hybrid equivalent network which is the same for all modes of operation.

The way in which current gain varies, as the load resistor R_L is increased, is shown in Fig. 2.24a. Referring to the hybrid network of Fig. 2.24b,

$$\frac{i_2}{i_1} = \frac{h_{21}G_L}{h_{22} + G_L}. \quad (2.30)$$

From the short circuit value, current gain falls by half when $G_L = h_{22}$.

Typical values for h_{22} are $1 \text{ M}\Omega$ for common base operation and $20 \text{ k}\Omega$ for common emitter.

Voltage Gain

$$v_2 = \frac{-h_{21}}{h_{22} + G_L} i_1 = \frac{-h_{21}}{h_{22} + G_L} \cdot \frac{v_1 - h_{12}v_2}{h_{11}}. \quad (2.31)$$

Thus,

$$\frac{v_2}{v_1} = \frac{-h_{21}}{h_{22}h_{11} - h_{12}h_{21} + h_{11}G_L} = \frac{-h_{21}}{\Delta h + G_L h_{11}}, \quad (2.32)$$

where

$$\Delta h = h_{22}h_{11} - h_{12}h_{21}.$$

To obtain an approximate value for voltage gain the term $h_{12}v_2$ can frequently be omitted since the voltage feedback ratio h_{12}

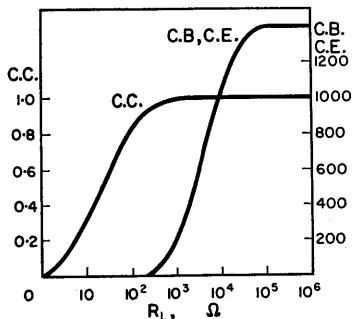


FIG. 2.25. Voltage gain as a function of load resistance. The common collector gain is less than unity, while that of the common base and common emitter arrangements is very much greater.

is small. Variation of voltage gain with load resistance is plotted in Fig. 2.25.

C.B. Input Resistance

Referring to the T equivalent network of Fig. 2.23, and where R_L is small, for the common base connection,

$$v_{in} \doteq r_e i_e + r_b (i_e - i_c) = i_e [r_e + (1 - \alpha) r_b],$$

where α is the current gain.

$$r_{in} = v_{in}/i_{in} = r_e + (1 - \alpha) r_b = h_{ie}. \quad (2.33)$$

As the current gain falls off for increasing R_L , r_{in} tends to $r_e + r_b$.

C.E. Input Resistance

$$v_{in} = r_b i_b + r_e (i_e + i_c) = i_b [r_b + r_e (1 + \beta)], \quad (2.34)$$

if R_L is small, and where β is the current gain. Thus $r_{in} = r_b + (1 + \beta) r_e$ and tends to $r_b + r_e$ as R_L tends to infinity, as does the input resistance of the common base arrangement.

C.C. Input Resistance

$$v_{in} = r_b i_b + (R_L + r_e) (i_e + i_c) = i_b r_b + (R_L + r_e) (1 + \beta),$$

so that

$$r_{in} = r_b + (R_L + r_e) (1 + \beta). \quad (2.35)$$

Thus, for small values of R_L , common collector input resistance is approximately the same as that of the common emitter connection. However, since R_L is in series with r_e , for values of R_L between 100Ω and $10 \text{ k}\Omega$, r_{in} is approximately equal to βR_L . The input resistance of the three modes of operation are compared in Fig. 2.26.

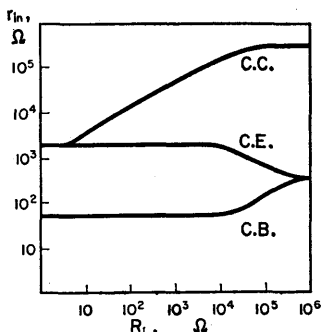
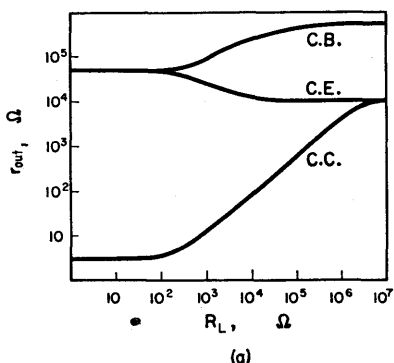
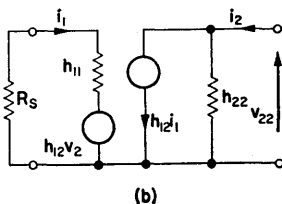


FIG. 2.26. Comparison of input resistance. For common base and common emitter r_{in} tends to the same value ($r_e + r_b$), as R_L becomes very large. In the common collector mode of operation the input resistance is directly proportional to load resistance over a wide range.



(a)



(b)

FIG. 2.27. Output resistance as a function of source resistance. $r_{out} = v_2/i_2$, i.e. the resistance seen when looking into the output terminals.

Output Resistance

In common emitter operation the output resistance remains relatively constant as the source resistance R_s changes, but varies considerably for the other two connections.

In Fig. 2.27b, and for common emitter operation, the current generator provides a current which opposes the output current, thus increasing the output resistance when base current flows. The opposite effect occurs with common base and common collector connections:

$$i_1 = \frac{-h_{12}v_2}{h_{11} + R_s} \quad \text{and} \quad i_2 = i_1 h_{21} + v_2 h_{22}.$$

Thus, output conductance,

$$g_o = \frac{i_2}{v_2} = \frac{-h_{12}h_{21}}{h_{11} + R_s} + h_{22}. \quad (2.36)$$

Power Gain

The power gains plotted in Fig. 2.28 are for the case in which the power source is matched to the input resistance of the transistor.

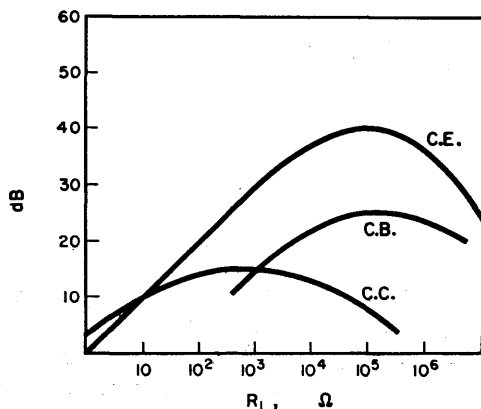


FIG. 2.28. Power gain as a function of load resistance, for the case where the signal source is matched to the input resistance of the transistor.

Performance of Transistor Amplifiers

Because of its ability to provide both voltage and current amplification the common emitter configuration is the one generally used in transistor amplifiers. It is also preferred because its input and output resistances are normally of a more

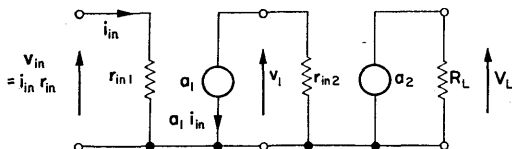


FIG. 2.29. Approximate equivalent network of two transistors in tandem.

useful magnitude and are reasonably constant. In tandem connection the common emitter (due to the current gain) can provide voltage amplification. If a is the current gain of each stage, then, referring to Fig. 2.29,

$$v_1 = -a_1 \cdot r_{in2} \cdot i_{in} = \frac{-a_1 \cdot r_{in2}}{r_{in1}} \cdot v_{in}. \quad (2.37)$$

$$\begin{aligned} v_L &= a_1 a_2 R_L i_{in}, \\ &= \frac{a_1 a_2}{r_{in1}} \cdot R_L v_{in}, \end{aligned} \quad (2.38)$$

if $r_{in1} = r_{in2}.$

For common emitter operation, if the output and load resistances are equal, the voltage gain is equal to the current gain which will generally approach β , being in the range 10–80. If the load resistance is very much greater than r_{in} the gain is increased as long as a_2 is not significantly reduced.

For common base, with equal input and load resistances, the current gain is less than unity and there will be no voltage gain. If R_L is greater than r_{in} there will be a voltage gain, but stages in tandem provide no increase in gain unless impedance transforma-

tion is provided (transformer connection). For common collector, the input resistance is a function of load resistance, $r_{in} \doteq a_1 a_2 R_L$. Thus,

$$v_L \doteq \frac{a_1 a_2 R_L}{r_{in1}} \cdot v_{in} \doteq \frac{a_1 a_2 R_L}{a_1 a_2 R_L} \cdot v_{in} = v_{in}. \quad (2.39)$$

2.13. EXAMPLES

(a) Common Emitter

Figure 2.30a is a three-stage direct coupled amplifier, each transistor having the h parameters, $h_{21} = \beta = 50$, $h_{11} = 1 \text{ k}\Omega$, $h_{12} = 5 \times 10^{-4}$ and $h_{22} = 50 \times 10^{-6}$. The hybrid representation of a single stage is drawn in Fig. 2.30b.

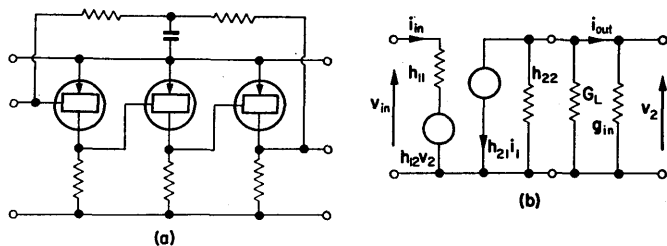


FIG. 2.30. Three-stage d.c. amplifier with an equivalent network of one stage.

Due to the low input resistance v_2 is small, and since h_{12} also is small the voltage generator $h_{12}v_2$ may often be neglected for approximate calculations.

The current gain

$$\frac{i_{out}}{i_{in}} = \frac{h_{21}g_{in}}{h_{22} + G_L + g_{in}}. \quad (2.40)$$

The output voltage

$$\begin{aligned} v_2 &= \beta i_{in} \times \text{shunt resistance} \\ &= \frac{h_{21}}{h_{22} + G_L + g_{in}} \cdot i_{in}. \end{aligned} \quad (2.41)$$

As g_{in} is very much greater than G_L and h_{22} there is efficient current transfer.

Stage current gain, $a = 40$, so overall current gain $= (40)^3 = 64,000$.

Transfer resistance $= v_{out}/i_{in} \doteq a^3 \cdot R_L \doteq 3.5 \times 10^8 \Omega$.

Voltage gain

$$\frac{Z_t}{r_{in}} \doteq \frac{a^3 R_L}{r_{in}} \doteq \frac{350 \times 10^6}{1000} \doteq 3.5 \times 10^5.$$

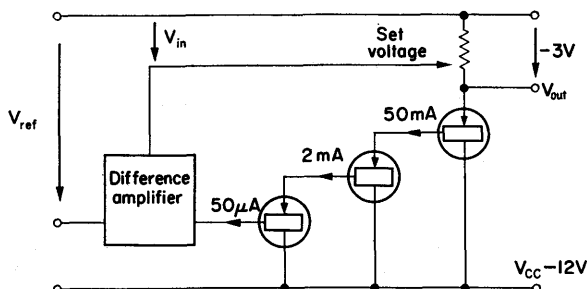


FIG. 2.31. Regulated power supply using a compound common collector stage. The excess voltage $V_{CC} - V_o$ appears across the compound stage.

(b) Common Collector

In the stabilized power supply of Fig. 2.31, V_o is to be held constant at -3 V for all values of current between 0 and 1 A. The output transistor must therefore be capable of dissipating a maximum power of $9 \text{ V} \times 1 \text{ A} = 9 \text{ W}$. When drawing 1 A at 3 V the effective load resistance is obviously 3Ω . This does not appear across the difference amplifier output since the input resistance to the common collector current amplifier,

$$r_{in} \doteq 3 \times h_{f1} \times h_{f2} \times h_{f3}.$$

Given that $h_{f1} = 40$, $h_{f2} = 25$ and $h_{f3} = 20$, $r_{in} \doteq 60 \text{ k}\Omega$.

The difference amplifier is therefore only lightly loaded by the current amplifier.

(c) *CE-CB-CC d.c. Amplifier (Fig. 2.32)*

The common collector output stage provides a low impedance voltage output. The input resistance of this stage, for $R_E = 5\text{ k}\Omega$, is $\beta_3 R_E = 200\text{ k}\Omega$. Thus the effective load presented to the common base transistor is $100\text{ k}\Omega$. Since the current gain of such a stage is unity, its transfer resistance R_{T2} is also $100\text{ k}\Omega$. Current gain provided by stage 1 is approximately equal to β_1 of T_1 since this transistor feeds into the low input resistance of the common base stage. Thus the over-all transfer resistance (output voltage divided by input current),

$$R_T = \beta_1 R_{T2} = 5\text{ M}\Omega.$$

This implies that $1\text{ }\mu\text{A}$ of input current gives rise to an output of 5 V .

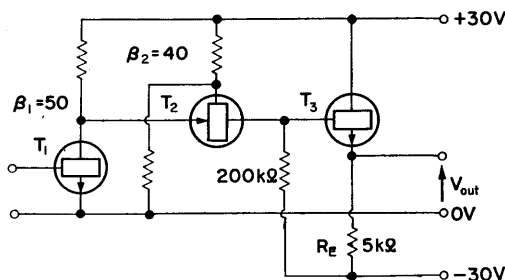


FIG. 2.32. A d.c. amplifier using common emitter, common base and common collector stages in tandem.

2.14. SUMMARY OF THE CHARACTERISTICS OF TRANSISTOR AMPLIFIERS IN TERMS OF r PARAMETERS

For the three basic configurations of transistor amplifiers, Table 2.2 sets out input and output resistance, and voltage and current gain, in terms of r parameters.

In this table the top expressions in each case are exact, while the lower expressions are approximate.

TABLE 2.2

	Common Base	Common Emitter	Common Collector
R_{in}	$r_e + r_b \frac{r_c - r_m + R_L}{r_b + r_c + R_L}$	$r_b + r_e \frac{r_c + R_L}{r_d + r_e + R_L}$	$r_b + r_c \frac{r_c + R_L}{r_d + r_e + R_L}$
	$r_e + r_b(1 - a)$	$r_b + \frac{r_e}{1 - a}$	$\frac{R_L}{1 - a}$
R_{out}	$r_c - r_b \frac{r_m - R_g - r_e}{R_g + r_e + r_b}$	$r_d + r_e \frac{R_g + r_b + r_m}{R_g + r_b + r_e}$	$r_e + r_d \frac{R_g + r_b}{R_g + r_b + r_c}$
	$r_c \cdot \frac{r_e + r_b(1 - a) + R_g}{r_e + r_b + R_g}$	$r_d + r_e \frac{r_m + R_g}{r_e + r_b + R_g}$	$r_e + (r_b + R_g)(1 - a)$
A_v	$\frac{(r_m + r_b) R_L}{r_b(r_d + r_e + R_L) + r_e(r_c + R_L)}$	$\frac{R_L(r_m - r_e)}{r_d(r_d + r_e + R_L) + r_e(r_c + R_L)}$	$\frac{r_c R_L}{r_b(r_d + r_e + R_L) + r_e(r_c + R_L)}$
	$\frac{a R_L}{r_e + r_b(1 - a)}$	$\frac{-a R_L}{r_e + r_b(1 - a)}$	1
A_i	$\frac{r_m + r_b}{r_b + r_c + R_L}$	$\frac{r_m - r_e}{r_d + r_e + R_L}$	$\frac{r_c}{r_d + r_e + R_L}$
	$a (= \alpha)$	$\frac{a}{1 - a} (= \beta)$	$\frac{1}{1 - a} (= 1 + \beta)$

CHAPTER 3

The Capacitively Coupled Amplifier

Introduction

In applications where an amplifier is not required to operate on very low frequencies (below 1 c/s) transformer or capacitor coupling is used. This isolates the d.c. voltages of an anode (usually of the order of 100 V) from the grid of the following stage.

Transformer coupling is frequently used with tuned amplifiers and in applications where a low resistance is required between the grid and cathode of a valve. Capacitance coupling is very widely used because of its simplicity and cheapness.

3.1. BANDWIDTH

The capacitively coupled amplifier has a finite bandwidth (see Fig. 3.1.) The gain falls off as the reactance of the coupling capacitor increases at low frequency, and also at high frequency due to the shunting effect of the stray capacitance between anode and the earth or common connection.

Equivalent Network

If the valves of Fig. 3.1 are replaced by incremental models, and the cathode bias resistor R_K is bypassed by the capacitor C_K , the gain and frequency response can be obtained from the equivalent network of Fig. 3.2.

The capacitance C_1 is made up of the valve anode-cathode interelectrode capacitance together with the shunt capacitance

due to the valve holder and wiring. C_2 represents the input capacitance of V_2 together with the stray wiring capacitance.

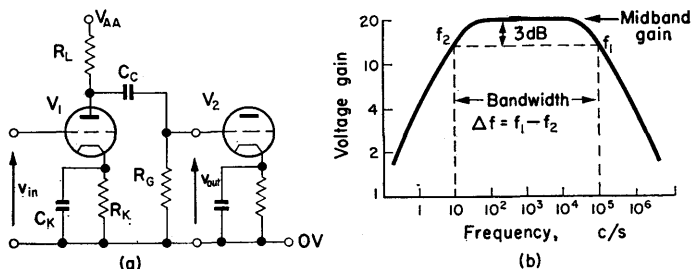


FIG. 3.1. (a) A capacitively coupled amplifier stage. (b) Gain plotted against frequency. The upper and lower bandwidth limits are f_1 and f_2 , i.e. the frequencies at which the gain has fallen to $1/\sqrt{2}$ of the midband value.

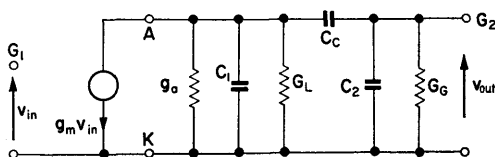


FIG. 3.2. Incremental representation of the amplifier of Fig. 3.1, neglecting C_K and R_K . C_1 and C_2 are shunt capacitances.

3.2. DETERMINATION OF GAIN AND FREQUENCY RESPONSE

Midband Gain

The gain of an amplifier is determined at midband frequency where C_C , C_1 and C_2 can be neglected:

$$\text{midband gain} = v_{out}/v_{in} = A_0 = -g_m R, \quad (3.1)$$

where

$$R = \frac{1}{G} = \frac{1}{g_a + G_L + G_G}.$$

This is apparent from inspection of Fig. 3.3 since v_{out} is produced by the current $g_m v_{in}$ flowing through g_a , G_L and G_G in parallel.

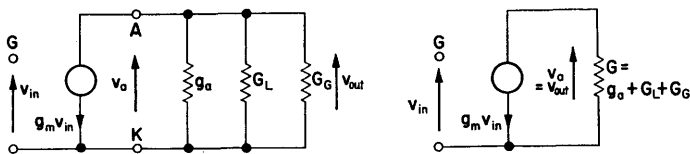


FIG. 3.3. Midband equivalent network of the circuit of Fig. 3.1.

$$\text{Gain} = A_0 = g_m R.$$

High Frequency Gain

As the operating frequency of the amplifier is increased, the reactance of the shunt capacitance between anode and earth, $1/\omega(C_1 + C_2)$ in Fig. 3.2, decreases. When this approaches R in value it can no longer be neglected. Hence the high frequency equivalent network of Fig. 3.4. The output voltage is developed by the generator current, $g_m v_{in}$, flowing in G and C_s in parallel:

$$\begin{aligned} A_1(s) &= \frac{v_{out}(s)}{v_{in}(s)} = \frac{-g_m}{G + sC_s} = \frac{-g_m}{G} \frac{1}{1 + sC_s/G}, \\ &= A_0 \frac{1}{1 + sT_1} \left(\text{where } T_1 = \frac{C_s}{G} = C_s R \right). \end{aligned} \quad (3.2)$$

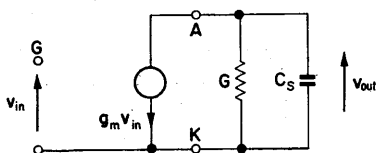


FIG. 3.4. High frequency equivalent network. High frequency gain,

$$A_1(j\omega) = A_0 \frac{1}{1 + j\omega T_1}, \text{ where } T_1 = C_s R.$$

As shunt capacitance is always present, the gain will always fall off at high frequencies.

High Frequency Response

The frequency response can be obtained by substituting $j\omega$ for s in eqn. (3.2):

$$A_1(j\omega) = A_0 \frac{1}{1 + j\omega T_1},$$

and, rationalizing,

$$\begin{aligned} A_1(j\omega) &= \frac{1}{1 + (\omega T_1)^2} (1 - j\omega T_1), \\ &= |A_1(j\omega)| \angle \theta_1, \end{aligned}$$

where $|A_1(j\omega)| = \frac{A_0}{\sqrt{1 + (\omega T_1)^2}}, \quad (3.3)$

and $\theta_1 = -\tan^{-1} \omega T_1.$

At very high frequencies, i.e. frequencies at which $\omega \gg 1/T_1$ (and consequently $\omega T_1 \gg 1$), the real part of the gain expression

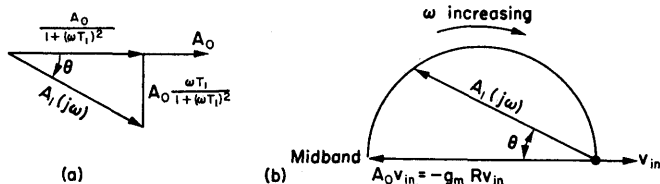


FIG. 3.5. (a) Resolved components of high frequency gain. (b) Polar diagram of output voltage as a function of ω . As ω becomes very large θ tends to 90° .

is very small and $A_1(j\omega)$ tends to $-j(A_0/\omega T_1)$. This implies that the phase is retarded 90° on the midband value, and gain falls inversely with frequency. The locus of the gain lies on the circumference of a semicircle with midband gain as diameter (Fig. 3.5b)

Bandwidth Limit

The upper bandwidth limit is the frequency at which the gain falls to $1/\sqrt{2}$ of the midband value A_0 . From eqn. (3.3), the upper bandwidth frequency $\omega_1 = 1/T_1$, since

$$|A_1(j\omega_1)| = \frac{A_0}{\sqrt{(1+1)}} = \frac{A_0}{\sqrt{2}}.$$

The angle of the phasor relative to A_0 ,

$$\theta_1 = -\tan^{-1} \omega T_1 = -\tan^{-1} 1 = -45^\circ \quad (\text{see Fig. 3.6}).$$

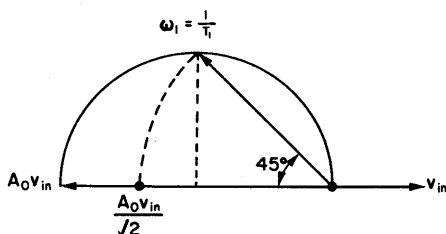


FIG. 3.6. Phasor for $\omega_1 = 1/T_1$. ω_1 is the radian frequency at which A falls to $A_0/\sqrt{2}$.

EXAMPLE. Valve EF86. This is a pentode with r_a greater than $1\text{ M}\Omega$. When used with an anode load resistance of $100\text{ k}\Omega$ the measured gain is -150 . (The negative sign indicates signal inversion.)

The midband gain $A_0 = -g_m R$, where R in this case is approximately $100\text{ k}\Omega$ (i.e. R_L). Thus,

$$g_m = \frac{150}{100 \times 10^3} = 1.5\text{ mA/V}.$$

By measuring the upper bandwidth point $f_1 = \omega_1/2\pi$, the shunt capacitance can be determined. For f_1 of 80 kc/s , and

allowing 11.5 pF for the oscilloscope probe,

$$\omega_1 = \frac{1}{T_1} = 2\pi \times 80 \times 10^3,$$

$$C_s = \frac{1}{\omega_1 R} = \frac{1}{2\pi \times 8 \times 10^9} = 20 \text{ pF}.$$

Thus, the valve output capacitance C_{ak} and wiring capacitance equals $20 - 11.5 = 8.5 \text{ pF}$.

3.3. ESTIMATION OF FREQUENCY RESPONSE USING STRAIGHT LINE ASYMPTOTES⁽¹³⁾

The magnitude of the gain is given by eqn. (3.3),

$$|A_1(j\omega)| = \frac{A_0}{\sqrt{[1 + (\omega T_1)^2]}}.$$

At frequencies where ωT_1 is very much greater than unity

$$|A_1(j\omega)| \doteq \frac{A_0}{\omega T_1}.$$

The gain falls as ω increases. If the amplitude of the gain at frequency ω_a is A_a , then at frequency $2\omega_a$ the gain will be $A_a/2$.

Doubling the frequency is an octave change and thus the gain is halved for each octave. By similar reasoning, a decade increase in frequency reduces the gain by a tenth. As shown in Fig. 3.1 it is usual to employ logarithmic axes so that at frequencies $\omega \gg 1/T_1$ the gain curve is a straight line:

$$20 \log \left| \frac{A_1(j\omega_a)}{A_2(j2\omega_a)} \right| = 20 \log_{10} \frac{A_a}{A_a/2} = 20 \log 2 = 6 \text{ dB}.$$

That is, the gain falls at a rate of 6 dB/octave, or 20 dB/decade. The straight line representing $|A_1(j\omega)| \doteq A_0/T_1$ is shown in Fig. 3.7. If the line is projected back so that it meets the midband gain line, it will do so at $\omega_1 = 1/T_1$.

In the previous section it was shown that at ω_1 the gain had fallen from A_0 to $A_0/\sqrt{2}$, a fall of 3 dB, since $20 \log_{10} \sqrt{2} = 3$. The error in taking the straight line approximation of the amplitude response is shown in Fig. 3.7 to be a maximum of +3 dB at ω_1 falling to +1 dB at $\omega_1/2$ and $2\omega_1$.

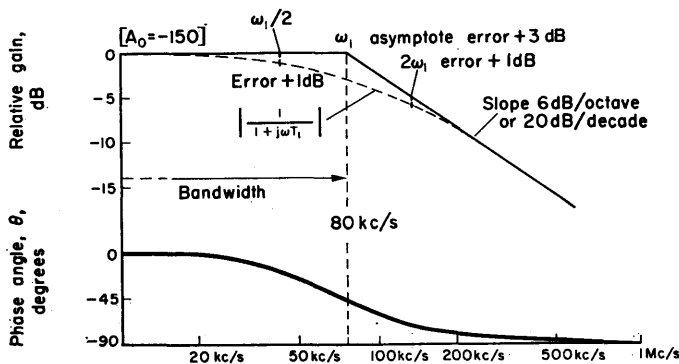


FIG. 3.7. Frequency response using straight line asymptotes. Gain is relative to midband. Straight line approximation is made by projecting down from $\omega_1 (= f_1/2\pi)$ on the 0 dB axis, at a slope of 20 dB/decade. Note that the ordinate is gain relative to A_0 .

It is convenient to draw the amplitude response relative to the gain A_0 . A negative sign shows that the gain is less than A_0 and the bandwidth is given by the frequencies at which the relative gain is -3 dB:

$$\text{relative gain} = -20 \log_{10} \left| \frac{A_0}{A(j\omega)} \right|.$$

The straight line approximation for $A = |A_0/(1 + j\omega T_1)|$ can be drawn by projecting down from ω_1 on the zero relative gain line at a slope of 6 dB for each octave of frequency. Often it is more convenient to use the slope of 20 dB/decade as the relative gain axis is usually calibrated in tens and the logarithmic frequency scales repeat in cycles of ten.

Consider the example:

$$R = 100 \text{ k}\Omega, \quad C_s = 20 \text{ pF}.$$

$$T_1 = C_s R = 2 \times 10^{-6} \text{ sec.}$$

$$\omega_1 = \frac{1}{T_1} = 5 \times 10^5 \text{ r/s.}$$

$$f_1 = \frac{\omega_1}{2\pi} = 79.6 \text{ kc/s.}$$

From f_1 the asymptote is drawn with a slope of 6 dB/octave.

3.4. GAIN-BANDWIDTH PRODUCT

The lower bandwidth point of an amplifier can be reduced in frequency by increasing the coupling capacitor, and can be eliminated by direct coupling the stage. (See Chapter 6.)

The high frequency bandwidth point is largely a function of the valve and its value can be considered to be the bandwidth as far as the valve is concerned. This is shown in Fig. 3.8.

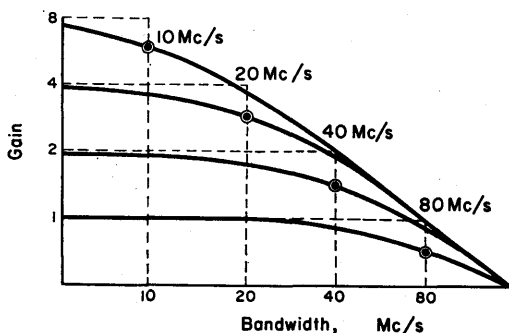


FIG. 3.8. Gain plotted against bandwidth for a gain-bandwidth product of 80 Mc/s. If a gain of 80 Mc/s is required, the gain is unity.

Thus the bandwidth, in radian frequency,

$$\omega_1 = \frac{1}{T_1} = \frac{1}{C_s R} \text{ r/s.} \quad (3.4)$$

C_s is the total shunt capacitance of an amplifying stage and will in general be made up of the valve input and output capacitances, together with the wiring capacitance. R is the total shunt resistance as in Figs. 3.1a and 3.3.

As the gain of an amplifier is $A_0 = g_m R$ [eqn. (3.1)],

$$\text{gain} \times \text{bandwidth, } A_0 \omega_1 = g_m R \times \frac{1}{C_s R} = \frac{g_m}{C_s} \text{ r/s.}$$

Thus,

$$\text{gain-bandwidth product} = \frac{g_m}{2\pi C_s} \text{ c/s,} \quad (3.5)$$

which is independent of the effective load resistance R .

This implies that once a valve has been specified the gain-bandwidth product is fixed. For a given gain there will be a resulting bandwidth of

$$f_1 = \frac{g_m}{2\pi C_s} \times \frac{1}{A_0} \text{ c/s.}$$

EXAMPLES. Consider a valve with $g_m = 10 \text{ mA/V}$, and $C_s = C_{in} + C_{out} = 20 \text{ pF}$:

$$\text{gain} \times \text{bandwidth} = \frac{10 \times 10^{-3}}{2\pi \times 20 \times 10^{-12}} = 80 \text{ Mc/s.}$$

If a gain of 10 is required, the bandwidth will be 8 Mc/s. For an amplifier with 80 Mc/s bandwidth, the gain is unity. Thus for wideband amplifiers, the g_m should be as large as possible and C_s as small as possible.

The g_m is usually increased by reducing the grid-cathode spacing, which can be made very small with modern "frame-grid" construction. This unavoidably increases the input capacitance.

Present-day wideband amplifying valves have $g_m = 50 \text{ mA/V}$ and gain-bandwidth product in the region of 250 Mc/s.

Reduction in Gain-bandwidth Product with Large Anode Resistors

Although the curves of Fig. 3.8 are theoretically correct, in practice a large anode load resistor will mean that the valve will be run at a lower current than for a smaller resistor. This is because it is awkward to have an anode supply higher than about 300 V. The lower current means a lower g_m and, consequently, a smaller gain-bandwidth product at high stage gains.

3.5. LOW FREQUENCY GAIN

As the frequency of v_{in} in Fig. 3.1 a is reduced, the reactance of the coupling capacitance $1/\omega C_C$ increases and is no longer negligible compared with R_G . The output voltage v_{out} is no longer equal to v_a , the anode voltage, but tends to zero as ω tends to zero.

This is shown in the amplitude response of Fig. 3.1 b.

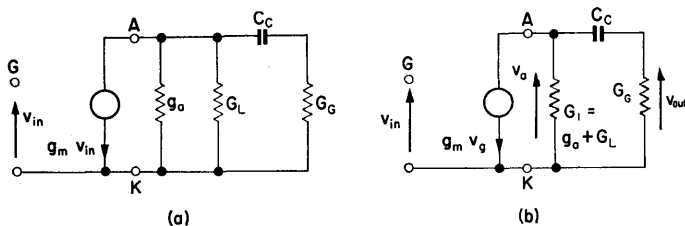


FIG. 3.9. Low frequency equivalent network. The shunt capacitance C_s in Fig. 3.4 is ignored since its effect is negligible at low frequency.

At low frequency it is possible to neglect the shunt capacitance, because its small value and the low frequency combine to produce a reactance that is much greater than the effective resistance R .

Figure 3.9 is a valid equivalent network at low frequency provided C_K is still effectively bypassing R_K .

The nodal equations for Fig. 3.9b (see Appendix A) are

$$(G_1 + sC_C) v_a - sC_C v_{\text{out}} = -g_m v_g,$$

$$-sC_C v_a + (G_G + sC_C) v_{\text{out}} = 0,$$

where v_a is the anode voltage, v_{out} is the output voltage and v_g is the grid voltage ($= v_{\text{in}}$).

The gain expression, $A_2(s)$, is now a function of s ($= j\omega$ for sin usoidal inputs):

$$\begin{aligned} A_2(s) &= \frac{v_{\text{out}}(s)}{v_{\text{in}}(s)} = \frac{-g_m s C_C}{(G_1 + sC_C)(G_G + sC_C) - (sC_C)^2} \\ &= \frac{-g_m}{G_1 + G_G + (G_1 G_G / s C_C)}. \end{aligned}$$

Removing the factor $G_1 + G_G = g_a + G_L + G_G = G$,

$$\begin{aligned} A_2(s) &= \frac{-g_m}{G_1 + G_G} \cdot \frac{1}{1 + [G_1 G_G / s C_C (G_1 + G_G)]} \\ &= A_0 \frac{1}{1 + [(g_a + G_L) G_G / s C_C (g_a + G_L + G_G)]}. \end{aligned}$$

since $A_0 = \frac{-g_m}{G_1 + G_G}$.

Therefore

$$A_2(s) = A_0 \frac{1}{1 + (1/sT_2)}, \quad (3.6)$$

where $T_2 = C_C R$, and

$$R = \frac{g_a + G_L + G_G}{(g_a + G_L) G_G} = \frac{r_a R_L}{r_a + R_L} + R_G.$$

If

$$R_G \gg \frac{r_a R_L}{r_a + R_L}, \quad T_2 = C_C R_G.$$

Low Frequency Response

The frequency response can be obtained by substituting $j\omega$ for s :

$$A_2(j\omega) = A_0 \frac{1}{1 + (1/j\omega T_2)} = \frac{A_0}{1 + (1/\omega T_2)^2} \cdot \left(1 - \frac{1}{j\omega T_2}\right)$$

$$= |A_2(j\omega)| \angle \theta, \quad (3.7)$$

where

$$|A_2(j\omega)| = \frac{A_0}{\sqrt{[1 + (1/\omega T_2)^2]}}$$

and

$$\theta_2 = \tan^{-1} \frac{1}{\omega T_2}.$$

At very low frequencies (i.e. frequencies at which $\omega \ll 1/T_2$ and consequently $\omega T_2 \ll 1$) the real part of the gain expression is very small and $A(j\omega)$ tends to $jA_0\omega T_2$, implying that the phase is advanced 90° on the midband value and the gain falls directly with frequency. The locus of the gain lies on the circumference of a semicircle with the midband gain as diameter (Fig. 3.10).

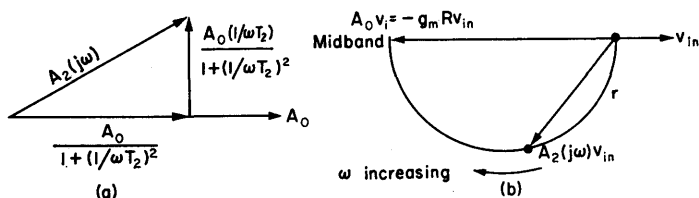


FIG. 3.10. (a) Resolved components of low frequency gain.
(b) Polar diagram of output voltage as a function of ω .

Estimation of Frequency Response

This can be done in a similar manner to the high frequency case.

EXAMPLE. Consider the second valve of Fig. 3.1a neglecting (for the present) the cathode network:

$$r_a = 17 \text{ k}\Omega, \quad R_L = 25 \text{ k}\Omega, \quad R_G = 150 \text{ k}\Omega, \quad C_C = 0.1 \text{ }\mu\text{F}$$

and

$$g_m = 2 \text{ mA/V.}$$

From eqn. (3.6),

$$R = \frac{r_a R_L}{r_a + R_L} + R_G = 160 \text{ k}\Omega.$$

$$T_2 = C_C R = 0.016 \text{ sec.}$$

$$\omega_2 = 1/T_2 = 62.5 \text{ r/s.}$$

$$f_2 = \omega_2/2\pi = 9.98 \text{ c/s.}$$

The breakpoint for the approximate curve is the 3 dB frequency, $f_2 \doteq 10 \text{ c/s}$, and the asymptote is drawn from this point with a slope of 6 dB/octave.

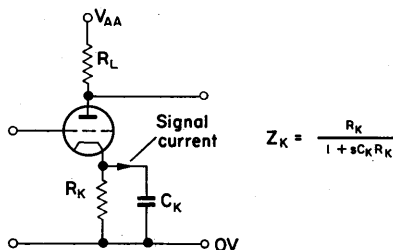


FIG. 3.11. Triode amplifier with cathode bias and bypass capacitor.

3.6. EFFECT OF CATHODE BYPASS CAPACITOR ON FREQUENCY RESPONSE

The gain of the network of Fig. 3.11 is

$$A = \frac{-\mu R_L}{r_a + R_L + (\mu + 1) Z_K}$$

from eqn. (1.12). Substituting

$$Z_K = \frac{R_K}{1 + sT_K},$$

where $T_K = C_K R_K$,

$$A(s) = \frac{-\mu R_L}{r_a + R_L + (\mu + 1) R_K} \times \frac{1 + sT_K}{1 + \{sT_K(r_a + R_L)/[r_a + R_L + (\mu + 1) R_K]\}},$$

or

$$A(s) = A_K \cdot \frac{1 + sT_K}{1 + sT'_K}, \quad (3.8)$$

where

$$A_K = \frac{-\mu R_L}{r_a + R_L + (\mu + 1) R_K},$$

and

$$T'_K = T_K \cdot \frac{r_a + R_L}{r_a + R_L + (\mu + 1) R_K}.$$

At operating frequencies C_K bypasses the cathode resistor as its impedance is very much less than R_K , and the gain is

$$A_0 = \frac{-\mu R_L}{r_a + R_L} \quad (= -g_m R).$$

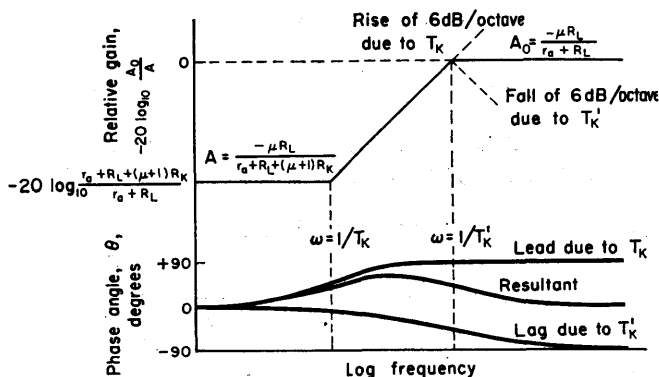


FIG. 3.12. Straight line approximation of eqn. (3.8). Effect of cathode bypass capacitor at low frequency. At midband the bias network has no effect on the frequency response.

At very low frequencies C_K becomes less effective and

$$A(s) = \frac{-\mu R_L}{r_a + R_L + (\mu + 1) R_K}.$$

C_K must be made large enough to ensure that it is effective in bypassing R_K in the required operating frequency band.

The frequency response is of the form of Fig. 3.12 and can be obtained by applying the methods of § 3.3.

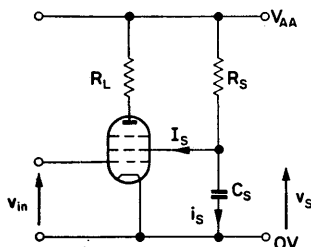


FIG. 3.13. Pentode with screen grid decoupling. Signal currents are passed to earth through the decoupling capacitor C_S .

3.7. EFFECT OF SCREEN DECOUPLING ON FREQUENCY RESPONSE

When the screen grid current is supplied from a series resistor, as described in § 1.7, gain will be very much reduced unless the impedance of the screen network is made negligible by a decoupling capacitor. Such a network is shown in Fig. 3.13.

Screen Grid Degeneration

The signal voltage developed at the screen grid is

$$v_s = \frac{-\mu_s Z_S}{r_s + Z_S} v_{in}, \quad (3.9)$$

since the screen acts in a manner similar to the anode of a triode. If the screen is fully decoupled the voltage v_s is zero, as Z_S is effectively zero.

As the signal frequency is reduced the impedance of C_S will increase and at zero frequency Z_S , which is R_S in parallel with C_S , becomes R_S .

If the screen voltage varies, the signal voltage at the anode is less than it would be if the screen were held constant.

If v_{in} is positive-going, v_s will fall, if not decoupled, reducing the g_m and consequently reducing the anode voltage change.

The simplest method of assessing the effect of the screen grid is to use eqn. (3.9) and refer the effect of v_s back to the control grid.

$$\mu_s = \left[\frac{\delta V_s}{\delta V_{in}} \right] \quad (I_s \text{ constant}), \quad (3.10)$$

$$r_s = \left[\frac{\delta V_s}{\delta I_s} \right] \quad (V_{in} \text{ constant}), \quad (3.11)$$

$$Z_S(s) = \frac{R_S}{1 + sC_S R_S}. \quad (3.12)$$

These parameters are defined in the same manner as μ and r_a . The anode voltage has only a second order effect on their values.

The voltage at the screen grid can be referred to the control grid by dividing v_s by μ_s .

Thus $v_{in} + v_s/\mu_s$ is the effective control grid voltage, and

$$v_{in}(\text{effective}) = v_{in} \left(1 - \frac{Z_S}{r_s + Z_S} \right) = v_{in} \frac{r_s}{r_s + Z_S}. \quad (3.13)$$

The voltage gain,

$$A(s) = A_0 \frac{r_s}{r_s + Z_S} \quad [\text{where } A_0 \text{ is the midband gain, see eqn. (3.1)}],$$

$$= A_0 \frac{r_s}{r_s + R_S} \cdot \frac{1 + sC_S R_S}{1 + [sC_S R_S r_s / (R_S + r_s)]}, \quad (3.14)$$

$$= A_S \frac{1 + sT_S}{1 + sT'_S}, \quad (3.15)$$

where

$$A_S = A_0 \frac{r_s}{r_s + R_S},$$

$$\left. \begin{aligned} T_S &= C_S R_S \\ T'_S &= T_S \frac{r_s}{R_S + r_s} \end{aligned} \right\} T_S > T'_S.$$

EXAMPLE. Referring to Fig. 3.13, let the valve be an EF86, $R_L = 100 \text{ k}\Omega$, $R_S = 390 \text{ k}\Omega$, $C_S = 0.002 \text{ }\mu\text{F}$ and $V_S = 110 \text{ V}$. The measured values of r_s and μ_s are $110 \text{ k}\Omega$ and 40 respectively.

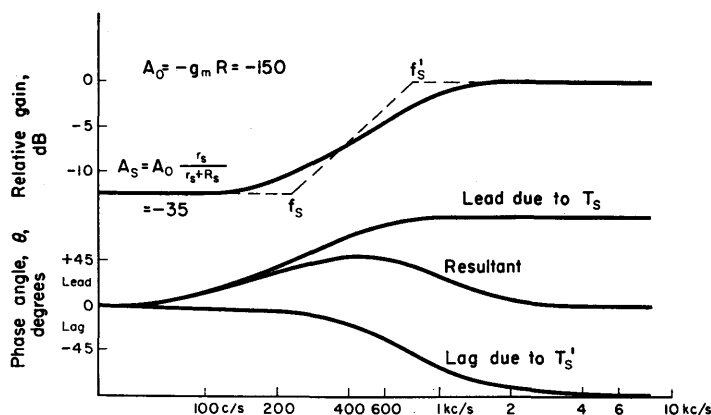


FIG. 3.14. Measured and calculated response for partially decoupled screen grid. Maximum phase shift is 60° at $f = \sqrt{(f_s f'_s)}$. The straight line approximation is drawn by joining f_s on the A_1 line to f'_s on the A_3 line.

Voltage gain, with screen decoupled, $A_0 = -150$.

Voltage gain, for $\omega C_S = 0$, $A_S = -35$.

$$T_S = C_S R_S = 7.8 \times 10^{-4} \text{ sec},$$

$$T'_S = T_S \frac{r_s}{r_s + R_S} = 1.7 \times 10^{-4} \text{ sec}.$$

Therefore

$$\omega_s = 1280 \text{ r/s}, \quad \omega'_s = 5800 \text{ r/s},$$

and

$$f_s = 260 \text{ c/s}, \quad f'_s = 920 \text{ c/s}.$$

The frequency response of this example is plotted in Fig. 3.14.

3.8. ANODE DECOUPLING (Fig. 3.15)

Anode decoupling can be used to eliminate signal currents from the power supply of a network. It will also reduce the possibility of signals entering a network from the power supply leads. In

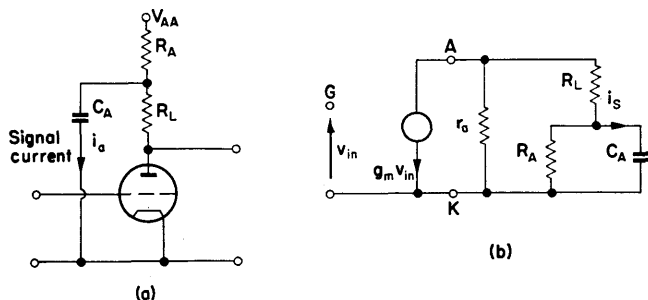


FIG. 3.15. Circuit to show anode decoupling, and its equivalent network.

multistage systems, the power supply forms a common impedance and, unless this is very low (as it is with most voltage stabilized supplies), the coupling due to this element can cause oscillation. The frequency of oscillation will be that at which the low frequency phase shifts provide an over-all phase shift of 360° , thus causing positive feedback. This low frequency oscillation is called "motor-boating". All power supplies tend to have a low impedance at high frequency because of the shunt capacitor of the output filter.

The gain of the network of Fig. 3.15b is

$$A = \frac{-\mu(R_L + Z_A)}{r_a + R_L + Z_A},$$

where

$$Z_A = \frac{R_A}{1 + sC_A R_A}$$

(i.e. R_A and C_A in parallel). Thus

$$A(s) = \frac{-\mu R_L}{r_a + R_L} \cdot \frac{1 + [R_A/R_L(1 + sC_A R_A)]}{1 + [R_A/(r_a + R_L)(1 + sC_A R_A)]} \quad (3.16)$$

$$= A_0 \frac{1 + sC_A R_A + (R_A/R_L)}{1 + sC_A R_A + [R_A/(r_a + R_L)]} \quad (3.17)$$

$$= A_0 \frac{1 + (R_A/R_L)}{1 + [R_A/(r_a + R_L)]} \times \frac{1 + [sC_A R_A R_L/(R_A + R_L)]}{1 + [sC_A(r_a + R_L) R_A/(R_A + R_L + r_a)]} \quad (3.18)$$

$$= A_A \frac{1 + sT_A}{1 + sT'_A}, \text{ where } A_A = A_0 \frac{1 + (R_A/R_L)}{1 + [R_A/(r_a + R_L)]}, \quad (3.19)$$

$$T_A = \frac{C_A R_A R_L}{r_a + R_L} \quad \text{and} \quad T'_A = \frac{C_A(r_a + R_L) R_A}{R_A + R_L + r_a}$$

(i.e. $T'_A > T_A$).

EXAMPLE. Anode decoupling is required to reduce any 50 c/s component of the power supply by 100 (i.e. 40 dB).

As f becomes very large the alternating voltage at the anode, due to the power supply, is proportional to $v_r/j\omega C_A R_A$, where v_r is the ripple voltage.

The attenuation of a simple lag is 20 dB/decade (§ 3.3). To reduce 50 c/s ripple by 40 dB it is necessary to introduce a break-point two decades below 50 c/s, i.e. at $\frac{50}{100}$ c/s. Therefore

$$\omega_A = \frac{1}{C_A R_A} = \frac{2\pi \times 50}{100} = 3.14,$$

which yields $C = 2\mu$, $R \doteq 150 \text{ k}\Omega$.

This network will cause the gain of the amplifier to increase at low frequencies and will give a phase lag (see Fig. 3.16).

Thus it is possible for anode decoupling to be used to extend the low frequency bandwidth by making f_A coincide with the 3 dB point of the coupling network.

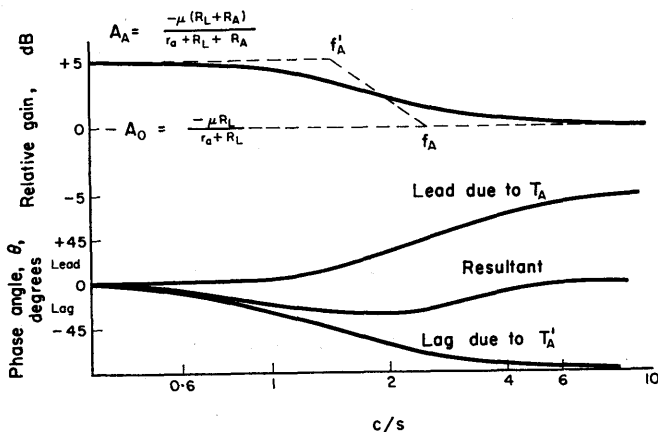


FIG. 3.16. Phase lag due to anode decoupling for a valve with $\mu = 100$, $r_a = 100$, $R_L = 50 \text{ k}\Omega$, $R_A = 150 \text{ k}\Omega$ and $C_A = 2 \mu\text{F}$. Note the increase in gain at low frequency.

3.9. AMPLIFIER TIME RESPONSE⁽³⁾

Complementary to the frequency response of a network is its behaviour to a step input. This is the *time response*, as the amplitude of the output signal varies with time.

The expressions obtained as functions of the complex variable s can be transformed into functions of time as follows.

Effect of Shunt Capacitance (see Fig. 3.4)

When a step of voltage is applied to the input of an amplifier, the output voltage can rise only as C_S is charged. Thus,

for a fast rise, the time constant $C_s R$ must be as small as possible.

$$\begin{aligned} v_{\text{out}}(s) &= \frac{A_0}{(1 + sT_1)} v_{\text{in}}(s) \quad [\text{from eqn. (3.2)}] \\ &= \frac{A_0}{T_1} \cdot \frac{1}{s(s + 1/T_1)} \quad (\text{for unit step input}). \end{aligned}$$

Thus

$$v_{\text{out}}(t) = A_0[1 - \exp(-t/T_1)] \quad (\text{from transform pair No. 3}). \quad (3.20)$$

This expression is shown in Fig. 3.17.

Initial slope of response at $t = 0$ is

$$\frac{d}{dt} v_{\text{out}}(t_0) = \frac{g_m}{C_s}, \quad (3.21)$$

which is identical with the gain-bandwidth product [eqn. (3.5)].

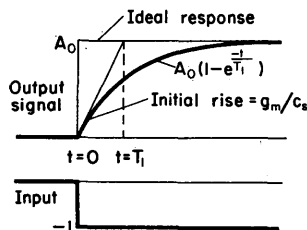


FIG. 3.17. Response to a negative step input showing the effect of shunt capacitance on performance.

Effect of Coupling Capacitance (see Fig. 3.9)

When a step function is applied to the coupling capacitor the full value appears at the grid terminal. As the capacitor charges, this voltage falls to zero on a time constant $T_2 = C_c R$, as shown in Fig. 3.18:

$$v_{\text{out}}(s) = \frac{A_0}{1 + (1/sT_2)} v_{\text{in}}(s) \quad [\text{from eqn. (3.6)}].$$

For a negative step function input,

$$v_{\text{out}}(t) = A_0 \exp(-t/T_2) \quad (3.22)$$

(from transform pair No. 2).

In most applications T_2 will be much greater than the length of any pulse τ that constitutes the input signal. The top of the

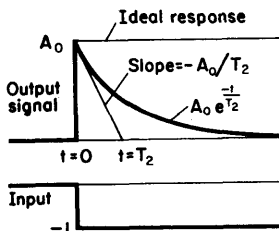


FIG. 3.18. Time response to a step input showing the effect of coupling capacitance.

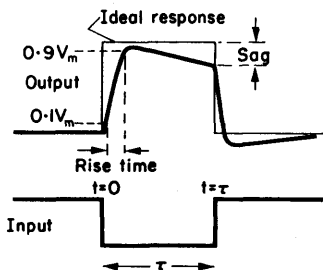


FIG. 3.19. Pulse response showing the effect of C_s and C_c . Rise time is the time the waveform takes to rise from 0.1 to 0.9 of its final value.

pulse falls linearly with time and the slope is proportional to $1/T_2$. If C is infinite (or the amplifier is direct coupled) the slope will be zero. The fall in output amplitude is called "sag".

Combined Effects of Coupling and Shunt Capacitance

If the high frequency performance is inadequate, the rise time will be excessive, while large sag indicates poor low frequency performance (see Fig. 3.19):

$$\text{Rise time} \doteq 2.2 R_L C_s. \quad (3.23)$$

$$\text{Percentage sag} \doteq \frac{\tau}{C_C R_G} \cdot 100. \quad (3.24)$$

3.10. TANDEM STAGES

As straight line asymptotes are in logarithmic form, they can be added arithmetically. An example is given in Chapter 6.

3.11. TRIODE AMPLIFIER

DESIGN EXAMPLE 3.1

Required, a capacitively coupled amplifier having a voltage gain of 10. A 300 V supply is available. Let the valve chosen be a 12 AU7 whose characteristics are plotted in Fig. 3.20. If a load line for $R_L = 20 \text{ k}\Omega$ is constructed, it is obvious that the required gain can be achieved.

If the operating bias is chosen as -5 V ,

$$\begin{aligned} R_K &= \frac{-V_{GK}}{I_A} = \frac{5 \text{ V}}{7 \text{ mA}} \\ &= 714 \Omega \quad (\text{a } 680 \Omega \text{ resistor is suitable}). \end{aligned}$$

High frequency response. The upper 3 dB point is given by $\omega_1 = 1/T_1$, where $T_1 = G/C$ and $G = g_a + G_L$.

The output capacitance of the valve is nominally 0.5 pF . Wiring capacitance will raise the value of C to 18 pF . The r_a can

Low frequency response.

(a) *Coupling capacitor and grid leak.* If the input signal is supplied from a low impedance source the time constant $T_2 = C_C R_G$.

For the gain to be down by 3 dB at $f = 100$ c/s,

$$\omega_2 = 680 \text{ r/s} \quad \text{and} \quad T_2 = \frac{1}{680} \text{ sec.}$$

$$R_G = \frac{10^6}{680 \times 0.01} \Omega \quad (\text{for } C_C = 0.01 \mu) = 147 \text{ k}\Omega.$$

Let

$$R_G = 150 \text{ k}\Omega.$$

(b) *Cathode bypass capacitor.* If the cathode resistor is not bypassed the amplifier gain is

$$A = \frac{-\mu R_L}{r_a + R_L + (\mu + 1) R_K} \quad [\text{from eqn. (1.12)}]$$

$$= -8.7 \quad \text{which is below the specification.}$$

To eliminate the reduction in gain due to negative feedback at signal frequencies, C_K must be large enough not to introduce a breakpoint above 25 c/s.

The high frequency breakpoint due to the cathode impedance is given by

$$\omega = \frac{1}{C_K R_K \{(r_a + R_L) / [r_a + R_L + (\mu + 1) R_K]\}} \quad (\text{from } \S 3.6)$$

$$= \frac{1}{C_K R_K \times 0.69}.$$

For

$$\omega = 157 \text{ r/s} \quad (f = 25 \text{ c/s}), \quad R_K = 680 \Omega,$$

and

$$C_K = \frac{1}{157 \times 680 \times 0.69} = \frac{10^{-5}}{0.736} = 13.5 \mu\text{F}.$$

A suitable value would be $C_K = 20 \mu\text{F}$, 6 V working.

3.12. PENTODE AMPLIFIER

Because of its much greater amplification factor μ , it is possible by using a pentode to obtain much larger gain from a single amplifying stage than with a triode. The maximum gain possible from a valve is the amplification factor. This value of voltage

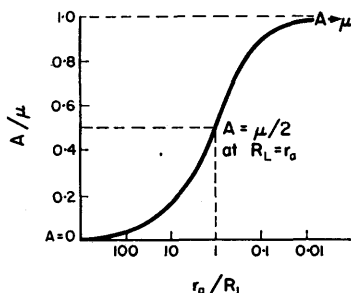


FIG. 3.21. Normalized gain as a function of normalized r_a for $\mu = 50$, $r_a = 10 \text{ k}\Omega$ and $R_L = 100 \text{ k}\Omega$. $r_a/R_L = 0.1$, $A/\mu = 0.91$ or $A = 45.5$.

amplification is approached when the load resistance tends to infinity as shown in Fig. 3.21.

Gain

$$A = \frac{-\mu R_L}{r_a + R_L} \quad (1.11b)$$

$$= \frac{-\mu}{(r_a/R_L + 1)}$$

$$\doteq -\mu \quad \text{for } R_L \gg r_a.$$

For small anode currents μ is reduced and r_a increases as shown in Fig. 1.12.

DESIGN EXAMPLE 3.2 (Fig. 3.22)

Required, an amplifier with nominal voltage gain of 150 and having signal inversion. The bandwidth must extend from 100 c/s to a minimum of 50 kc/s. A 300 V supply is available.

Such a performance can be readily obtained from a 6AU6 r.f. pentode. However, the characteristics usually supplied by the manufacturer relate to the valve being operated as an r.f. amplifier with large anode current, so as to obtain the maximum gain-bandwidth product.

If the correct conditions for low current operation are required, they can be obtained by the method described in Design Example 6.2.

Rather than determining operation over a wide range of conditions, it is possible to estimate various component values and test the network, modifying any components that cause incorrect operation.

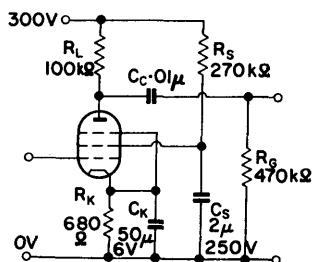


FIG. 3.22. Pentode voltage amplifier.

Anode voltage V_A . An anode operating voltage of 100 V is reasonable for operation of such an amplifier. This is a compromise between maximum anode voltage swing and non-linearity in the low current region.

Estimation of g_m . As relatively low current operation is required to obtain the voltage gain, the value of g_m will be considerably less than the nominal figure of 4.5 mA/V. Let an estimated figure be 2 mA/V.

Load resistor R_L . Gain $A = g_m R_L$ for $R_L \ll r_a$. Thus

$$R_L \doteq \frac{160}{2 \text{ mA/V}} \doteq 80 \text{ k}\Omega.$$

A value of $R_L = 100 \text{ k}\Omega$ will ensure that the required gain of 150 is obtained, when r_a and R_G are taken into consideration.

Anode current I_A . The estimated standing anode current,

$$I_A = \frac{V_{AA} - V_A}{R_L} = \frac{200 \text{ V}}{100 \text{ k}\Omega} = 2 \text{ mA}.$$

Screen current I_S . From the manufacturer's data,

$$I_S \doteq 0.4 I_A = 0.8 \text{ mA}.$$

Screen voltage V_S . A reasonable value is $V_S = 100 \text{ V}$.

Screen resistor R_S .

$$R_S = \frac{V_{AA} - V_S}{I_S} = \frac{300 - 100 \text{ V}}{0.8 \text{ mA}} = 250 \times 10^3.$$

Let it be $270 \text{ k}\Omega$.

Cathode resistor R_K .

$$R_K = \frac{V_K}{I_A + I_S}.$$

An estimate for V_K is half-way between $V_{Gc/o}$ and zero, i.e. $+2 \text{ V}$.

$$R_K = \frac{2 \text{ V}}{2.8 \text{ mA}} = 714 \Omega.$$

Let it be the preferred value of 680Ω .

Although the procedure given above may seem to be somewhat arbitrary, the negative feedback implicit in cathode biasing, and current operation of the screen grid, will ensure that operation will conform reasonably closely to that estimated (Fig.3.23).

If an EF91 valve is used in place of the 6AU6, the performance is comparable, although the g_m of the former valve is

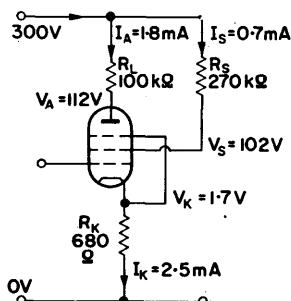


FIG 3.23. D.C. voltages for a 6AU6 (EF94).

considerably higher, giving a higher gain (250 compared with 220). The ratio of screen current to anode current (the partition factor) is smaller for the EF91 and it may be desirable to increase R_S from 270 to 390 kΩ to raise V_A (see Fig. 3.24).

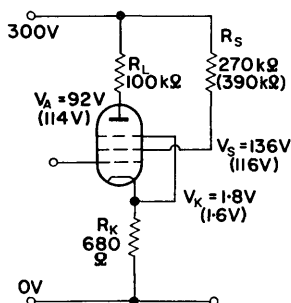


FIG. 3.24. D.C. voltages for a 6AM6 (EF91), for $R_S = 270 \text{ k}\Omega$ and (figures in brackets) $390 \text{ k}\Omega$.

Coupling network. For the network in Fig. 3.1 the time constant associated with the coupling capacitor is

$$T_2 = C_C \left(R_G + \frac{r_a R_L}{r_a + R_L} \right) \quad [\text{from eqn. (3.6)}]$$

$$\div C_C(R_G + R_L).$$

Let the low frequency bandwidth limit be $f_2 = 50$ c/s, to ensure that the overall amplifier specification is obtained.

Therefore

$$\omega_2 = 314 \text{ r/s}$$

and

$$T_2 = 3.19 \times 10^{-3} \text{ sec.}$$

For $R_G = 470 \text{ k}\Omega$,

$$C_C = \frac{T_2}{R_G + R_L} = \frac{3.2 \times 10^{-3}}{570 \times 10^3},$$

$$= 0.0056 \text{ }\mu\text{F.}$$

A suitable value for C_C would be $0.005 \text{ }\mu\text{F.}$

Bypass capacitors C_K , C_S . The bypass capacitors for both the screen and cathode can be found by trial. If with an input signal of 50 c/s, the output is observed on an oscilloscope, values of C_K and C_S can be found that give the maximum amplitude and any further increase in size has no effect.

Alternatively, the values can be calculated using eqns. (3.8) and (3.15).

Cathode bypass capacitor. So as not to affect appreciably the 50 c/s bandwidth limit, let

$$f'_K = 10 \text{ c/s, i.e. } \omega'_K = 62.8 \text{ r/s}$$

$$T'_K = 15.9 \times 10^{-3} \text{ sec}$$

$$= \frac{C_K R_K}{1 + g_m R_K} \quad \text{from eqn. (3.8) (for } R_L \ll r_a).$$

Thus,

$$C_K = \frac{T'_K(1 + g_m R_K)}{R_K} = \frac{15.9 \times 10^{-3}(1 + 2 \times 0.68)}{680},$$

$$= 55 \mu\text{F}.$$

A 50 μF low voltage electrolytic capacitor would be suitable. The cathode network causes the gain to fall at 6 dB/octave below 10 c/s. This fall continues until

$$\omega_K = \frac{1}{C_K R_K} = \frac{1}{55 \times 10^{-6} \times 680} = 27 \text{ r/s},$$

i.e. $f_K = 4.3 \text{ c/s}.$

Both the cathode and screen networks provide phase advance and it is, in many cases, desirable that the two maxima do not occur at the same frequency.

Screen bypass capacitor. Let the upper frequency

$$f'_S = 4 \text{ c/s}, \text{ so that } \omega'_S = 25.1 \text{ r/s}.$$

$$T'_S = 39.8 \times 10^{-3} = \frac{r_s}{r_s + R_S} C_S R_S \quad [\text{from eqn. (3.15)}]$$

$$= \frac{A_S}{A_o} C_S R_S.$$

$$A_S = -20 \quad (C_S = 0).$$

$$A_o = -220 \quad (R_S \text{ fully bypassed}).$$

If the appropriate value of r_s is not known (it frequently is not), it can be found by measuring A_S and A_o . However, the latter values can be directly used in the above equation.

Thus,

$$C_s = \frac{T'_s}{R_s} \cdot \frac{A_o}{A_s} = \frac{1}{25.1 \times 270 \times 10^3} \times \frac{220}{20} = 1.62 \mu\text{F}.$$

$$\begin{aligned} T_s &= C_s R_s = 1.62 \times 10^{-6} \times 270 \times 10^3 \text{ sec} \\ &= 438 \times 10^{-3} \text{ sec.} \end{aligned}$$

$$\omega_s = 2.3 \text{ r/s} \quad \text{and} \quad f_s = 0.37 \text{ c/s.}$$

Let

$$C_s = 2 \mu\text{F}.$$

High frequency response. The h.f. time constant is $T_1 = C_s R$, where C_s is the total shunt capacitance and R is the total shunt resistance.

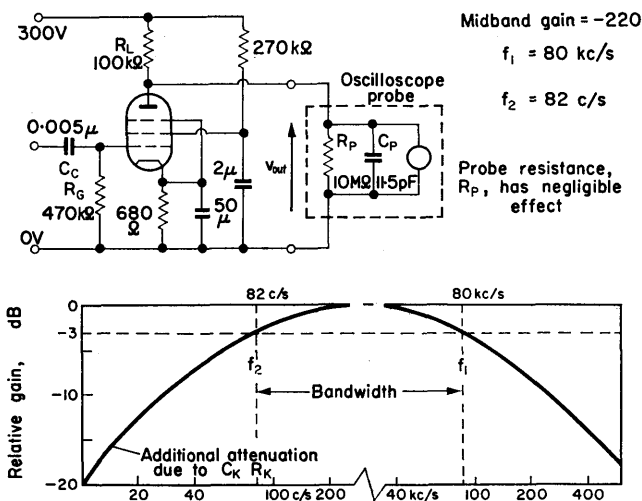


FIG. 3.25. Measured amplitude response for a 6AU6 pentode amplifier. From the value of $f_1 = 80 \text{ kc/s}$, the total shunt capacitance is 22 pF, of which 12 pF is contributed by the measuring instrument. The amplifier stray capacitance is thus 10 pF.

The shunt capacitance is made up of the output capacitance of the valve, the wiring capacitance and the estimated input or load capacitance, giving a total of approximately 15 pF.

An estimate for the total shunt resistance is 80 k Ω (100 k Ω shunting the r_a of the valve). Thus, $T_1 = 1.2 \times 10^{-6}$ sec, so that $\omega_1 = 830 \times 10^3$ r/s and $f_1 = 130$ kc/s (see Fig. 3.25).

Use of cathode follower output. If the pentode operates into a cathode follower, the performance of the pentode amplifier is made independent of the load. In the previous example the gain

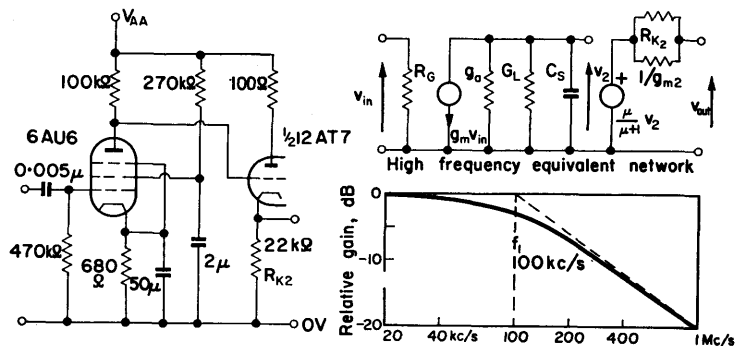


FIG. 3.26. Amplifier with cathode follower output. The bandwidth is increased to 100 kc/s, and the output stage adds 8 pF stray capacitance to the 10 pF of the pentode stage.

is a function of the external load resistance, and any added capacitance reduces the bandwidth. The cathode follower adds shunt capacitance made up principally of C_{ga} , the grid to anode inter-electrode capacitance and socket capacitance.

Using the technique employed in Design Example 6.2, let the valve current be 5 mA.

Then,

$$R_{K2} = \frac{100 \text{ V}}{5 \text{ mA}} \div 22 \text{ k}\Omega.$$

This is shown in Fig. 3.26.

3.13. HIGH FREQUENCY PERFORMANCE OF CAPACITIVELY COUPLED TRANSISTOR AMPLIFIERS

Effects similar to those associated with valve amplifiers are present, but because of the nature of transistor operation the approach to amplifier design is different.

The hybrid equivalent network of Fig. 3.27 can be modified to form a network similar to the low frequency h parameter network with the feedback generator zero. This is a reasonable

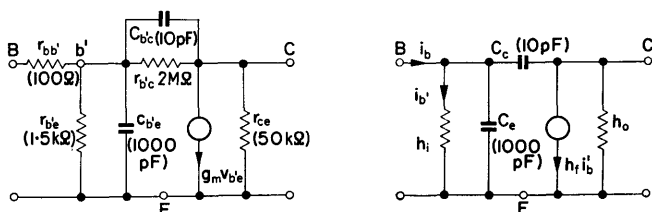


FIG. 3.27. Modified hybrid network.

approximation as the input resistance does not change greatly, for even quite large load resistance variations (see Fig. 2.26).

The resistance $r_{bb'}$, the ohmic resistance between the active base region and the base lead, is sufficiently small in this type of network to be neglected. The two capacitances which affect performance are c_e , the capacitance across the emitter-base junction, and c_c the depletion layer capacitance across the reverse biased collector-base junction. The reverse bias clears the majority charge carriers from the junction area which acts as the dielectric of a capacitor. Capacitance c_e is proportional to $1/\sqrt{V_{CB}}$. This simplified network enables rapid assessment of performance with adequate accuracy.

Output Short Circuited (Fig. 3.28)

The feedback capacitance c_c can be neglected as it is shunted by c_e which is 100 times larger. At low frequencies $i_b' = i_b$, but

at higher frequencies h_i is bypassed by c_e and the output current $h_f i'_b$ is reduced:

$$i'_b = \frac{1/sc_e}{h_i + (1/sc_e)} i_b = \frac{i_b}{1 + sc_e h_i}. \quad (3.25)$$

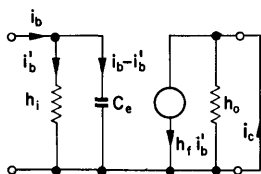


FIG. 3.28. Equivalent network with output short circuited.

$$i_c/i_b = h_f/(1 + sT_B), \text{ where } T_B = c_e h_i.$$

Short circuit current gain,

$$\frac{i_c}{i_b} = \frac{h_f}{1 + sT_B} \quad (\text{where } T_B = c_e h_i). \quad (3.26)$$

EXAMPLE. $h_i = 2.2 \text{ k}\Omega$ and $c_e = 700 \text{ pF}$.

Then

$$T_B = 1.54 \times 10^{-6} \text{ sec}$$

and

$$f_1 = \frac{10^6}{2\pi \times 1.54} \text{ kc/s} = 103 \text{ kc/s}.$$

Thus the relative short circuit current gain can be represented by a simple lag with a breakpoint at 103 kc/s, as shown in Fig. 3.29.

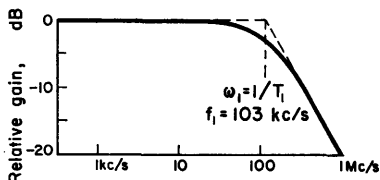


FIG. 3.29. Relative gain against frequency for short circuit output.

Input is considered as a passive lag.

Load Conductance G_L

When the output is not a short circuit, as in Fig. 3.30, the effect of c_c may not be negligible.

The current in c_c is now

$$i_2 = (v_b - v_c) sc_c \quad \text{where} \quad v_c = -i_c/G_L. \quad (3.27)$$

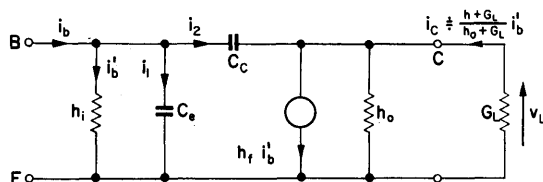


FIG. 3.30. Network including the load G_L .

But,

$$i'_b = \frac{v_b}{h_i}, \quad \text{and} \quad v_c = \frac{-h_f}{h_o + G_L} \cdot \frac{v_b}{h_i},$$

or

$$v_c = -g'_m R v_b \quad \left(\text{where } g'_m = \frac{h_f}{h_i} \quad \text{and} \quad R = \frac{1}{h_o + G_L} \right).$$

Substituting for v_c in eqn. (3.27),

$$i_2 = (1 + g_m R) sc_c v_b = (1 - A_v) sc_c v_b$$

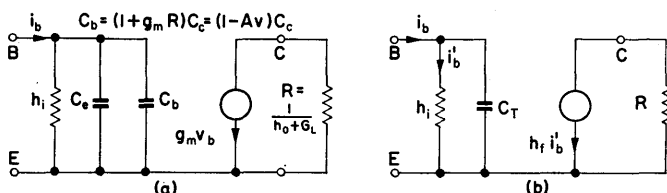


FIG. 3.31. Simplified representation of a transistor with a resistive load.

where the voltage gain $A_v = v_c/v_b$, and c_c can be replaced by a capacitor $(1 + g_m R) c_c$ in parallel with c_e as in Fig. 3.31 a.

The direct effect of c_c on the collector is negligible compared with the base time constant and, in most cases, the collector can be represented as in Fig. 3.31 b. Using Fig. 3.31 b the h.f. break-point can be determined.

Current Gain at h.f.

$$A_i = \frac{A_o}{1 + sT_1}, \quad (3.28)$$

where

$$A_o = \frac{G_L}{h_o + G_L} \quad \text{and} \quad T_1 = h_i C_T.$$

EXAMPLE. $h_i = 2.2 \text{ k}\Omega$, $c_e = 700 \text{ pF}$, $c_c = 10 \text{ pF}$, $R_C = 1 \text{ k}\Omega$, $h_f = 100$ and $1/h_o = 25 \text{ k}\Omega$.

$$\begin{aligned} A_v &= -\frac{h_f}{h_i(G_L + h_o)} = -\frac{100}{2.2 \times 10^3 \times (1000 + 40)10^{-6}} \\ &= -44. \end{aligned}$$

$$c_b = (1 - A_v) c_c = 45 \times 10 \text{ pF} = 450 \text{ pF}.$$

$$C_T = c_e + c_b = 1150 \text{ pF}.$$

$$\begin{aligned} T_1 &= C_T h_i = 1150 \times 10^{-12} \times 2.2 \times 10^3 \\ &= 2.5 \times 10^{-6} \text{ sec.} \end{aligned}$$

$$\omega_1 = \frac{1}{T_1} = 400 \times 10^3 \text{ r/s.}$$

$$f_1 = \frac{\omega_1}{2\pi} = 64 \text{ kc/s.}$$

The frequency response curves for a typical alloy transistor with various collector resistors are shown in Fig. 3.32.

Thus if h_i , h_f , h_o , c_e and c_c are known the high frequency response can be estimated.

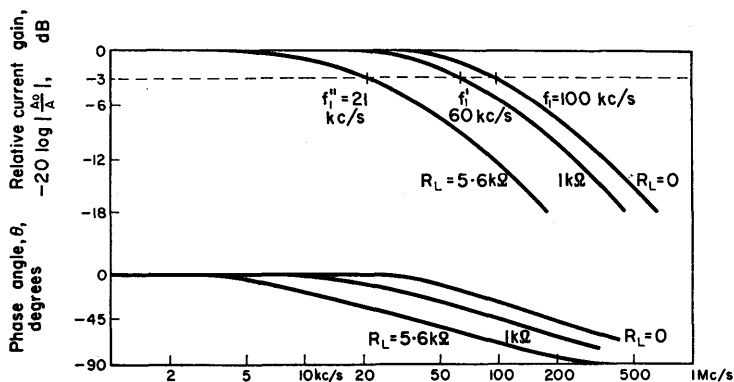


FIG. 3.32. Frequency response for an OC44 transistor with various collector resistors.

Measurement of c_e and c_c

Values of c_e and c_c for a particular transistor can be found by finding the time constant T_1 ,

- (a) with output short circuit $T_1(a)$,
- (b) with known load resistance $T_1(b)$.

T_1 is determined by finding the frequency at which the current gain A_0 falls by 3 dB to $0.7 A_0$ in each of the above cases. For case (a)

$$h_i = \frac{V_{be}}{i_b} \quad \text{and} \quad c_e = \frac{T_{1(a)}}{h_i}. \quad (3.29)$$

Time constant $T_1(b)$ is found for a load resistance R_C giving a voltage gain of the order of 100 ($A_v = v_{ce}/v_{be}$).

$$C_T = \frac{T_{1(b)}}{h_i}, \quad (3.30)$$

$$c_b = C_T - c_e. \quad (3.31)$$

But,

$$C_T = (1 - A_v) c_c + c_e. \quad (3.32)$$

Therefore

$$c_b = (1 - A_v) c_c, \quad (3.33)$$

or

$$c_c = \frac{C_T - c_e}{1 - A_v}. \quad (3.34)$$

EXAMPLE.

$$A_v = \frac{v_{ce}}{v_{be}} = -209 \quad (\text{negative sign indicates signal inversion}).$$

$$h_i = \frac{v_{be}}{i_b} = \frac{22 \text{ mV}}{10 \mu\text{A}} = 2.2 \text{ k}\Omega.$$

For $R_C = 100 \Omega$ (output effectively short circuited),
 $f_1 = 100 \text{ kc/s}$,

$$\omega_1 = 628 \times 10^3 \text{ r/s},$$

and

$$T_1 = 1.6 \times 10^{-6} \text{ sec.}$$

Therefore

$$c_e = \frac{1.6 \times 10^{-6}}{2.2 \times 10^3} = 730 \text{ pF} \quad [\text{using eqn. (3.29)}].$$

For $R_C = 5.6 \text{ k}\Omega$, $f_1 = 21 \text{ kc/s}$, $\omega_1 = 132 \times 10^3$, and
 $T_1 = 7.6 \times 10^{-6} \text{ sec.}$

Therefore

$$C_T = \frac{7.6 \times 10^{-6}}{2.2 \times 10^{-3}} = 3460 \text{ pF} \quad [\text{using eqn. (3.30)}],$$

$$c_b = C_T - c_e = 2730 \text{ pF} \quad [\text{eqn. (3.31)}],$$

$$c_c = \frac{c_b}{1 - A_v} = \frac{2730}{210} = 13 \text{ pF} \quad [\text{from eqn. (3.33)}].$$

3.14. LOW FREQUENCY PERFORMANCE OF CAPACITIVELY COUPLED STAGES

As the frequency is reduced the increased impedance of C_C reduces i_{in} , the transistor input current (see Fig. 3.33).

At frequencies where r_{in} is much greater than $1/\omega C_C$,

$$i_{in} = \frac{R_{out}}{R_{out} + r_{in}} \cdot i \quad (\text{if } R_B \gg r_{in}),$$

and for efficient current transfer, r_{in} should be much less than R_{out} .

If i is the current from the transistor of the previous stage, R_{out} will be the resistance of $1/h_o$ in parallel with R_C for that

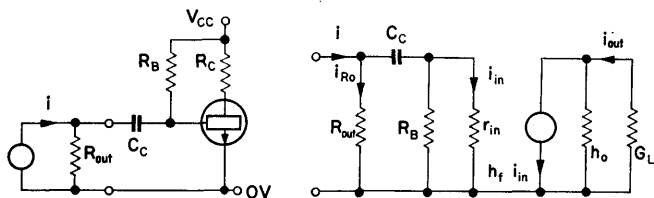


FIG. 3.33. Capacitively coupled amplifier with low frequency equivalent network.

stage. If these two terms are both $20 \text{ k}\Omega$, R_{out} will be $10 \text{ k}\Omega$ and for r_{in} of $2 \text{ k}\Omega$ the current transfer $i_{in}/i = 10 \text{ k}\Omega / (10 \text{ k}\Omega + 2 \text{ k}\Omega) = 5/6$.

For efficient transfer, R_C should be as large as possible.

At low frequencies

$$i_{in}(s) = \frac{R_{out}}{R_{out} + r_{in} + (1/sC_C)} \cdot i(s). \quad (3.35)$$

The current transfer falls by 3 dB when $R_{out} + r_{in} = 1/\omega C_C$ or

$$\omega = \frac{1}{C_C(R_{out} + r_{in})} = \frac{1}{T_2}, \quad (3.36)$$

where $T_2 = C_C(R_{out} + r_{in})$.

Equation (3.36) can be rewritten with the frequency invariant components extracted:

$$i_{in}(s) = \frac{R_{out}}{R_{out} + r_{in}} \cdot \frac{1}{1 + (1/sT_2)} i(s), \quad (3.37)$$

$$\begin{aligned} i_{out}(s) &= A_0 i_{in} \quad \left(\text{where } A_0 = \frac{h_f G_L}{h_o + G_L} \right) \\ &= A_0 \frac{R_{out}}{R_{out} + r_{in}} \cdot \frac{1}{1 + (1/sT_2)} i(s) \\ &= A_2 \frac{1}{1 + (1/sT_2)} i(s) \quad (3.38) \\ &\quad \left(\text{where } A_2 = A_0 \cdot \frac{R_{out}}{R_{out} + r_{in}} \right). \end{aligned}$$

For coupling capacitor C_C ,

$$A(s) = A_2 \frac{1}{1 + (1/sT_2)}. \quad (3.39)$$

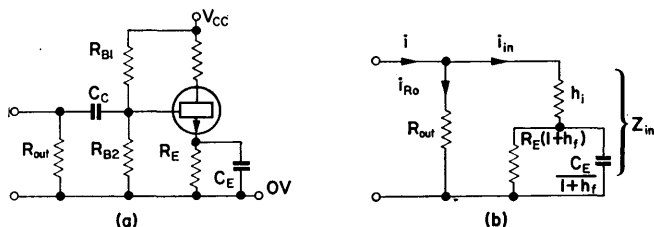


FIG. 3.34. Input network neglecting bias resistors and coupling capacitor. R_O includes R_B .

Effect of Emitter Capacitor on Low Frequency Performance

If an emitter resistor R_E is used for stabilization (see § 2.11), usually a bypass capacitor C_E will be employed to increase gain at signal frequencies.

At sufficiently low frequency (or if C_E is not present), the input resistance of the transistor is increased from h_i to $h_i + (1 + h_f)R_E$. This follows from considerations given in § 2.12, and shown in Fig. 3.34.

$$\begin{aligned} z_{in}(s) &= h_i + (1 + h_f) Z_E, \\ &= h_i + (1 + h_f) \frac{R_E}{1 + sC_ER_E}. \end{aligned}$$

This should be inserted in place of r_{in} for the expression for A_2 in eqn. (3.38).

Thus,

$$\begin{aligned} A_2(s) &= \frac{R_{out}}{R_{out} + z_{in}} A_0 \\ &= \frac{R_{out}}{R_{out} + h_i + (1 + h_f) [R_E/(1 + sC_ER_E)]} A_0 \\ &= \frac{R_{out}}{R_{out} + h_i + (1 + h_f) R_E} \times \\ &\quad \times \frac{1 + sC_ER_E}{1 + \{sC_ER_E(R_{out} + h_i)/[R_{out} + h_i + (1 + h_f) R_E]\}} A_0. \end{aligned} \quad (3.40)$$

Thus, gain expression for partially bypassed emitter resistor is

$$A(s) = A_E \frac{1 + sT_E}{1 + sT'_E},$$

where

$$A_E = \frac{R_{out}}{R_{out} + h_i + (1 + h_f) R_E} A_0, \quad (3.41)$$

$$T_E = C_ER_E \quad \text{and} \quad T'_E = \frac{T_E(R_{out} + h_i)}{R_{out} + h_i + (1 + h_f) R_E}.$$

$$T_E > T'_E.$$

This is illustrated in Fig. 3.35.

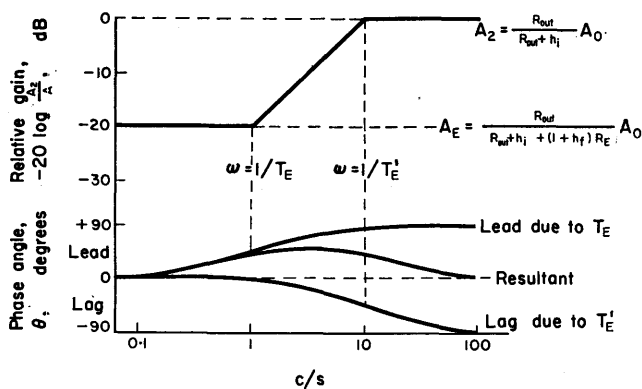


FIG. 3.35. Effect of emitter time constant on amplifier performance.

$$C_E R_E = 1 \text{ c/s and } A_2/A_E = 10.$$

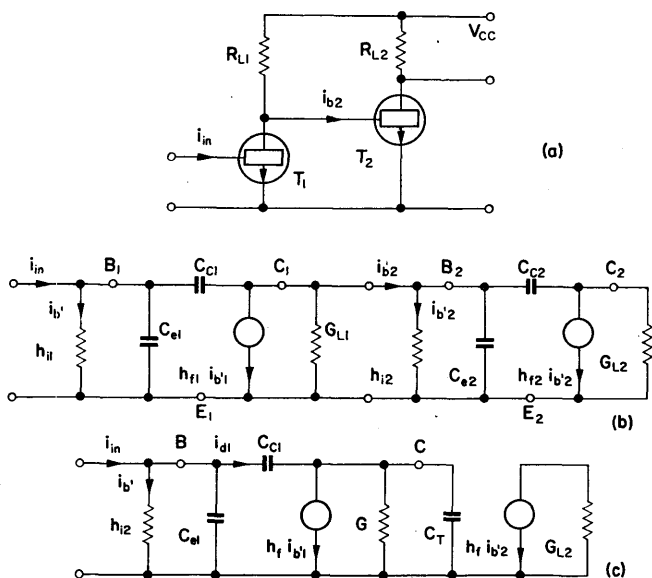


FIG. 3.36. Reduction of the equivalent network of a two-stage amplifier to estimate h.f. performance.

3.15. TANDEM STAGES OF TRANSISTOR AMPLIFIER

If one transistor is followed by another, the first has the input impedance of the second as its load impedance.

In Fig. 3.36b the effect of the collector capacitance c_{c2} is to augment c_{e2} giving rise to C_T of Fig. 3.36c.

Part of the input current will flow in c_{c1} , the amount being determined by the voltage gain between the base and collector. The voltage gain of T_1 is complex, because the collector load is G and C_T in parallel.

The voltage gain between B and C ,

$$A_{v1} = - \frac{g_m R}{1 + sT}, \quad (3.42)$$

where $T = C_T/G$ and $R = 1/G$.

Thus,

$$i_{d1} = v_{be} \left(1 + \frac{g_m R}{1 + sT} \right) s c_{c1},$$

and the impedance to be shunted across the base of T_1 by c_{c1} is

$$Z(s) = \frac{1 + sT}{[(1 + g_m R) + sT] s c_{c1}},$$

or

$$Z(j\omega) = \frac{1 + j\omega T}{j\omega c_{c1}(1 + g_m R + j\omega T)}. \quad (3.43)$$

Separating real and imaginary components,

$$\begin{aligned} Z(j\omega) &= \frac{1 + g_m R + (\omega T)^2}{j\omega c_{c1}(1 + g_m R)^2 + (\omega T)^2} \\ &\quad + \frac{T g_m R}{c_{c1}[(1 + g_m R)^2 + (\omega T)^2]} \end{aligned} \quad (3.44)$$

$$\div \frac{1}{j\omega c_{c1} \cdot g_m R} + \frac{C_T}{c_{c1} g_m} \quad \text{as } g_m R \gg 1, \quad (3.45)$$

and for frequencies where $\omega T < 1$.

The added impedance is a resistance $C_T/c_{c1}g_m$ in series with capacitance $c_{c1}g_mR$. The resulting simplified network is shown in Fig. 3.37.

DESIGN EXAMPLE 3.3

Required, an amplifier stage with transfer resistance of 100 k Ω and bandwidth from 50 c/s to 20 kc/s. The signal source resistance is 5 k Ω and a peak output of 4 V is required. (Transfer resistance = v_{out}/v_{in} .)

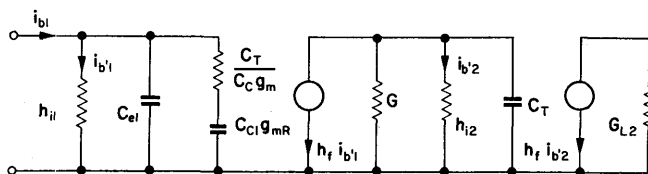


FIG. 3.37. Equivalent network of a two stage transistor amplifier with collector-to-base coupling eliminated. Note that a resistance and capacitance in series appears across the input.

Using emitter stabilization a starting point is $R_B/R_E = 5$ (§ 2.11) where

$$R_B = \frac{R_{B1}R_{B2}}{R_{B1} + R_{B2}}.$$

For a nominal $h_f = 50$ (minimum value for OC44),

$$K = 1 + \frac{h_f R_E}{R_E + R_B} = 1 + \frac{50 \times 1}{1 + 5} = 9.3.$$

Supply voltage. To obtain an output voltage swing of 8 V peak to peak, $V_{CC} = -12$ V is suitable.

Collector resistor.

$$R_T = \frac{h_f}{G_C + h_o} \div \frac{h_f}{G_C} \quad (\text{for } h_o \ll G_C).$$

The transfer resistance of $100\text{ k}\Omega$ requires a collector resistor of $2.2\text{ k}\Omega$. Let the value $2.7\text{ k}\Omega$ be used to allow for the reduction in current gain by the bias network.

Collector current. For the required output voltage $V_C = -7.5\text{ V}$.

$$I_C = \frac{V_{CC} - V_C}{R_C} = \frac{4.5\text{ V}}{2.7\text{ k}\Omega} = 1.7\text{ mA}.$$

Emitter resistor. Allowing 2.5 V across the emitter resistor, and as $I_E = I_C$,

$$R_E \doteq \frac{V_E}{I_E} = \frac{2.5\text{ V}}{1.7\text{ mA}} = 1.5\text{ k}\Omega.$$

Base resistors R_{B1} , R_{B2} . R_B , which is R_{B1} and R_{B2} in parallel $= 5 R_E = 7.5\text{ k}\Omega$.

$$V_B = V_{BE} + V_E$$

$$= -0.15\text{ V} - 2.5\text{ V} \quad \text{for a germanium transistor}$$

$$= -2.65\text{ V}.$$

Neglecting the base current I_B ,

$$\frac{V_B}{V_{CC}} = \frac{2.65\text{ V}}{12\text{ V}} = 0.22$$

$$= \frac{R_{B1}}{R_{B1} + R_{B2}} = \frac{R_B}{R_{B2}} = \frac{5 R_E}{R_{B2}}.$$

Thus,

$$R_{B2} = \frac{5 R_E}{0.22} = \frac{5}{0.22} \times 1.5\text{ k}\Omega = 34\text{ k}\Omega.$$

Also,

$$\frac{R_{B1}}{R_{B2}} = \frac{2.65\text{ V}}{9.35\text{ V}},$$

therefore

$$R_{B1} = \frac{2.65}{9.35} \times 34 \text{ k}\Omega = 9.65 \text{ k}\Omega.$$

Let $R_{B1} = 9.1 \text{ k}\Omega$ and $R_{B2} = 33 \text{ k}\Omega$. The d.c. conditions are shown in Fig. 3.38.

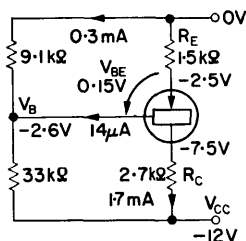


FIG. 3.38. D.C. conditions for a transistor amplifier stage.

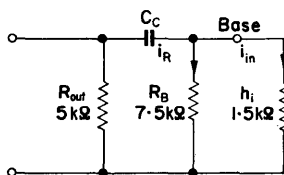


FIG. 3.39. Equivalent network to show the effect of R_B shunting h_i , assuming R_E to be fully bypassed by C_E .

R_B shunts the input of the transistor and reduces the gain, as in Fig. 3.39.

The input resistance h_i to the transistor is nominally $1.5 \text{ k}\Omega$ for a collector current of 1.7 mA .

$$\begin{aligned} R'_T &= \frac{R_E}{R_B + h_i} \cdot \frac{h_f}{G_C + h_o} \\ &= \frac{7.5 \text{ k}\Omega}{7.5 \text{ k}\Omega + 1.5 \text{ k}\Omega} \times \\ &\quad \times \frac{50}{370 \times 10^{-6} + 50 \times 10^{-6}} \div 100 \text{ k}\Omega. \end{aligned}$$

Coupling capacitor.

$$T_2 = C_C(R_{\text{out}} + r_{\text{in}}) = \frac{1}{\omega_2}, \text{ from eqn. (3.36),}$$

where r_{in} is resistance of R_B and h_i in parallel ($= 1.1 \text{ k}\Omega$).

It is required that $f_2 = 50 \text{ c/s}$, or $\omega_2 = 214 \text{ r/s}$.

Therefore

$$T_2 = 3.19 \times 10^{-3} \text{ sec.}$$

$$C_C = \frac{T_2}{R_{\text{out}} + r_{\text{in}}} = \frac{3.19 \times 10^{-3}}{5 \text{ k}\Omega + 1.1 \text{ k}\Omega} = 0.523 \text{ }\mu\text{F.}$$

Let C_C be a $1 \text{ }\mu\text{F}$ electrolytic capacitor.

Emitter resistor bypass capacitor.

$$T'_E = \frac{T_E(R'_{\text{out}} + h_i)}{R'_{\text{out}} + h_i + (1 + h_f) R_E}, \text{ from eqn. (3.41),}$$

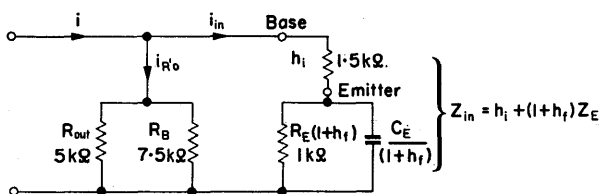


FIG. 3.40. Division of input current between R'_{out} and base.

where R'_{out} is R_{out} in parallel with R_B , as in Fig. 3.40.

$$\begin{aligned} \frac{T'_E}{T_E} &= \frac{R'_{\text{out}} + h_i}{R'_{\text{out}} + h_i + (1 + h_f) R_E} \\ &= \frac{3 \text{ k}\Omega + 1.5 \text{ k}\Omega}{3 \text{ k}\Omega + 1.5 \text{ k}\Omega + (1 + 50) 1.5 \text{ k}\Omega} \\ &\doteq 0.06. \end{aligned}$$

To ensure that the emitter impedance does not affect the gain at 50 c/s let T'_E be $5T_2 = 1.6 \times 10^{-2}$. The breakpoint T'_E will be at 62.8 r/s, i.e. 10 c/s.

$$T'_E = T_E \times 0.06,$$

therefore

$$C_E = \frac{T_E}{R_E} = \frac{1.6 \times 10^{-2}}{0.06 \times 1.5 \times 10^3} = 175 \mu\text{F}.$$

Let C_E be 200 μF .

High frequency performance. This is a function of the transistor capacitances c_e and c_c .

From Fig. 3.32 it is apparent that, with $R_C = 2.7 \text{ k}\Omega$, a 20 kc/s upper frequency limit can be obtained. The completed design is shown in Fig. 3.41.

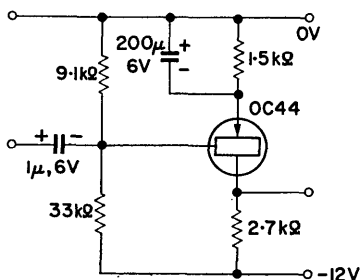


FIG. 3.41. Capacitively coupled transistor amplifier stage of Design Example 3.3.

DESIGN EXAMPLE 3.4

Required, an amplifier with voltage gain greater than $-50,000$ over a frequency range of 100 c/s to 10 kc/s. The required peak output voltage is 10 V.

Voltage gain. $A_V = R_L A_i / r_{in}$, where A_i is the over-all current gain, R_L is the effective load resistance, and r_{in} is the input resistance to the amplifier.

To provide the necessary current gain and signal inversion, three stages are required.

Let the transistors be 2S103 which are silicon mesa types with voltage rating $V_{CEO} = 40$ V and $h_{fe(\min)} = 50$. As shown in Fig. 3.42, these can be directly coupled (see § 6.5). Estimating the

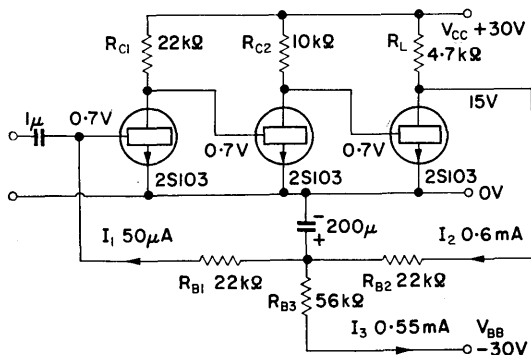


FIG. 3.42. Direct coupled three-stage transistor amplifier with zero frequency stabilization. Since the current through R_{B1} and the voltage at the input base are both small, the junction of R_{B1} , R_{B2} and R_{B3} must be at approximately 0 V. Thus the ratio of the voltages across R_{B2} and R_{B3} is directly proportional to their resistance, i.e. $V_C = R_{B2}/R_{B3} \cdot V_{BB}$.

minimum effective current gain of each stage as 30, the overall current gain $A_i = 27,000$.

Load resistor R_L . If the input transistor is run at a current that gives $r_{in} = 2$ kΩ,

$$R_L = \frac{A_v}{A_i} r_{in} \doteq \frac{50,000}{27,000} \times 2 \text{ k}\Omega = 3.7 \text{ k}\Omega.$$

To allow for loading by the bias network and h_o , let $R_L = 4.7$ kΩ.

Collector supply voltage V_{CC} . As the peak to peak output voltage is 20 V let $V_{CC} = 30$ V.

Collector resistors, R_{C1} and R_{C2} . For T_1 to be run at 1.5 mA, $R_{C1} = 20 \text{ k}\Omega$ and for T_2 to be run at 3.0 mA, $R_{C2} = 10 \text{ k}\Omega$.

Bias network. At operating frequency, R_{B1} and R_{B2} shunt the input and output respectively. To minimize shunting effects let them both be $22 \text{ k}\Omega$, as in Fig. 3.42.

The estimated input current

$$I_1 = \frac{I_{C1}}{h_{fe}} \div \frac{1.5 \text{ mA}}{30} = 50 \mu\text{A}.$$

This current, flowing in R_{B1} , will produce 1.1 V, which must be added to $V_{BE} = 0.7 \text{ V}$ to give the voltage at the junction of R_{B1} and R_{B2} . This is approximately 2 V.

For a collector voltage for T_3 of 15 V, the current in R_{B2} ,

$$I_2 = \frac{15 \text{ V} - 2 \text{ V}}{22 \text{ k}\Omega} \div 0.6 \text{ mA}.$$

R_{B3} must take the difference in current between I_2 and I_1 , that is

$$I_3 \div 0.55 \text{ mA}.$$

For

$$V_{BB} = -30 \text{ V}, \quad R_{B3} = \frac{30 \text{ V} + 2 \text{ V}}{0.55 \text{ mA}} = 58 \text{ k}\Omega.$$

Let the value be $56 \text{ k}\Omega$.

Bypass capacitor C_B . The d.c. stabilization is due to negative feedback provided by the bias network. To eliminate feedback at signal frequency, the capacitor C_B is used. A value of $200 \mu\text{F}$ reduces the feedback by a factor of 3000 at 100 c/s.

Input capacitor. From eqn. (3.36),

$$\omega = \frac{1}{C_C(R_{\text{out}} + r_{\text{in}})},$$

or

$$C_c = \frac{1}{\omega r_{in}} \quad \text{if } R_{out}, \text{ the source resistance, is zero.}$$

(This gives the maximum value of C_c .)

For

$$\omega = 628 \text{ r/s} \quad (f = 100 \text{ c/s}),$$

$$C_c = \frac{1}{628 \times 2 \text{ k}\Omega} = 0.8 \text{ }\mu\text{F}.$$

Let

$$C_c = 1 \text{ }\mu\text{F}.$$

The completed circuit is shown in Fig. 3.42.

CHAPTER 4

Power Amplifiers

4.1. THE CLASS A POWER AMPLIFIER

In a power amplifier the object is to obtain the maximum amount of power from a given valve, while limiting the distortion to a predetermined level. Under Class A conditions the operation is confined to that part of the dynamic characteristic which is reasonably linear, and anode current flows during the whole period of signal input. Assuming the dynamic characteristic to be a straight line, the anode efficiency may be written as:

$$\begin{aligned}\text{Anode efficiency} &= \frac{\text{Power in load}}{V_0 I_0} \\ &= 0.5 \left(1 - \frac{V_{\min}}{V_0} \right) \left(1 - \frac{I_{\min}}{I_0} \right) \quad (4.1)\end{aligned}$$

(see Fig. 1.5). The maximum efficiency theoretically obtained is therefore 50%. To achieve this, however, it would be necessary for both the anode current and the anode voltage to swing to zero and in practice, due to curvature of the characteristic, this would give rise to an undesirable level of distortion. When operated in such a manner as to keep distortion to a minimum, efficiencies of 20–40% may be obtained using pentodes, while a triode would provide a somewhat lower efficiency.

Choice of a Valve

Taking account of these efficiencies, a valve should be chosen having a rating considerably higher than the desired amount of

a.c. power. In general a pentode should have a rating of 3 times the required a.c. power, while if a triode is chosen, a rating of 5 times the a.c. power will be necessary. There remains the choice between a triode, a beam tetrode and a pentode. The pentode has a greater anode efficiency than the triode, particularly when operated at relatively low anode supply voltages. The beam tetrode is similarly superior in this respect. Furthermore, the triode requires a larger exciting voltage for a given power output than do the other two types of valves. However pentode and beam tetrode valves in general have much higher distortion levels in their dynamic characteristics than do triodes. Moreover this distortion contains a significant percentage of third harmonic, being greater for the pentode than for the tetrode, whereas for the triode the second harmonic is predominant.

Where the power valve is to form the output stage of an audio amplifier, this consideration used to be of the utmost importance, since it was recognized that third harmonic distortion was much more objectionable to the ear than was second harmonic distortion. With the advent of negative feedback, however, this serious limitation of the pentode or beam tetrode power amplifier ceased to be important.

Design Considerations

As in the voltage amplifier, the aim is to get the maximum control of anode current by allowing the grid voltage to swing as far as possible on the straight part of the characteristic. In the anode circuit, however, the power amplifier differs widely from the voltage amplifier. When a generator is feeding a resistive circuit, maximum power is transferred when the load resistance is equal to the internal resistance of the generator. In the case of a valve, conditions are somewhat different because of the need to keep distortion to a minimum. In practice the load of a triode power valve should be at least twice its r_a , while the load of a pentode will be less than its r_a .

Design Steps

1. Select a suitable valve, from consideration of the power requirement and acceptable distortion level.
2. Determine the operating point and construct a load line through it.
3. Calculate the grid voltage swing to provide the required power output, and determine the amount of distortion present.
4. Evaluate the cathode resistor which will provide the correct operating bias.
5. From consideration of the minimum frequency to be handled, select a suitable decoupling capacitor for the cathode resistor.

DESIGN EXAMPLE 4.1

Required, an a.c. power of 0.75 W into a resistive load, with distortion not more than 5%. An h.t. supply of 300 V is available.

Valve. Because of the low distortion requirement a triode is obviously necessary, or a suitable pentode may be chosen and connected as a triode. It will moreover be necessary to select a valve having a much higher rating than the specified power. Such a valve is the EL86 having an anode rating of 13 W when operated as a triode, and whose characteristics are given in Fig. 4.1.

Load. From the valve data sheets, the r_a of the valve is given as 665 Ω , so a load may be considered of 3 times this figure, say 2.2 k Ω . If a load line for this resistance is drawn from the point $V_A = 300$, $I_A = 0$, the distortion and power output may then be calculated.

The percentage harmonic distortion is given by the expression

$$\frac{(I_{\max} + I_{\min} - 2I_0) \times 100}{2(I_{\max} - I_{\min})}. \quad (4.2)$$

However, a quick assessment of distortion may be made by measuring the load line and calculating the ratio of its two parts.

For instance, in Fig. 4.1, with the operating point at O , if the ratio of OA to OB is 11 to 9, i.e. a ratio of 1.22, then 5% second harmonic distortion is present. If this figure is less than 1.22, the distortion is less than 5%, there being no distortion when the two parts are equal.

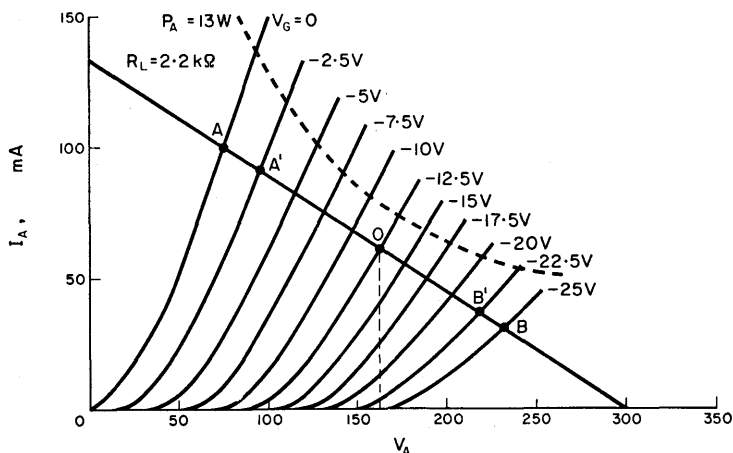


FIG. 4.1. Characteristic curves of an EL86 (triode connected), with a load line of $2.2\text{ k}\Omega$. Note that approximately the same amount of power is dissipated in the load as in the valve.

The power developed in the load is given by the expression

$$\text{Power} = \frac{(V_{\max} - V_{\min})(I_{\max} - I_{\min})}{8}. \quad (4.3)$$

For the load AOB , $V_{\min} = 75\text{ V}$, $V_{\max} = 235\text{ V}$, $I_{\max} = 100\text{ mA}$ and $I_{\min} = 30\text{ mA}$. The a.c. power developed with an input signal of 12.5 V peak is therefore approximately 1.4 W . This is in excess of the required power output, but on measuring the ratio of AO to BO a figure of 1.3 is obtained, indicating a second harmonic content greater than 5%.

Now let the input signal be reduced to 10 V peak, as indicated by the shortened load line $A'O'B'$. The power, calculated as

above, is seen to be 0.86 W and the second harmonic distortion is 5%. A 2.2 k Ω load is therefore satisfactory providing the input signal does not exceed this value. It is perfectly reasonable to limit the input voltage in this way, since in designing a complete amplifier, the output stage should be designed first, to provide the required power, then in the knowledge of the necessary signal drive, the preceding stage is arranged to supply it.

Cathode resistor. This must have a value such that, when carrying the standing anode current of 60 mA, it will provide a bias of 12.5 V. The correct value is therefore 210 Ω ; let it be 220 Ω which is a preferred value.

Decoupling capacitor. At the minimum frequency at which the stage is to be used, the reactance of the decoupling capacitor should be small compared with 220 Ω . For instance, if the minimum frequency is 50 c/s, then at this frequency a 100 μ F capacitor has a reactance of about one-seventh of the cathode resistor which is probably satisfactory.

The final design is therefore summed up as:

Operating point $V_A = 160$ V, $V_G = -12.5$ V.

Anode load resistor, 2.2 k Ω .

Cathode resistor 220 Ω decoupled by 100 μ F.

For operation as a triode, the screen grid is connected to the anode.

4.2. AUDIO POWER AMPLIFIER, CLASS A

Design Considerations

The load impedance is usually coupled to the valve of a Class A power amplifier by means of a transformer, as in the case of an audio amplifier where the load is the loudspeaker. The necessity of passing the d.c. anode current through the load is thus avoided and, by a suitable choice of transformer turns ratio, the correct load impedance is offered to the valve. This enables the speech

coil of a loudspeaker to be made up of fine wire and with low impedance. Alternatively, without transformer coupling, it would be necessary to wind the speech coil with wire sufficiently thick to be able to carry the d.c. anode current, and yet having the high impedance which is necessary for the optimum transference of power from the valve. This would obviously increase the bulk of the speech coil and likewise its inertia.

With regard to distortion, the amount which may be tolerated depends largely on the type of equipment for which the stage is to be designed. To obtain a very low distortion level a poor efficiency must generally be tolerated and this would obviously be uneconomic in a domestic radio receiver for instance. For this type of equipment, listening tests have shown that a level of 5% third harmonic distortion produced on peak values of signal is not excessive. Since most pentodes and tetrodes have a second harmonic content at least equal to the third over most of the power range, it would seem that 10% total harmonic distortion would be acceptable for such equipment.

Design Steps

1. Select a suitable valve, choose an operating point at $V_A = \text{h.t.}$ and construct a number of load lines through it.
2. Select the load which provides the required power with an acceptable distortion level.
3. Calculate the turns ratio of the transformer to match the loudspeaker impedance to this load.
4. Determine the values of the cathode resistor and capacitor.

DESIGN EXAMPLE 4.2

Required, an a.c. power output of 4 W with third harmonic distortion not exceeding 5%. An h.t. supply of 250 V is available.

As the distortion requirement is not as exacting as in the previous example, a better anode efficiency is possible. Let the valve chosen be a 6BW6 beam tetrode with an anode rating of 13.2 W and whose characteristics are given in Fig. 4.2.

Operating point. Under no signal conditions the secondary of the output transformer has no effect, and only the primary need be considered. In the absence of a signal the primary inductance may be neglected, and as the primary resistance will be very low, this too may be neglected at this stage. There will therefore be no volts drop and the anode will be at the full h.t. of 250 V. The grid bias is selected to provide maximum anode current

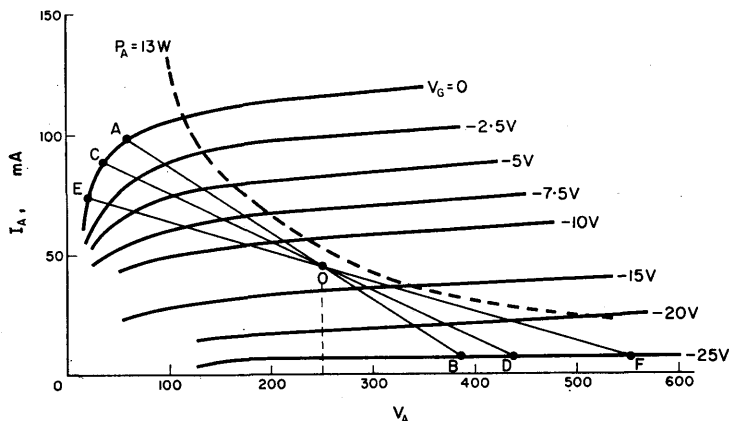


FIG. 4.2. Characteristic curves for a 6BW6 beam tetrode. The load lines drawn are for a transformer coupled load. Note that in this case the operating point is at full h.t. whereas in Fig. 4.1 it was at approximately half the h.t. voltage.

with this anode voltage, but without exceeding the valve rating. A grid voltage of -12.5 V is suitable, providing for a grid swing of 25 V peak to peak. The operating point is drawn at *O* and three load lines constructed, *AOB*, *COD* and *EOF*.

Power output. Consider load *AOB* for an input signal swing from 0 to -25 V. Substituting values in eqn. (4.3),

$$\text{Power} = \frac{(385 - 60)(98 - 8) \times 10^{-3}}{8} = 3.6 \text{ W.}$$

Similar calculations for the other two loads give power outputs

of 4.1 W for *CD* and 4.4 W for *EF*. The load represented by *AB* is rejected because its power output is insufficient. A comparison of the ratios of the two parts of each of the other load lines shows load *CD* to have less distortion than *EF*. Hence if the third harmonic distortion of the load *CD*, which is 5 k Ω , is less than 5% then this load will be suitable. There are a number of graphical methods of determining third harmonic distortion.⁽¹⁷⁾ However, most manufacturers include in their data sheets a

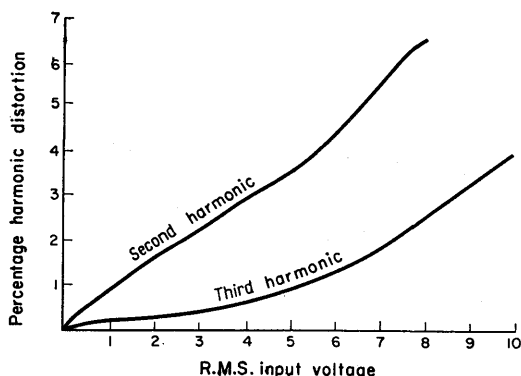


FIG. 4.3. Percentage harmonic distortion as a function of input voltage for a 6BW6 beam tetrode with a 5 k Ω load.

curve which indicates the amount of distortion present for various input voltages. Such a graph, representative of the 6BW6 with a 5 k Ω anode load is given in Fig. 4.3. A peak input voltage of 12.5 V, i.e. an r.m.s. voltage of 8.75 V, is seen to result in a third harmonic content of less than 5% so that a 5 k Ω load is acceptable. If, however, it had been greater than 5%, it would still have been possible to meet the specification by a slight reduction of input voltage.

Transformer turns ratio. If the nominal impedance of the speech coil is 3 Ω , the turns ratio to match this to 5 k Ω is

$$n = \sqrt{\left(\frac{5000}{3}\right)} \doteq 41.$$

The output transformer therefore needs a step-down turns ratio of 41 to 1. Two points should here be noted. Firstly, the impedance of a loudspeaker is highly complex and varies with frequency. The impedance quoted by the makers is usually given for 1 kc/s and is largely resistive. This then is the only frequency at which correct matching is obtained. At higher frequencies the loudspeaker load becomes reactive and impedance rises. The effect of this can be largely compensated by the addition of a suitable series R - C circuit across the transformer primary. At the lower frequencies the impedance again rises as the electro-mechanical resonant frequency of the speaker is approached. Generally, negative feedback from the speech coil is used to reduce this effect.

The second fact to be noted is that the anode voltage is seen to swing to a value in excess of the available h.t. supply voltage. This is explained by the fact that the transformer inductance can produce a voltage which momentarily augments the h.t. supply, allowing the anode to swing to its peak voltage on negative swings of input signal.

Screen resistor. The main consideration is to ensure that the screen voltage is such that the dissipation at this electrode does not exceed the maximum specified by the makers. From the valve data sheet this maximum is given as 2.2 W. It is also noted that with a screen voltage of 250 V the current drawn is 4.5 mA, i.e. a little over 1 W. It is therefore safe to connect the screen grid to h.t. as is commonly done in this type of circuit.

Cathode resistor. This must have such a value that, when carrying the sum of anode and screen currents, it will have dropped across it a voltage equal to the required bias of 12.5 V. The total current is 50 mA so that the required resistance is 250 Ω . The power dissipated in this is:

$$I^2 R = 2500 \times 10^{-6} \times 250 = 0.625 \text{ W.}$$

A 250 Ω 1 W resistor will therefore be used. It must be bypassed by a capacitor having a reactance which is low compared with

$250\ \Omega$, at the lowest frequency to be handled. At 50 c/s a $100\ \mu\text{F}$ capacitor has a reactance of $32\ \Omega$ which is satisfactory. The completed circuit is given in Fig. 4.4.

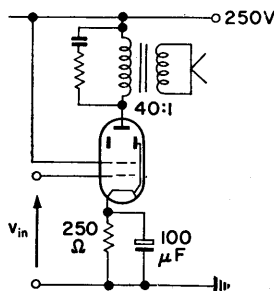


FIG. 4.4. Completed circuit of Design Example 4.2. The series R - C circuit can be used to compensate for changes in impedance of the loudspeaker as the frequency varies.

4.3. THE CLASS B PUSH-PULL AMPLIFIER

In a push-pull amplifier the two valves are excited by equal grid voltages, 180° out of phase, and the outputs are combined by means of a centre tapped transformer. The two valves, when arranged in this manner, are equivalent to a single valve having twice the r_a and twice the μ of an individual valve. Assuming identical valves, the push-pull arrangement has the following advantages over a single valve stage:

- (1) There is no possibility of direct current saturation in the core of the output transformer.
- (2) No signal frequency currents flow in the h.t. supply source and hence there is no feedback to previous stages using the same supply.
- (3) Even order harmonics cancel out, thus providing less distortion for a given amount of power.
- (4) Hum voltages in the h.t. source do not give rise to hum in the output because these too cancel out.

Choice of Valves

In choosing valves for use in a push-pull stage, the same general considerations apply as did for the single valve power amplifier. However, in this case a pair of valves should be used which have been carefully matched. Failure to do this will increase harmonic distortion considerably. For instance, a difference of 10% in the anode currents of the two valves, measured under identical operating conditions, will give rise to approximately 5% second harmonic distortion. Valve manufacturers supply matched pairs on demand but it is necessary to state the conditions under which the valves are to be operated. It is also most important that, in use, the valve ratings should not be exceeded as this may permanently change the characteristics thus upsetting the matching.

Design Considerations

Under Class B conditions the grid bias is approximately equal to the cut-off value, and no current flows in the absence of an input signal. When a signal is applied to the stage, each valve conducts on alternate half-cycles. This class of amplifier is divided into two main groups. In Class B1, sometimes called *quiescent push-pull*, no grid current is allowed to flow, whereas in Class B2 the grid is allowed to go positive for at least part of each cycle. The latter type has a high percentage of odd harmonic distortion which is often a maximum at fairly low output levels, but this disadvantage is compensated by a high anode efficiency. However, the Class B2 is expensive since the driver valve, with the two output valves, forms an integral part of the stage, and together provide a sensitivity only of the same order as that of a single pentode.

It is common practice to design push-pull amplifiers for maximum power output without giving much consideration to odd harmonics, and if the resulting distortion is objectionable an improvement is made by increasing the load at the expense of power output. In this case all that is required is a single charac-

teristic curve of one valve, as is drawn in Fig. 4.5, and a load line constructed on it from the knee of the curve to the point V_0 .

Then, power output is given by:

$$P_0 = 0.5 I_{A(\max)} (V_0 - V_{A(\min)}). \quad (4.4)$$

If, however, it is required to determine the amount of distortion present, for any given load, it is necessary to draw the load

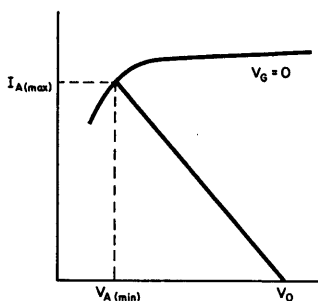


FIG. 4.5. Characteristic curve of one valve for the calculation of the power output of a Class B push-pull stage.

line on a complete characteristic, as shown in Fig. 4.6. One set of characteristic curves is inverted and placed below another set in such a way that the operating anode voltage on the V_A axis of each set of curves is coincident and load lines are drawn having slopes representative of one-quarter of the anode to anode load.

Design Steps

1. Select a matched pair of valves.
2. Draw load lines on a composite characteristic and select the load which gives the best compromise between power output and distortion.
3. Calculate the turns ratio of the output transformer.
4. Determine the correct operating conditions for the screen grids.
5. Provide a suitable biasing arrangement.

DESIGN EXAMPLE 4.3

Required, a Class B₁ push-pull amplifier to provide a peak output power of 3.5 W.

A matched pair of EL85s is chosen and a composite characteristic drawn as in Fig. 4.6, with the operating anode voltage at 200 V. Two load lines are constructed, *AB*, having a slope of 0.25 mA/V, representing an anode to anode load of 16 k Ω , and *CD* representative of a 20 k Ω load.

From eqn. (4.4), the power outputs are respectively 3.85 W and 3.24 W. In fact, due to the presence of odd order harmonics,

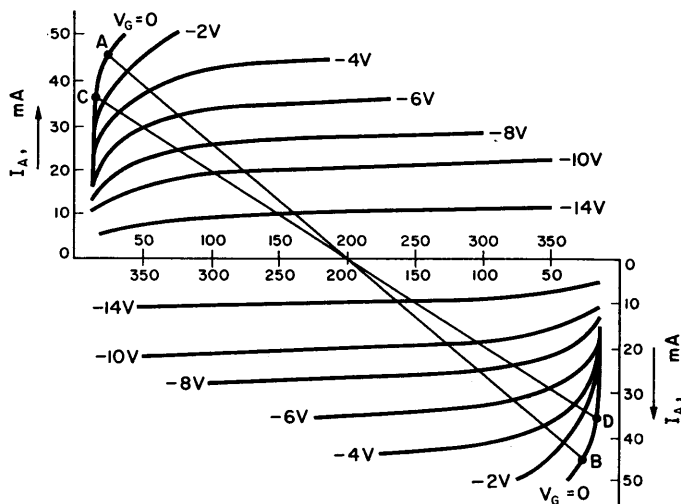


FIG. 4.6. Composite characteristic of a push-pull amplifier. The slope of the load lines represents a quarter of the equivalent resistance across the primary of the output transformer.

the power output will be somewhat greater than this, but if a valve is used having a low third harmonic characteristic the error will be small. Considering only the load line *AB*, harmonic distortion is of the order of 5% so a 16 k Ω load is suitable.

Transformer turns ratio, $n = \sqrt{(16000/3)} \div 74$. Thus, an output transformer is required having a step down ratio of 74 to 1, with the primary centre tapped for the provision of h.t. to the valve anodes.

Biasing. As the valves are to be biased to the point of cut-off, there will be no standing current which will permit the use of a cathode bias resistor. The bias voltage must therefore be obtained

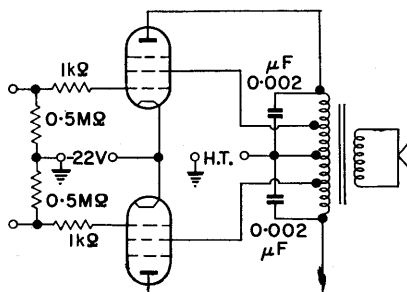


FIG. 4.7. Completed circuit of Design Example 4.3.

from a separate voltage supply. Examination of the I_A/V_G characteristic shows that the required bias is -22 V and this will be applied between cathode and grid as shown in Fig. 4.7. The two grid resistors may be made 500 k Ω . Referring to the composite characteristic, it is noted that to obtain 3.8 W it is necessary to swing the grid voltage ± 22 V about the operating point, so a drive of somewhat less than this is required from the preceding stage in order to obtain the specified output.

Screen grid connection. Although it is common practice to operate the screen grid at the same potential as the anode, it may also be connected to provide the so called "ultra-linear" output stage. In this case the screen grids are connected to tapings on the primary of the output transformer, at about 40% of the primary winding. This has the effect of reducing the amount of harmonic distortion present.⁽¹⁵⁾

Parasitics. At the point where each valve cuts off there is a high rate of change of current in the output transformer primary, and this may give rise to parasitic oscillations in the anode circuit. This may be largely overcome by connecting a capacitor across each half of the primary winding, 0.002–0.005 μF being the range of values used. When parasitics arise in the grid circuits, these may be stopped by means of grid stopper resistors or sometimes by a small capacitor between grid and cathode.

4.4. TRANSISTOR POWER AMPLIFIERS

The transistor is particularly well suited for use in power amplifier circuits. It is linear over practically the whole of its collector characteristic and is so efficient that it is almost possible to achieve the maximum theoretical efficiency of 50% for Class A and 78.5% for Class B amplifiers. The common emitter configuration is most widely used since it provides much greater power gain than the common collector arrangement. Its inherent distortion level is higher, but this can be largely compensated by the use of negative feedback.

The Class A Power Amplifier

As in the valve case, the main steps in the design of such an amplifier are, the choice of operating point such that operation is restricted to the linear part of the characteristic, the biasing arrangement to obtain this operating point, and the determination of the correct load.

Design Considerations

In a power amplifier there is very real danger of thermal runaway unless the biasing arrangement chosen is such as to prevent shift of the d.c. operating point. The circuit of Fig. 4.8 is widely used in this type of amplifier and will provide an acceptable degree of stability. The emitter resistor R_E introduces voltage negative feedback and, in conjunction with the base

resistors R_1 and R_2 , determines the value of the input voltage V_{BE} . An increase in emitter current causes a voltage drop across R_E and reduces the base-emitter voltage. The base current is thus reduced, providing a large degree of compensation for the original change. If a stability factor is defined as $K = \delta I_{CEO} / \delta I_C$

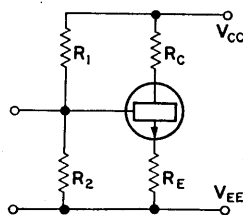


FIG. 4.8. Basic biasing arrangement of a transistor power amplifier stage.

(as in § 2.11), the minimum stability is obtained when K is unity and the greater the value of K the better the stability becomes. For the circuit of Fig. 4.8 this factor is:

$$K = 1 + \frac{\beta R_E}{R_E + R_B}, \quad (2.26)$$

if R_E is large compared with R_B (where $R_B = R_1 R_2 / (R_1 + R_2)$).

This equation shows that the greater the value of R_E and the smaller the value of R_B , the higher will be the value of K and hence the better the stability. The maximum value of R_E depends on how much of the supply voltage can be dropped across it, and so how much voltage is available as signal swing in the collector resistor. Similarly, the minimum values for R_1 and R_2 depend on how much current may be drawn from the power supply by them. At very low values this potential divider will shunt the a.c. input. As a first step it is reasonable to make R_B equal to $10 R_E$ and then, using eqn. (2.26), to check the degree of stability obtained. In the design of this circuit, two other equations are required. Referring to Fig. 4.8,

$$V_B = V_{CC} R_2 / (R_1 + R_2). \quad (4.5)$$

Also,

$$V_{BE} = V_B - I_E R_E, \quad (4.6)$$

from which,

$$V_B = R_E I_E + V_{BE}. \quad (4.7)$$

Design Steps

1. Select a suitable transistor.
2. Plot the load line on the output characteristic, select an operating point, and check distortion and power output.
3. With a knowledge of the minimum voltage to which the collector falls, choose a suitable value for R_E , to make V_E a little less than $V_{C(min)}$.
4. Using eqn. (2.26), determine the value of R_B for the required stability factor.
5. Using eqns. (4.5) and (4.7), calculate the values of R_1 and R_2 .
6. Select a suitable capacitor to decouple R_E .

DESIGN EXAMPLE 4.4

Required, an a.c. power of 0.75 W into a resistive load of 6.8Ω , with low distortion and a stability factor of 8. A supply of -14 V is available.

To obtain an output with low distortion, a transistor is selected having a much greater power rating than the power actually

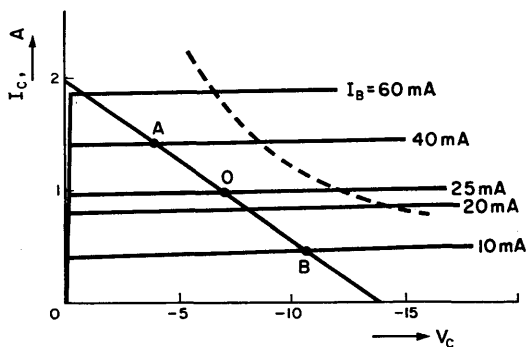


FIG. 4.9. Characteristic curves of an OC26 transistor.

required. Let it be an OC26 having a rating of 12.5 W at temperatures below 75°C, and whose output characteristic is given in Fig. 4.9.

Load line. With the load line as drawn, the operating point chosen is $V_C = -7$ V, $I_C = 1$ A, corresponding to an I_B of 25 mA. For an input signal of 30 mA peak to peak, the output voltage varies between -4 and -11 V as the current swings through 0.95 A. Thus an output power of 0.83 W is obtained and the ratio $BO : AO = 1.13$ indicates an acceptable distortion level.

Emitter resistor. Since $V_{C(\min)} = -4$ V and the standing anode current is 1 A, let $R_E = 3.3 \Omega$.

Stability factor. The transistor manufacturer gives $\beta = 33$ for an I_C of 1 A. Substituting β and R_E in eqn. (2.26), for $K = 8$,

$$8 = 1 + \frac{33 \times 3.3}{3.3 + R_B},$$

therefore

$$7R_B = (33 \times 3.3) - 23.1,$$

so,

$$R_B = 12.2 \Omega.$$

R_1 and R_2 .

$$V_E = I_E R_E \doteq V_B \quad [\text{from eqn. (4.7)}].$$

But,

$$V_B = \frac{V_{CC} R_2}{R_1 + R_2} \quad [\text{from eqn. (4.5)}],$$

therefore

$$3.3 = 14R_2 / (R_1 + R_2),$$

from which

$$R_1 \doteq 3R_2.$$

$$R_B = \frac{R_1 R_2}{R_1 + R_2},$$

therefore

$$12.2 = \frac{3R_2^2}{4R_2} \quad \text{and} \quad R_2 \doteq 16 \Omega.$$

Therefore

$$R_1 = 3R_2 = 48 \Omega. \quad (4.8)$$

Let the values used be $R_1 = 47 \Omega$ and $R_2 = 15 \Omega$. The current drain due to R_1 and R_2 in series is $14 \text{ V}/62 \Omega \doteq 200 \text{ mA}$ which is small compared with the standing current of the transistor.

The final circuit values are therefore $R_C = 6.8 \Omega$, $R_1 = 47 \Omega$, $R_2 = 15 \Omega$, and $R_E = 3.3 \Omega$. To obtain a reasonable low frequency response it would be necessary to make the emitter decoupling capacitor $1000 \mu\text{F}$.

4.5. AUDIO POWER AMPLIFIER, CLASS A

Design Considerations

The loudspeaker is coupled to the transistor by an output transformer and if the operating point is at the mid-point of the

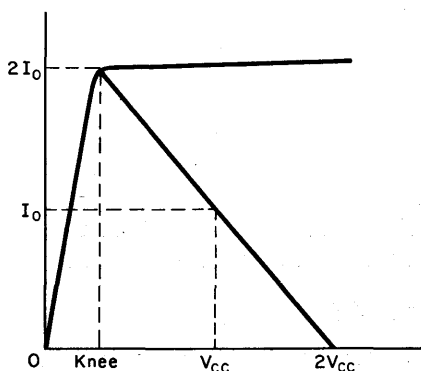


FIG. 4.10. Calculation of power output and load from a single collector characteristic. Note that for the purpose of illustration V_{knee} , normally less than 1 V , has been exaggerated with respect to V_{CC} . (See Fig. 4.11.)

dynamic collector load line, then it is possible for the collector voltage to swing between the knee voltage and twice the supply voltage, as shown in Fig. 4.10. The collector current swings from zero to twice the standing current. The load represented by this load line is therefore:

$$R_L = (V_{CC} - V_{knee})/I_0. \quad (4.9)$$

The maximum power output obtainable from this load is:

$$P_{O(max)} = \frac{(V_{CC} - V_{knee})}{\sqrt{2}} \cdot \frac{I_0}{\sqrt{2}}. \quad (4.10)$$

Combining these two equations,

$$R_L = \frac{(V_{CC} - V_{knee})^2}{2P_{O(max)}}. \quad (4.11)$$

These relationships may be used in the design of a power amplifier where a high degree of efficiency is required.

Design Steps

1. Allow for a slightly higher power than is actually required and, using eqn. (4.11), evaluate the required load R_L .
2. Determine the turns ratio of the transformer to match the speaker to this load.
3. Note the lowest voltage to which the collector swings and choose R_E such that the voltage dropped across it is less than this voltage.
4. Making $R_B = 10R_E$, evaluate R_1 and R_2 .
5. Choose a suitable capacitor with which to decouple R_E .

DESIGN EXAMPLE 4.5

A maximum output of 40 mW is required for a portable radio receiver using a supply voltage of 9 V.

Choice of transistor. Since the maximum theoretical efficiency obtainable is 50%, a transistor is chosen having a power rating

of 3 times the required power. The OC72 is such a transistor having a rating of 150 mW (when used with a heat sink) for temperatures below 30°C. From the collector characteristic of Fig. 4.11, the knee voltage is seen to be about 0.25 V.

Choice of load. In making use of eqn. (4.11) to evaluate the required load, allow for a power output of 45 mW. This will take account of loss in the ohmic resistance of the transformer

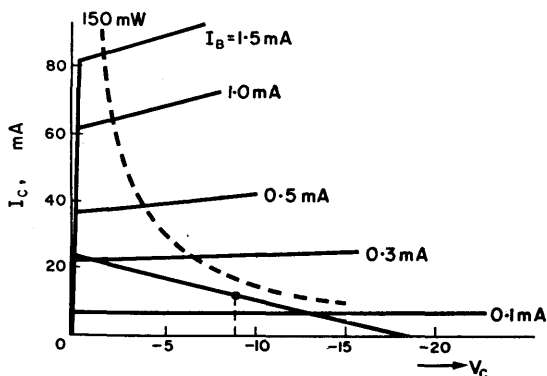


FIG. 4.11. Collector characteristic of an OC72. Note that the power dissipation curve is for the transistor when used with a heat sink.

primary, and also allow for the fact that the collector current cannot be taken down to zero because of leakage. In addition, to ensure that distortion is a minimum, consider the knee voltage to be 1.0 V. Then,

$$R_L = (9 - 1)^2 / (2 \times 0.045) = 700 \, \Omega.$$

Transformation ratio. The transformer required to match a 3 Ω speaker to this load should have a turns ratio of $\sqrt{(700/3)} = 15.3$ to 1.

Emitter resistor R_E . A load line for 700 Ω is now plotted on the output characteristic from the point $I_C = 0$, $V_C = 18$ V, and

the current at the operating point, $V_C = 9$ V, is seen to be 12.5 mA. If the current is allowed to swing from 23.5 mA down to 1.5 mA while the collector voltage swings from -1.5 to -16.5 V, an output of 42 mW is obtained. The emitter voltage may therefore be made 1.0 V.

Thus, $R_E = 1 \text{ V}/12.5 \text{ mA} = 80 \Omega$.
 Make it 82Ω which is a preferred value.
 Now make $R_B = 820 \Omega$ (i.e. $10 R_E$),

$$V_B = R_2 V_{CC}/(R_1 + R_2) \doteq V_E.$$

Therefore

$$1.0 = 9R_2/(R_1 + R_2) \quad \text{and} \quad R_1 = 8R_2,$$

but

$$R_B = R_1 R_2/(R_1 + R_2),$$

therefore

$$820 = 8R_2^2/9R_2.$$

This gives $R_2 = 920 \Omega$ and $R_1 = 7360 \Omega$, the nearest preferred values being 910Ω and $7.5 \text{ k}\Omega$. To complete the design a capaci-

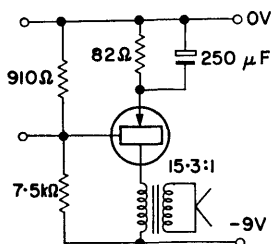


FIG. 4.12. Completed circuit of Design Example 4.5.

tor is chosen to decouple R_E . The reactance of a $250 \mu\text{F}$ capacitor at 60 c/s is approximately 10Ω , which is satisfactory. The final design is therefore as shown in Fig. 4.12.

4.6. THE CLASS B PUSH-PULL AMPLIFIER

Design Considerations

Theoretically, a Class *B* push-pull amplifier should have its two transistors biased to cut-off, but in practice this causes *cross-over distortion* if the change over in current from one

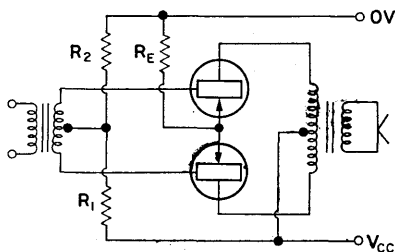


FIG. 4.13. Basic circuit of a Class B push-pull amplifier.

transistor to the other is not smooth. This type of distortion may be largely overcome by supplying the drive for the stage from a high resistance source and by applying a small forward bias to each transistor. The bias would typically be 100–200 mV giving rise to a quiescent current of a few milliamps. In the basic circuit of Fig. 4.13 the bias is provided by R_1 and R_2 .

The value of V_{BE} required at a transistor for any given collector current falls as the temperature rises, a decrease of 2.5 mV per °C being typical. The temperature range over which the stage is to be used should therefore be considered since, with an increase in temperature, I_0 rises and may reach such a magnitude that, in spite of the fixed bias provided, cross-over distortion is again present. Similarly, a large reduction in ambient temperature may so reduce the quiescent current that it becomes insufficient to reduce this distortion.

Such effects of temperature changes may be minimized by shunting R_2 with a negative temperature coefficient thermistor. Thus, as temperature rises, the resistance of the parallel combina-

tion falls and the base voltage V_{BE} is decreased, offsetting the rise in collector current. A resistor in the emitter circuit R_E similarly increases stability but as this is at the expense of efficiency it is usually of a low value.

The amount of power dissipated by the stage is dependent on the amplitude of the incoming signal and under no-signal conditions very little current is drawn from the supply source. The peak output power which the circuit can handle is a little less than 5 times the maximum collector dissipation of each transistor, and efficiencies of 70% may be readily achieved.

Assuming ideal transistors, the load presented to each collector is:

$$R_C = V_{CC}^2 / 2P_{O(max)} \quad (4.12)$$

However, in using this equation, a voltage somewhat less than V_{CC} should be considered, allowing say 0.5 V to avoid distortion as the bottoming voltage is approached. Similarly, the value for $P_{O(max)}$ should be higher than that required since the load on the transistor includes the unbypassed resistor R_E and some power is lost in this resistor. The useful power output is given by

$$P_{eff} = P_{O(max)} \cdot R_C / (R_C + R_E) \quad (4.13)$$

Design Steps

1. Select a suitable pair of matched transistors.
2. Using eqn. (4.12), evaluate the load to be presented to each collector and determine the ratio of the output transformer.
3. Select suitable values for R_1 , R_2 and R_E and check that with this value of R_E the output power to the transformer is sufficient.

DESIGN EXAMPLE 4.6

Required, a Class B push-pull output stage giving a peak power output of 450 mW. A supply of 9 V is available.

Transistors. From the data sheets it is seen that an OC72 when used with a heat sink, may dissipate 130 mW at the collector

when used in ambient temperatures up to 35°C. Since the required output power is less than 5 times this figure a matched pair of transistors of this type will be suitable.

Collector load. In making use of eqn. (4.12), let V_{CC} be reduced by 0.5 V and consider a total power output of 550 mW:

$$R_C = 72.25 / (2 \times 550 \times 10^{-3}) = 65.7 \Omega.$$

The collector to collector load is therefore $4 \times 65.7 \Omega = 262.8 \Omega$. The required transformer turns ratio for use with a speaker having a nominal impedance of 3Ω is $\sqrt{(263/3)} = 9.4$ to 1.

Biasing. Since the emitter resistor reduces efficiency its value is kept low; let it be the preferred value of 4.7Ω . Checking the output, the total load on each transistor is

$$R_C + R_E = 65.7 + 4.7 = 70.4 \Omega.$$

Total power $P_{O(\max)} = V_{CC}^2 / 2(R_C + R_E) = 72.25 / 140.8 = 513 \text{ mW}$. Useful power output $= P_{O(\max)} \times R_C / (R_C + R_E) = 513 \times 0.03 = 477 \text{ mW}$, which meets the specification. The values of R_1 and R_2 are chosen bearing in mind the required bias voltage, let this be 150 mV, and the amount of current drain which may be permitted. Limiting the current drain to 1.5 mA, which is comparable to the quiescent current of the transistors, then,

$$R_1 + R_2 = V_{CC} / 1.5 \text{ mA} = 6 \text{ k}\Omega.$$

For $V_B = 150 \text{ mV}$, $R_1 = 59 R_2$. As this is not critical, and bearing in mind the spreads likely to be met in the transistors, let $R_1 = 5.6 \text{ k}\Omega$ and $R_2 = 100 \Omega$.

For increased stability R_2 may be changed to a 220Ω resistor shunted by an N.T.C. thermistor having a nominal resistance of 200Ω .

Summing up the final design; turns ratio of output transformer $4.7 + 4.7$ to 1, $R_E = 4.7 \Omega$, $R_1 = 5.6 \text{ k}\Omega$, and $R_2 = 220 \Omega$ shunted by an N.T.C. thermistor of 200Ω .

CHAPTER 5

Tuned Amplifiers

Introduction

The tuned amplifier is used when it is required to amplify h.f. signals at one frequency, or band of frequencies, and reject others. A range of frequencies between 150 kc/s and 50 Mc/s is included in this category of amplifiers. Selectivity is obtained by the use of a parallel L - C circuit which resonates at the desired frequency and which, at this frequency, has the high impedance necessary for the load of a voltage amplifier. The important characteristics of a tuned amplifier are the gain at resonance, the variation of gain with frequency in the immediate vicinity of resonance, and, if the frequency is to be varied, the way in which the gain changes when this is done.

5.1. THE PARALLEL TUNED CIRCUIT

In Fig. 5.1 a parallel tuned circuit is drawn, made up of an inductance L having a resistance r , and shunted by a capacitance C .

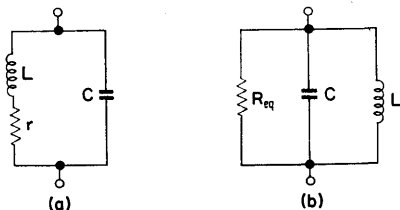


FIG. 5.1. Parallel tuned circuit with its resistive component (a) in series and (b) in parallel.

Resonance will occur when the capacitive and inductive reactances are equal, i.e. when $\omega_0 L = 1/\omega_0 C$, where $\omega_0 = 2\pi f_0$. From this, the resonant frequency

$$f_0 = \frac{1}{2\pi\sqrt{LC}}, \quad (5.1)$$

and the magnification

$$Q = \frac{\omega_0 L}{r} = \frac{1}{\omega_0 C r} = \frac{1}{r} \sqrt{\left(\frac{L}{C}\right)}. \quad (5.2)$$

The impedance of such a circuit may be written

$$Z(j\omega) = \frac{(r + j\omega L)/j\omega C}{r + j(\omega L - 1/\omega C)}, \quad (5.3)$$

and

$$Z(j\omega) = \frac{L/C}{r + j(\omega L - 1/\omega C)}$$

if r is much less than ωL . At resonance, when $\omega_0 L = 1/\omega_0 C$,

$$Z = \frac{L}{Cr} = R_D. \quad (5.4)$$

The impedance at resonance is purely resistive and is known as R_D , the *dynamic resistance*. The circuit of Fig. 5.1a may be redrawn as in Fig. 5.1b in which C and L are shunted by R_{eq} . The two circuits are equivalent at resonance provided that $R_{eq} = L/Cr$. From this, $r = L/CR_{eq}$ and if this is substituted in expression (5.2).

Magnification

$$Q = R_{eq}/\omega_0 L = \omega_0 C R_{eq} = R_{eq} \sqrt{\left(\frac{C}{L}\right)}. \quad (5.5)$$

5.2. SINGLE TUNED CIRCUIT AMPLIFIER

A simplified circuit diagram is given in Fig. 5.2a, the coupling capacitor C_C serving to prevent the valve 1 anode d.c. voltage appearing at the grid of valve 2. The equivalent network of this

circuit is as shown in Fig. 5.2b. C represents the total circuit capacitance and includes the input capacitance of the second valve, and stray capacitance associated with wiring, etc., which together with R_G (the input resistance of valve 2) are effectively

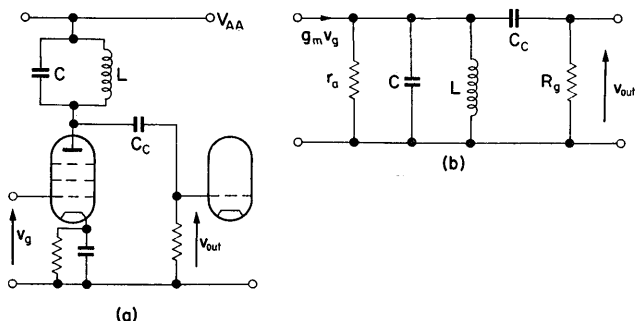


FIG. 5.2. Basic arrangement of a single tuned circuit amplifier with its equivalent network. C_C is a blocking capacitor which keeps the V_1 anode voltage off the grid of V_2 .

in parallel with the tuned circuit. The value of C_C is chosen such that it has negligible reactance at the frequencies being amplified, and as it does not shunt the tuned circuit it may be neglected.

Choice of Valve

Examination of the equivalent network shows that the anode resistance of the valve is effectively in parallel with the tuned circuit load. A valve with a high r_a is therefore required to prevent damping of the tuned circuit. As the impedance of the load will be high, large gains are possible and difficulties due to feedback may be encountered. Hence it is important that anode to grid capacitance be low if instability is to be avoided. In this frequency range the signal to be amplified will often be amplitude modulated. Because of the selectivity of the tuned circuit there will be no distortion of the modulation envelope, due to the presence of second harmonics resulting from curvature of the

valve characteristics. These considerations indicate that a pentode should be used.

Although the presence of second harmonics does not cause distortion, higher order harmonics may do so if there is a rapid change in the curvature of the I_A/V_G curve. The danger of this is overcome by the use of a variable- μ -pentode, and such a valve is particularly suitable where some form of automatic gain control is required.

Design Considerations

The equivalent circuit is redrawn in Fig. 5.3, in which R represents the total circuit resistance including r_a of valve 1, the input resistance of valve 2, and the equivalent shunt loss resistance of L and C .

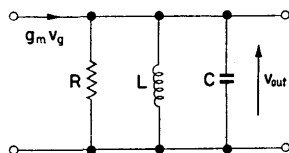


FIG. 5.3. Simplified equivalent network of the anode circuit of Fig. 5.2.

The impedance of the tuned circuit may be written,

$$Z(j\omega) = \frac{LR/C}{L/C + j(\omega LR - R/\omega C)}. \quad (5.6)$$

Let d , the dissipation factor equal $1/Q$, thus,

$$d = \frac{1}{\omega_0 CR} = \frac{\omega_0 L}{R} = \frac{1}{R} \sqrt{\left(\frac{L}{C}\right)}.$$

From eqn. (5.6),

$$\begin{aligned} Z(j\omega) &= R \left\{ \frac{(1/R^2)(L/C)}{(1/R^2)(L/C) + j[(\omega L/R) - (1/\omega CR)]} \right\} \\ &= R \left\{ \frac{d^2}{d^2 + jd(\omega LR/\omega_0 LR) - (\omega_0 CR/\omega CR)} \right\}, \end{aligned}$$

therefore

$$Z = R \left\{ \frac{d}{d + j[(f/f_0) - (f_0/f)]} \right\}, \quad (5.7)$$

where f_0 is the resonant frequency and f is any other frequency.

The gain of the circuit from the grid of valve 1 to the grid of valve 2 is $g_m Z$, and is maximum at resonance when $Z = R$. At frequencies off resonance the impedance is less than R and the gain is reduced as shown in Fig. 5.4.

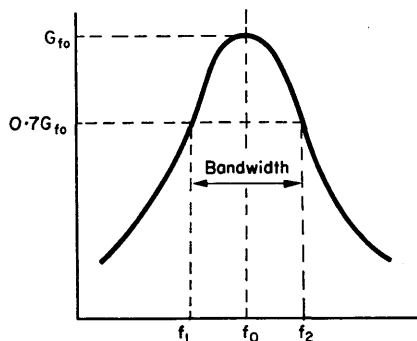


FIG. 5.4. Amplitude response of a single tuned circuit amplifier.
The lower and upper 3 dB points are f_1 and f_2 .

Let the bandwidth be defined as the range of frequencies between the two points at which the gain is 3 dB down, i.e. $1/\sqrt{2}$ times the gain at resonance. Referring to eqn. (5.7), this occurs when $(f/f_0) - (f_0/f) = \pm d$.

For circuits having a low dissipation factor f will be close to f_0 , and the gain is 3 dB down when

$$\frac{f^2 - f_0^2}{f_0^2} \doteq d,$$

and

$$\frac{f - f_0}{f_0} \cdot \frac{f + f_0}{f_0} = d.$$

To a close approximation

$$\frac{f + f_0}{f_0} = 2.$$

Hence, writing $\Delta f_0 = f - f_0$,

$$\frac{2\Delta f_0}{f_0} = d \quad \text{and} \quad \Delta f_0 = \frac{f_0 d}{2}.$$

The gain is therefore 3 dB down at the two frequencies

$$f_1 = f_0 - \frac{f_0 d}{2}, \quad f_2 = f_0 + \frac{f_0 d}{2}. \quad (5.8)$$

From these expressions,

$$d = \frac{f_2 - f_1}{f_0} = \frac{\text{bandwidth}}{f_0},$$

and since

$$d = \frac{1}{2\pi f_0 RC},$$

$$\text{bandwidth} = \frac{1}{2\pi RC} = \frac{f_0}{Q}. \quad (5.9)$$

For any circuit configuration, the gain-bandwidth product is a constant, it being possible to increase bandwidth at the expense of gain and vice versa. In the case of a single tuned circuit stage where gain = $g_m Z$ ($= g_m R$ at resonance),

$$\text{gain-bandwidth product} = g_m / 2\pi C \quad \text{c/s.} \quad (5.10)$$

Design Steps

1. Select a suitable operating point, and determine the values of R_K and R_S , the cathode and screen resistors.
2. Decouple R_K and R_S .
3. For a given gain evaluate the necessary effective R .
4. Substitute this value of R in eqn. (5.9) and thus determine

the capacitance required in order to obtain the correct bandwidth. By subtracting the sum of the stray capacitances from this, the value of the tuned circuit capacitor is obtained.

5. From eqn. (5.1) evaluate L which, with C , will resonate at the desired frequency.
6. Calculate the dynamic resistance of this tuned circuit and determine what shunting resistance is required to provide the correct value of R_{eff} as found in Step 1. To do this a typical coil resistance is assumed.

DESIGN EXAMPLE 5.1

Required, an amplifier with a gain of 100 at a frequency of 200 kc/s. The bandwidth is to be 10 kc/s and the amplifier should be capable of handling a maximum input signal of 1 V peak to peak. A supply voltage of 250 V is available.

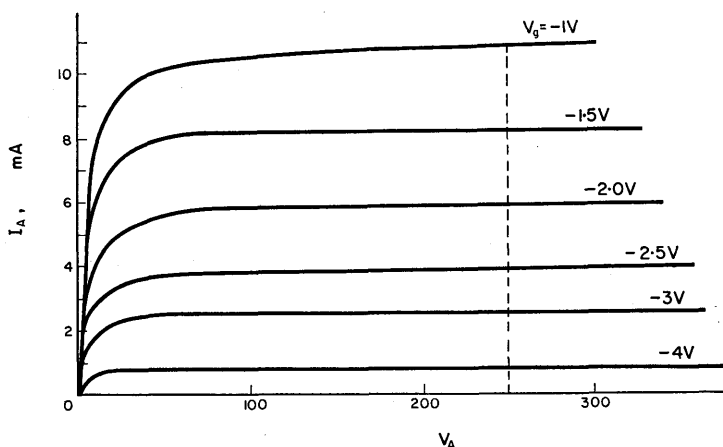


FIG. 5.5. Anode characteristics of a 6AU6 r.f. pentode.

Let the valve chosen be a 6AU6 r.f. pentode whose anode characteristics are given in Fig. 5.5, for a screen voltage of 150 V.

Operating point. Neglecting the ohmic resistance of the coil, which is small, the anode will have a standing voltage of the full h.t. of 250 V and a suitable operating point is at a grid voltage of -1 V. Under these conditions the standing anode current is 10.7 mA, the screen grid current is 4.3 mA, and (from the valve data sheets) $g_m = 5.2$ mA/V and $r_a = 1$ M Ω .

Total current = 15 mA.

$R_k = 1$ V/15 mA = 66 Ω .

Power dissipated = $(15 \times 10^{-3})^2 \times 66 = 0.225$ W.

Let R_k be 68 Ω and 1 W.

At 200 kc/s a 0.1 μ F capacitor has an impedance of less than 1 Ω , so this is suitable for decoupling R_k .

Screen grid.

$R_s = V_s/I_s = 150/(4.3 \times 10^{-3}) = 35$ k Ω .

Power dissipated = $(4.3 \times 10^{-3})^2 \times 35 \times 10^3 = 0.65$ W.

Let R_s be 33 k Ω and 1 W.

This resistor must also be decoupled and a 0.001 μ F capacitor is suitable.

Tuned circuit load.

$R_{\text{eff}} = \text{gain}/g_m = 100/(5.2 \times 10^{-3}) = 19$ k Ω .

From eqn. (5.9), bandwidth = $1/2\pi RC = 10$ kc/s.

Thus,

$$C = \frac{10^{-6}}{2\pi \times 19 \times 10} = 840 \text{ pF.}$$

Subtracting 25 pF for stray capacitance, tuned circuit capacitor $C = 815$ pF.

From eqn. (5.1),

$$L = \frac{1}{4\pi^2 f_0^2 C} = \frac{1}{40 \times 4 \times 10^{10} \times 840 \times 10^{-12}}.$$

Thus,

$$L = 744 \mu\text{H}.$$

Assuming a typical coil resistance of 30Ω ,

$$R_D = \frac{L}{Cr} = \frac{744 \times 10^{-6}}{840 \times 10^{-12} \times 30} = 29.5 \text{ k}\Omega,$$

and referring to the equivalent network of Fig. 5.2b this is in parallel with r_a and R_G , each of $1 \text{ M}\Omega$. The effective resistance is therefore approximately $28 \text{ k}\Omega$.

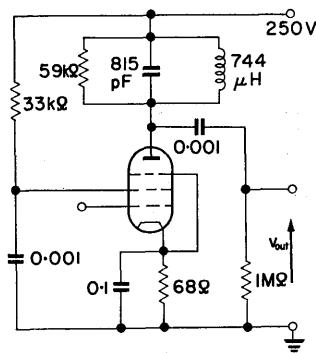


FIG. 5.6. Completed circuit of Design Example 5.1.

However, to satisfy the gain and bandwidth conditions it was earlier determined that R_{eff} should be $19 \text{ k}\Omega$. It is therefore necessary to shunt the tuned circuit with a resistor such that,

$$\frac{1}{R} = \frac{1}{19 \text{ k}\Omega} - \frac{1}{28 \text{ k}\Omega}, \text{ and } R = 59 \text{ k}\Omega.$$

Let it be $56 \text{ k}\Omega$.

Coupling capacitor. This is merely required as a blocking capacitor to keep the V_1 anode voltage off the grid of V_2 . It should

have a reactance which is negligible at the frequency to be amplified. Again a $0.001 \mu\text{F}$ capacitor will be suitable. This completes the circuit, which is drawn in Fig. 5.6.

5.3. TUNABLE R.F. AMPLIFIER WITH CONSTANT SELECTIVITY⁽¹⁶⁾

Where it is required that the frequency of an r.f. amplifier be tunable, it is usually desirable that, over the tuning range, the overall selectivity should remain constant.

The resonant frequency of a tuned circuit may be changed by varying either the inductance or the capacitance of the circuit. With permeability tuning, the inductance is varied by adjusting the position of an iron dust core within the coil. This produces less variation in selectivity and gain over the tuning range than does capacitor tuning, but is both more costly and more difficult to achieve. Capacitor tuning is therefore the more commonly used method, and with it special arrangements must be made in order to obtain constant selectivity.

Design Considerations

In eqn. (5.9) the bandwidth of a parallel tuned circuit was given as

$$B = f_0/Q.$$

For constant selectivity, bandwidth should be constant and hence Q should be proportional to f_0 . Since $Q = \omega L/r$ it would appear that, with a fixed inductance having a given ohmic resistance, Q is proportional to f_0 . In fact as frequency increases the resistance of the coil also increases, and, particularly with iron-cored coils, Q decreases as shown in Fig. 5.7. It is therefore necessary to make use of a network having a resistive component decreasing with frequency, which when added to the coil resistance will make the total resistance constant with frequency.

In Fig. 5.7, in which r increases from $2\ \Omega$ to $10\ \Omega$ as f increases from 400 kc/s to 1600 kc/s, there is needed a network whose resistance falls from $8\ \Omega$ to zero over the same frequency range causing the total resistance R to remain constant at $10\ \Omega$. Such

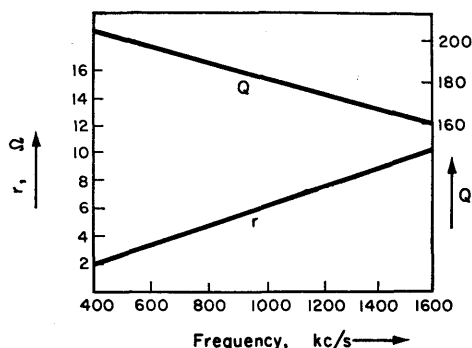


FIG. 5.7. The resistance and Q of an inductance as a function of frequency.

a technique has the disadvantage that it derates the circuit performance at the lower frequencies, but the required network which is given in Fig. 5.8 is a simple one. Let the reactance of the L - C arm be X .

Then

$$Z = \frac{jRX}{R + jX}$$

$$= \frac{RX^2 + jR^2X}{R^2 + X^2}.$$

Resistive component

$$R_1 = \frac{RX^2}{R^2 + X^2}. \quad (5.11)$$

Reactive component

$$X_1 = \frac{R^2X}{R^2 + X^2}. \quad (5.12)$$

The values of L and C may be chosen such that at the highest frequency in use the reactance is zero. Then, from eqn. (5.11), the resistive component R_1 is also zero. As the frequency decreases X increases, and so therefore does R_1 .

The network thus has the required characteristic and is used in series with the inductance of the amplifier tuned circuit. Its reactive component is usually small and may be neglected in comparison to the reactance of the coil itself.

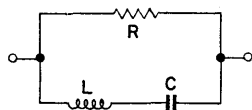


FIG. 5.8. Network used to obtain constant selectivity in a tuned circuit.

The impedance of the L - C arm is:

$$jX = j\omega L - \frac{1}{j\omega C} = j\omega L \left(1 - \frac{1}{\omega^2 LC} \right). \quad (5.13)$$

But from eqn. (5.11), $R_1 = 0$ when $X = 0$, that is at the resonant frequency of the network.

Then

$$\omega_0 L = \frac{1}{\omega_0 C} \quad \text{and} \quad \omega_0^2 LC = 1,$$

therefore

$$jX = j\omega L \left(1 - \frac{\omega_0^2 LC}{\omega^2 LC} \right) \quad \text{and} \quad X = \omega L \left(1 - \frac{f_0^2}{f^2} \right). \quad (5.14)$$

Substituting in eqn. (5.11),

$$R_1 = \frac{R\{\omega L[1 - (f_0^2/f^2)]\}^2}{R^2 - \{\omega L[1 - (f_0^2/f^2)]\}^2}, \quad (5.15)$$

and rearranging,

$$L^2 = \frac{R_1 R^2}{\omega^2 (R - R_1) [1 - (f_0^2/f^2)]^2}. \quad (5.16)$$

There are three unknowns, L , C and R , so values for R_1 are selected from Fig. 5.7 for three frequencies and substituted in the above equations.

Design Steps

1. Set up the correct bias conditions as in Design Example 5.1.
2. Calculate the maximum and minimum values of capacitance associated with the tuning capacitor and circuit, and thus determine the inductance for the frequency range to be covered.
3. Experimentally obtain the value of coil resistance over this range and plot a graph as in Fig. 5.7.
4. Select three frequencies at which selectivity compensation is to be applied and, at the two lower frequencies, note the values of R_1 required to make the total resistance, in each case, equal to the resistance of the coil at the highest frequency.
5. Substitute in eqns. (5.15) and (5.16) to determine values of L , C and R of the selectivity compensation network.

DESIGN EXAMPLE 5.2

Required, an amplifying stage covering the range 540–1600 kc/s with constant selectivity.

Using the 6AU6 pentode, the correct bias conditions can be set up as in Design Example 5.1.

The tuned circuit. A typical variable capacitor, with the stray capacitance of the circuit, will vary over a range of approximately 50–550 pF. With an inductance of 160 μ H this gives a frequency coverage of 540–1800 kc/s which meets the specification.

If the resistance of this coil varies with frequency as is shown in Fig. 5.7, then at 1600 kc/s, $r = 10 \Omega$ and $Q = \omega L/r = 160$. The compensation network must provide a resistive component such that the effective R is 10 Ω and $Q = 160$ over the whole frequency range. In fact this will only be achieved accurately at

the three chosen frequencies but between these the error will be small. Let the chosen frequencies be 600, 1100 and 1600 kc/s.

At 600 kc/s, $r = 3.4 \Omega$ and required $R_1 = 6.6 \Omega$.

At 1100 kc/s, $r = 6.7 \Omega$ and required $R_1 = 3.3 \Omega$.

At 1600 kc/s, $r = 10 \Omega$ and required $R_1 = 0$.

This latter condition is obtained at resonance, so $f_0 = 1600$ kc/s.

$$f = 1100 \text{ kc/s.}$$

$$R_1 = 3.3 \Omega \text{ and } f_0^2/f^2 = 2.11.$$

Substituting in eqn. (5.16),

$$L^2 = \frac{3.3R^2 \times 10^{-12}}{59.5R - 196.4} \text{ H.} \quad (5.17)$$

$$f = 600 \text{ kc/s.}$$

$$R_1 = 6.6 \Omega, \quad \omega L = 3768 \times 10^3 L \text{ and } f_0^2/f^2 = 7.1,$$

therefore

$$\left[\omega L \left(1 - \frac{f_0^2}{f^2} \right) \right]^2 = 37.2 \omega^2 L^2 = \frac{1768 R^2}{59.5 R - 196.4}, \quad (5.18)$$

and substituting this in eqn. (5.15) and solving, gives that $R = 7.5 \Omega$.

Hence, from eqn. (5.17), $L = 0.86 \mu\text{H}$.

Also at the resonant frequency of 1600 kc/s, $C = 1/\omega_0^2 L = 0.01135 \mu\text{F}$.

In the completed circuit of Fig. 5.9, the tuning capacitor is taken to earth instead of actually shunting the coil and compensating network. Consideration of an equivalent circuit shows that as far as the signal is concerned the capacitor serves the same purpose when connected in this manner. There is also the advantage that hand capacity effects are avoided.

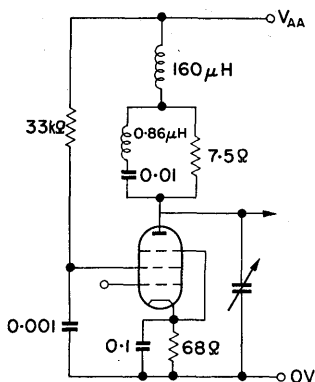


FIG. 5.9. Completed circuit of Design Example 5.2 to provide a tunable stage with constant selectivity.

5.4. CASCADED SINGLE TUNED AMPLIFIERS

The gain-bandwidth product of an amplifying stage is a figure of merit by means of which different circuit configurations may be compared. The product is a constant for a given circuit such that bandwidth may only be increased at the expense of gain. At broadcast frequencies this imposes very little limitation on design since the bandwidths in use are normally less than 10 kc/s, and for stability reasons a gain of 150 is rarely exceeded in a single stage.

At much higher frequencies however bandwidths of the order of several megacycles per second are sometimes required and the gain of a single stage is consequently restricted. In order to obtain a specified gain it is therefore often necessary to use more than one stage of amplification.

When a number of identical stages are used in cascade the figure of merit for the complete amplifier is not over-all gain times over-all bandwidth, but rather $(\text{over-all gain})^{1/n} \times \text{over-all bandwidth}$, where n is the number of stages.⁽³⁾ As the number of stages is increased the over-all bandwidth decreases and, as

an approximation,

$$\text{Over-all bandwidth} = \frac{\text{Single stage bandwidth}}{1.2\sqrt{n}}. \quad (5.19)$$

The gain-bandwidth product thus becomes:

$$G^{1/n}B_n = \frac{g_m}{2\pi C} \cdot \frac{1}{1.2\sqrt{n}}, \quad (5.20)$$

so that,

$$B_n = \frac{g_m}{2\pi C} \cdot \frac{1}{1.2\sqrt{n}} \cdot \frac{1}{G^{1/n}}. \quad (5.21)$$

Differentiating with respect to n and equating to zero gives that

$$B_n \text{ is maximum when } n = 2 \log_e G.$$

Therefore

$$G = e^{n/2}, \text{ and } G^{1/n} = e^{1/2} = 1.65.$$

This means that for an amplifier of this type, with a given over-all gain, maximum bandwidth is obtained when the individual stage gain is 1.65 (or 4.34 dB).

EXAMPLE. Using the 6AU6 pentode of Design Example 5.1, let the requirement be a 30 Mc/s amplifier with an over-all gain of 70 dB and with maximum bandwidth.

If the stray capacitance is 25 pF (as before), then the required inductance is 1.1 μ H and no tuned circuit capacitor is needed.

Number of stages = $70/4.34 = 16$.

$$G^{1/n}B_n = \frac{g_m}{2\pi C} \cdot \frac{1}{1.2\sqrt{n}} = 6.9 \text{ Mc/s.}$$

Therefore, bandwidth = $6.9/1.65 = 4.2 \text{ Mc/s.}$

An increase in the number of stages beyond 16 will cause reduction in bandwidth. This example illustrates the importance of considering the gain-bandwidth product when designing multi-stage tuned amplifiers. However, valves are available which would provide a gain-bandwidth of this magnitude with far fewer stages. Such a valve is the E810F wideband pentode which has

a g_m of 50 mA/V. Since gain-bandwidth = $g_m/2\pi C$ this valve, in a single tuned stage, is capable of providing approximately 300 Mc/s and only two stages of amplification are required to obtain the same result. Thus, over-all gain = 70 dB = 3162, so gain per stage = $\sqrt{3162} = 57$. Similarly, over-all bandwidth = 4.2 Mc/s, so single stage bandwidth = $1.2\sqrt{2} \times 4.2 = 7$ Mc/s.

5.5. STAGGERED TUNED AMPLIFIERS

In eqn. (5.7) the impedance of a parallel tuned circuit was given as:

$$Z = R \cdot \frac{d}{d + j[(f/f_0) - (f_0/f)]}.$$

Since,

$$\frac{f}{f_0} - \frac{f_0}{f} \doteq 2 \frac{f - f_0}{f_0}, \quad \text{and} \quad d = \frac{B}{f_0},$$

$$Z = R \cdot \frac{B/2}{B/2 + jx},$$

where $x = f - f_0$, the frequency off resonance. Then making $B = 2$ gives

$$\frac{Z}{R} = \frac{1}{1 + jx}, \quad (5.22)$$

$$\left| \frac{Z}{R} \right| = \frac{1}{\sqrt{(1 + x^2)}}. \quad (5.23)$$

This is the equation of the normalized selectivity curve of Fig. 5.10 and from it the frequency response of any parallel tuned circuit may be obtained.

Equation (5.23) may be written as $1/\sqrt{(1 + x^{2n})}$, so that the normalized selectivity curve represents the case of $n = 1$. The way in which the value of n modifies the shape of the response is shown in Fig. 5.11. As n increases, the 3 dB bandwidth remains

constant but the response flattens, and the cut-off outside the passband becomes sharper.

By means of Butterworth's technique,⁽³⁾ it can be shown that each of these responses may be synthesized by a number of staggered tuned stages as indicated in Table 5.1, where b is the bandwidth of a single stage.

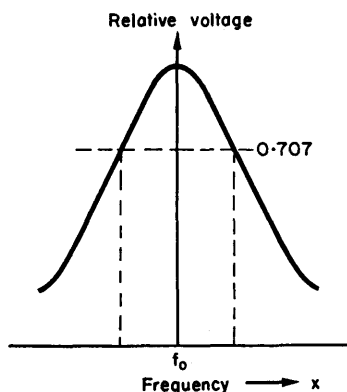


FIG. 5.10. Normalized selectivity curve $\left(\left| \frac{Z}{R} \right| = \frac{1}{\sqrt{1-x^2}} \right)$.

TABLE 5.1. STAGGERED TUNED STAGES TO PROVIDE BANDWIDTH B AT FREQUENCY f_0

n	Single tuned stages required
2	Two stages at $f_0 \pm 0.35B$, each having $b = 0.71B$
3	Two stages at $f_0 \pm 0.43B$, each having $b = 0.5B$ One stage at f_0 and $b = B$.
4	Two stages at $f_0 \pm 0.46B$, each having $b = 0.38B$ Two stages at $f_0 \pm 0.19B$, each having $b = 0.92B$
5	Two stages at $f_0 \pm 0.48B$, each having $b = 0.31B$ Two stages at $f_0 \pm 0.29B$, each having $b = 0.81B$ One stage at f_0 and $b = B$

It will be noticed that most single stage bandwidths are less than the over-all bandwidth. A better over-all gain-bandwidth product is therefore obtainable than with cascaded synchronous

circuits. It is for this reason, together with the sharper cut-off outside the passband, that staggered circuits are used.

EXAMPLE. Required, an amplifier having a response of the form $1/\sqrt{(1+x^6)}$, ($n=3$), at a frequency of 50 Mc/s and bandwidth of 6 Mc/s. Over-all gain to be 100 dB.

Since $n=3$, from Table 5.1, there is required:

- (a) a stage at 50 Mc/s with $b=6$ Mc/s;
- (b) a stage at $f_0 + 0.43B = 52.78$ Mc/s with $b=3$ Mc/s;
- (c) a stage at $f_0 - 0.43B = 47.22$ Mc/s with $b=3$ Mc/s.

Gain per stage $\doteq 33$ dB $\doteq 45$.

The gain-bandwidth products of the three stages are therefore 270 Mc/s for (a) and 135 Mc/s for (b) and (c).

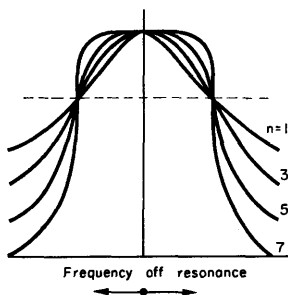


FIG. 5.11. $\left| \frac{Z}{R} \right| = \frac{1}{\sqrt{(1+x^{2n})}}$ plotted for various values of n .

From eqn. (5.10) gain-bandwidth product $= g_m/2\pi C$, which is greatest for stage (a). Hence allowing 25 pF, the required g_m is

$$g_m = 270 \times 10^6 \times 2\pi \times 25 \times 10^{-12} = 42 \text{ mA/V.}$$

The E810F pentode having a g_m of 50 mA/V is therefore a suitable valve. The detailed design of each stage is carried out as in Design Example 5.1.

5.6. DOUBLE TUNED CIRCUITS

Doubled tuned circuits are employed where a passband is required centered on a fixed frequency, and coupling between the two circuits may be inductive, capacitive or a combination of both. The most common type is that of inductive coupling as is used, for instance, in the intermediate frequency section of a superhet radio receiver. Only this method of coupling is therefore considered.

Inductively Coupled Circuits

Inductively coupled circuits can be represented by the equivalent circuit of Fig. 5.12, in which Z_1 is the primary impedance, Z_2 is the secondary impedance and $M = k\sqrt{(L_1L_2)}$ is the mutual

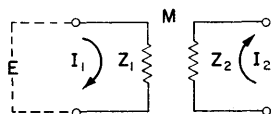


FIG. 5.12. Equivalent networks of an inductively coupled circuit.

inductance that exists between them. The performance of the circuit may be examined as follows:

$$\text{Impedance coupled from secondary into primary} = (\omega M)^2 / Z_2. \quad (5.24)$$

$$\text{Equivalent primary impedance} = Z_1 + (\omega M)^2 / Z_2. \quad (5.25)$$

$$\text{Primary current } I_1 = \frac{V}{Z_1 + (\omega M)^2 / Z_2}. \quad (5.26)$$

$$\text{Voltage induced in secondary} = -j\omega M I_1. \quad (5.27)$$

$$\text{Secondary current } I_2 = \frac{-j\omega M I_1}{Z_2} = \frac{-j\omega M V}{Z_1 Z_2 + (\omega M)^2}. \quad (5.28)$$

When the mutual inductance is small, and the secondary impedance is large, the coupled impedance is small. Under these conditions the primary current is almost the same as if no secondary were present. If, however, Z_2 is small and M is not small, then the coupled impedance is significant. When Z_2 is reactive with a given phase angle, the coupled impedance has the same phase angle but with the sign reversed. When Z_2 is purely resistive the coupled impedance is also resistive.

Two Resonant Circuits, Inductively Coupled

The behaviour of a pair of inductively coupled circuits, resonant at the same frequency, is largely determined by the degree of coupling between them. In Fig. 5.13 is shown the way primary and secondary currents vary with frequency for four values of k , the coefficient of coupling.

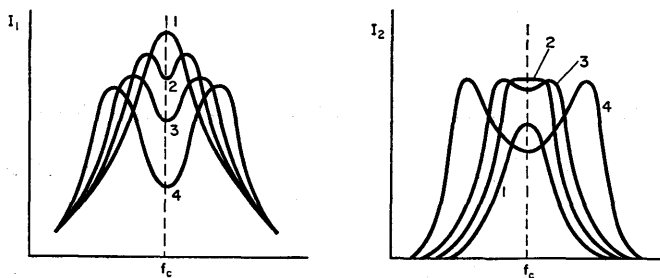


FIG. 5.13. Primary and secondary responses of inductively coupled tuned circuits for various coefficients of coupling.

Curve 1 represents a very small coefficient of coupling and both primary and secondary responses have approximately the same shape as would be obtained from single tuned circuits. If the coupling is increased until the coupled resistance, at resonance, is equal to the primary resistance, the response of curve 2 results. Such a coupling is known as the *critical* coefficient of coupling, and provides the maximum value of secondary current.

Thus, for critical coupling,

$$(\omega M)^2/R_2 = R_1. \quad (5.29)$$

Substituting $M = k \sqrt{(L_1 L_2)}$ and rearranging gives

$$\text{Critical coefficient of coupling } k_c = 1/\sqrt{(Q_1 Q_2)}. \quad (5.30)$$

If the coupling is increased beyond the critical value, as in curves 3 and 4, two humps appear in each response, and these become more pronounced and more widely spaced, the tighter the coupling is made. This is explained as follows. The secondary impedance is $R_2 + j[\omega L - (1/\omega C)]$, and the coupled impedance is $(\omega M)^2/\{R_2 + j[\omega L - (1/\omega C)]\}$. At resonance this is a maximum and is resistive and, since it is effectively in series with the primary impedance, the primary current at resonance is a minimum. At frequencies above and below resonance the secondary impedance is reactive, and the resulting coupled impedance is also reactive but of reversed sign. For instance an inductive reactance is coupled into the primary as a capacitive reactance. This neutralizes some of the primary reactance, lowering the primary impedance and increasing the primary current. Circuits which display this double humped effect are said to be over-coupled.

If the two tuned circuits have equal Q 's, the magnitudes of the humps are equal. If, however, Q_1 does not equal Q_2 and if the humps are widely spaced, the low frequency hump will tend to be the greater of the two.

Design Considerations

An equivalent circuit is given in Fig. 5.14 in which R_1 and R_2 represent the loading of the tuned circuits, including the r_a of valve 1 and the input resistance of valve 2. The gain of the stage will be largely determined by the dynamic resistance of the tuned circuits and hence, for high gain, L should be large compared with C . There is a limit however to the L/C ratio which may be used, because for frequency stability reasons stray capacitance

should not form a large proportion of the total tuned circuit capacitance.

Since the circuit is to operate at a fixed centre frequency, it is important that no detuning should take place due to temperature

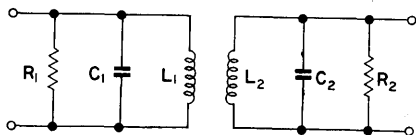


FIG. 5.14. Equivalent network of two inductively coupled tuned circuits, with the effects of loading represented by R_1 and R_2 .

changes. Permeability tuning is therefore preferred, as this is more stable than capacitor tuning, and the tuned circuit capacitors are usually of the silvered mica type.

The development of design equations for the bandpass circuit is somewhat laborious, particularly for the general case of unequal Q 's, and so is not given here. For the special, and usual case of equal high Q 's with critical coupling, the relevant equations are as follows:

3 dB bandwidth of a single stage,

$$B = \frac{f_0 \sqrt{2}}{Q} = \frac{\sqrt{2}}{2\pi RC}. \quad (5.31)$$

Single stage gain-bandwidth product,

$$GB = \frac{\sqrt{(2)} g_m}{4\pi C} \quad (5.32)$$

where

$$C = \sqrt{(C_1 C_2)} \quad \text{and} \quad R = \sqrt{(R_1 R_2)}.$$

Critical coefficient of coupling

$$k_c = 1/Q, \quad (5.33)$$

and combining eqns. (5.32) and (5.34),

$$k_c = \frac{B}{2\pi f_0}. \quad (5.34)$$

When n circuits of this type are cascaded the overall bandwidth is less than a single stage bandwidth in the ratio

$$\frac{\text{Over-all bandwidth}}{\text{Single stage bandwidth}} = \frac{1}{1.1 n^{1/4}}. \quad (5.35)$$

This expression is very accurate for a large n and is within 10% of the correct value when $n = 2$.⁽³⁾

Design Steps

1. Estimate the stray capacitance associated with each tuned circuit and select a value for each fixed capacitor which will make $C = C_1 = C_2$.
2. Determine the value of inductance which will resonate with C at the centre frequency.
3. Calculate the gain-bandwidth product of a single stage. If more than one stage is required to obtain the specified gain, use eqn. (5.35) to determine what bandwidth is necessary in each stage.
4. Substitute for B in eqn. (5.31) thus obtaining the Q for each circuit, and from eqn. (5.33) determine the critical coefficient of coupling.
5. Consider the effect of valve loading on the primary and secondary circuits, and evaluate the damping resistors if these are required.

DESIGN EXAMPLE 5.3 (Fig. 5.15)

Required, a bandpass amplifier having a centre frequency of 10 Mc/s and a bandwidth of 250 kc/s, gain to be at least 1500.

For a good gain-bandwidth product a valve with a high g_m is necessary. Let the valve chosen be an EF183 r.f. pentode. This is a variable-mu valve which will permit the application of automatic gain control. From the data sheets for this valve, if $V_A = 200$ V, $V_S = 90$ V and $V_G = -2$ V, then $I_A = 12$ mA, $I_S = 4.5$ mA, $g_m = 12.5$ mA/V, $r_a = 500$ k Ω , and the input resistance at 40 Mc/s = 13 k Ω .

Let $C = C_1 = C_2 = 100 \text{ pF}$ (including stray capacitance).
Single stage gain-bandwidth product

$$= \frac{\sqrt{(2)} g_m}{4\pi C} = \frac{1.41 \times 12.5 \times 10^{-3}}{12.56 \times 100 \times 10^{-12}} = 14 \text{ Mc/s.}$$

Therefore,

$$\text{gain} = \frac{14 \times 10^6}{250 \times 10^3} = 56.$$

A gain of 1500 should therefore be obtainable with two stages. From eqn. (5.35), for an over-all bandwidth of 250 kc/s, single stage bandwidth (for $n = 2$) = $1.1 \times 2^{1/4} \times 250 \times 10^3 = 325 \text{ kc/s}$.

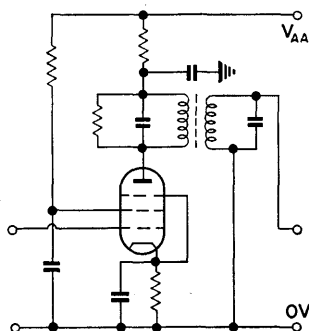


FIG. 5.15. Completed circuit of Design Example 5.3.

Checking gain with this new bandwidth, $GB = 14 \text{ Mc/s}$, so gain per stage = $14 \text{ M}\Omega / 325 \text{ k}\Omega = 43$. Sufficient gain is still therefore available.

$$L = \frac{1}{4\pi^2 f_0^2 C} = \frac{1}{40 \times 10^{14} \times 10^{-10}} = 2.5 \text{ }\mu\text{H.}$$

From eqn. (5.31) the required

$$Q = \frac{f_0 \sqrt{2}}{B} = \frac{10 \times 10^6 \times 1.41}{325 \times 10^3} = 43$$

and

$$k_c = 1/Q = 0.023.$$

The primary tuned circuit is loaded by the r_a of the valve, which is 500 k Ω . Similarly, the secondary of the first stage is loaded by r_{g1} the input resistance of valve 2, which from the valve data sheets is 13 k Ω at 40 Mc/s. To obtain the value of r_{g1} at 10 Mc/sec,

$$r_{g1}(f_1) = r_{g1}(f_2) \cdot \left[\frac{f_2}{f_1} \right]^2 = 13 \text{ k}\Omega \times \left[\frac{40}{10} \right]^2 = 208 \text{ k}\Omega.$$

From eqn. (5.31), the value of the effective damping resistance should be

$$R_{\text{eff}} = \frac{\sqrt{2}}{2\pi BC} = \frac{1.41}{6.28 \times 100 \times 10^{-12} \times 325 \times 10^3} = 6.9 \text{ k}\Omega.$$

This must be the equivalent value of the damping resistor in parallel with the dynamic resistance of the tuned circuit and the valve loading resistance.

Assume that the transformer has primary and secondary Q 's of 100. Then,

$$R_D = Q\omega_0 L = 100 \times 6.28 \times 10^7 \times 2.5 \times 10^{-6} = 15.7 \text{ k}\Omega.$$

The secondary winding is shunted by $r_{g1} = 208 \text{ k}\Omega$, giving an equivalent shunt resistance of $R_2 = 14.6 \text{ k}\Omega$. To achieve the required $R_{\text{eff}} = 6.9 \text{ k}\Omega$ the damping resistor R must be

$$R = \frac{R_s \cdot R_{\text{eff}}}{R_s - R_{\text{eff}}} = \frac{6.9 \text{ k}\Omega \times 14.6 \text{ k}\Omega}{14.6 \text{ k}\Omega - 6.9 \text{ k}\Omega} = 13 \text{ k}\Omega.$$

Similarly, the primary winding is shunted by the valve $r_a = 500 \text{ k}\Omega$, and the required primary damping resistor is 12.4 k Ω . Both damping resistors may therefore be made 12 k Ω .

Decoupling. The design values of r_a and g_m were selected for $V_A = 200 \text{ V}$. Assuming an available h.t. supply of 250 V, the extra 50 V may be dropped in a decoupling resistor. Thus, $R = V/I = 50/(12 \times 10^{-3}) \div 4 \text{ k}\Omega$.

Let it be the preferred value of $4.7 \text{ k}\Omega$. The decoupling capacitor should offer a signal path to earth which is small compared to this. At 10 Mc/s a 33 pF capacitor has a reactance of 483Ω which is suitable.

The correct bias conditions are set up as in Design Example 5.1. In this example, the problem of unequal loading of the two tuned circuits has been easily overcome because the specification is not particularly stringent. In cases where the required Q 's are high, and where the relative values of r_a and $r_{\theta 1}$ are such as to give an unbalanced condition, a technique described by Langford-Smith⁽¹⁷⁾ may be used. In this treatment a transformer is designed having equal values of primary and secondary Q when unloaded. Designating them by Q_{u1} and Q_{u2} they should have such values that, when in circuit and loaded by r_a and $r_{\theta 1}$, $Q = \sqrt{(Q_{u1} \cdot Q_{u2})}$, where Q is that required to provide the correct gain and bandwidth.

5.7. TUNED AMPLIFIERS USING TRANSISTORS

The necessary theory associated with parallel tuned circuits has been presented in §§ 5.1 and 5.6. Before proceeding with the design of transistor tuned amplifiers, the characteristics of transistors, when used at high frequencies, must first be studied.

Choice of Circuit Configuration

The frequency response of a transistor may be expressed in terms of the frequency at which the current gain is reduced to $1/\sqrt{2}$ of its low frequency value. At this frequency the phase shift starts to change rapidly, and this can be of importance in obtaining stable amplification over a range of frequencies. The frequency at which this occurs is called the cut-off frequency and is denoted by f_α for the common base and f_β for the common emitter configuration. To a rough approximation $f_\alpha = \beta f_\beta$, i.e. a higher cut-off frequency is obtainable with common base than with common emitter. Despite this fact, the common base arrangement is not necessarily preferred at high frequencies.

Transistors are available with sufficiently high values of f_β that they may be used, in I.F. amplifiers for instance, in the common emitter configuration, taking advantage of the higher current gain of that circuit arrangement.

High Frequency Equivalent Network

At high frequencies the equivalent networks of Figs. 2.23 and 2.24 fail to yield accurate design results because of the h.f. effects that are inherent in the structure of a transistor. To take account of these effects the modified- T and the hybrid- π networks provide the most convenient representations for common base and common emitter respectively. These are shown in Fig. 5.16.

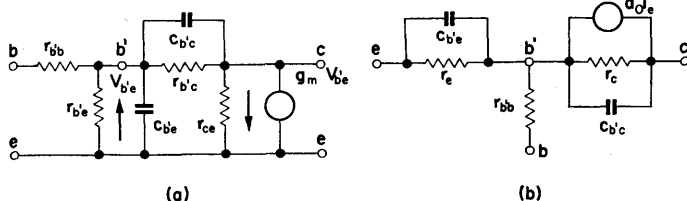


FIG. 5.16. The hybrid- π and modified- T equivalent networks for use at high frequency. The symbol b' represents the internal base point.

As the last design example of this chapter will be a common emitter circuit, attention will be limited to the hybrid- π network. The following relationships hold between the low frequency T parameters of Fig. 2.23 and the hybrid- π parameters:

$$r_{ce} = 2r_c(1 - \alpha), \quad r_{b'c} = 2r_c, \quad r_{b'e} = \frac{r_e}{(1 - \alpha)} + r_b - r_{bb'};$$

$$g_m = \frac{\alpha}{r_e + (r_b - r_{bb'})(1 - \alpha)} = \frac{g_m \cdot r_{b'e}}{1 - g_m \cdot r_{b'e}} = g_m \cdot r_{b'e}$$

$$\text{and } c_{b'e} = \frac{\beta}{2\pi f_1 r_{b'e}}.$$

The symbols used have the following meanings:

- r_e is the emitter resistance, r_b is the base resistance, and
- r_c is the collector resistance.
- $r_{bb'}$ represents the ohmic resistance which connects the active part of the base to the external base connector b .
- $c_{b'e}$ is the emitter diffusion capacitance.
- $r_{b'c}$ is the collector capacitance.
- f_1 is the frequency at which the modulus of the common emitter forward current transfer ratio (h_{fe}) is unity, and
- α and β are the current gains for common base and common emitter.

Since $r_{b'e}$ is usually small the effect of $c_{b'e}$ is frequently negligible. The collector capacitance however is more significant since it shunts a medium to high resistance. This capacitance can seriously reduce bandwidth, and furthermore provides an internal feedback path from the collector output to the input. With good h.f. transistors $r_{b'c}$ and r_{ce} will often be so large that they can be ignored. Ignoring r_{ce} implies a load impedance which

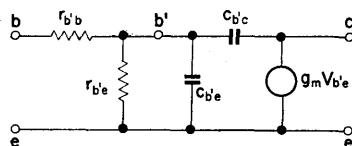


FIG. 5.17. Simplified hybrid- π network.

is small compared with it, while $r_{b'c}$ may be ignored because at h.f. it is large compared with the reactance of $c_{b'c}$.

The hybrid π of Fig. 5.16a may therefore often be reduced to the simplified network of Fig. 5.17.

5.8. NEUTRALIZATION⁽¹⁸⁾

As frequency increases, the reactance of $c_{b'c}$ falls, thus causing a feedback from output to input of the transistor. In most instances it is necessary to cancel the effects of this internal

feedback. The term unilateralization describes the process by which complete cancellation is obtained. A more realistic approach is that of neutralization in which only partial cancellation

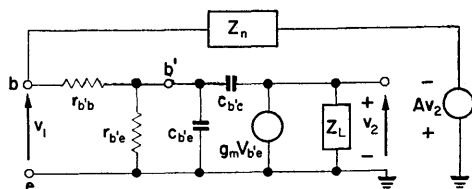


FIG. 5.18. Hybrid- π equivalent network with external feedback.

is achieved, but this being sufficient to enable the effects of feedback to be ignored.

In Fig. 5.18 is shown a hybrid- π equivalent circuit with a feedback network Z_n fed with a signal derived from the output

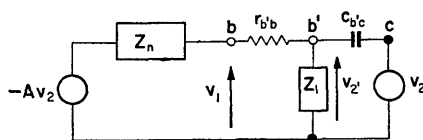


FIG. 5.19. Modification of Fig. 5.18 for the application of the superposition theorem.

voltage. For the cancellation of feedback effects, v_1 should be zero for any value of v_2 . Employing superposition, v_1 may be written as the sum of two terms, one from v_2 and the other from the Av_2 generator. The circuit may be redrawn as in Fig. 5.19, in which

$$Z_1 = \frac{r_{b'e}}{1 + sC_{b'e}r_{b'e}},$$

$$v'_2 \text{ (due to } v_2) = v_2 \frac{Z_1}{Z_1 + 1/sC_{b'e}}.$$

Making use of Thevenin's theorem the circuit simplifies further to that of Fig. 5.20, in which

$$Z_2 = \frac{Z_1}{1 + sC_{b'c}Z_1}.$$

Using superposition,

$$v_1 \text{ (due to } v_2) = \left(\frac{Z_n}{Z_n + r_{bb'} + Z_2} \right) \left(\frac{Z_1}{Z_1 + 1/sC_{b'c}} \right) v_2,$$

$$v_1 \text{ (due to } Av_2) = -A \left(\frac{Z_2 + r_{bb'}}{Z_n + r_{bb'} + Z_2} \right) v_2,$$

therefore

$$v_1 = \left(\frac{Z_n}{Z_n + r_{bb'} + Z_2} \right) \left(\frac{Z_1}{Z_1 + 1/sC_{b'c}} \right) v_2 - A \left(\frac{Z_2 + r_{bb'}}{Z_n + r_{bb'} + Z_2} \right) v_2.$$

For

$$v_1 = 0, \quad \frac{Z_n Z_1}{Z_1 + 1/sC_{b'c}} = A(Z_2 + r_{bb'}).$$

Solving for Z_n and substituting for Z_1 and Z_2 yields

$$Z_n = Ar_{bb'} \left(1 + \frac{c_{b'e}}{c_{b'c}} \right) + \frac{A}{sC_{b'c}} \left(1 + \frac{r_{bb'}}{r_{b'e}} \right). \quad (5.36)$$

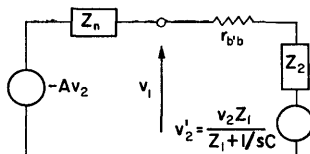


FIG. 5.20. The equivalent network further simplified by the use of Thevenin's theorem.

The required feedback compensation network is therefore a series R - C circuit determined by the values of the transistor resistances and capacitances and by the feedback ratio A . For the capacitor, it is often a reasonable approximation to take its value as $C_{b'c}/A$. In many practical circuits, where the transistor is used at frequencies below f_β , the resistor is omitted and the capacitor alone provides adequate neutralization.

Choice of Transistor

The neutralizing network shunts both input and output impedance of the stage and its capacitive component forms part of the tuning capacitance. A transistor should therefore be chosen having a small value of $c_{b'c}$ and thus requiring a small feedback capacitor. It is also desirable that the component parts of the internal feedback path should not be subject to a very large spread. For operation in common-emitter mode, the transistor should have a common base cut-off frequency approximately 10 times the frequency at which the stage is to be operated.

Design Considerations

In the case of the valve bandpass amplifier, the design centred on a voltage amplifier having large input and output impedances, and the efficiency of power transference was largely ignored. With transistors the input and output impedances are comparatively small and hence the effect on the Q of the tuned circuit is greater. Since these impedances are considerably different from each other, it is necessary that, in addition to providing the necessary bandwidth and selectivity, the tuned transformer should also act as an impedance matching device in order to achieve an efficient transference of power.

The circuit takes the form of Fig. 5.21, and the Av_2 term is obtained from the transformer secondary, so that A is the transformation ratio. The collector is connected to a tap on the primary to reduce the loading effect which would otherwise occur

if the transistor output impedance was across the whole primary. This also enables the tuning capacitor to be of a reasonable value.

For maximum transference of power, the transformer should have a turns ratio,

$$n = \sqrt{\left(\frac{R_{\text{out}}}{R_{\text{in}}}\right)}, \quad (5.37)$$

where R_{out} is the output resistance and R_{in} is the input resistance of the next stage. To determine the value of the input and output impedances, use is made of the fact that, due to the neutralizing network, v_2 has no effect on v_1 and vice-versa. It is therefore permissible to short circuit v_2 , and the input impedance is then

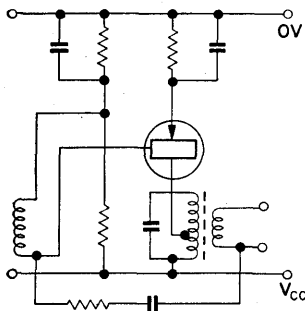


FIG. 5.21. Basic circuit of Design Example 5.4.

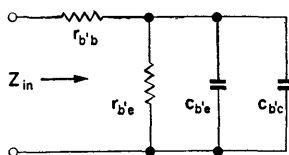


FIG. 5.22. Equivalent network of the input impedance of the neutralized i.f. amplifier stage.

formed by the circuit of Fig. 5.22. This may be resolved into a resistance R_{in} and a capacitance c_{in} in parallel. Similarly, by short circuiting v_1 the output impedance may be calculated, and the equivalent circuit redrawn as in Fig. 5.23.

This circuit may be further simplified by considering the shunting effects of the neutralizing circuit and then treating the input and output as two independent circuit circuits. Thus, R_n and C_n may

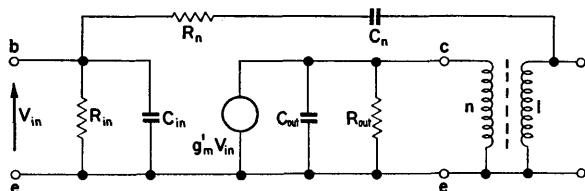


FIG. 5.23. Equivalent network to represent the output impedance of the stage.

be resolved into R_p and C_p in parallel across the input circuit, and also across the secondary of the output transformer. It appears as $n^2 R_p$ and C_p/n^2 across the transistor output impedance

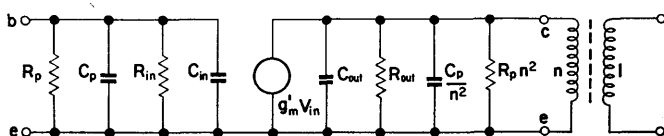


FIG. 5.24. Final equivalent network of the band pass amplifier of Fig. 5.21.

and obviously has less effect there than it does across the input circuit. The final equivalent circuit is therefore of the form of Fig. 5.24.

Design Steps

1. Decide under what d.c. conditions the transistor is to be operated, and calculate the values of emitter and base resistors and bypass capacitors in the usual way.
2. Draw a hybrid- π equivalent circuit and calculate the value of R_{out} and R_{in} , and thus determine the turns ratio n .
3. From eqn. (5.36) calculate R_n and C_n for the neutralizing circuit.

4. Calculate the equivalent impedance which represents the shunting effect of the neutralizing components across the input and output and construct the final equivalent circuit.
5. With the knowledge of the bandwidth required from each stage, use expression (5.9) to determine the tuned circuit effective Q .
6. Assume a value for the unloaded Q , select the tuned circuit capacitor C , calculate L to resonate with C at the centre frequency, and then determine the values of r , and L/Cr , the equivalent shunt resistor of the unloaded circuit.
7. Calculate the required shunting resistance across the tuned circuit to provide the correct bandwidth and thus establish what resistance should be reflected from the transistor output to achieve this.
8. Knowing this value, calculate at what point the transformer primary should be tapped.

DESIGN EXAMPLE 5.4

Required, a transistor I.F. amplifier to operate at a centre frequency of 470 kc/s.

From the makers data sheets, an OC45 has a typical α cut-off frequency of 6 Mc/s when operated at a collector voltage of -6 V and with an emitter current of 1 mA. This is more than 10 times the required centre frequency so this transistor is suitable. The circuit arrangement will be that of Fig. 5.21.

Setting up the d.c. conditions. Let R_E be $820\ \Omega$, so that $V_E = 0.82$ V, with an emitter current of 1 mA. For a V_C of -6 V, and allowing for V_E and the voltage drop across the tuned circuit, $V_{CC} = -7$ V. Thus, making $V_B = -1$ V, $7R_2/(R_1 + R_2) = 1$ and $6R_2 = R_1$.

Also, make $R_1R_2/(R_1 + R_2) = 10R_E = 8.2\text{ k}\Omega$.

Therefore

$$R_1R_2 = 8.2KR_1 + 8.2KR_2.$$

$$6R_2^2 = 49.2KR_2 + 8.2KR_2 \quad \text{and} \quad 6R_2 = 57.4\text{ k}\Omega.$$

Let R_2 be 10 k Ω and hence R_1 should be 56 k Ω .

Suitable decoupling capacitors C_E and C_1 are 0.25 μ F and 0.1 μ F respectively.

Input and output impedances. Based on Fig. 5.16a, and using values from the makers data sheets, the hybrid- π equivalent network is drawn as in Fig. 5.25a. In Fig. 5.25b is drawn the effective

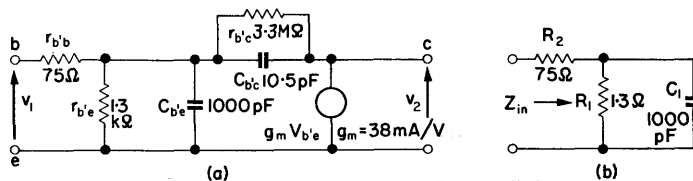


FIG. 5.25. Equivalent hybrid- π network of the circuit of Design Example 5.4 with an equivalent representation of the input impedance if v_2 is short circuited.

tive input circuit if v_2 is short circuited, and if $C_{b'c}$ and $r_{b'c}$ are ignored.

$$Z(R_1, C_1) = \frac{jR_1X_1}{R_1 + jX_1} = \frac{R_1X_1^2}{R_1^2 + X_1^2} + \frac{jR_1^2X_1}{R_1^2 + X_1^2}.$$

Substituting values this becomes a resistance of 78 Ω in series with a capacitive reactance of 310 Ω . Adding $r_{bb'} = 75 \Omega$, $R_s = 153 \Omega$ and $X_s = 310 \Omega$.

This is now converted into an equivalent parallel circuit of R_p and C_p .

Admittance

$$Y = G + jB = \frac{R_s}{R_s^2 + X_s^2} + \frac{jX_s}{R_s^2 + X_s^2},$$

therefore

$$R_p = \frac{R_s^2 + X_s^2}{R_s} \quad \text{and} \quad X_p = \frac{R_s^2 + X_s^2}{X_s}.$$

From which $R_p = R_{in} = 780 \Omega$, and $X_p = 386 \Omega$, so $C_p = C_{in} = 875 \text{ pF}$. By short circuiting v_1 in Fig. 5.2 the output circuit becomes that of Fig. 5.26.

Making use of nodal analysis as discussed in Appendix A, at node b' ,

$$\frac{v'_1}{Z_1} + \frac{v'_1 - v_0}{Z_2} = 0; \quad (5.38)$$

at node C ,

$$\frac{v_0}{Z_3} + \frac{v_0 - v'_1}{Z_2} + g_m v_1 = i_0. \quad (5.39)$$

From eqn. (5.38),

$$v'_1 = Z_1 v_0 / (Z_1 + Z_2).$$

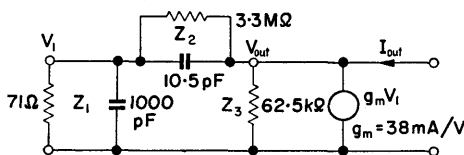


FIG. 5.26. Equivalent network of the output circuit, with v_1 of Fig. 5.25 short circuited.

Substituting in eqn. (5.39) and rearranging,

$$v_0 \left[\frac{1}{Z_3} + \frac{1}{Z_2} + \left(\frac{Z_1}{Z_1 + Z_2} \right) \left(g_m - \frac{1}{Z_2} \right) \right] = i_0.$$

Therefore output impedance,

$$z_0 = \frac{v_0}{i_0} = \frac{1}{(1/Z_3) + (1/Z_2) + [Z_1(Z_1 + Z_2)] [g_m - (1/Z_2)]}.$$

Calculating the component parts of this expression separately yields:

$$Z_1 = (67.9 - j14.28); \quad 1/Z_1 = (14 + j2.96) 10^{-3}.$$

$$Z_2 = (0.31 - j31.8) 10^3; \quad 1/Z_2 = (0.3 + j31) 10^{-6}.$$

$$Z_3 = 62.5 \times 10^3; \quad 1/Z_3 = 16 \times 10^{-6}.$$

Thus,

$$1/Z_3 + 1/Z_2 = (16.3 + j31) 10^{-6}.$$

$$Z_1/(Z_1 + Z_2) = (0.474 + j2.128) 10^{-3}.$$

$$g_m - 1/Z_2 = (38,000 - j31) 10^{-6}.$$

Substituting these values in eqn. (5.40),

$$Z_0 = \frac{(34.4 - j111.9) 10^6}{13,705},$$

i.e. a resistance $R_s = 2.51 \text{ k}\Omega$ in series with a reactance $X_s = 8.16 \text{ k}\Omega$. Resolving into equivalent parallel components,

$$R_{\text{out}} = \frac{R^2 + X^2}{R} = 29 \text{ k}\Omega.$$

$$X_p = \frac{R^2 + X^2}{X} = 8.16 \text{ k}\Omega, \text{ so } C_{\text{out}} = 38 \text{ pF}.$$

Transformer turns ratio.

$$n = \sqrt{\left(\frac{29,000}{780}\right)} \doteq 6.$$

Neutralizing circuit.

$$R_n = Ar_{b'e} \left(1 + \frac{C_{b'e}}{C_{b'c}}\right) = 75/6 \left(1 + \frac{1000}{10.5}\right) = 1.188 \text{ k}\Omega.$$

$$C_n = C_{b'c}/A = 6 \times 10.5 = 63 \text{ pF}.$$

Let them be the preferred values of $1.2 \text{ k}\Omega$ and 68 pF .

Shunting effect on input. At 470 kc/s the reactance of $68 \text{ pF} \doteq 5 \text{ k}\Omega$.

$$R_{pi} = \frac{R_n^2 + X_n^2}{R_n} = \frac{(1.44 + 25) 10^6}{1.2 \times 10^3} = 22 \text{ k}\Omega,$$

$$X_{pi} = \frac{R^2 + X^2}{X} = \frac{26.44 \times 10^6}{5 \times 10^3} = 5.28 \text{ k}\Omega,$$

thus $C_{pi} = 64 \text{ pF}$.

Shunting effect on output.

$$R_{po} = n^2 R_{pi} = 792 \text{ k}\Omega.$$

$$C_{po} = C_{pi}/n^2 = 1.8 \text{ pF}.$$

Assuming that the stage is followed by a similar stage having the same input impedance, the final equivalent circuit is that of Fig. 5.27. In this the conductance of the representative current

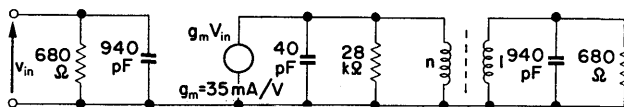


FIG. 5.27. Final equivalent circuit of Design Example 5.4. Note the different value of g'_m to take account of the voltage drop in r'_{bb} .

generator has been given a value of 35 instead of 38 mA/V. This is necessary because the current is now shown as a function of v_{in} , at the base connection, and not of $v_{b'e}$. The difference in g_m takes account of the voltage lost in $r_{bb'}$.

The capacitance reflected from the secondary into the primary of Fig. 5.26 is $940/n^2 = 26 \text{ pF}$, giving a total primary capacitance of 66 pF. Similarly, the resistance reflected from the secondary into the primary is $680n^2 = 24.5 \text{ k}\Omega$, giving a total shunt resistance of about 13 kΩ. To reduce the loading effect of this resistance on the tuned circuit, a tapped primary winding is used.

The tuned primary. Assuming that the complete I.F. amplifier is to consist of two stages, and that the over-all bandwidth is to be 7 kc/s, then each stage must have a bandwidth of $7 \times 1.2/\sqrt{2} \div 9 \text{ kc/s}$.

From eqn. (5.9), bandwidth = $f_o/Q = 1/2\pi RC$, from which $Q_{eff} = 470/9 = 52$, and equivalent shunt resistance $R_{eq} = 70 \text{ k}\Omega$.

In circuits of this type, a transformer would be used having an unloaded primary Q_u of 100, and tuned by a 250 pF capacitor.

To resonate with this capacitor at 470 kc/s, if the reflected capacitance from the transistor output is assumed to be negligible, $L = 450 \mu\text{H}$.

Primary resistance $r = \omega L / Q_u = 13.3 \Omega$.

Equivalent shunt resistance $R_D = L / Cr \doteq 135 \text{ k}\Omega$.

It is therefore necessary that the resistance reflected from the transistor output across the primary should reduce the equivalent

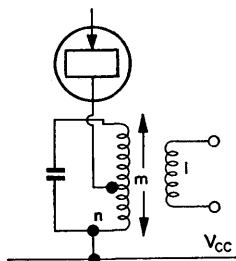


FIG. 5.28. Circuit to illustrate the auto-transformer action of the primary winding.

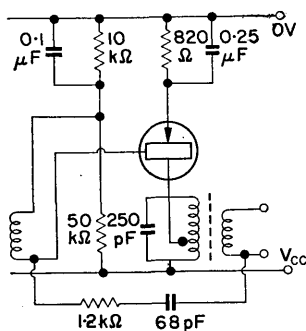


FIG. 5.29. Completed circuit of Design Example 5.4.

shunt resistance from 135 kΩ to the required value of 70 kΩ. The reflected resistance should thus appear as 145 kΩ and this is achieved by the auto-transformer action of the tapped primary

winding. Referring to Fig. 5.28, the output resistance of $13\text{ k}\Omega$ across n appears across the whole primary m as $13\text{ k}\Omega \times m^2/n^2$. For this to equal $145\text{ k}\Omega$, $m^2/n^2 = 11$ so that $m/n = 3.3$. For matching purposes it has already been decided that $n:1 = 6$, so the complete primary to secondary turns ratio becomes approximately 20:1. The voltage gain of the circuit, measured from transistor input to transformer secondary output, is $g_m R/m$, thus,

$$\text{Gain} = 35 \times 70 \times 1/20 = 122.$$

The completed circuit of the first stage is given in Fig. 5.29. The second stage of the amplifier, which would normally be feeding into a detector circuit, would be modified to take account of the different input impedance of that circuit.

CHAPTER 6

Zero Frequency Amplifiers

Introduction

It is often required, particularly in control engineering problems, that an amplifier should amplify down to zero frequency. For a capacitor coupled amplifier this would require the use of an infinite capacitor. A zero frequency amplifier is able to amplify a change in d.c. level, as shown in Fig. 6.1.

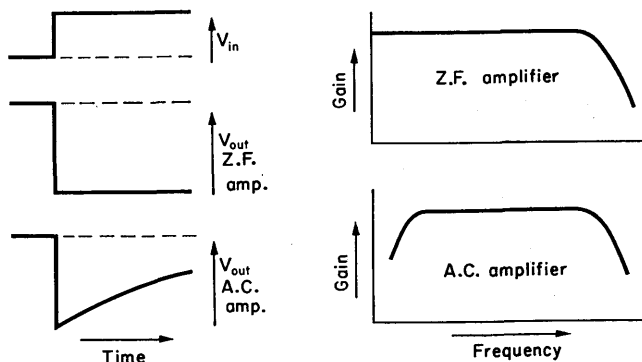


FIG. 6.1. Comparison of time and frequency responses of zero frequency and a.c. amplifiers.

6.1. AMPLIFIER TYPES

There are two general types of z.f. amplifiers:

- Direct coupled.* One stage is coupled to the next either directly or by means of a resistance chain. Two such cir-

cuit arrangements using valves and transistors are given in Fig. 6.2.

- (b) *Modulator (Chopper)*. The input is chopped, amplified as an a.c. signal and reconstituted at the output, as shown in Fig. 6.3.

Type (a) will usually have a greater bandwidth than type (b) but the latter has less output drift.

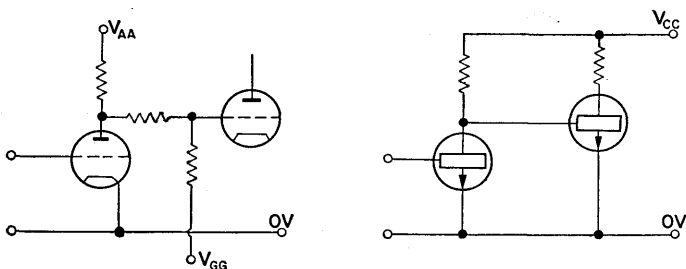


FIG. 6.2. Direct coupled amplifier stages. V_{GG} is the negative voltage required to provide the correct bias for the second valve.

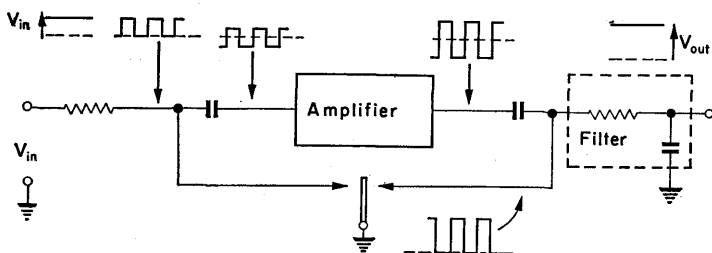


FIG. 6.3. Schematic diagram to illustrate the operation of a chopper z.f. amplifier. Chopping is achieved by means of a mechanical relay driven from an a.c. source. This could be replaced by a solid state switching device.

Drift

With no input signal, the output from a z.f. amplifier can alter due to internal changes of operating conditions. These changes are amplified in the same way as input signals and cannot be

separated from them. The change in output voltage for zero input is known as drift. Drift is measured by shorting the input terminals and monitoring the output, and is typically given in volts per hour; so that different amplifiers may be compared, drift is usually referred to the input.

$$\text{Input drift } (V_{di}) = \frac{\text{output drift } (V_{do})}{\text{amplifier gain } (A)}. \quad (6.1)$$

Drift signals are of very low frequency having a period which may vary from several seconds to hours, and are consequently not passed by a.c. amplifiers.

Zeroing

Since the output level is of significance, with a z.f. amplifier, some means is required of setting the output to the required datum when the input is zero. (For example, see Fig. 6.6.)

6.2. DIRECT COUPLED AMPLIFIERS

The conventional common cathode amplifier is basically a d.c. amplifier.

Gain

The working point of a d.c. amplifier is a function of the input voltage, and the small signal gain is the same as for a capacitively coupled amplifier.

$$A = \frac{-\mu R_L}{r_a + R_L} = \frac{-g_m}{g_a + G_L}. \quad (6.2)$$

The small signal gain will vary with input signal because of the change in valve parameters with operating point. (See Fig. 6.4.)

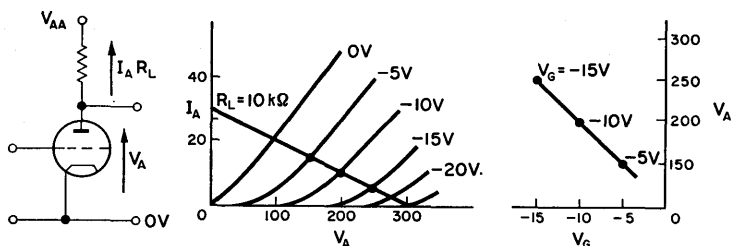


FIG. 6.4. Consideration of a single stage direct coupled amplifier to show how the anode voltage V_A varies with the d.c. grid voltage V_G .

DESIGN EXAMPLE 6.1

Required, a direct coupled amplifier providing a gain of 10 with signal inversion. The output voltage should be 150 V when the input voltage is zero.

$$\text{Gain } A = \frac{-\mu R_L}{r_a + R_L + (\mu + 1) R'_K} \quad [\text{from eqn. (1.12)}]. \quad (6.3)$$

R'_K is the effective value of cathode resistance, i.e. R_K of Fig. 6.5 in parallel with R_S .

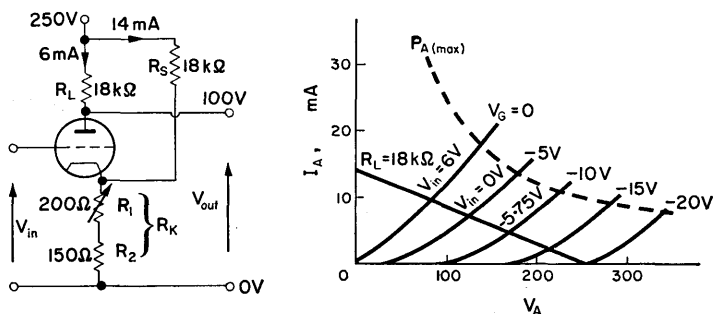


FIG. 6.5. Circuit diagram of Design Example 6.1.

Valve. One half of an ECC82 general purpose triode is suitable for this purpose having a typical μ of 20 and r_a of 10 k Ω . Let the operating point be 150 V and 6 mA which requires a grid-cathode voltage of -5 V.

Cathode resistance. Following the method of § 1.6 let the total current through R_K be 20 mA.

$$R_K = \frac{-V_{GK}}{I_{RK}} = \frac{5 \text{ V}}{20 \text{ mA}} = 250 \Omega.$$

Anode resistance. Rearranging eqn. (6.3),

$$R_L = \frac{-A[r_a + (\mu + 1) R_K]}{\mu + A}. \quad (6.4)$$

Substituting the nominal values,

$$R_L = \frac{10(10 \text{ k}\Omega + 5.25 \text{ k}\Omega)}{10} = 15.25 \text{ k}\Omega.$$

(Let it be 18 k Ω .)

Supply voltage V_{AA} . A loadline of 18 k Ω , drawn through the operating point of 150 V, 6 mA gives a supply voltage of 250 V.

Bias current resistor R_S . The voltage across R_S is the supply voltage minus the cathode voltage.

$$R_S = \frac{V_{AA} - V_K}{I_R} = \frac{V_{AA} - V_K}{I_{RK} - I_A} \doteq \frac{250 \text{ V}}{14 \text{ mA}}, \quad (6.5)$$

$$\doteq 18 \text{ k}\Omega.$$

Zero control. To enable the output voltage to be set to the required value, R_K may be adjusted. Make R_1 a 200 Ω variable resistor and R_2 , 150 Ω .

6.3. PENTODE AMPLIFIERS

Many pentodes can be operated with extremely large anode resistors and low screen grid voltages. In this manner stage gains of several hundred can be obtained although the bandwidth will be relatively small because of the large anode time constant.

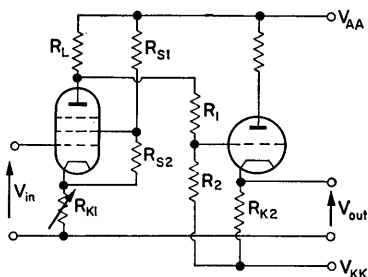


FIG. 6.6. Pentode amplifier with cathode follower output.

To prevent loading of the anode resistor, the cathode follower output circuit of Fig. 6.6 can be used.

A typical requirement is that the amplifier should give zero volts out for zero input volts and that the output should be able to move both positively and negatively. The amplifying valve requires negative grid volts which can be provided by a resistance chain from the anode supply line. If a cathode resistor is used, it will reduce the gain, but the negative feedback could be desirable in stabilizing it.

Once the anode voltage for zero output is found, the voltage divider for the cathode follower input can be designed. To prevent loading of R_L , $R_1 + R_2$ should be at least 5 times R_L . Loading of R_L will reduce the gain (by reducing the effective load resistance), and the voltage swing (by drawing a current through R_L even when V_1 is cutoff). If the loading is small, a sufficiently accurate relationship is:

$$\frac{R_2}{R_1 + R_2} = \frac{-V_{GG}}{V_A - V_{GG}}, \quad \text{where } R_1 + R_2 \gg R_L.$$

Determination of R_{K2}

The fact that the output voltage is required to move both positively and negatively must be considered when selecting a value for R_K . Consider the circuit of Fig. 6.7a. When the valve is conducting,

$$I_A = I_R + I_L = \frac{(V_L - V_{KK})}{R_K} + I_L.$$

Let $I_{A(\max)}$ be the current supplied by the valve when the output voltage is maximum positive, $V_{L(\max)}$. Then the voltage across the valve is $V_{AA} - V_{L(\max)}$ and the maximum current the valve can supply is indicated on the valve characteristics at the intersection of $V_G = 0$ V and $V_A = (V_{AA} - V_L)$.

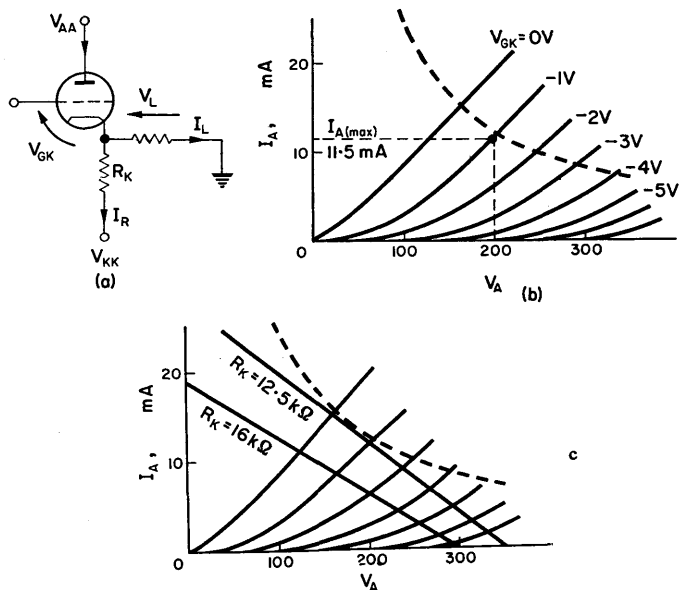


FIG. 6.7. Determination of the optimum value for R_K in the cathode follower stage. In (c) the two load lines for R'_K represent R_K in parallel with R_L .

If the valve is an ECC81 double triode and the output voltage is required to be ± 50 V into a load of $20\text{ k}\Omega$, then with $V_{AA} = 250$ V and $V_{KK} = -250$ V:

$$V_{L(\max)} = 50\text{ V},$$

$$V_{A(\min)} = V_{AA} - V_{L(\max)} = 200\text{ V}.$$

If the grid voltage $V_{GK} = -1$ V is accepted as a limit instead of $V_{GK} = 0$ V, then from Fig. 6.7b,

$$I_{A(\max)} = 11.5\text{ mA}.$$

The maximum load current,

$$\begin{aligned} I_{L(\max)} &= \frac{V_{L(\max)}}{R_L} = \frac{50\text{ V}}{20\text{ k}\Omega} = 2.5\text{ mA}, \\ R_K &= \frac{\text{Voltage across } R_K}{\text{Current in } R_K} = \frac{V_{L(\max)} - V_{KK}}{I_{A(\max)} - I_{L(\max)}} \quad (6.6) \\ &= \frac{300\text{ V}}{9\text{ mA}} = 33.3\text{ k}\Omega. \end{aligned}$$

This is the minimum value and, using it, the standing valve current

$$I_A \text{ (when } V_L = 0) \text{ is } I_{A1} = I_{K1} = \frac{250\text{ V}}{33.3\text{ k}\Omega} = 7.5\text{ mA}.$$

When the valve is cut off, $I_A = 0$, then

$$\begin{aligned} R_K &= \frac{V_{L(\min)} - V_{KK}}{I_{L(\max)}} \quad (6.7) \\ &= \frac{200\text{ V}}{2.5\text{ mA}} = 80\text{ k}\Omega. \end{aligned}$$

This is the maximum value and gives rise to a standing valve current of

$$I_{A2} = I_{K2} = \frac{250\text{ V}}{80\text{ k}\Omega} = 3.125\text{ mA}.$$

In general, as the value of R_K is increased, the standing anode current decreases, but at the same time the cathode follower efficiency decreases as the point of cut-off is approached. The load lines drawn in Fig. 6.7c represent the two values of R_K , each shunted by R_L . At $V_A = 250$ V (when $V_L = 0$) the bias voltages required are;

$$V_{GK1} = -2.5 \text{ V, for } R_K = 33 \text{ k}\Omega,$$

$$V_{GK2} = -3.7 \text{ V, for } R_K = 80 \text{ k}\Omega.$$

Equivalent Network

If in Fig. 6.8 ($R_1 + R_2$) is much larger than R_{L1} , then the signal voltage across R_{L1} is $-\mu_1 R_{L1} v_{in1} / (r'_{a1} + R_{L1})$, where $r'_{a1} = r_{a1} + R_K(\mu + 1)$.

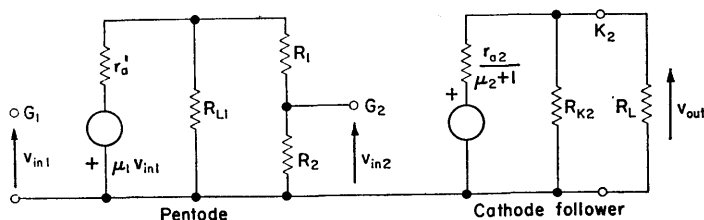


FIG. 6.8. Equivalent z.f. network of the circuit diagram of Fig. 6.6.

Then,

$$v_{in2} = \frac{-\mu_1 R_{L1}}{(r'_{a1} + R_{L1})} \cdot v_{in1} \cdot \frac{R_2}{(R_1 + R_2)}$$

and

$$\begin{aligned} v_{out} &= \frac{[\mu_2/(\mu_2 + 1)] [R_L R_K / (R_L + R_K)]}{[r_{a2}/(\mu_2 + 1)] + [R_L R_K / (R_L + R_K)]} \cdot v_{in2} \\ &= \frac{\mu_2 R_L R_K}{(\mu_2 + 1) R_L R_K + (R_L + R_K) r_{a2}} \cdot v_{in2}. \end{aligned}$$

Voltage gain

$$\begin{aligned}
 \frac{v_{out}}{v_{in1}} &= \frac{-\mu_1 R_{L1}}{(r_{a1} + R_{L1})} \cdot \frac{R_2}{(R_1 + R_2)} \times \\
 &\times \frac{\mu_2 R_L R_K}{(\mu_2 + 1) R_L R_K + r_{a2}(R_L + R_K)} \\
 &= [A_1 R_2 / (R_1 + R_2)] A_2,
 \end{aligned} \tag{6.8}$$

where A_1 is the gain of the pentode and A_2 is the gain of the cathode follower.

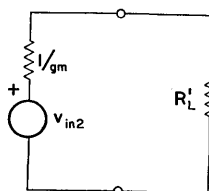


FIG. 6.9. Simplified equivalent network of a cathode follower. Since R_L , the effective load, will be much greater than $1/g_m$ the voltage gain will be approximately unity.

It is usually sufficient to regard the cathode follower as being represented by the equivalent circuit of Fig. 6.9 in which R'_L is the effective load. Since $1/g_m$ is very much smaller than R'_L the gain of such a stage is very nearly unity, i.e. $A_2 \doteq 1$.

DESIGN EXAMPLE 6.2

Required, an amplifier consisting of a pentode and cathode follower, to provide an output of ± 50 V into a $20\text{ k}\Omega$ load. The gain of the pentode should be the maximum practical value obtainable from an EF86 operating from a 250 V supply.

The pentode circuit. If resistive coupling is used, there will be a signal reduction of approximately one-third between the pentode and cathode follower, so a voltage swing of ± 80 V is required at the anode.

Using the test circuit of Fig. 6.10a curves are plotted relating gain to screen grid voltage, with control grid voltage as parameter (Fig. 6.10b).

For each value of V_{GK} another curve may be drawn, as in Fig. 6.10c, in which V_A is plotted against V_S . Examination of

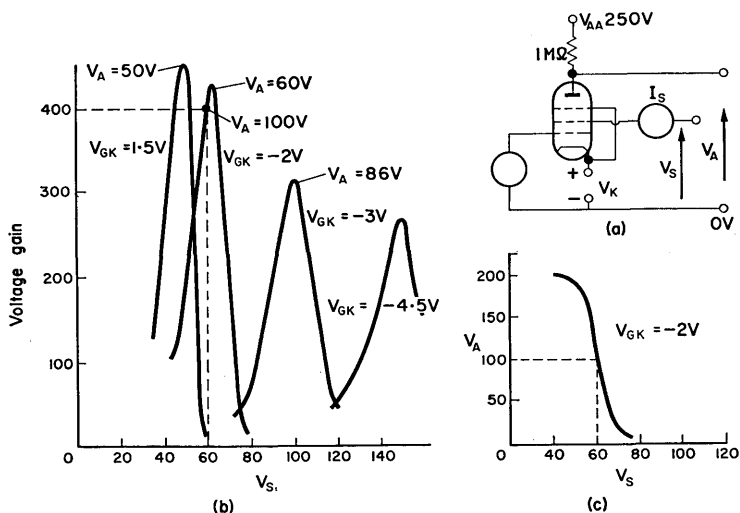


FIG. 6.10. Selection of operating conditions for a pentode amplifier.

these curves shows that a grid voltage of $-2V$ is a reasonable compromise between gain and possible anode voltage swing; a screen voltage of 60V giving a gain of 400 and a standing anode voltage of 100V.

Anode load resistor. The anode load resistor used in the test circuit has a value of 1MΩ. A larger value would provide higher gain but the coupling network would reduce the effective value of this resistor, and thus reduce the maximum positive signal voltage swing. These considerations indicate that 1MΩ is a suitable value.

Screen grid voltage. With $V_S = 60$ V and $V_A = 100$ V the measured screen current is $40 \mu\text{A}$ and the anode current $150 \mu\text{A}$. For the screen supply the bleeder current, through R_{S1} and R_{S2} (of Fig. 6.6) should be of the order of 2 mA and this current can be used to provide the required cathode voltage. Neglecting I_S and I_K , and allowing for the cathode voltage,

$$\frac{R_{S2}}{R_{S1} + R_{S2}} = \frac{58 \text{ V}}{248 \text{ V}},$$

so $R_{S1} = 3R_{S2}$. Make $R_{S1} = 27 \text{ k}\Omega$ and $R_{S2} = 82 \text{ k}\Omega$. The bleeder current is then

$$I_B = \frac{V_{AA}}{R_{S1} + R_{S2}} = 2.3 \text{ mA}.$$

Cathode resistor. Neglecting I_S and I_K ,

$$R_K = \frac{V_K}{I_B} = \frac{2 \text{ V}}{2.3 \text{ mA}} = 0.9 \text{ k}\Omega.$$

This may be made up of a fixed 680Ω resistor in series with a 500Ω variable resistor for zeroing purposes.

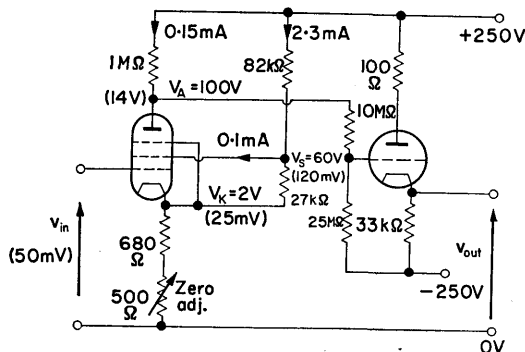


FIG. 6.11. Signal voltages (in brackets) and d.c. conditions shown in the circuit of Design Example 6.2. The large values of grid resistors for V_2 are permissible because of the high degree of negative feedback inherent in a cathode follower.

Voltage divider. To reduce loading on R_L , make $R_1 + R_2$ greater than $10R_L$.

$$\frac{R_1}{R_2} = \frac{V_A}{-V_{KK}} = \frac{100 \text{ V}}{250 \text{ V}} = \frac{10 \text{ M}\Omega}{25 \text{ M}\Omega}.$$

With these values the grid path resistance is considerably larger than the usual maximum of $3 \text{ M}\Omega$, but as long as the grid current is of the order of 10^{-8} A this will generally cause no trouble. From previous considerations make $R_{K2} = 33 \text{ k}\Omega$, as in Fig. 6.11.

Estimation of gain. Referring to Fig. 6.10 and using the expression,

$$\text{Voltage gain} = g_m \cdot \frac{R_L r_a}{R_L + r_a} \quad \text{where } r_a \doteq 8 \text{ M}\Omega,$$

$$g_m = \text{gain} \times \left(\frac{r_a + R_L}{R_L r_a} \right),$$

$$= 400 \times 1.12 \times 10^{-6} \doteq 0.45 \text{ mA/V}.$$

Neglecting r_a , the presence of cathode resistance causes a reduction in the effective value of mutual conductance to g'_m where

$$g'_m = \frac{g_m}{1 + g_m R_K} = \frac{0.45}{1 + 0.45} \text{ mA/V},$$

$$\text{i.e.} \quad g'_m = 0.31 \text{ mA/V}.$$

The pentode gain, neglecting negative feedback due to finite screen resistance $= -g'_m R_L = 0.31 \times 10^6 \times 10^{-3} = -310$. (The effective r_a of the valve $= r_a + (\mu + 1) R_K = 8 \text{ M}\Omega + 3 \text{ M}\Omega$.)

The coupling resistors R_1 and R_2 reduce the gain by the factor

$$\frac{R_2}{R_1 + R_2} = \frac{25}{10 + 25}.$$

Thus, over-all gain

$$A = \frac{v_{\text{out}}}{v_{\text{in}}} = -310 \times 5/7 = -221.$$

Frequency response. An equivalent circuit of the amplifier is drawn in Fig. 6.12a, which may be reasonably simplified to the circuit of Fig. 6.12b.

Since $R'_L \ll R_1 + R_2$, a breakpoint occurs at $\omega_1 = 1/T_1 = 1/C_a R'_L$, and another at $\omega_2 = 1/T_2 = 1/C_{g2} R$, where $R = R_1 R_2 / (R_1 + R_2)$. The approximate gain expression is

$$A(s) = \frac{g_m}{1 + g_m R_K} \cdot \frac{R'_L}{1 + s C_a R'_L} \cdot \frac{R_2}{R_1 + R_2} \times \frac{1}{1 + s C_{g2} R_1 R_2 / (R_1 + R_2)} \quad (6.9)$$

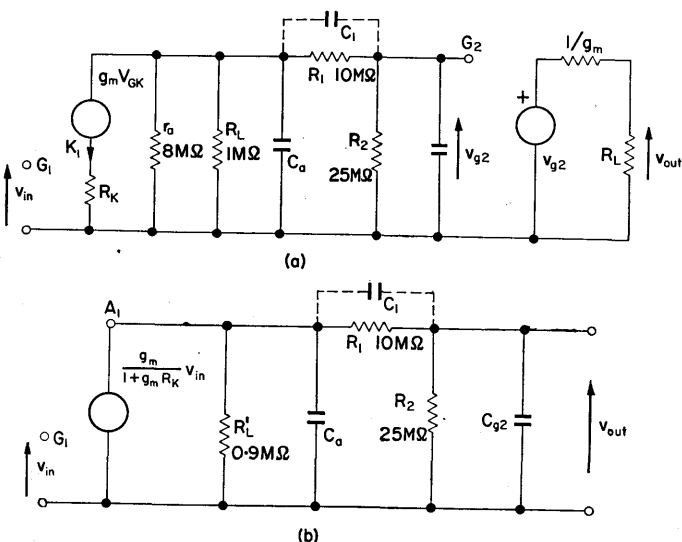


FIG. 6.12. Equivalent networks of the d.c. amplifier. The simplified network is valid because the gain of the cathode follower is unity and its bandwidth is much greater than that of the pentode stage. It can therefore be omitted for frequency considerations.

It is apparent that the capacitance across R_2 , which is largely the input capacitance to the output stage, introduces a lag additional to that due to C_a . This additional lag can be eliminated by shunting R_1 with capacitance $C_1 = C_{g2}(R_2/R_1)$, i.e. the time constant $C_1 R_1 = C_{g2} R_2$.

The gain expression is thus:

$$\begin{aligned} A(s) &= g'_m \cdot \frac{R'_L}{1 + sC'_a R'_L} \cdot \frac{R_2}{R_1 + R_2} \times \\ &\quad \times \frac{1 + sC_1 R_1}{1 + s(C_{g2} + C_1) [R_1 R_2 / (R_1 + R_2)]} \\ &= g'_m \cdot \frac{R'_L}{1 + sC'_a R'_L} \cdot \frac{R_2}{R_1 + R_2} \\ &\quad \text{(if } C_1 R_1 = C_{g2} R_2 \text{)} \end{aligned}$$

C_1 has the effect of increasing C_a by the term $C_1 C_{g2} / (C_1 + C_{g2})$, i.e.

$$C'_a = C_a + \frac{C_1 C_{g2}}{C_1 + C_{g2}},$$

and

$$\omega'_1 = \frac{1}{C'_a R'_L},$$

which is considerably less than ω_1 .

Estimation of frequency response. Referring to Fig. 6.12b,

$$C_a = C_{ak} + \text{socket and wiring capacitance} = 12 \text{ pF.}$$

$$R'_L = r_a R_L / (r_a + R_L) = 0.9 \text{ M}\Omega.$$

Therefore

$$T_1 = C_a R'_L = 1.08 \times 10^{-6} \text{ sec.}$$

$$\omega_1 = 2\pi f_1 = \frac{1}{C_a R'_L} = 92.6 \times 10^3 \text{ r/s,}$$

from which

$$f_1 = 14.75 \text{ kc/s.}$$

$C_{g2} = C_{ga} + (1 - A) C_{gk} + \text{wiring capacitance}$, where A is the cathode follower gain. Since A is very nearly unity, the input capacitance C_{g2} is approximately equal to $C_{ga} + \text{socket capacitance between the grid connection and earth}$. Thus,

$$C_{g2} \doteq 8 \text{ pF.}$$

$$\begin{aligned}\omega_2 = 2\pi f_2 &= \frac{1}{C_{g2} R_1 R_2 / (R_1 + R_2)} \\ &= \frac{1}{8 \times 10^{-12} \times 7.1 \times 10^6} = 1.76 \times 10^4 \text{ r/s.}\end{aligned}$$

Therefore

$$f_2 = \omega_2 / 2\pi = 2.8 \text{ kc/s.}$$

To remove the breakpoint at f_2 , capacitor C_1 is used.

$$C_1 R_1 = C_{g2} R_2.$$

Therefore

$$C_1 = C_{g2} \frac{R_2}{R_1} = 8 \times 25/10 = 20 \text{ pF.}$$

This increases the anode capacitance of V_1 ,

$$C'_a = C_a + \frac{C_1 C_{g2}}{C_1 + C_{g2}} = 19 \text{ pF.}$$

Thus

$$\omega'_1 = 2\pi f'_1 = \frac{1}{C'_a R'_L} = 58.5 \times 10^3 \text{ r/s,}$$

and

$$f'_1 = \omega'_1 / 2\pi = 9.3 \text{ kc/s.}$$

The effect of C_1 on the amplitude response is illustrated in Fig. 6.13.

Alternative coupling networks. The reduction in gain due to the voltage divider can be eliminated by using a constant

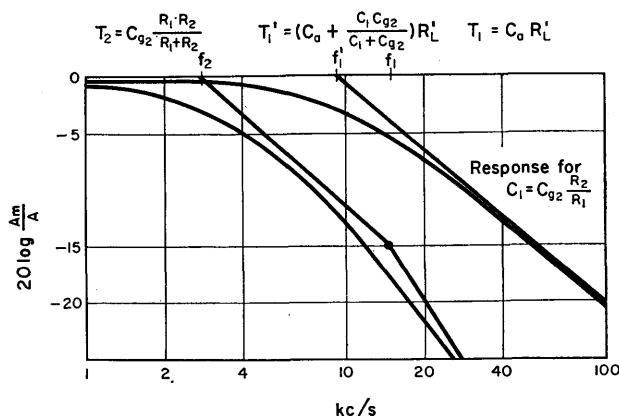


FIG. 6.13. Frequency response of the amplifier of Fig. 6.11. There are break points at f_1 due to the pentode and at f_2 because of the coupling network. The latter can be eliminated by introducing C_1 but this lowers f_1 to f_1' .

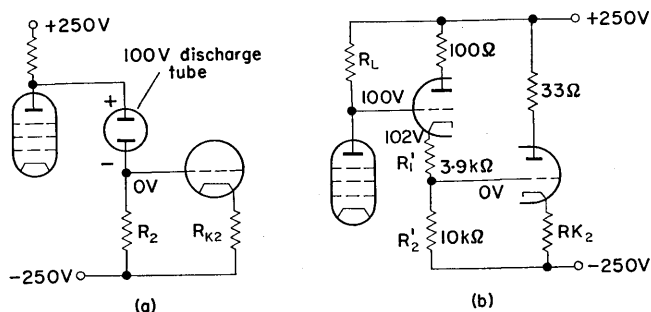


FIG. 6.14. Alternative coupling networks. (a) Use of gas discharge tube, and (b) cathode follower coupling. The former eliminates loss in gain due to resistive coupling. In the latter case the cathode follower isolates the anode voltage from the potential divider thus enabling low value resistors to be used. This gives improved stabilization of the operating point and effectively eliminates the breakpoint f_2 due to the coupling network.

voltage device, such as a discharge tube. The disadvantages of this method are chiefly:

- (a) A relatively large current is required to operate the device in its constant voltage region, and this current produces a voltage across R_L reducing the available anode swing.
- (b) Unless the gas tube is of a special type, it is likely to produce noise voltage and even oscillate. Special devices have been produced which, at least partially, overcome these defects.

The large value of resistors R_1 and R_2 in Fig. 6.6 can be reduced by isolating the pentode anode from the potential divider with a cathode follower as shown in Fig. 6.14b.

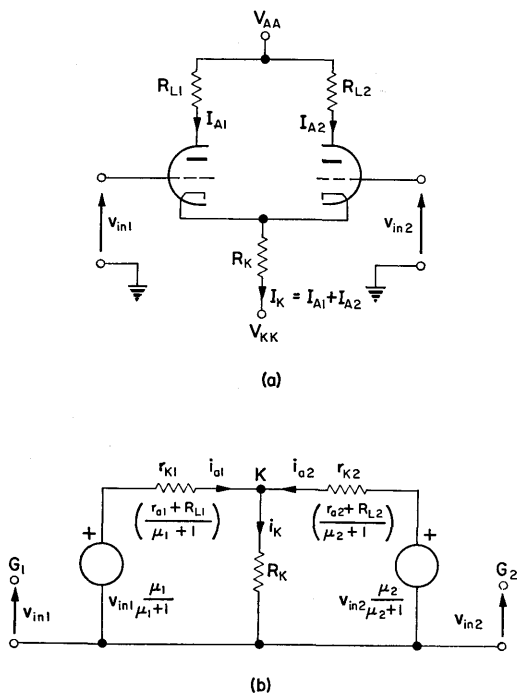


FIG. 6.15. Cathode coupled amplifier with equivalent network.

6.4. THE CATHODE COUPLED AMPLIFIER

A circuit which is used to reduce drift in direct coupled amplifiers is the balanced cathode coupled amplifier or longtail pair shown in Fig. 6.15a. When $v_{in1} = 0$, for two identical valves, the standing currents

Also,

$$I_{A1} + I_{A2} = I_K, \text{ and } I_{A1} = I_{A2} = \frac{I_K}{2}.$$

$$I_K = \frac{V_{RK}}{R_K} \doteq \frac{-V_{KK}}{R_K}$$

(where $V_{KK} \gg V_{GK}$, and V_{RK} is the voltage across the cathode resistor).

Small Signal Representation

The small signal performance can be assessed by analysing the equivalent network.

A simpler approach can be made by regarding the amplifier as two cathode followers with common cathode resistor, having the equivalent network of Fig. 6.15b.

The incremental anode current, i_{a1} and i_{a2} , may be found by circuit analysis. (See Appendix A.)

$$(r_{k1} + R_K) i_1 - R_K i_2 = \frac{\mu_1}{\mu_1 + 1} \cdot v_{in1}, \quad (6.10)$$

$$-R_K i_1 + (R_K + r_{k2}) i_2 = \frac{-\mu_2}{\mu_2 + 1} \cdot v_{in2}. \quad (6.11)$$

Thus,

$$i_1 = i_{a1}$$

$$= \frac{(R_K + r_{k2}) [1/(\mu_1 + 1)] v_{in1} - [1/(\mu_2 + 1)] R_K \cdot v_{in2}}{r_{k1} \cdot r_{k2} + R_K(r_{k1} + r_{k2})},$$

$$i_2 = i_{a2}$$

$$= \frac{[\mu_1/(\mu_1 + 1)] R_K \cdot v_{in1} - (R_K + r_{k1}) [\mu_2/(\mu_2 + 1)] v_{in2}}{r_{k1} \cdot r_{k2} + R_K(r_{k1} + r_{k2})}.$$

It is apparent from Fig. 6.15b (and the above equations) that if $R_K \gg r_{k1}$ and r_{k2} ,

$i_{a1} \doteq -i_{a2}$ (as the signal current in R_K will be negligible).

Thus

$$i_{a1} = \frac{[\mu_1/(\mu_1 + 1)] v_{in1} - [\mu_2/(\mu_2 + 1)] v_{in2}}{r_{k1} + r_{k2}}.$$

Therefore

$$\begin{aligned} v_{a1} &= -i_{a1} R_{L1} \\ &= \frac{[-\mu_1/(\mu_1 + 1)] v_{in1} + [\mu_2/(\mu_2 + 1)] v_{in2}}{r_{k1} + r_{k2}} \cdot R_{L1}, \end{aligned}$$

and

$$v_{a2} = \frac{[\mu_1/(\mu_1 + 1)] v_{in1} - [\mu_2/(\mu_2 + 1)] v_{in2}}{r_{k1} + r_{k2}} \cdot R_{L2}.$$

If

$$\mu_1 = \mu_2 = \mu, \quad r_{a1} = r_{a2} = r_a \quad \text{and} \quad R_{L1} = R_{L2} = R_L,$$

$$v_{a1} = -v_{a2} = \frac{-\mu R_L (v_{in1} - v_{in2})}{2(r_a + R_L)}. \quad (6.12)$$

For

$$v_{in2} = 0, \quad \frac{v_{a1}}{v_{in}} = \frac{-\mu R_L}{2(r_a + R_L)}. \quad (6.13)$$

i.e. half the gain of a common cathode amplifier, and

$$\frac{v_{a2}}{v_{in}} = \frac{+\mu R_L}{2(r_a + R_L)}. \quad (6.14)$$

If

$$v_{in1} = v_{in2} \quad \text{there will be no output.}$$

For a differential input,

$$v_{in1} = -v_{in2}, \quad \frac{v_{a1}}{v_{in}} = \frac{-\mu R_L}{r_a + R_L}. \quad (6.15)$$

These relationships are shown in Fig. 6.16a.

For a differential output taken across the two anodes, the gain is $-\mu R_L/(r_a + R_L)$ for a single input.

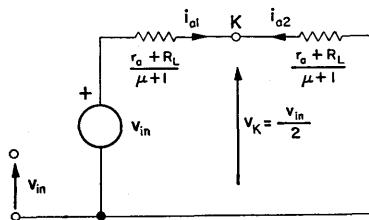
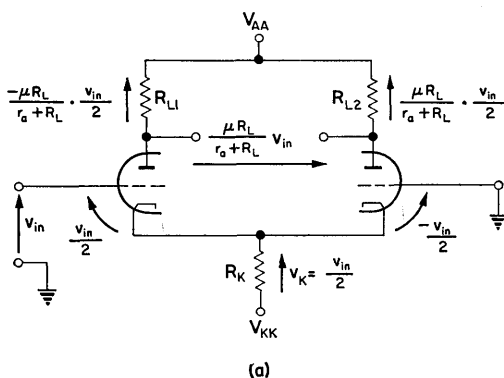


FIG. 6.16. (a) Distribution of signal voltages in cathode coupled amplifier. (b) The equivalent network is obtained for identical valves and a large value of R_K , with the input voltage at grid 1 and the second grid earthed.

Common Mode

If identical signals are applied to the two inputs of a longtail pair, any output voltage produced is the common mode output. Because of its symmetrical nature, when common mode signals are applied, the network can be considered as having one valve

made up of the two valves in parallel. Thus, from Fig. 6.17, Common mode gain

$$= \frac{-v_a}{v_{in}} = \frac{-\mu R_L}{(r_a/2) + (R_L/2) + (\mu + 1) R_K} = A_{cm}. \quad (6.16)$$

For large μ and where μR_K is very much larger than r_a and R_L ,

$$A_{cm} \div -R_L/2R_K.$$

If R_K is very large the approximation of Fig. 6.16b is valid and the common mode gain is zero.

In direct coupled amplifiers it is desirable to have a low common mode gain as the drift sources are largely common mode. A change in heater current affects both valves in the same manner, and if the common mode gain is low the output voltage developed as a result of this change will be small. For a single valve the drift voltage would be amplified by the full gain.

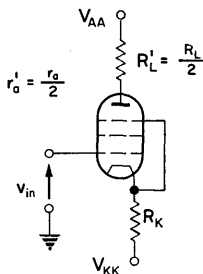


FIG. 6.17. Cathode coupled amplifier represented by a single valve for the determination of common mode effects.

Difference Amplifier

From eqn. (6.12) it is apparent that the longtail pair can be used as a difference amplifier:

$$v_{a1} = -v_{a2} = \frac{-\mu(v_{in1} - v_{in2})}{2(r_a + R_L)} \cdot R_L.$$

For this to be true the common mode gain must be very small.

Constant Current Tail.

From Fig. 6.15b, $i_{a1} + i_{a2} = i_k$. If i_k is held constant, the common mode gain is zero since the anode currents cannot increase. R_K cannot be increased since, for a given supply voltage,

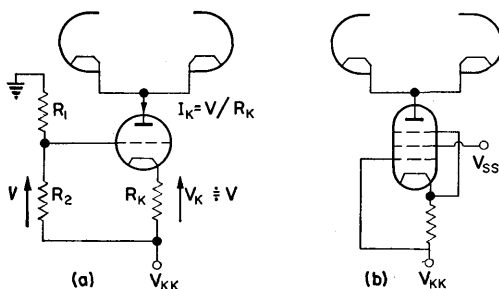


FIG. 6.18. The use of (a) a cathode follower and (b) a pentode, to provide constant cathode current. By this means the common mode gain is very much reduced.

it determines the standing currents. Devices that simulate a large resistance, largely independent of the standing current, are known as constant current devices.

(a) *Cathode follower.* By cathode follower action the voltage across R_K is maintained constant with anode voltage changes.

EXAMPLE. Referring to Fig. 6.18a, if $V_{KK} = -300$ V and a constant current of 5 mA is required, let V be 100 V. Suitable values of R_1 and R_2 are 680 k Ω and 330 k Ω respectively and $R_K = 100$ V/5 mA = 20 k Ω . From the characteristics of an ECC81, $V_A = 200$ V, $I_A = 5$ mA, and $V_{GK} = -2.2$ V.

(b) *Pentode.* From typical pentode characteristics it is apparent that, for a constant grid voltage, a pentode will pass constant current over a large range of anode voltage. The use of a pentode to serve this function is illustrated in Fig. 6.18b.

Design of Cathode Coupled Amplifiers

Because of the negative feedback inherent in the circuit, the design procedure is relatively straight forward.

DESIGN EXAMPLE 6.3 (Fig. 6.19)

Required, a cathode coupled amplifier using an ECC81 double triode, the standing anode voltage to be 100 V at each anode. The voltage supplies available are: $V_{AA} = 250$ V and $V_{KK} = -250$ V.

The operating conditions can be found independently of the valve, provided that it can supply the required current. The

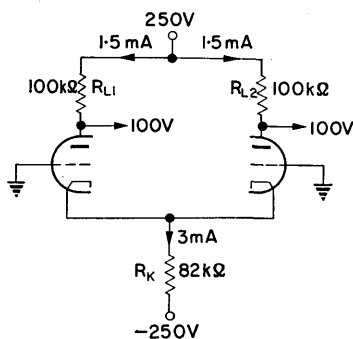


Fig. 6.19. Circuit arrangement of the symmetrical cathode coupled amplifier (or longtail pair) of Design Example 6.3.

cathode current is determined by R_K since the cathode is at approximately 0 V.

Let the two anode loads, R_L , be 100 k Ω .

$$I_{A1} = I_{A2} = (V_{AA} - V_A)/R_L = 150 \text{ V}/100 \text{ k}\Omega = 1.5 \text{ mA}.$$

$$I_K = I_{A1} + I_{A2} = 2 \times 1.5 \text{ mA} = 3 \text{ mA}.$$

$$R_K = V_{KK}/I_K = 250 \text{ V}/3 \text{ mA} = 83.3 \text{ k}\Omega.$$

Let it be 82 k Ω which is a preferred value.

Gain at anode 2. From the valve data, $\mu = 60$ and $r_a = 20 \text{ k}\Omega$. Using eqn. (6.14),

$$A = \frac{\mu R_L}{2(r_a + R_L)} = \frac{60 \times 100 \text{ k}\Omega}{2(20 \text{ k}\Omega + 100 \text{ k}\Omega)} = 25.$$

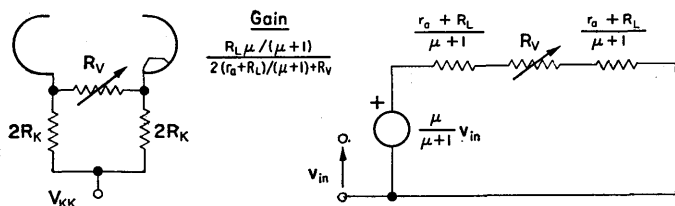


FIG. 6.20. Gain control for longtail pair with its equivalent circuit.

The cathode circuit of Fig. 6.20 enables the gain of the amplifier to be controlled, by reducing the coupling between the two halves.

Frequency response of the longtail pair. An equivalent circuit may be drawn to show that the amplifier of Fig. 6.14 has a single lag. This is done in Fig. 6.21.

$$\omega_1 = \frac{1}{C_s R}, \text{ where } R = \frac{R_L[r_a + (\mu + 1)r'_k]}{R_L + r_a + (\mu + 1)r'_k} \quad (6.17)$$

and

$$r_k = \frac{r_a + R_L}{(\mu + 1)}, \quad r'_k = \frac{R_K r_k}{R_K + r_k}.$$

Substituting values,

$$R = 58 \text{ k}\Omega \quad \text{and} \quad C_s = 3 \text{ pF}.$$

Thus,

$$T_1 = 0.174 \times 10^{-6} \text{ sec},$$

$$\omega_1 = 5.75 \times 10^6 \text{ r/s}, \quad \text{and} \quad f_1 = 920 \text{ kc/s}.$$

A convenient way of measuring the shunt capacitance C_s is to find f_1 , that is the 3 dB point, and then add shunt capacitance until the 3 dB point is at $\frac{1}{2}f_1$. The added capacitance is

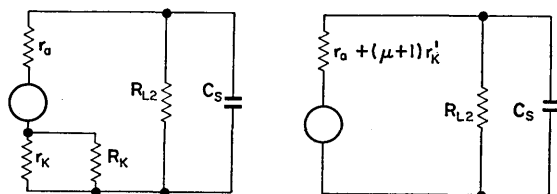


FIG. 6.21. Equivalent network of longtail pair for the evaluation of frequency response.

then equal to the actual shunt capacitance C_s together with the capacitance of the measuring probe.

Coupling network. If the longtail pair is to be used as a low drift input stage to the pentode-cathode follower amplifier it must be direct coupled to the pentode stage.

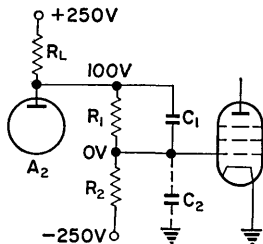


FIG. 6.22. Coupling between longtail pair and pentode stage.

Let the design value for V_{A2} be 100 V as in Fig. 6.22. $R_1 + R_2$ is made much greater than R_L so that the gain is not reduced by loading:

$$\frac{R_1}{R_2} = \frac{100 \text{ V}}{250 \text{ V}} = \frac{1 \text{ M}\Omega}{2.5 \text{ M}\Omega}.$$

To eliminate the time constant due to C_2 , make $C_1 R_1 = C_2 R_2$.

A method of finding a value for C_1 is to inject a rectangular waveform at the anode and adjust C_1 to give a flat top to the waveform at the grid, when displayed on an oscilloscope, as shown in Fig. 6.23.

EXAMPLE. The measured $C_1 = 150$ pF, and from consideration of the time constants,

$$C'_2 = 60 \text{ pF.}$$

But

$$C_2 = C'_2 - C_{\text{probe}}$$

$$= 49 \text{ pF for a probe capacitance of 11 pF.}$$

Therefore

$$C_1 = \frac{C_2 R_2}{R_1} = 120 \text{ pF (in the absence of the probe).}$$

C_1 and C_2 in series, increase the shunt capacitance by 35 pF, making it 38 pF. (See Fig. 6.24.)

$$\omega_1 = \frac{1}{C_s R} = \frac{10^9}{38 \times 56} = 4.7 \times 10^5 \text{ r/s.}$$

$$T_1 = C_s R = 2.13 \times 10^{-6} \text{ sec.}$$

$$f_1 = \omega_1 / 2\pi \doteq 75 \text{ kc/s.}$$

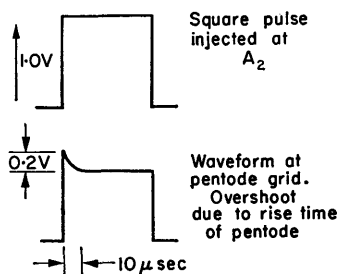


FIG. 6.23. For a square wave input injected at A_2 , C_1 is adjusted until the flat top of the lower waveform is obtained. The peak is due to Miller effect at the grid of the pentode.

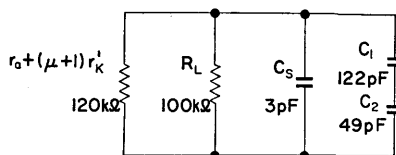


FIG. 6.24. Increase in effective shunt capacitance by the coupling network.

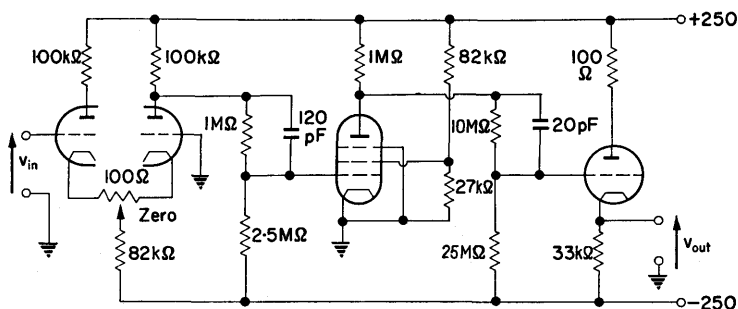


FIG. 6.25. The final circuit of a three-stage d.c. amplifier.

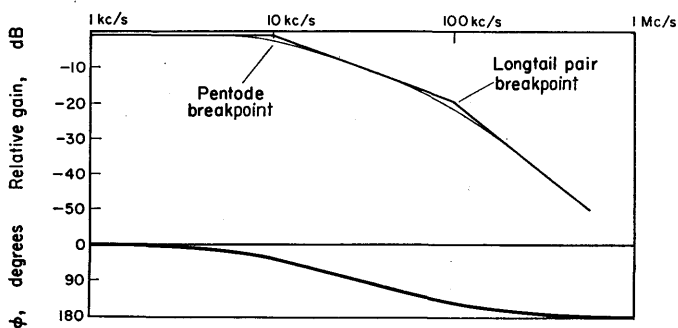


FIG. 6.26. Frequency response of the three-stage amplifier.

Gain from the grid of the longtail pair to the grid of the pentode $= 25 \times 5/7 = 18$. The completed circuit of a three-stage amplifier, consisting of a longtail pair input, pentode amplifier and cathode follower output is given in Fig. 6.25. Its frequency response is shown in Fig. 6.26.

6.5. DIRECT COUPLED TRANSISTOR AMPLIFIERS

Most transistors can be operated with very low collector voltages, of the same order as the voltage required to bias the base of a following stage. Referring to Fig. 6.27, if V_{CC} is much

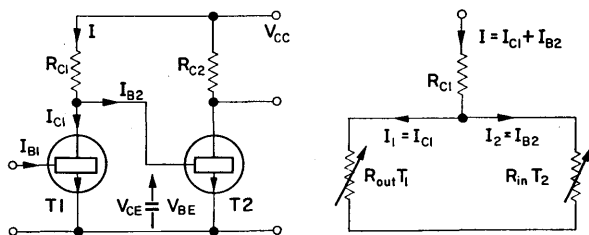


FIG. 6.27. Direct coupled transistor amplifier with network to represent the division of current between the collector of T_1 and the base of T_2 .

greater than V_{CE} , then the current $I = (V_{CC} - V_{CE})/R_C$ will be relatively constant. When T_1 is bottomed V_{BE} is very small and T_2 will be non-conducting.

As the base current of T_1 is reduced, V_{BE} rises and T_2 starts to conduct and as I_1 decreases, I_2 increases, until when T_1 is non-conducting, $I_2 = I$. The amplifier action may therefore be considered as the exchange of I between I_1 and I_2 due to the variations in T_1 output resistance R_{out} , and R_{in} , the input resistance of T_2 . R_{in} is the forward biased diode resistance of the base emitter junction and, due to its characteristic, the voltage V_{BE} across it is limited. Since R_C is made much greater than R_{in} , R_{in} is effectively the load resistance of T_1 .

EXAMPLE. Let $R_{C1} = 15 \text{ k}\Omega$, $R_{C2} = 3.9 \text{ k}\Omega$, $V_{CC} = 6 \text{ V}$ and $I = 0.4 \text{ mA}$. The load line may be constructed, as in Fig. 6.28a, in the following manner. The input characteristic OAB of T_2 is superimposed on the collector characteristic of T_1 , and then

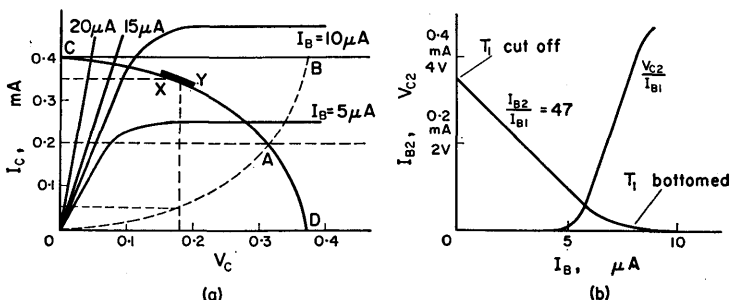


FIG. 6.28. (a) The load line of T_1 , of Fig. 6.27, is the curve CD of which the section XY is the region of operation. From this load line the current gain for the first stage can be derived.

Also shown (b) is the transfer characteristic V_{C2}/I_{B1} .

rotated about the axis drawn at $I_C = I/2$ (in this case 0.2 mA), giving the curve CAD . The line CB represents the constant current $I = 0.4 \text{ mA}$.

For any voltage V_C , a vertical line joining the voltage axis to the line CB is divided into two parts such that the part of the vertical above the curve CAD represents the current I_{B2} , the part below being I_{C1} . Thus, at $V_C = 0.18 \text{ V}$, $I_{C1} = 0.35 \text{ mA}$ and $I_{B2} = 0.05 \text{ mA}$.

It is apparent that the operating part of the load line must be near the bottomed end of the curve, since T_2 requires a base current that is very much less than $I (= 0.4 \text{ mA})$. In Fig. 6.28a the operating part is indicated by the line XY , and as the voltage V_{C1} changes by only a small amount R_{in} (the slope of XY) remains relatively constant. Generally, R_{in} will be much less than R_{C1} and efficient current transfer can be effected. At low values of I_{B2} the transfer resistance decreases as is indicated by the slope of the V_{C2}/I_{B1} curve of Fig. 6.28b, thus introducing a degree of

non-linearity. Where T_2 is required to provide a voltage output, this has the effect of limiting the effective output voltage swing.

The linearity of the stage can be improved by biasing the emitter and thus moving the load line to the right. Methods of

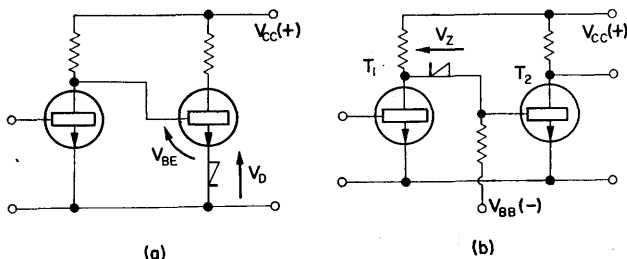


FIG. 6.29. A forward biased diode (a) provides emitter bias which has the effect of shifting the load line of Fig. 6.28 to the right, thus improving linearity. A similar effect is obtained in (b) by the use of a Zener diode.

obtaining such bias are given in Chapter 2. Alternatively, as shown in Fig. 6.29a, a forward biased junction diode will provide a constant voltage of approximately 0.2 V which is usually adequate.

Figure 6.29b shows how a Zener diode may be used to provide a low resistance voltage drop which does not unduly increase R_{IN} for T_2 . It may be replaced by a resistor through which a constant current is drawn.

An approximate small signal equivalent network is shown in Fig. 6.30.

Complementary Devices

With a *pnp* device, it is possible to use an *nnp* as the next stage as in Fig. 6.31. This arrangement is particularly advantageous when the required output is about zero volts.

T_2 will be cut off when T_1 is cut off. Care must be taken to ensure that the leakage current of T_1 does not produce so large a voltage across R_{C1} that T_2 is permanently bottomed. If V_{BE2}

is of the order of 200 mV, R_{in} for T_2 will be low, and if R_{C1} is much greater than R_{in} the leakage current I_{CEO} will flow into the base of T_2 . If T_1 has a large leakage current either R_{C1} must be kept small or a base resistor for T_2 should be used. Both these methods reduce the current gain.

DESIGN EXAMPLE 6.4

Required, a d.c. amplifier with voltage gain greater than 5000 and providing signal inversion. The output resistance should be less than 1 k Ω and the output voltage swing ± 5 V.

The circuit diagram will take the form shown in Fig. 6.32.

Supply voltages. The output voltage is required to be ± 5 V. Let the supply voltage be ± 8 V. The output transistor must have $V_{CE(max)}$ greater than 16 V.

Transistors. OC44 transistors are suitable for direct coupling. The minimum current gain of two OC44 transistors, $A_1 = 30 \times 30 = 900$.

As overall signal inversion is required, an odd number of common emitter stages is necessary, and an *nnpn* transistor with adequate collector voltage and power rating is required for the output stage. An OC139 would be suitable as it has a 20 V collector rating, 100 mV dissipation at 25°C and current gain greater than 20.

Output load resistor R_{C3} . A 1 k Ω resistor will ensure that the output resistance is less than 1 k Ω . With this load resistor the current gain $A_2 \div 20$.

$$P_{C(max)} = 8 \text{ V} \times 8 \text{ mA} = 64 \text{ mW}.$$

Gain. Voltage gain

$$A_v = A_i \cdot \frac{R_L}{R_{in}},$$

where

$$A_i = A_1 A_2 \div 900 \times 20 = 18 \times 10^3.$$

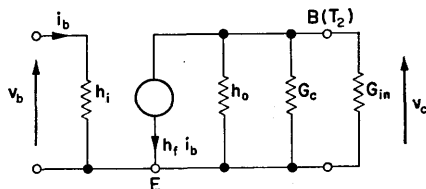


FIG. 6.30. Approximate small signal equivalent network for the evaluation of performance of a direct coupled transistor stage. Normally, G_{in} is much greater than h_o and G_c which may therefore be neglected.

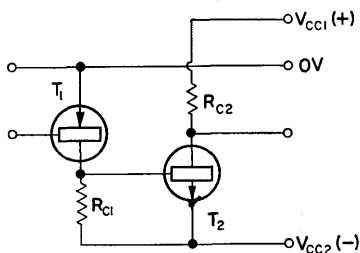


FIG. 6.31. Use of a complementary pair of transistors to provide an output voltage varying about zero.

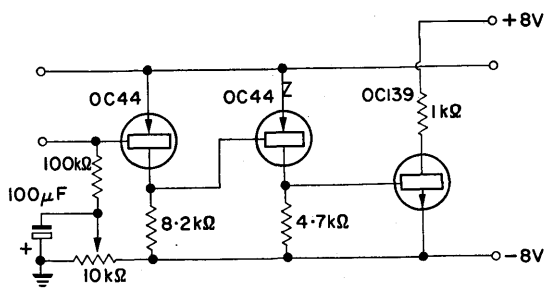


FIG. 6.32. Circuit diagram of Design Example 6.4. The 10kΩ potentiometer enables the output voltage to be set to zero.

If $R_L = 1 \text{ k}\Omega$ and $R_{in} = 2 \text{ k}\Omega$ (approximately equal to h_i), then $A_v = -9000$.

This figure ensures that a higher value of R_{in} , or reasonable loading of R_{C3} by an external load, will not cause the gain to fall below the specified value.

R_{C1} and R_{C2} . A suitable current for the direct coupled pair is 1 mA.

$$R_{C1} \doteq \frac{V_{CC}}{I_C} = 8.2 \text{ k}\Omega \quad (\text{a preferred value}).$$

As R_{C2} is a compromise between the current transfer and the voltage produced by leakage current, $4.7 \text{ k}\Omega$ is a suitable value.

Biasing of T_2 . To improve linearity, the emitter of T_2 is held at -0.6 V by a forward biased silicon diode, as shown in Fig. 6.29 a.

Zero control. A base current control is required for T_1 , to enable the output voltage to be set to zero.

6.6. DRIFT IN TRANSISTOR D.C. AMPLIFIERS

The input-referred current drift can be expressed as:

$$\begin{aligned}
 I_{di} &= \Delta I_{CBO} + \frac{\Delta V_{BE}}{R_S} + I_B \cdot \frac{\Delta h_F}{h_F} & (6.18) \\
 &= \text{leakage current} + \text{change in } V_{BE} \text{ required to maintain constant } I_C + \text{change in } h_F
 \end{aligned}$$

(a)
(b)
(c)

- (a) The leakage current is a function of temperature. Use of silicon transistors greatly reduces I_{CBO} .
- (b) As the temperature is increased, a decrease in V_{BE} is required to maintain a constant collector current. A change of 2–4 mV per $^{\circ}\text{C}$ is commonly quoted.

It is apparent that increasing the source resistance decreases the effect of ΔV_{BE} which becomes zero for a current fed transistor. If the amplifier has to operate from a low resistance source, ΔV_{BE} can be balanced out by using a compensating system. Often the most satisfactory method is a longtail pair or symmetrical emitter coupled system.

Both transistors should be kept at the same temperature, otherwise, even for identical units, drift would result.

Longtail Pair Analysis

The equivalent network is simplified by considering $R_{C1} = R_{C2} = R_C$. Assume identical transistors, $h_{re} = 0$ and $h_{oe} \ll 1/R_C$ as in Fig. 6.33b.

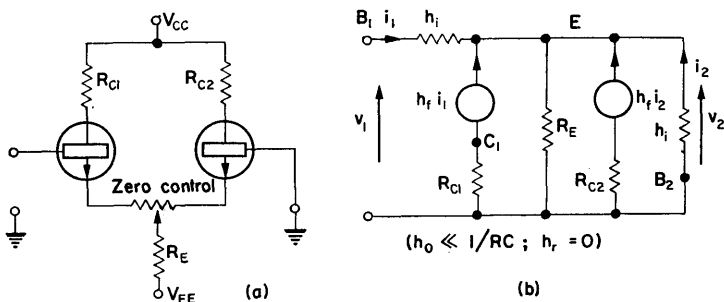


FIG. 6.33. Transistor longtail pair with equivalent network.

Writing the equations for the nodes B_1 and E ,

$$\frac{1}{h_i} \cdot v_1 - \frac{1}{h_i} \cdot v_2 = i_1, \quad (6.19)$$

$$-\frac{1}{h_i} v_1 + v_2 \left[\frac{2}{h_i} + \frac{1}{R_E} \right] = h_f i_1 + h_f i_2. \quad (6.20)$$

From eqn. (6.19),

$$i_1 = \frac{v_1 - v_2}{h_i} \quad \text{and} \quad i_2 = \frac{-v_2}{h_i},$$

and, substituting in eqn. (6.20),

$$-\frac{1}{h_i}(1+h_f)v_1 + \frac{1}{h_i}\left(2+2h_f+\frac{h_i}{R_E}\right)v_2 = 0.$$

Thus,

$$v_2 = \frac{1+h_f}{2(1+h_f)+(h_i/R_E)} \cdot v_1 \quad (6.21)$$

$$\div \frac{1}{2} v_1 \quad \text{as } h_i/R_E \ll 2(1+h_f).$$

The input current,

$$i_1 = \frac{v_1}{2h_i},$$

and

$$r_{in} = \frac{v_1}{i_1} = 2h_i.$$

The output voltage at C_1 ,

$$\begin{aligned} v_{C1} &= -h_f R_C i_1 = -\frac{h_f}{2h_i} R_C v_1 \\ &= \frac{-g_m R_C}{2} v_1. \end{aligned} \quad (6.22)$$

The T_2 base current,

$$i_2 = -\frac{v_2}{h_i} = -\frac{v_1}{2h_i}.$$

The output voltage at C_2 ,

$$\begin{aligned} v_{C2} &= h_f R_C i_2 = \frac{h_f}{2h_i} R_C v_1 \\ &= \frac{-g_m R_C}{2} v_1. \end{aligned} \quad (6.23)$$

Note that half the input voltage v_1 is across the input transistor and half across the emitter resistor R_E .

DESIGN EXAMPLE 6.5

Required, a longtail pair to provide a voltage gain greater than 40, using supply voltages of ± 5 V.

Transistors. Let the transistors be OC44 types with a g_m greater than 30 mA/V.

Collector resistor R_C .

$$A_v = 40 = \frac{g_m R_C}{2} \quad [\text{from eqn. (6.23)}].$$

Thus,

$$R_C = \frac{2A_v}{g_m} = \frac{2 \times 40}{30 \times 10^{-3}} = 2.7 \text{ k}\Omega.$$

Let the standing voltage of the collectors for zero input be -2.5 V. This allows a collector swing of ± 2.5 V about the quiescent value:

$$I_C = \frac{V_C - V_{CC}}{R_C} = \frac{2.5 \text{ V}}{2.7 \text{ k}\Omega} \doteq 1 \text{ mA}.$$

Emitter resistor R_E .

$$R_E \doteq \frac{V_{EE}}{2I_C} = \frac{5 \text{ V}}{2 \text{ mA}}.$$

Let it be 2.7 k Ω which is a preferred value.

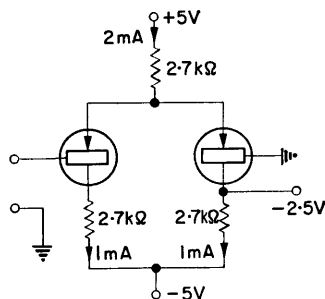


FIG. 6.34. Circuit diagram of Design Example 6.5.

Dissipation $P_{C(\max)}$. $2.5 \text{ V} \times 1 \text{ mA} = 2.5 \text{ mW}$ which is well within the transistor rating.

The final circuit details are as shown in Fig. 6.34.

A knowledge of feedback theory is necessary to permit the further study of transistor zero frequency amplifiers. This is dealt with in Chapter 7.

CHAPTER 7

Negative Feedback Amplifiers

7.1. INTRODUCTION

By feeding back a portion of the output to the input, the performance of an amplifier can be greatly changed. Figure 7.1 represents the flow of information in a feedback network. A can be a voltage or current amplifier.

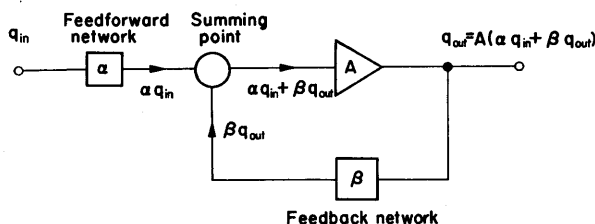


FIG. 7.1. Basic feedback structure. The input and output quantities, q_{in} and q_{out} , can be either voltages or currents depending on the type of amplifier. α and β are fractions of input and output signals appearing at the summing point.

Gain of Feedback Amplifier

As shown in Fig. 7.1, the output quantity

$$q_{out} = A(\alpha q_{in} + \beta q_{out}) \quad (7.1)$$

or

$$q_{out} = \frac{\alpha A}{1 - A\beta} q_{in}. \quad (7.2)$$

In most examples α and β will be made up of passive elements and have values of unity or less. The amplifier gain A will generally be much greater than unity.

Loop Gain

The product $A\beta$ is the loop gain. It is usually much greater than unity and has a negative sign if the feedback is to be negative. Either A or β can be negative. If A is negative the feedback amplifier will provide signal inversion.

For

$$-A\beta \gg 1,$$

$$q_{\text{out}} \doteq \frac{\alpha}{\beta} q_{\text{in}} \quad [\text{from eqn. (7.2)}]. \quad (7.3)$$

EXAMPLE. If $\alpha = 1$, $\beta = 0.2$ and $A = -50$, the loop gain is $A\beta = -10$, and

$$\begin{aligned} q_{\text{out}} &= \frac{-50}{1 + 10} q_{\text{in}} \quad [\text{from eqn. (7.2)}] \\ &= -4.5. \end{aligned}$$

If the approximation of eqn. (7.3) is used

$$q_{\text{out}} \doteq \frac{1}{0.2} q_{\text{in}} = -5.$$

If there is no signal inversion in the amplifier, that is $A = 50$, β must be negative for negative feedback.

Then

$$q_{\text{out}} = \frac{50}{1 + 10} q_{\text{in}} \quad [\text{from eqn. (7.2)}],$$

and the output signal is of the same sign as the input signal.

Stabilization of Gain

Equation (7.3) shows that if the loop gain is sufficiently large the over-all gain is independent of the A gain.

Let

$$\frac{q_{\text{out}}}{q_{\text{in}}} = G = \frac{\alpha A}{1 - A\beta},$$

then

$$\begin{aligned} \frac{dG}{dA} &= \frac{(1 - A\beta) + A\beta}{(1 - A\beta)^2} \cdot \alpha = \frac{\alpha A}{1 - A\beta} \cdot \frac{1}{1 - A\beta} \cdot \frac{1}{A} \\ &= \frac{G}{A(1 - A\beta)}. \end{aligned}$$

Thus

$$\frac{\Delta G}{G} = \frac{\Delta A}{A} \cdot \frac{1}{1 - A\beta}, \quad (7.4)$$

where $(1 - A\beta) > 1$ for negative feedback, and $\Delta A/A$ and $\Delta G/G$ are fractional changes in A amplifier gain and feedback amplifier gain respectively.

The change in A gain is reduced by the term $1/(1 - A\beta)$ for the feedback amplifier. Since, in general, non-linear distortion arises from changes in gain with signal amplitude, such distortion is reduced by the same factor, when negative feedback is applied.

Extension of Bandwidth

The expressions of the previous paragraph show that changes in gain due to variation in frequency are reduced by the factor $1/(1 - A\beta)$. Thus the bandwidth of the A amplifier is extended by this factor, as $1 - A\beta$ is greater than unity for negative feedback.

Application of Negative Feedback

Basic feedback connections are illustrated in Fig. 7.2.

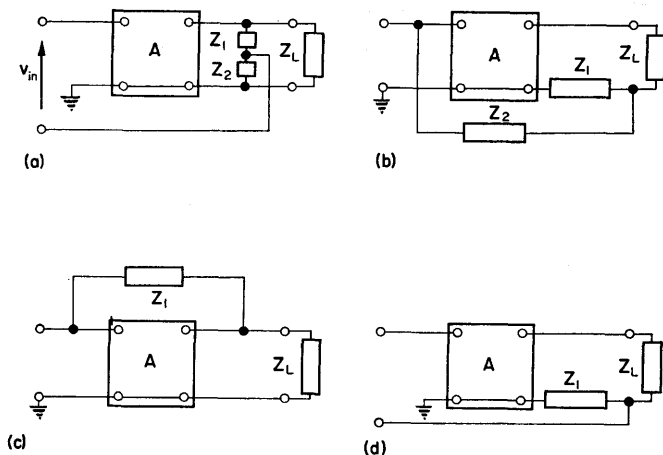


FIG. 7.2. Application of negative feedback. Voltage feedback is eliminated by short circuiting the output terminals. Current feedback is eliminated by open circuiting the output.

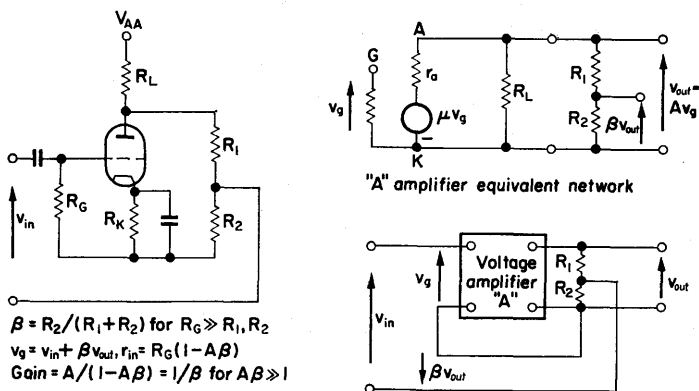


FIG. 7.3. Shunt-series feedback amplifier.

7.2. EXAMPLES OF NEGATIVE FEEDBACK AMPLIFIERS

(a) *Voltage Amplifier*

A voltage amplifier with a fraction of the output voltage fed back in series with the input voltage is characterized by high input impedance and low output impedance together with a defined voltage gain. (See Fig. 7.3.)

Input impedance.

$$z_{in} = \frac{v_{in}}{i_{in}}.$$

$$i_{in} = \frac{v_g}{z_g} = \frac{v_{in} + \beta v_{out}}{z_g} \quad (\text{where } z_g \text{ is the input impedance of the } A \text{ amplifier})$$

$$= \frac{v_{in} + [A\beta v_{in}/(1 - A\beta)]}{z_g} \quad \left(\text{substituting } v_{out} = \frac{A}{1 - A\beta} v_{in} \right)$$

$$= \frac{[v_{in}/(1 - A\beta)]}{z_g},$$

or

$$z_{in} = (1 - A\beta) z_g. \quad (7.5)$$

The input impedance of the A amplifier is increased by the factor $(1 - A\beta)$ for series input.

In general, when the feedback signal is applied in series with the input signal the input impedance is increased.

Output impedance.

$$z_{out} = \frac{v_{out}}{i_{out}}.$$

To determine the output impedance let v_{in} be zero, then without feedback ($\beta = 0$), the output impedance is z_{oA} which is R_L and $(R_1 + R_2)$ in parallel.

Referring to Fig. 7.4, let an alternating voltage v_{out} be placed across the output terminals. Then, if β is not zero,

$$i_{out} = \frac{v_{out} - A\beta v_{out}}{z_{oA}},$$

or

$$z_{out} = \frac{z_{oA}}{1 - A\beta}. \quad (7.6)$$

The output resistance of the A amplifier is reduced by the factor $1/(1 - A\beta)$.

In general, when the feedback signal is derived from a parallel network the output impedance is decreased by negative feed-

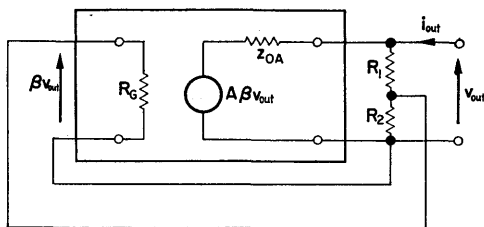


FIG. 7.4. Measurement of output impedance.

back. The test for parallel (or voltage) feedback is to disconnect the load and observe that the feedback loop is still operative.

Cathode follower. This is an example of a shunt-series amplifier, and is shown in Fig. 7.5.

The gain,

$$A = \frac{v_{out}}{v_{gk}} = \frac{\mu R_K}{r_a + R_K}.$$

There is no signal inversion as the output signal is obtained from between the cathode and common terminal.

The output is fed back in series with the input signal without attenuation. Thus, $\beta = -1$ and $\alpha = 1$.

$$\begin{aligned}
 G &= \frac{\alpha A}{1 - A\beta} \quad [\text{from eqn. (7.2)}] \\
 &= \frac{[\mu R_K / (r_a + R_K)]}{1 + [\mu R_K / (r_a + R_K)]} \\
 &= \frac{\mu R_K}{r_a + R_K(\mu + 1)} \\
 &= \frac{[\mu / (\mu + 1)] R_K}{R_K + [r_a / (\mu + 1)]}
 \end{aligned}$$

This can be compared with § 1.9.

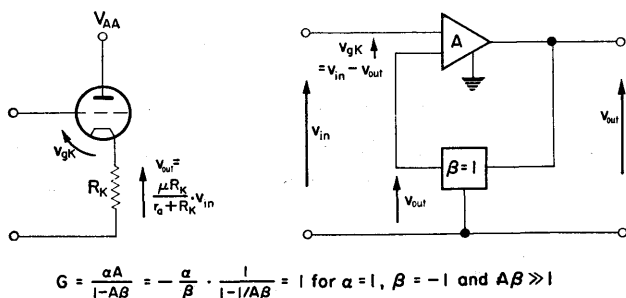


FIG. 7.5. Cathode follower as a feedback amplifier.

(b) Current Amplifier

A current amplifier with a fraction of the output current fed back in parallel with the input current has the property of low input impedance and high output impedance, together with a defined current gain. The outline of such an amplifier is shown in Fig. 7.6.

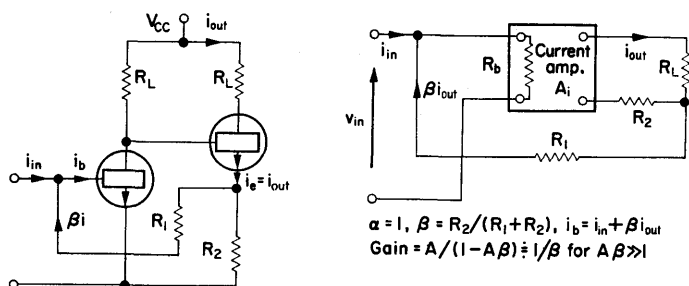


FIG. 7.6. Series-shunt feedback amplifier. There is no inversion, in the amplifier but β is negative. The emitter current, $i_{out}/h_{fb} \doteq i_{out}$ since h_{fb} is very nearly unity.

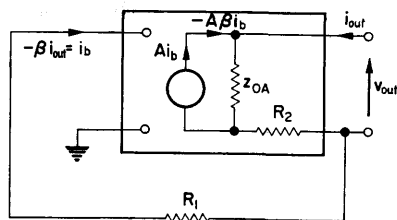


FIG. 7.7. Measurement of output impedance. The current i_{out} is injected and i_m is zero.

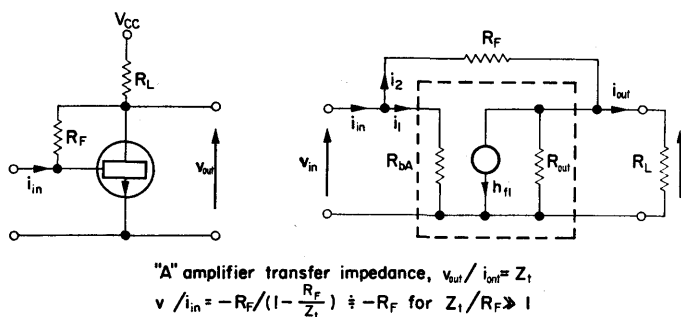


FIG. 7.8. Shunt-shunt feedback.

Input impedance.

$$z_{in} = \frac{v_{in}}{i_{in}}.$$

$$v_{in} = i_b R_b \text{ (from Fig. 7.6)}$$

$$= (i_{in} + \beta i_{out}) R_b$$

$$= i_{in} \left(1 + \frac{A\beta}{1 - A\beta} \right) R_b,$$

as

$$i_{out} = \frac{A}{1 - A\beta} i_{in} \text{ from eqn. (7.2),}$$

or

$$\frac{v_{in}}{i_{in}} = \frac{R_b}{1 - A\beta}.$$

Thus

$$z_{in} = \frac{R_b}{1 - A\beta}. \quad (7.7)$$

The input impedance of the A amplifier is decreased by the factor $1/(1 - A\beta)$ for parallel input.

Output impedance. If current i_{out} is injected and the input signal is zero, the output impedance,

$$z_{out} = \frac{v_{out}}{i_{out}} \text{ (see Fig. 7.7).}$$

If the feedback is zero ($R_2 = 0$) the output resistance is z_{oA} . If β is not zero,

$$i_{out} - A\beta i_{out} = \frac{v_{out} - i_{out} R_2}{z_{oA}}.$$

Thus

$$z_{out} = (1 - A\beta) z_{oA} + R_2. \quad (7.8)$$

For negative feedback $(1 - A\beta)$ is greater than unity and the output resistance is thus increased by series (or current) feedback.

(c) *Shunt-shunt Feedback*

A signal proportional to the output voltage, fed back in parallel with the input signal, produces low input and output impedance together with a defined transfer impedance. Such a feedback arrangement is illustrated in Fig. 7.8.

$$v_{\text{out}} = Z_t i_1,$$

where Z_t is the current gain times the shunt resistance

$$\doteq \frac{-h_f}{G_o + G_L},$$

$$v_{\text{out}} = Z_t(i_{\text{in}} - i_2),$$

$$= Z_t \left(i_{\text{in}} - \frac{v_1 - v_{\text{out}}}{R_F} \right).$$

Therefore

$$\left(1 - \frac{Z_t}{R_F} \right) v_{\text{out}} = Z_t \left(i_{\text{in}} - \frac{i_1 R_b}{R_F} \right) \quad (\text{as } v_1 = i_1 R_b).$$

Substituting $i_1 = v_{\text{out}}/Z_t$ and rearranging,

$$\left(1 - \frac{Z_t - R_b}{R_F} \right) v_{\text{out}} = Z_t i_{\text{in}}.$$

Thus,

$$v_{\text{out}} = \frac{Z_t}{1 - [(Z_t - R_b)/R_F]} i_{\text{in}} \quad (7.9)$$

$$= \frac{-R_F}{1 - [(R_F + R_b)/Z_t]} i_{\text{in}}$$

$$\doteq \frac{-R_F}{1 - (R_F/Z_t)} i_{\text{in}} \quad (R_b \ll R_F), \quad (7.10)$$

and

$$\frac{v_{\text{out}}}{i_{\text{in}}} \doteq -R_F \quad (\text{for } Z_t \gg R_F). \quad (7.11)$$

Input impedance, Z_{in} .

$$\begin{aligned} i_{in} &= i_1 + i_2 \\ &= \frac{v_{in}}{R_b} + \frac{v_{in} - v_{out}}{R_F} \\ &= \frac{v_{in}}{R_b} + \frac{1 - (Z_t i_1 / v_{in})}{R_F} \\ &= v_{in} \left[\frac{1}{R_b} + \frac{1 - (Z_t / R_b)}{R_F} \right]. \end{aligned}$$

Therefore

$$\begin{aligned} \frac{v_{in}}{i_{in}} &= \frac{R_b R_F}{R_F + R_b - Z_t} \\ Z_{in} &= \frac{R_b R_F / (R_F + R_b)}{1 - [Z_t / (R_F + R_b)]}. \end{aligned}$$

For a transistor amplifier $R_b \ll R_F$, and

$$Z_{in} = \frac{R_b}{1 - (Z_t / R_F)}. \quad (7.12)$$

EXAMPLE.

$h_f = 49$, $R_{out} = 20 \text{ k}\Omega$, $R_L = 5 \text{ k}\Omega$, $R_b = 2 \text{ k}\Omega$, $R_F = 50 \text{ k}\Omega$.

A amplifier transfer impedance:

$$Z_t = \frac{-h_f}{G_o + G_L} = \frac{-49}{250 \times 10^{-6}} = -196 \text{ k}\Omega,$$

where the negative sign indicates signal inversion. Substituting values in eqn. (7.9),

$$\begin{aligned} v_o &= \frac{-196 \text{ k}\Omega}{1 - [(-196 \text{ k}\Omega - 2 \text{ k}\Omega) / 50 \text{ k}\Omega]} \cdot i_{in} \\ &\doteq \frac{200 \text{ k}\Omega}{1 + 4} \cdot i_{in} \left(\text{as } \frac{Z_t}{R_F} \doteq 4 \right) \\ &\doteq -40 \text{ k}\Omega \cdot i_{in}. \end{aligned}$$

Thus, in the presence of feedback, the transfer impedance is reduced.

Input resistance, $\frac{v_{in}}{i_{in}} \div \frac{2 \text{ k}\Omega}{1 + 4} = 400 \Omega$ [from eqn. (7.12)]. As shown in (a), parallel feedback provides a low output impedance.

(d) Series-series Amplifier

A voltage proportional to the output current, fed back in series with the input, produces a high input impedance, high output impedance together with a defined transfer conductance. Two examples of this form of feedback are illustrated in Fig. 7.9.

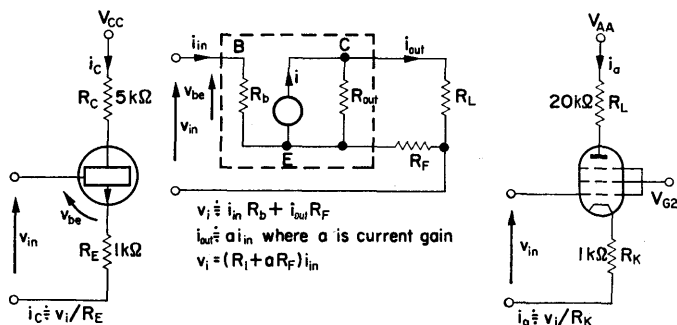


FIG. 7.9. Examples of series-series amplifier.

For the current amplifier,

$$\begin{aligned}
 i_{out} &= A i_{in} \\
 &= \frac{A v_{in}}{R_b + A R_F} \quad (\text{from Fig. 7.9}) \\
 &\div \frac{v_{in}}{R_F} \quad (\text{for } R_b \ll A R_F). \\
 R_{in} &= R_b + A R_F \\
 &\div A R_F \quad \text{for } R_b \ll A R_F.
 \end{aligned} \tag{7.13}$$

As shown in (b), series output feedback provides a high output impedance.

EXAMPLES.

1. Transistor with emitter resistor. By the above reasoning

$$i_c = \frac{v_{in}}{R_E} = \frac{v_{in}}{10^3} \quad \text{in the example of Fig. 7.9.}$$

$$v_c = -AR_C i_{in}, \quad \text{where the current gain, } A = \frac{h_{fe} G_C}{G_E + G_C},$$

$$= -\frac{AR_C}{r_{in}} v_{in} \quad \text{where } r_{in} \doteq AR_E.$$

Thus voltage gain,

$$\frac{v_c}{v_{in}} = -\frac{R_C}{R_E} \doteq -\frac{5 \text{ k}\Omega}{1 \text{ k}\Omega}$$

in this example.

2. For the pentode of Fig. 7.9,

$$i_a = \frac{v_{in}}{r_a + R_L + (\mu + 1) R_K}$$

$$\doteq \frac{g_m}{1 + g_m R_K} \cdot v_{in} \quad (\text{for } r_a \gg R_L)$$

$$\doteq \frac{v_{in}}{R_K} \quad (\text{for } g_m R_K \gg 1).$$

Thus, voltage gain,

$$\frac{-i_a R_L}{v_{in}} \doteq \frac{-R_L}{R_K}.$$

If the pentode is operated with

$$g_m = 10 \text{ mA/V}, \quad r_a = 1 \text{ M}\Omega,$$

$$\text{the transfer conductance} = \frac{10^{-3}}{1 + (10 \times 10^{-3} \times 10^{-3})}$$

$$\doteq \frac{1}{R_K} = 1 \text{ mA/V.}$$

$$\text{Voltage gain} \doteq -\frac{R_L}{R_K} \doteq -20.$$

(e) Computing Amplifier

This is a form of shunt-shunt feedback, and is shown in Fig. 7.10. From (c), $v_{\text{out}} = -Z_F i_{\text{in}}$ (where Z_F is the feedback impedor), provided the A amplifier transfer impedance $Z_t \gg Z_F$.

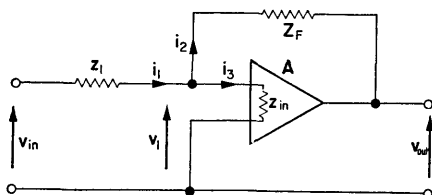


FIG. 7.10. Computing amplifier. For a voltage operated amplifier Z_{in} will be very large, while for a current amplifier Z_{in} will be small.

With an external input impedor Z_1 , because of the low input impedance to the amplifier with feedback, an input current $i_{\text{in}} = v_{\text{in}}/Z_1$ will flow. Thus,

$$v_{\text{out}} = -\frac{Z_F}{Z_1} \cdot v_{\text{in}}. \quad (7.14)$$

If A is a voltage amplifier, eqn. (7.2) can be used and i_3 neglected. Thus,

$$v_{\text{out}} = \frac{\alpha A}{1 - A\beta} v_{\text{in}}.$$

In Fig. 7.11, αv_{in} is the voltage at the summing point of the amplifier when the output is short circuited:

$$\alpha = \frac{Z_F}{Z_1 + Z_F}. \quad (7.15)$$

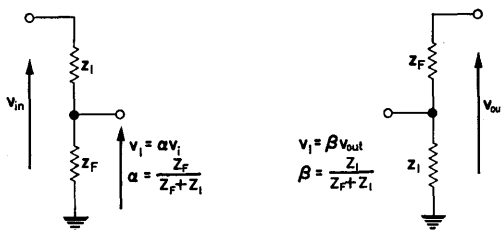


FIG. 7.11. Determination of α and β .

βv_o is the voltage produced at the summing point of the amplifier by the output, when the input is short circuited:

$$\beta = \frac{Z_1}{Z_1 + Z_F}. \quad (7.16)$$

Thus, substituting for α and β ,

$$\begin{aligned} v_{out} &= \frac{[Z_F/(Z_1 + Z_F)] A}{1 - [Z_1/(Z_1 + Z_F)] A} v_{in} \\ &= -\frac{Z_F}{Z_1} \cdot \frac{1}{1 - (1/A\beta)} \cdot v_{in} \\ &\left(\text{where } A\beta = A \cdot \frac{Z_1}{Z_1 + Z_F} \right) \end{aligned} \quad (7.17)$$

$$= -\frac{Z_F}{Z_1} v_{in} \quad \text{for } A\beta \gg 1. \quad (7.18)$$

If i_3 cannot be neglected (as in the case of a transistor amplifier), $i_1 = i_2 + i_3$.

Therefore

$$\frac{v_{in} - v_1}{Z_1} = v_1 \left(\frac{1}{z_{in}} + \frac{1}{Z_F} \right) - \frac{v_{out}}{Z_F},$$

or

$$Y_1 v_{in} = \frac{v_{out}}{A} (y_{in} + Y_F + Y_1 - AY_F),$$

and

$$\begin{aligned} v_{out} &= \frac{Y_1}{Y_F} \left[\frac{Av_{in}}{(1 - A) + (Y_1 + y_{in})/Y_F} \right] \\ &= -\frac{Y_1}{Y_F} \left[\frac{v_{in}}{1 - (Y_1 + y_{in} + Y_F)/AY_F} \right]. \quad (7.19) \end{aligned}$$

This is the same form as eqn. (7.17) but with

$$\beta = \frac{Y_F}{Y_1 + y_{in} + Y_F} = \frac{Z_1 z_{in}/(Z_1 + z_{in})}{(Z_1 z_{in}/(Z_1 + z_{in})) + Z_F}.$$

It is apparent that β is formed by Z_1 and z_{in} in parallel, in series with feedback impedance Z_F . With valve amplifiers z_{in} is, in many cases, sufficiently large to be ignored and then the loop gain expression is

$$A\beta = \frac{AZ_1}{Z_1 + Z_F}$$

as in eqn. (7.17).

EXAMPLE. Let $A = -100$, $Z_1 = 100 \text{ k}\Omega$, $Z_F = 1 \text{ M}\Omega$. Then

$$\beta = \frac{100 \text{ k}\Omega}{100 \text{ k}\Omega + 1 \text{ M}\Omega} = \frac{1}{11},$$

and

$$A\beta = -9.1.$$

$$\begin{aligned} \frac{v_{out}}{v_{in}} = G &= -\frac{Z_F}{Z_1} \frac{1}{1 - (1/A\beta)} = -10 \frac{1}{1 + (1/9.1)} \\ &= -10 \frac{1}{1.11} = -9. \end{aligned}$$

Thus, the percentage error involved in expressing $v_{out}/v_{in} = -Z_F/Z_1$ is approximately $100/A\beta\%$. In this example it is 11%.

Low input impedance amplifier. The conventional transistor amplifier has a low input impedance in contrast to the high input impedance of the valve amplifier. (There are semiconductor devices such as field effect transistors with high input impedance.)

Considering eqn. (7.19),

$$\begin{aligned} v_{out} &= -\frac{Y_1}{Y_F} \frac{v_{in}}{1 - [(Y_1 + y_{in} + Y_F)/A_v Y_F]} \\ &= -\frac{Y_1}{Y_F} \frac{v_{in}}{1 - \{1 + [(Y_1 + Y_F)/y_{in}]/(A_v Y_F/y_{in})\}} \end{aligned}$$

The voltage gain of an amplifier can be expressed as

$$A_v = \frac{A_i R_L}{z_{in}} = \frac{A_i y_{in}}{Y_L} = Z_t y_{in},$$

where Y_L is the effective load admittance and Z_t is the transfer impedance of the amplifier. Thus,

$$v_{out} = -\frac{Y_1}{Y_F} \frac{v_{in}}{1 - \{1 + [(Y_1 + Y_F)/y_{in}]/Z_t Y_F\}} \quad (7.20)$$

$$= -\frac{Z_F}{Z_1} \left[\frac{v_{in}}{1 - (Z_F/Z_t)} \right] \quad (\text{if } y_{in} \gg Y_1 + Y_F). \quad (7.21)$$

EXAMPLE. Let $Z_t = -1 \text{ M}\Omega$. The negative sign indicates that a current flowing into the amplifier causes a negative output voltage. For this transfer impedance, an input current of $1 \mu\text{A}$ produces an output voltage of -1 V .

If

$$R_F = 100 \text{ k}\Omega, \quad r_{in} = 1 \text{ k}\Omega \quad \text{and} \quad R_1 = 10 \text{ k}\Omega,$$

using eqn. (7.21),

$$G = \frac{v_{out}}{v_{in}} = -10 \frac{1}{1 + 0.11} = 9.01.$$

The error in expressing the gain as $-Z_F/Z_1$ is approximately $(Z_t/Z_F) \cdot 100\%$.

For high accuracy it is required that $Z_t \gg Z_F$ and $r_{in} \ll Z_1 Z_F / (Z_1 + Z_F)$.

Because the loop gain of the low input impedance amplifier is largely independent of Z_1 , this type of amplifier has advantages over the high input impedance amplifier where the loop

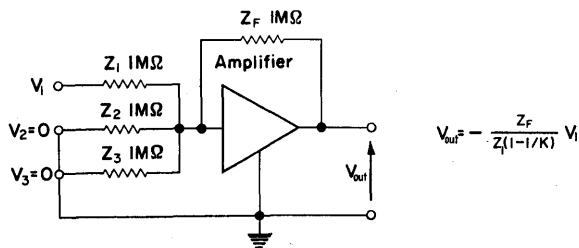
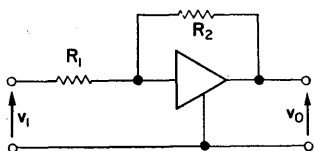


FIG. 7.12. Effect of input resistors on computing amplifier performance. For a high input impedance amplifier, having voltage gain A , $K = A[Y_F / (Y_F + \Sigma Y_1)]$. The effect of Z_2 and Z_3 is to reduce the loop gain from $A/2$ to $A/4$. For a low input impedance amplifier, $K = Z_T Y_F$, which is independent of ΣY_1 , the parallel combination of the input impedors.

gain is $AZ_1/(Z_1 + Z_2)$. In the latter case, if the amplifier is to be used to provide voltage gain, the loop gain, and consequently the accuracy of computation, are reduced together with the bandwidth. In the former case, for a given Z_F , the bandwidth and accuracy of computation are ideally constant. (See Fig. 7.12.)

Some simple operations using computing amplifiers are shown in Fig. 7.13.

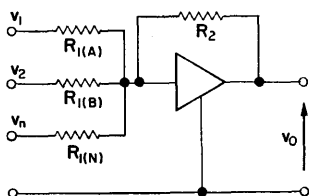
For further applications, reference should be made to standard works on analogue computing. Figure 7.14 illustrates the input and output waveforms of a computing amplifier when used as an integrator.



(a) Single inverter

$$\frac{v_o}{v_i} = -\frac{R_2}{R_1} \quad \left\{ \text{For } A\beta \gg 1 \right\}$$

$$v_o = -v_i \text{ for } R_2 = R_1$$

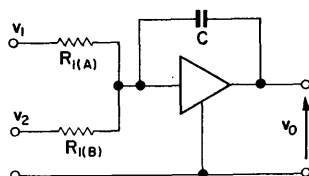


(b) Adder

$$v_o = -R_2 \left[\frac{v_1}{R_{i(A)}} + \frac{v_2}{R_{i(B)}} + \dots + \frac{v_n}{R_{i(N)}} \right]$$

$$= -(v_1 + v_2 + \dots + v_n)$$

For $R_2 = R_{i(A)} = R_{i(B)} = \dots = R_{i(N)}$



(c) Integrator

$$v_o(s) = \frac{v_1}{sCR_{i(A)}} - \frac{v_2}{sCR_{i(B)}}$$

$$v_o(t) = -\frac{1}{CR_{i(A)}} \int_0^t v_1 dt + \frac{1}{CR_{i(B)}} \int_0^t v_2 dt$$

FIG. 7.13. Applications of computing amplifiers. The input to the A amplifier is frequently referred to as the summing point.

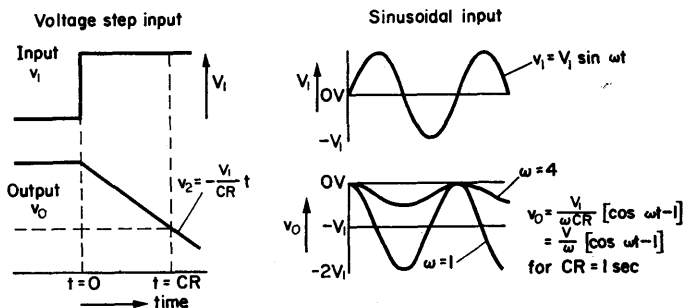


FIG. 7.14. Response of an integrator to a step function and sine wave input.

7.3. APPLICATION OF NEGATIVE FEEDBACK TO STABILIZE TRANSISTOR OPERATION

Because of the wide spread of transistor parameters, it is necessary in some applications to use local feedback loops within the over-all feedback system.

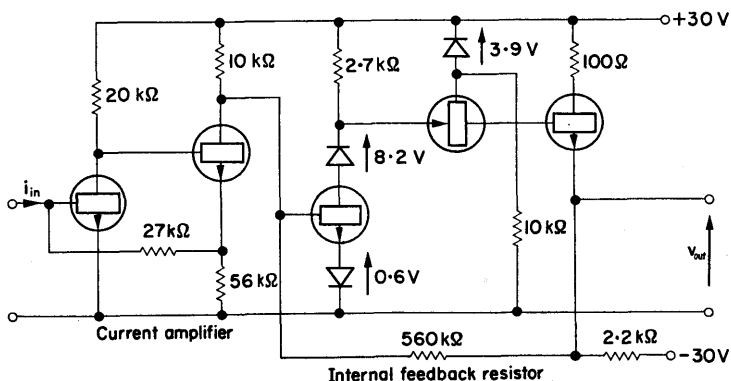


FIG. 7.15. Amplifier with transfer resistance of $-250 \text{ M}\Omega$. The common base stage gives high voltage gain and allows the output voltage to swing positively and negatively. Stabilizing elements are not included.

EXAMPLE. Computing amplifier with defined internal transfer impedance of $-250 \text{ M}\Omega$.

The amplifier consists of a current amplifier (type b in Fig. 7.2) with a defined gain of 500, and a shunt-shunt stage (type c) with $0.5 \text{ M}\Omega$ feedback resistor.

The over-all transfer impedance is

$$Z_t = 500 \times -0.5 \text{ M}\Omega = -250 \text{ M}\Omega.$$

When used in a computing system with a feedback resistor $R_F = 100 \text{ k}\Omega$,

$$v_{\text{out}} = \frac{-R_F}{1 - R_F/Z_t} \cdot i_{\text{in}} = -R_F i_{\text{in}}$$

to an accuracy of 0.025%. Such an amplifier is illustrated in Fig. 7.15.

Apart from standardizing the gain, the local feedback has the following features.

- (a) The shunt feedback across the input stage gives a low input impedance which is desirable for computing purposes. (See § 7.2.)
- (b) Similarly, the input impedance to the second feedback loop is low. This allows efficient current transfer from the first loop to the second.
- (c) The voltage or shunt feedback from the output reduces the amplifier output impedance below that of the emitter follower. In computing systems a low output impedance is necessary.

7.4. STABILITY OF AMPLIFIERS WITH NEGATIVE FEEDBACK

Although at signal frequencies an amplifier may be operating with negative feedback applied, at frequencies above the operating range (and below the operating range in the case of a capacitor or transformer coupled amplifier) the feedback may become positive due to phase change in the loop gain.

The gain with feedback, $G = \alpha A / (1 - A\beta)$ [from eqn. (7.2)], where the loop gain $A\beta$ is negative for negative feedback. If $A\beta$ becomes positive and equal to or greater than unity, G will tend to infinity and the amplifier will oscillate. (See Chapter 9.)

Thus, a condition for stability is that the loop gain (a vector quantity) should always be less than unity, or $A\beta < 1$. ($A\beta$ is a phasor having magnitude $|A\beta|$ and angle $\angle \theta$ as in Fig. 7.16.)

Consider an amplifier with gain A_0 of -1000 and a feedback fraction β equal to 0.01 . The loop gain, $A_0\beta = -10$. If β is independent of frequency, and the amplifier is a zero frequency type, the loop gain locus follows the A locus as shown in Fig. 7.16. The amplifier shown is stable, since $(1 - A\beta)$ is always greater than zero as the phasor moves around the locus.

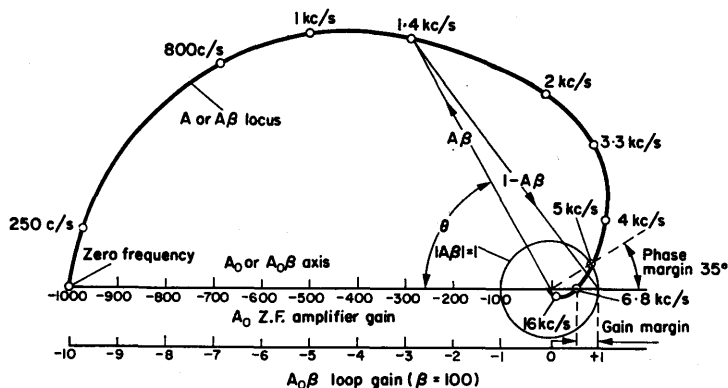


Fig. 7.16. Polar plot of a three-stage z.f. amplifier modified to show the loop gain locus. The β network is independent of frequency. The amplifier is stable as $A\beta$ is always less than unity, since it never encloses or passes through the point $+1$ on the $A_0\beta$ axis.

Phase and Gain Margin

An indication of the stability of an amplifier is the phase angle between the input signal and the $A\beta$ phasor at the frequency where $A\beta = 1$. This is the *phase margin*. A typical value is of the order of 45° to ensure stability under all conditions. If the locus passes through the point $+1$ on the $A_0\beta$ axis, the phase margin is zero and the amplifier will oscillate at the frequency indicated on the locus. If the locus encloses the point $+1$ on the $A_0\beta$ axis, the amplifier will in general be unstable and will oscillate at approximately the frequency at which the $A\beta$ locus intersects the $A_0\beta$ axis (i.e. the frequency at which the angle of $A\beta$ is 180° with respect to $A_0\beta$).

Alternatively, the degree of stability can be specified by the *gain margin*. This is $1 - A\beta$ when the phase shift of $A\beta$ is 180° . The gain margin will be zero if the locus passes through $+1$ on the $A_0\beta$ axis, or negative if the $A\beta$ locus encircles the point. In Fig. 7.16, the loop gain $|A\beta|$ is 0.55 and $1 - A\beta$ is 0.45 when

$\theta = 180^\circ$. This is the gain margin and is positive for a stable system.

Gain margin can be given in logarithmic form as G.M. (dB) = $20 \log_{10} \left| \frac{1}{A\beta(180^\circ)} \right|$ where $A\beta(180^\circ)$ is the loop gain at the frequency at which the $A\beta$ locus intersects the $A_0\beta$ axis. In the above example the gain margin is +5 dB. For an unstable system the gain margin will be zero or negative.

Closed Loop Performance

$$G = \frac{\alpha A}{(1 - A\beta)} = -91$$

at zero frequency.

The amplitude and phase response of the above amplifier can be obtained from consideration of the $A\beta$ locus. If $\alpha = 1$, G is the ratio of the phasors A and $1 - A\beta$.

Figure 7.17 is constructed by measuring the magnitude of A and $1 - A\beta$ at various frequencies and determining $G = \frac{A}{1 - A\beta}$.

Bandwidth Extension

The bandwidth is increased by approximately $1 - A_0\beta$, but there is an increase in gain above G_0 as the locus passes near the point +1 on the $A_0\beta$ axis. If the loop gain $A\beta$ is increased, the peak is increased and will go off to infinity when the locus passes through +1 on the axis.

Logarithmic Representation

This is a very useful approach for feedback amplifier design as the frequency response of the A amplifier can be readily obtained from straight line asymptote approximation (§ 3.3). The ordinate is calibrated in relative gain. A horizontal line can be drawn corresponding to the loop gain. In Fig. 7.18, $A_0\beta = 10$ (or 20 dB), and the gain margin and phase margin can be read

off immediately. If the loop gain is increased to 40 dB, the unity loop gain line will be at -40 dB, giving a negative phase margin of 60° and a negative gain margin of 15 dB. The system will oscillate at a frequency of approximately 7 kc/s.

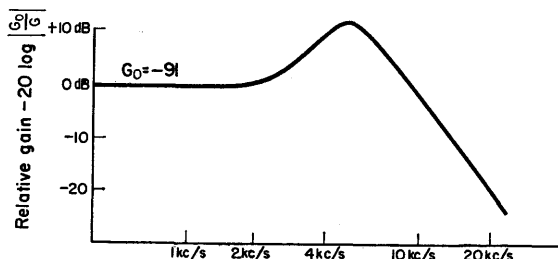


FIG. 7.17. Amplitude-frequency plot for closed loop performance of the amplifier of Fig. 7.16. Note the peak in response as the $A\beta$ locus approaches the point -1 on the $A_0\beta$ axis.

Stabilization of Feedback Amplifiers.

Amplifiers incorporating one valve or transistor will usually be stable, but will possibly have peaks in the amplitude response. Multistage amplifiers involving three or more amplifying devices will be unstable in most cases, when feedback is applied. The example of Fig. 7.18 is only stable with a relatively low degree of feedback (21 dB). If the degree of feedback is increased to 26 dB the system will oscillate.

$$\begin{aligned} \text{Degree of feedback} &= \frac{\text{gain without feedback}}{\text{gain with feedback}} \\ &= 20 \log_{10}(1 - A_0\beta). \end{aligned} \quad (7.22)$$

Control of Attenuation

Instability is caused by the phase shift becoming 180° before the loop gain has become unity. Each breakpoint introduces 45° phase shift at the break frequency tending to 90° at infinite frequency, as is shown in Fig. 3.7. If there is only one breakpoint

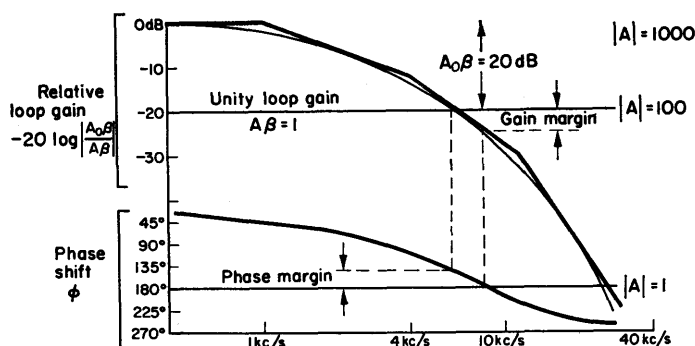


FIG. 7.18. Loop gain plotted on logarithmic axes. $|A_0\beta| = 10$ (or 20 dB).

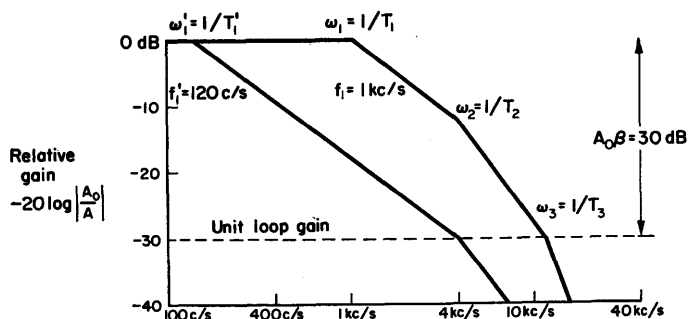


FIG. 7.19. Control of attenuation out to the frequency at which loop gain is unity. Bandwidth of A amplifier is reduced from 1 kc/s to 120 c/s. $T_1 = 0.16 \times 10^{-3}$ sec is increased to $T_1 = 1.3 \times 10^{-3}$ sec.

between the frequency at which the loop gain becomes unity and the midband frequency, the phase shift will have a maximum value of 135° and the system will be stable with a phase margin of 45° .

The simplest way of accomplishing a controlled attenuation is to have one time constant much larger than the others (see Fig. 7.19). This controls the fall off in gain until further phase

shift, introduced by the other time constants, can be permitted. To enable a loop gain of 30 dB to be used, the time constant T_1 can be increased so that the gain falls at 6 dB/octave to the breakpoint at 4 kc/s. The phase shift at unity loop gain is 140° giving a phase margin of 40° . The open loop bandwidth is reduced from 1 kc/s to 120 c/s.

7.5. PERFORMANCE OF AN AMPLIFIER WITH PARALLEL FEEDBACK

EXAMPLE. The capacitor coupled amplifier of Fig. 3.26, using a 6AU6 pentode and cathode follower output is employed. A blocking capacitor is used to isolate the feedback network from the cathode follower output.

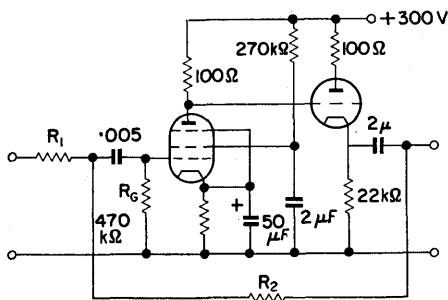


FIG. 7.20. Amplifier of Fig. 3.26 with feedback applied.

Signal inverter. When used as a signal inverter as in Fig. 7.20, $R_1 = R_2$ and

$$\beta = \frac{R_1}{R_1 + R_2} = \frac{1}{2},$$

$$\alpha = \frac{R_2}{R_1 + R_2} = \frac{1}{2}.$$

The loop gain

$$A_o\beta = \frac{-220}{2} = -110, \quad 1 - A_o\beta = 111.$$

Percentage error $\doteq \frac{100}{A_o\beta} = 0.91\%$.

The high loop gain produces a wide bandwidth, but additional phase shift produced by the feedback network causes peaking at the h.f. end (see Figs. 7.21 and 7.22).

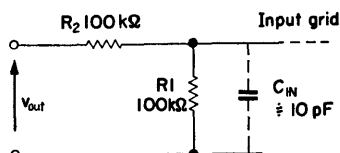


FIG. 7.21. Extra lag introduced by feedback network.

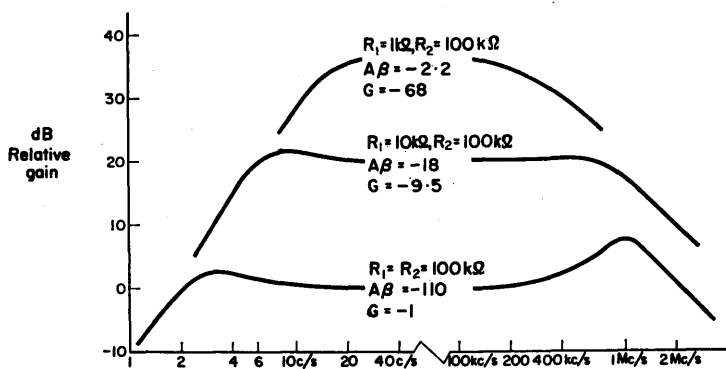


FIG. 7.22. Amplitude response for the amplifier of Fig. 7.20. Note the break in the frequency axis.

The peak at low frequency can be eliminated by increasing C_C , the coupling capacitor, to $1 \mu F$. This ensures that the gain falls off steadily at 20 dB/decade.

$$\left. \begin{aligned} \text{Resistance at summing point} &\doteq \frac{R_2}{1 - A_o} \doteq 450 \Omega \\ \text{Output resistance} &= \frac{R_o}{1 - A_o\beta} \doteq 3 \Omega \end{aligned} \right\} \begin{array}{l} \text{values} \\ \text{at mid-} \\ \text{band.} \end{array}$$

The foregoing analysis assumes zero source and load impedance.

Voltage amplifier. For a nominal gain of -10 , $R_1 = 10\text{ k}\Omega$ and $R_2 = 100\text{ k}\Omega$. The loop gain is reduced to -18 and the error is increased to 5%.

7.6. HIGH INPUT RESISTANCE AMPLIFIER

Series-series feedback enables a high input resistance to be produced by reducing the voltage across the input to the A amplifier.

DESIGN EXAMPLE 7.1

Required, a voltage amplifier with a gain of -40 and an input resistance of $10\text{ M}\Omega$, as in Fig. 7.23.

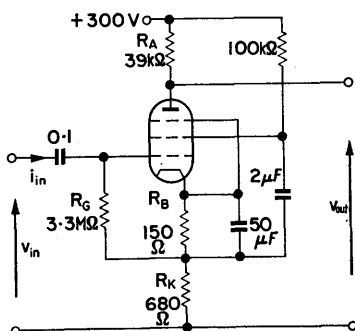


FIG. 7.23. High input resistance amplifier.

The manufacturer gives the following information for the 6AU6 valve.

For

$$V_{GK} = -1\text{ V},$$

$$V_A = 100\text{ V}, \quad I_A = 5\text{ mA},$$

$$V_S = 100\text{ V}, \quad I_S = 2.1\text{ mA},$$

$$g_m = 3.9\text{ mA/V},$$

and

$$r_a = 0.5\text{ M}\Omega.$$

The total cathode current operating under the above conditions is $I_A + I_S = 7.1 \text{ mA}$.

The cathode bias resistor, to give a $V_{GK} = -1 \text{ V}$, is

$$R_B = \frac{1 \text{ V}}{7.1 \text{ mA}} = 141 \Omega.$$

Let

$$R_B = 150 \Omega.$$

Grid resistor. The maximum value for the grid leak is $3.3 \text{ M}\Omega$. This is the figure usually quoted by the manufacturer as the largest safe value because of grid current effects.

Input resistance. To increase the input resistance from the $3.3 \text{ M}\Omega$ of the grid resistor to the required $10 \text{ M}\Omega$, the voltage across R_G should be $\frac{3.3}{10} v_{in}$ since

$$r_{in} = \frac{v_{in}}{i_{in}} = \frac{v_{in} R_G}{(v_{in} - v_R)} \quad (\text{where } v_R \text{ is the voltage across } R_K \text{ in Fig. 7.23})$$

$$= \frac{R_G}{1 - A_K} \quad \left(\text{where } A_K = \frac{v_R}{v_{in}} \right).$$

Thus,

$$A_K = \frac{r_{in} - R_G}{r_{in}} = 0.7.$$

Cathode resistor R_K .

$$A_K = \frac{\mu R_K}{r_a + R_L + (\mu + 1) R_K} \quad (\text{from eqn. (1.13)})$$

$$= \frac{g_m R_K}{1 + (R_L/r_a) + g_m R_K} \div \frac{g_m R_K}{1 + g_m R_K}$$

(for $R_L \ll r_a$).

Rearranging,

$$R_K = \frac{A_K}{g_m(1 - A_K)} = \frac{0.7}{3.9 \times 10^{-3} \times 0.3} = 600 \Omega.$$

Let R_K be 680Ω to ensure that the required input resistance is attained.

Screen resistors. For an anode supply of 300 V a screen resistor of $100 \text{ k}\Omega$ will provide a screen voltage of 100 V, if the screen current is 2 mA.

The decoupling capacitor should be returned to the cathode and not to the common terminal or the gain will be reduced by the inverse of v_R being applied to the screen grid.

Anode resistor.

$$A \doteq \frac{-g_m R_L}{1 + g_m R_K} \quad \left(\text{for } \frac{R_L}{r_a} \ll 1 \right)$$

or,

$$R_L = \frac{-A(1 + g_m R_K)}{g_m} = \frac{40(1 + 2.65)}{3.9 \times 10^{-3}} = 37.4 \text{ k}\Omega.$$

Let

$$R_L = 39 \text{ k}\Omega.$$

7.7. HIGH INPUT RESISTANCE TRANSISTOR AMPLIFIER AS AN IMPEDANCE CHANGER

A transistor amplifier, operating in common emitter, has an input resistance of the order of $1 \text{ k}\Omega$. It has been shown that this can be decreased by shunt feedback or increased by series feedback.

The emitter follower uses series feedback, and, as shown previously, has a high input resistance and low output resistance. This enables it to be used for transformation from a high impedance level to a low level. An example of such an application is the computing amplifier of Fig. 7.15. The high impedance level of the output of a common base stage is transformed to the

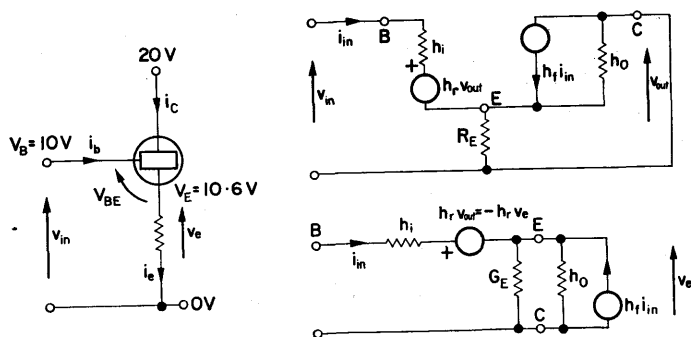


FIG. 7.24. Common collector amplifier (or emitter follower).
For $V_B = -10$ V, $V_E \doteq 9.4$ V for a silicon transistor and $V_{EB} \doteq 0.6$ V.

low impedance required for the output of the computing amplifier, which should approximate to a voltage source.

From Fig. 7.24 it is apparent that the input voltage

$$v_{in} = v_{be} + v_e \doteq v_e \quad (\text{as } v_{be} \text{ is small}).$$

EXAMPLE.

$$g_m = 40 \text{ mA/V} \quad \text{at} \quad I_C = 2 \text{ mA}.$$

The emitter current,

$$I_E = I_C + I_B \doteq I_C \quad \text{for} \quad h_f \gg 1.$$

For

$$v_e = 5 \text{ V} \quad \text{and} \quad R_E = 5 \text{ k}\Omega, \quad i_e = 1 \text{ mA},$$

and

$$v_{be} = \frac{i_c}{g_m} = \frac{1 \text{ mA}}{40 \text{ mA/V}} = 0.025 \text{ V}.$$

The input signal is thus

$$v_{in} = v_{be} + v_e = 5.025 \text{ V}.$$

The voltage difference between input and output is 0.025 V. In Fig. 7.24, the equivalent network shows that the voltage

difference is due to the input current i_{in} flowing in h_i , with the term $h_r v_{out}$ having little effect because of the smallness of h_r .

The input resistance appears large because, for a current i_{in} flowing into the base, a current $(1 + h_f) i_{in}$ flows into $(G_E + h_o)$.

Neglecting $h_r v_o$,

$$r_{in} = \frac{v_{in}}{i_{in}} = h_i + \frac{1 + h_f}{G_E + h_o} \doteq \frac{h_f}{G_E} \quad (\text{for large } h_f \text{ and } G_E)$$

$$\doteq 100 \times 5 \text{ k}\Omega \doteq 500 \text{ k}\Omega \quad (\text{for } h_f = 100).$$

The greater current gain provided by the Darlington connection of Fig. 7.25 increases the input resistance.

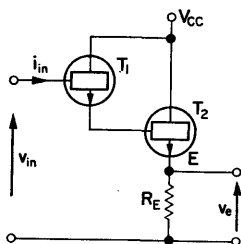


FIG. 7.25. Emitter follower using the Darlington connection. The base-emitter voltage of the combination is of the order of 1.2 V for silicon transistors.

Example of Direct Coupled Emitter Follower (Darlington connection)

The input current

$$I_{IN} = \frac{V_{IN} - V_{BE}}{BR_E} \quad (\text{where } B \doteq (h_{FE})^2).$$

For

$$V_{IN} = 5 \text{ V}, \quad R_E = 1 \text{ k}\Omega \quad \text{and} \quad h_{FE} = 50,$$

$$I_{IN} \doteq \frac{4 \text{ V}}{2500 \times 1 \text{ k}\Omega} = 1.6 \mu\text{A}.$$

Such an amplifier will draw only a small current from the previous stage, whereas a single transistor emitter follower would require nearly 50 times the input current. T_1 is operated at a low current level and its current gain will be somewhat less than its quoted value (see Fig. 7.26).

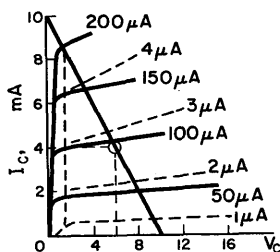


FIG. 7.26. Curves for a Darlington connected transistor (broken line) and a single transistor (solid line), plotted for silicon planar devices which provide current gain at low current levels. The single transistor requires $80 \mu\text{A}$ to supply 4 mA emitter current compared with $2.7 \mu\text{A}$ required by the compound device.

Capacitor Coupled Emitter Follower (Fig. 7.27)

For capacitor coupling some bias arrangement is necessary. The common forms of biasing will reduce the input resistance.

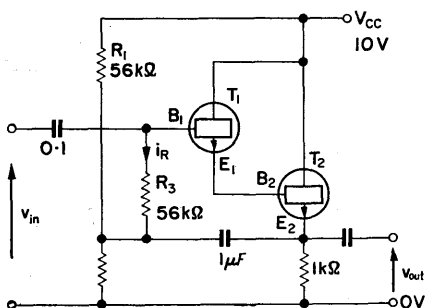


FIG. 7.27. High input impedance emitter follower. The effective value of R_3 is increased by the feedback connection.

By utilizing the small change in V_{BE} with collector current, the external base-emitter impedance can be increased. Bias is supplied to T_1 by the bias network R_1 , R_2 and R_3 . The latter can be relatively large as the leakage current for the silicon planar transistors is small.

At signal frequencies R_3 is effectively across B_1E_2 .

The voltage across R_3 ,

$$v_{b1e2} = v_{in} - v_{out}.$$

The internal voltage gain,

$$A_v = \frac{v_{out}}{v_{b1e2}}.$$

$$\begin{aligned} i_R &= \frac{v_{b1e2}}{R_3} = \frac{v_{in} - v_{out}}{R_3} = \frac{v_{in} - [Av_{in}/(1 + A)]}{R_3} \\ &= \frac{v_{in}}{(1 + A)R_3}. \end{aligned}$$

The effective value of $R_3 = (1 + A)R_3$, where A is several hundred. Thus the effect of R_3 will be small and the input impedance will be principally determined by $h_f^2 R_E$.

7.8. DIRECT COUPLED AMPLIFIER WITH FEEDBACK

The zero frequency amplifier of Design Example 6.4 is intended for use as a feedback amplifier for computing purposes. There are two main breakpoints due to the pentode and longtail pair stages. Two further breakpoints are due to (a) the cathode follower output stage, and (b) the capacitance at the summing point.

The capacitances C_{OP} and C_{SP} in Fig. 7.28 can be considerable, and vary with different applications. A small capacitor C is sometimes employed to reduce the effect of C_{SP} in the same way as capacitance is introduced in resistive coupling networks (see § 6.3). This additional capacitor, however, reduces the overall closed loop bandwidth (see Fig. 7.30).

From the above considerations it is apparent that the amplifier will be unstable when feedback is applied, as the effective input and output capacitances will introduce phase shift additional to the maximum internal phase shift of 180° .

With $100\text{ k}\Omega$ input and feedback resistors the amplifier oscillates at 140 kc/s producing a large amplitude sawtooth waveform. This indicates that a phase shift of 180° is produced at

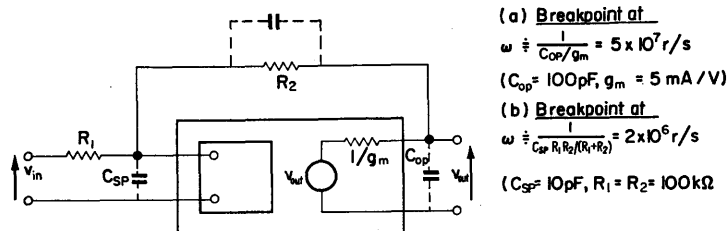


FIG. 7.28. Introduction of two lags at high frequency by capacitance at the output and summing points.

approximately 140 kc/s where the loop gain is considerably in excess of unity, i.e. the large non-linear waveform is caused by a large negative gain margin.

Stabilization

In the absence of any special considerations, a reasonable approach is to ensure that there is only one breakpoint above the unity gain line (when $\beta = 1$), and that the second breakpoint lies on the unity gain line. This implies that the internal phase shift is 135° at unity gain when all the output signal is fed back to the input. In most cases this will be sufficient for stability. If it is not, the second breakpoint can be made to occur below unity gain. On the other hand, if β is always to be small, it may be possible to introduce the second breakpoint above unity gain.

Two simple methods of stabilization will be considered. Both involve the reduction of open loop bandwidth which is always

inevitable in the stabilization of multistage amplifiers. The gain asymptote is controlled by modifying the breakpoint of one or more stages. In the interest of maximum bandwidth it is desirable to modify the stage with the lowest breakpoint (in the example this is the pentode stage), but if large signals are required to be handled at high frequencies, the final voltage amplifier stage should not be modified. This is because the stage can only accept a relatively small amplitude signal (of the order of 1 V) between the conditions of grid cut-off and anode bottoming. At high frequencies, the gain of this stage is reduced but the amplifier, in feedback connection, still demands the same amplitude output signal. Consequently, the stage is supplied with a larger input signal and this will cause overloading at some frequency. The output waveform will thus be distorted, unless the amplitude of the input signal is reduced.

In this example, signal handling will be better if the input stage is modified, as it has to produce only a small output signal. However, the overall bandwidth will be greater if the pentode stage is modified. The latter course will be adopted.

Dominant Lag Stabilization

The lag introduced by the pentode is increased so that the gain falls to unity before the breakpoint of the longtail pair occurs. The required breakpoint for the pentode can be found by projecting back from the intercept of the unity gain line and f_2 (the frequency of the L.T.P. breakpoint), at a slope of 20 dB/decade. The frequency at which this projection meets the 0 dB relative gain line is the required breakpoint f'_1 . From Fig. 7.29, f'_1 is 20 c/s,

$$\omega'_1 = 2\pi f'_1,$$

and

$$T'_1 = \frac{1}{\omega'_1} = C_d R$$

(where $C_d R$ is the required dominant lag, and R is the effective shunt resistance = 0.8 MΩ).

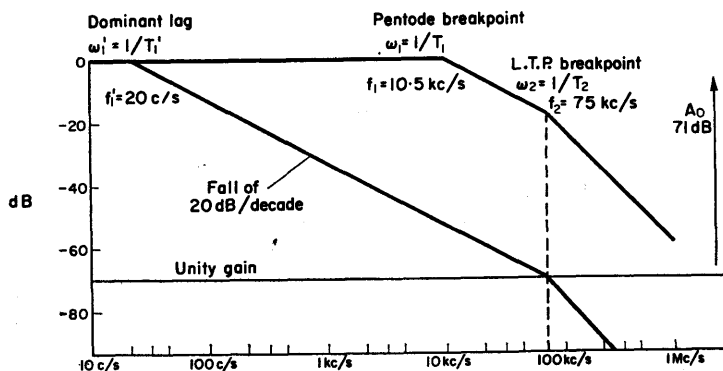


FIG. 7.29. Determination of required dominant lag. Note that the open loop bandwidth has been drastically reduced by increasing the shunt capacitance of the pentode stage from 20 pF to 0.01 μ F.

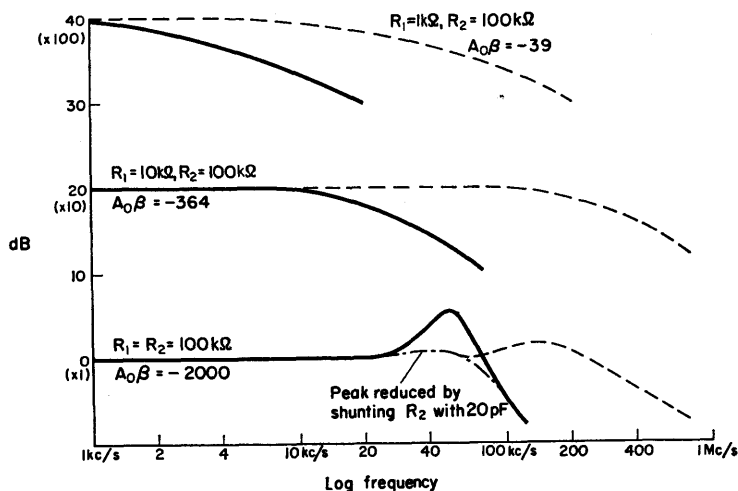


FIG. 7.30. Closed loop frequency response for (a) dominant lag stabilization (solid line) and (b) transitional lag stabilization. The A gain is measured as -4000. The open loop bandwidth in the transitional lag case is 500 c/s and is 40 c/s in the dominant lag case.

Thus,

$$C_d = \frac{1}{2\pi f_1 R} = \frac{10^{-6}}{2 \times 20 \times 0.8} \doteq 0.01 \mu\text{F}.$$

The closed loop performance obtained is shown in Fig. 7.30.

Transitional Lag Stabilization

This is a method that does not reduce the open loop bandwidth to the same degree as does dominant lag stabilization. Consider the network of Fig. 7.31 and its high and low frequency approximations.

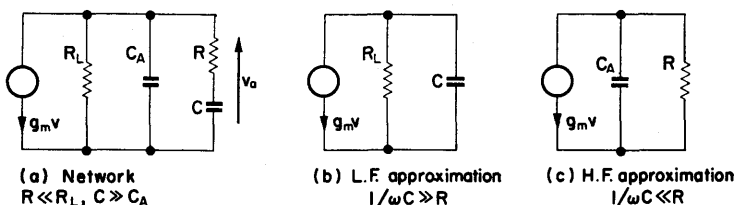


FIG. 7.31. Anode lag network with C and R added.

The impedance of the network for Fig. 7.31a is

$$Z(s) = R_L \frac{1 + sCR}{1 + s(CR + C_A R_L + CR_L) + s^2 CRC_A R_L} \quad (7.23)$$

$$\doteq R_L \frac{1 + sCR}{1 + sCR_L} \quad (7.24)$$

(if $C \gg C_A$ and $R \ll R_L$ and if the frequencies considered are below $\omega = 1/C_A R$).

The output voltage,

$$v_{\text{out}}(s) = -g_m R_L \frac{1 + sCR}{1 + sCR_L} v_{\text{in}}(s), \quad (7.25)$$

or

$$A(s) = A_0 \frac{1 + sCR}{1 + sCR_L} \quad (7.26)$$

(where $A_0 = -g_m R_L$).

If this network is combined with another which involves a simple lag, the latter can be made to cancel with the numerator of the above expression.

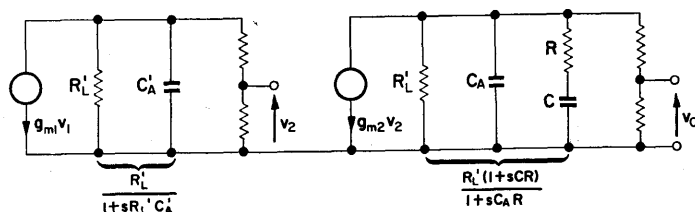


FIG. 7.32. Two-stage amplifier with second stage modified by the series C - R circuit.

As shown in Fig. 7.32 the transfer function of the two-stage amplifier can be written as

$$A(s) = A'_0 \frac{1 + sT}{(1 + sT_2)(1 + sT'_1)}, \quad (7.27)$$

where $T = CR$, $T'_1 = CR'_L$, $T_2 = C'_A R'_L$ and A'_0 equals the over-all gain at zero frequency.

If

$$T = T_2$$

then

$$A(s) = \frac{A'_0}{1 + sT'_1}. \quad (7.28)$$

The two-stage amplifier has been reduced from a two-lag system to a single lag, although there will be another lag at h.f. produced by the network shown in Fig. 7.31 c.

The price paid for the controlled attenuation is a reduction in open loop bandwidth. If the stage with the lowest f_1 is the modified stage, the open loop bandwidth will fall from

$$\omega_1 = \frac{1}{C_A R_L} \quad \text{to} \quad \omega'_1 = \frac{1}{C R_L}$$

and since $C \gg C_A$ the reduction will be considerable.

DESIGN EXAMPLE 7.2

Required, to stabilize the amplifier of Design Example 6.4 using a transitional lag.

It is required that the second breakpoint should lie on the unity gain line. In Fig. 7.33 a line is projected back from the intercept of the open loop gain asymptote and the unity gain

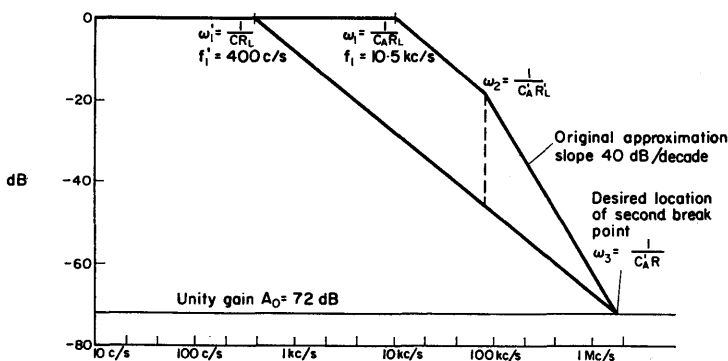


FIG. 7.33. Determination of transitional lag network. (a) Locate position of required breakpoint on original asymptote. (b) Project back at 20 dB/decade to find ω_1 . (c) Calculate $C = 1/(\omega_1 R)$ and $R = 1/(\omega_2 C)$.

line, at a slope of 20 dB/decade. The interception with the 0 dB relative gain axis is at $f'_1 = 500$ c/s, so $\omega'_1 = 3140$ r/s $= 1/CR_L$. Thus,

$$C = \frac{1}{R_L \omega'_1} = \frac{1}{0.8 \times 10^6 \times 3.14 \times 10^3} = 400 \text{ pF.}$$

For the cancellation of $(1 + sT)$ with $(1 + sT_2)$ it is required that $T = T_2$:

$$T_2 = \frac{1}{2\pi f_2} = 2.13 \mu\text{sec.}$$

Thus,

$$R = \frac{T}{C} = \frac{T_2}{C} = \frac{2.13 \times 10^{-6}}{400 \times 10^{-12}} = 5.3 \text{ k}\Omega.$$

The values for C and R can be checked by finding $f_3 = 1/2\pi C_A R$ which coincides with the point of intersection on the unity gain line.

7.9. THE DRIFT PROBLEM IN FEEDBACK AMPLIFIERS

It has been mentioned in § 6.1 that although a d.c. amplifier has been zeroed, after a certain time, an output signal will be developed even though the input signal is zero. This is the drift signal.

Let the drift signal produced by an amplifier after a specified time be v_{do} . If feedback is applied, this quantity will be reduced to some value v_{out} . This implies a signal at the summing point βv_{out} , as in Fig. 7.34.

Thus the output voltage, due to drift,

$$v_{out} = v_{do} + A\beta v_{out} = \frac{v_{do}}{1 - A\beta} \quad (7.29)$$

$$\div - \frac{v_{do}}{A\beta} \quad (\text{if } A\beta \gg 1),$$

or

$$v_{out} = \frac{v_{di}}{\beta}, \quad (7.30)$$

where v_{di} is the input referred drift voltage, i.e. $v_{di} = v_{do}/A_o$.

Thus the output drift is the equivalent input drift signal divided by the feedback fraction β . If $R_1 = R_2$, $\beta = \frac{1}{2}$ and for $v_{di} = 100 \text{ mV}$, $v_{out} = 200 \text{ mV}$.

The voltage v_{di} is fictitious and does not exist physically at the input of the amplifier since, by definition, the input terminals are short circuited (see § 6.1). However, with feedback applied, there is a voltage βv_{out} at the summing point and from the above equation this is v_{di} which can be measured. This signal, when

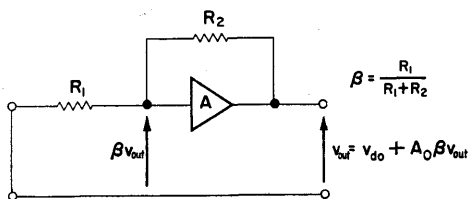


FIG. 7.34. Relationship between output drift voltage and voltage at the summing point.

amplified, opposes the output drift signal and, if $A\beta$ is large enough, almost cancels it. It should be noted that the gain is reduced to $G = \alpha A / (1 - A\beta)$ while the drift voltage is reduced to $v_{do} / (1 - A\beta)$. The drift voltage to signal ratio will be worsened by the factor α for an amplifier with feedback.

Automatic Drift Correction

The drift signal will give rise to error in a zero frequency amplifier system, unless the amplifiers are frequently zeroed. This would be tedious in a large computer. Some means of reducing the drift signal is thus desirable.

From eqn. (7.22), the output drift voltage $v_{out} = v_{do} / (1 - A\beta)$, where v_{do} is the drift voltage of the amplifier without feedback.

Assuming that v_{do} has been made as small as possible, and that β is fixed by the feedback configuration, the only way of reducing v_{out} is by increasing A . If A is increased by an extra stage of amplification, v_{do} will also be increased in proportion and the drift voltage will be approximately the same.

If the main amplifier, such as the three-valve d.c. amplifier previously considered, is preceded by an extremely low drift

amplifier which adds negligible drift, v_{out} is reduced in the same proportion as A is increased (see Fig. 7.35).

An amplifier with very low drift is the modulator type described in § 6.1. Such an amplifier has, however, a very narrow

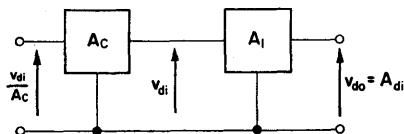


FIG. 7.35. Reduction of effective input-referred-drift by the addition of a driftless pre-amplifier.

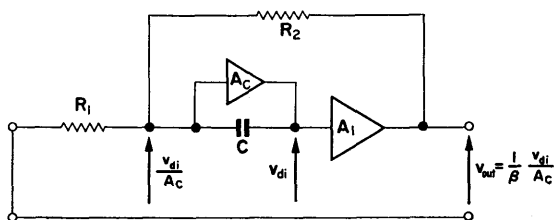


FIG. 7.36. Use of auxiliary amplifier to provide automatic zeroing.
Drift voltage of A_1 is reduced by the gain of A_c .

bandwidth and is quite inadequate for high speed computing. It can be bypassed for high frequency signals by a capacitor as in Fig. 7.36, thereby providing a gain, at computing frequencies, of A_1 .

The zero frequency gain $A_0 = A_c A_1$.

$$\text{Equivalent input drift} = \frac{v_{di}}{A_c}.$$

$$\text{Output drift} = \frac{1}{\beta} \frac{v_{di}}{A_c} = 2 \times \frac{100 \text{ mV}}{1000} = 200 \text{ } \mu\text{V}.$$

$$(\text{for } v_{di} = 100 \text{ mV and } A_c = 1000)$$

The capacitor C may be undesirable in some applications as, in conditions of overload, it can be charged by grid current. Because of the normally high input impedance to A_1 , the discharge time can be excessive. With valve systems, the grid of the

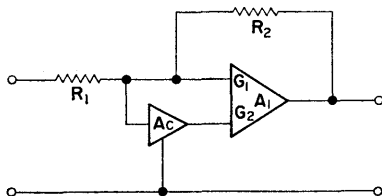


FIG. 7.37. Auxiliary amplifier connection for main amplifier with longtail pair dual input. The auxiliary amplifier has signal inversion.

second valve of the longtail pair can be used as the input from the auxiliary amplifier.

Referring to Fig. 7.37 the zero frequency gain $= A_1 + A_1 A_c = A_1(1 + A_c)$.

If the drift of the main amplifier is v_{di} , and the auxiliary amplifier drift is negligible, the output drift with feedback,

$$v_{out} = \frac{v_{do}}{A_o \beta} = \frac{1}{\beta} \left[\frac{v_{di} A_1}{A_1(1 + A_c)} \right] = \frac{1}{\beta} \left[\frac{v_{di}}{1 + A_c} \right].$$

7.10. A SHUNT-SHUNT AMPLIFIER WITH DEFINED TRANSFER RESISTANCE

DESIGN EXAMPLE 7.3

Required, a d.c. amplifier with a transfer resistance of $-100 \text{ k}\Omega$ and output voltage swing $\pm 5 \text{ V}$.

The three-stage amplifier of Design Example 6.4 has an internal transfer resistance of $-60 \text{ M}\Omega$. The required overall transfer resistance is $-100 \text{ k}\Omega$. $R_T = \frac{-R_F}{1 + (R_F/Z_t)}$.

The loop gain is

$$\frac{Z_t}{R_F} = -\frac{60 \times 10^6}{100 \times 10^3} = -600.$$

Thus the overall transfer resistance is defined to an error of

$$\frac{R_F}{Z_t} \cdot 100\% = 0.16\% \quad (\text{see } \S 7.2e).$$

The phase shift provided by the three stages will be sufficient to produce oscillation and some form of stabilization is necessary. A very convenient method is to provide a lag by increasing the "Miller" capacitance of one of the transistors. This has the advantage of requiring a relatively small capacitor.

Method of stabilization. As shown in Fig. 7.38, insert a sufficiently large capacitor between collector and base of the first stage to stop oscillation. This will be of the order of $0.1 \mu\text{F}$. Now reduce its value in steps until a value is found that ensures stability without an excessive reduction of bandwidth. The band-

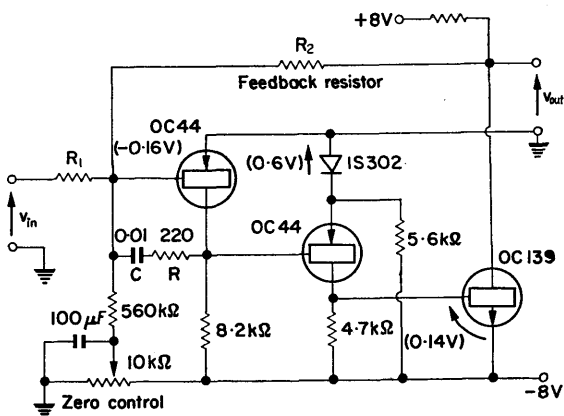


FIG. 7.38. D.C. amplifier with transfer resistance $R_T = 100 \text{ k}\Omega$, and internal transfer impedance of $-60 \text{ M}\Omega$. C and R are stabilization elements.

width can be further extended by inserting resistance in series with the capacitor. This should be of the order of $10\ \Omega$ to begin with, and be increased until a satisfactory compromise between stability and bandwidth is obtained. With this amplifier $R = 220\ \Omega$ and $C = 0.01\ \mu\text{F}$ are suitable values, and its performance under various conditions of feedback is shown in Fig. 7.39.

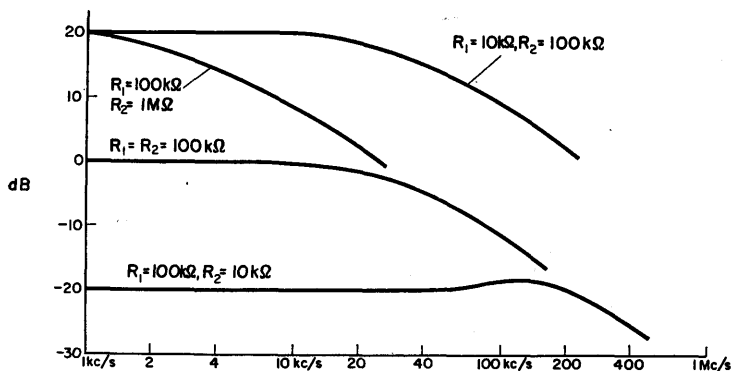


FIG. 7.39. Amplitude-frequency response of an amplifier with internal transfer impedance of $-60\ \text{M}\Omega$. Bandwidth is a function of R_2 and is independent of gain. The two curves for $R_2 = R_T = 100\ \text{k}\Omega$ show the same bandwidth, although one is for 10 times the gain of the other.

7.11. CURRENT AMPLIFIER WITH DEFINED GAIN

Such an amplifier has been described in § 7.2 (type b).

DESIGN EXAMPLE 7.4

Required, a d.c. amplifier with current gain of 100, nominal input resistance $100\ \Omega$ and providing an output current of $2\ \text{mA}$ into a $4\ \text{k}\Omega$ load.

With such an amplifier the requirement is to make the performance largely independent of the transistor parameters, principally the current gain h_{fe} . This requires the loop gain

$|A_o\beta|$ to be much greater than unity. Then the gain,

$$G = \frac{A}{1 - A_o\beta} \div \frac{1}{\beta}.$$

Transistors. General purpose alloy type OC44 transistors are suitable.

Power supply. The maximum voltage to be developed across R_L is

$$V_{L(\max)} = 2 \text{ mA} \times 4 \text{ k}\Omega = 8 \text{ V}.$$

A 10 V supply will be satisfactory as it allows a minimum of 2 V across R_2 and T_2 , in Fig. 7.40.

Feedback resistors R_1 and R_2 . For $|A_o\beta| \gg 1$ the gain of the amplifier is $1/\beta$, where $\beta = R_2/(R_1 + R_2)$, i.e. the fraction of the output current fed back to the input.

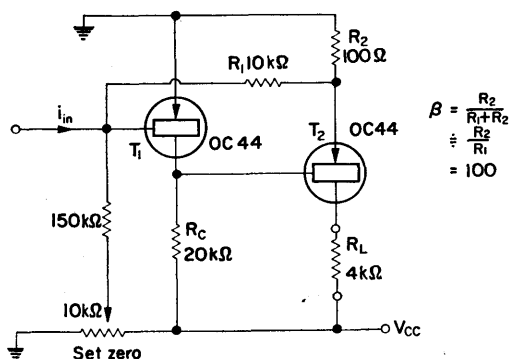


FIG. 7.40. Current amplifier with current gain defined by R_1/R_2 .

Input resistance. This is approximately $r_{in} = R_b/(1 - A_o\beta)$ where R_b is the input resistance to the A amplifier without feedback.

Collector resistor R_C . T_1 is run at 0.5 mA, and for a 10 V supply,

$$R_C = \frac{V_{CC}}{I_C} = \frac{10 \text{ V}}{0.5 \text{ mA}} = 20 \text{ k}\Omega.$$

Estimation of R_b of T_1 . The value of the short circuit current gain of T_1 is estimated, from the collector characteristic, as 60 under the selected operating conditions.

Input resistance of T_1 , $R_{b1} \doteq h_f R_e$.

The forward characteristic of the junction as shown in Fig. 2.1 b can be expressed as

$$I = I_{co} \exp\left(-\frac{eV}{kT}\right)$$

from which

$$\frac{dI}{dV} = I / \left(\frac{kT}{e}\right).$$

But the forward resistance $R_e = dV/dI$ where V is the forward voltage. Therefore

$$R_e = \left(\frac{kT}{e}\right) I.$$

At normal temperature $kT/e = 25 \text{ mV}$. Therefore

$$R_e = \frac{25}{I_E (\text{mA})} = 60 \times 50 = 3 \text{ k}\Omega.$$

Estimation of R_b of T_2 . $R_{b2} \doteq h_f(R_2 + R_e)$, where $R_e = 25/(1.25 \text{ mA}) = 20 \Omega$, and, I_E is for $V_{C2} = -5 \text{ V}$. The short circuit current gain, h_f from the collector characteristics under the selected operating conditions, is 90.

Therefore

$$R_{b2} = 11 \text{ k}\Omega.$$

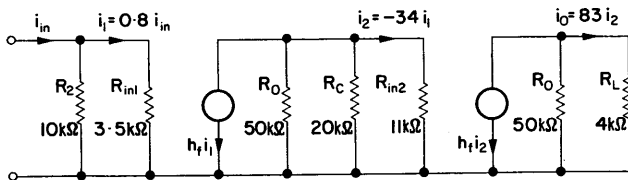


FIG. 7.41. Equivalent network for estimation of A gain. R_2 is taken to the common line to eliminate feedback.

A gain. From the equivalent network of Fig. 7.41 the estimated current gain,

$$\frac{i_{out}}{i_{in}} = 2260,$$

thus the loop gain for $\beta = 100$,

$$A_0\beta \div -23.$$

Also, the input resistance, with feedback,

$$R'_{in} = \frac{3 \text{ k}\Omega}{1 + 23} = 125 \Omega.$$

The open and closed loop amplitude response for the amplifier is shown in Fig. 7.42.

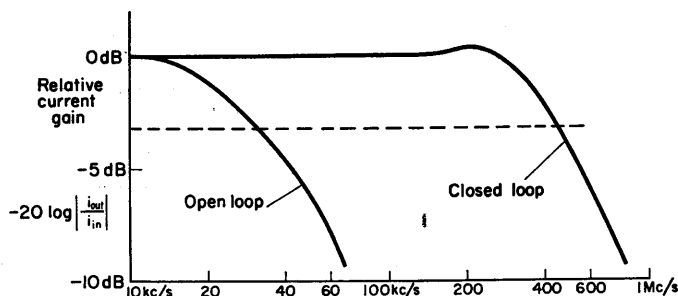


FIG. 7.42. Open and closed loop amplitude response for the feedback current amplifier. Nominal loop gain $A_0\beta = -23$.

CHAPTER 8

Power Supplies

Introduction

The most convenient source of power to operate electronic equipment is the supply mains. This has the advantage of cheapness and constancy, when compared with batteries, but a disadvantage is the inevitable introduction of mains frequency noise. The conversion from a.c. to unidirectional current can be most efficiently carried out by semiconductor diodes. These have low forward resistance, require no auxiliary power and can be used in applications where it would be difficult to supply the heater power to thermionic valves.

8.1. THE BASIC RECTIFIER

In the circuit of Fig. 8.1 the diode conducts on alternate half-cycles and the average (or d.c.) value of output voltage is V_R/π .

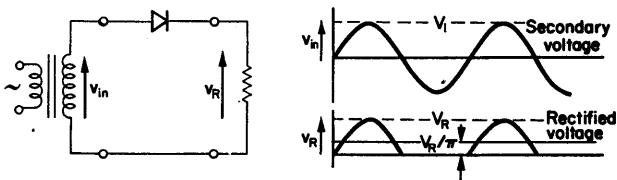


FIG. 8.1. The half wave rectifier.

The voltage applied across the diode during negative half-cycles is known as the inverse voltage, and if this exceeds the inverse voltage rating of the component, breakdown may occur. The

maximum inverse voltage rating varies from a few volts for small components to several thousand volts for high voltage diodes.

8.2. FULL WAVE RECTIFIER

To increase the average value of the output voltage from V_R/π to $2V_R/\pi$ two diodes can be used in a full wave system. One diode conducts on the positive half-cycle of alternating

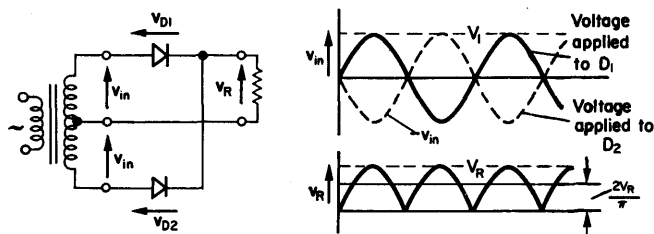


FIG. 8.2. The full wave rectifier.

voltage, and the other during the negative half-cycle. Such an arrangement, shown in Fig. 8.2, requires a transformer having a centre tapped secondary winding.

Full wave rectification may also be obtained without a centre tapped secondary by making use of the bridge circuit of Fig. 8.3.

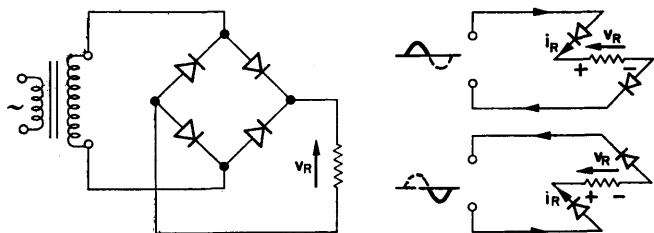


FIG. 8.3. The bridge rectifier. The manner in which pairs of diodes operate during alternate half-cycles is illustrated.

While thermionic diodes cannot be conveniently used in this configuration, semiconductor diodes, because of their small physical size and no heater requirements, are eminently suitable.

8.3. EFFECT OF LOAD CAPACITANCE

Referring to Fig. 8.4, the load capacitor charges when v_{in} is greater than v_R and during the remainder of the cycle supplies the load current i_L . If the time constant CR is much greater than the

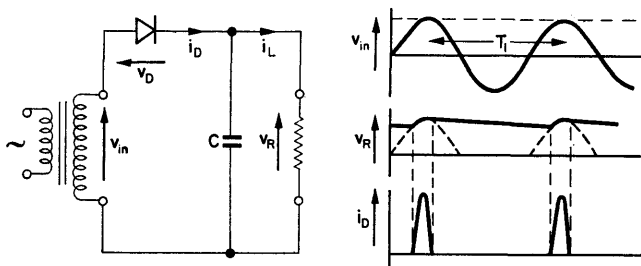


FIG. 8.4. Effect of reservoir capacitor on the output of a rectifier circuit.

period T_1 , the output voltage will not change appreciably over the period. It should be noted that the peak current passed by the diode can be many times the load current.

Output Ripple

The output voltage changes during the period and this change constitutes the ripple output. Provided that the CR time constant is much greater than the period $T_1 = 1/f$, and consequently diode current only flows for a short time, the ripple approximates to a sawtooth waveform as shown in Fig. 8.5.

The change in charge on the capacitor,

$$\Delta Q = \Delta VC = I_L T_1,$$

where I_L is the average load current.

Thus,

$$\Delta V = \frac{I_L T_1}{C} = \frac{V_{av} T_1}{CR} \quad (\text{since } I_L = V_{av}/R). \quad (8.1)$$

The average value of output voltage,

$$V_{av} = V_1 - \frac{V_{av} T_1}{2RC} \div V_1 \left(1 - \frac{T_1}{2RC}\right) \quad (\text{since } V_{av} \div V_1).$$

Therefore

$$V_{av} = V_1 \left(1 - \frac{1}{2fRC}\right). \quad (8.2)$$

For full wave rectification the ripple frequency is twice the

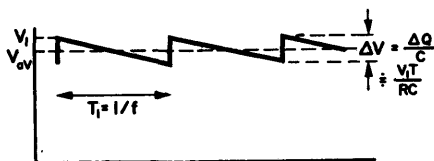


FIG. 8.5. Output ripple. Provided that the CR time constant is much greater than $T = 1/f$, output ripple approximates to a sawtooth waveform.

mains frequency, i.e. $T_2 = 1/2f$. In this case the peak to peak ripple voltage,

$$\Delta V = \frac{V_1}{2fRC}. \quad (8.3)$$

EXAMPLE. A full wave rectifier supplied from a mains source of $f = 50$ c/s and having a peak value $V_1 = 100$ V. If $C = 100 \mu\text{F}$ and the load current $I_L = 10$ mA,

$$\Delta V = \frac{V_1}{2fRC} = \frac{100}{2 \times 50 \times 10^4 \times 10^{-4}} = 1 \text{ V}.$$

$$\text{Percentage ripple} = \Delta V/V_1 \times 100 = 1\%.$$

Output filter for ripple reduction. The ripple voltage may be reduced by using a low pass filter which, in its simplest form, is the series resistor and shunt capacitor of Fig. 8.6. This is a voltage dividing network in which the output ripple is developed across the capacitor, which is selected to have a much lower impedance than R .

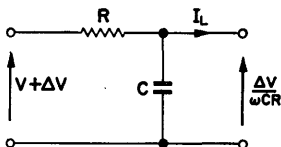


FIG. 8.6. Output filter for reduction of ripple. Ripple reduction factor $\gamma = 1/\omega CR$.

A disadvantage of the system is that the load current flows through R , increasing the power supply resistance. The output voltage will therefore fall as the load current is increased. For R - C smoothing, the ripple reduction factor,

$$\gamma = 1/\omega CR. \quad (8.4)$$

8.4. L - C SMOOTHING FILTER

If an inductance is used in place of the resistance, as in Fig. 8.7, two advantages result. Firstly, the d.c. voltage drop is greatly reduced because of the low resistance of the choke. Secondly,

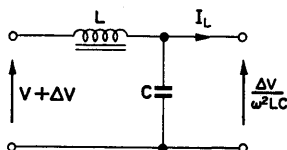


FIG. 8.7. L - C smoothing filter. Ripple reduction factor, $\gamma = 1/\omega^2 LC$.

the impedance of the choke is proportional to frequency. Thus, the output ripple is reduced from ΔV to $\Delta V/\omega_r^2 LC$, where ω_r is 2π times the ripple frequency.

For L - C smoothing, the ripple reduction factor,

$$\gamma = 1/\omega_r^2 LC. \quad (8.5)$$

Referring to the previous example, if the percentage ripple is to be reduced from 1 to 0.1%,

$$\omega_r^2 LC = 10, \quad \text{or} \quad L = 10/\omega_r^2 C.$$

Thus, for a ripple frequency of 100 c/s and $C = 10 \mu\text{F}$, $L = 2.5 \text{ H}$.

8.5. CHOKE INPUT FILTER

When the filter of Fig. 8.7 is used directly with the full wave rectifier of Fig. 8.2 the power supply is known as a choke (or inductance) input type. The filter selects the average component of the rectifier output but removes the ripple.

From Fourier analysis, the series expression for the rectifier output voltage is

$$v = \frac{4V_1}{\pi} \left[\frac{1}{2} + \frac{\cos 2\omega t}{3} - \frac{\cos 4\omega t}{15} + \dots \right], \quad (8.6)$$

where $\omega = 2\pi$ times the supply frequency.

The average, or d.c. component, is $2v_1/\pi = 0.64 V_1$.

The lowest frequency ripple component has an amplitude of $4V_1/3\pi$ and is twice the supply frequency. This is the major component of the ripple.

The load current,

$$I_R = \frac{V_R}{R} = \frac{2V_1}{\pi R}. \quad (8.7)$$

If it is assumed that the capacitor has a very low impedance at the ripple frequency, the principal ripple component,

$$I_c = \frac{4}{3} \frac{V_1}{\pi} \frac{1}{2\omega L}. \quad (8.8)$$

This analysis is only valid if the load current I_R is always greater

than i_c so that one or other of the rectifiers is conducting at all times, producing the current and voltage waveforms of Fig. 8.8.

$$\begin{aligned} \text{Output ripple voltage} &= \frac{I_c}{2\omega C} = \frac{V_1}{3\pi\omega^2 LC} \quad [\text{from eqn. (8.8)}] \\ &\doteq \frac{0.1 V_1}{\omega^2 LC}. \end{aligned} \quad (8.9)$$

The ripple is thus independent of the load current which is not the case when a reservoir capacitor is used.

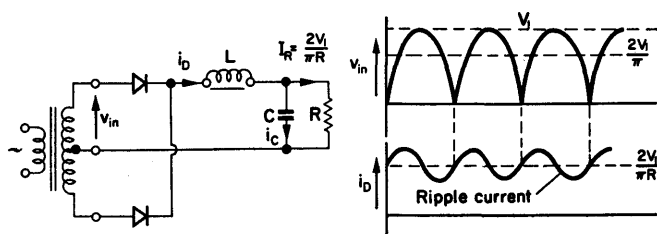


FIG. 8.8. Full wave rectifier with choke input filter. Provides good regulation, low rectifier peak currents but relatively low output voltages.

EXAMPLE. For, $\omega = 2\pi 50$ r/s, $L = 2.5$ H, $C = 100 \mu\text{F}$ and $V_1 = 100$ V, the output ripple voltage is 0.8 V peak-to-peak. The minimum current for correct operation is $I_R \gg I_C$. Thus, to determine the maximum value of R , equate eqns. (8.7) and (8.8),

$$\frac{2V_1}{\pi R} = \frac{4}{3} \frac{V_1}{\pi} \frac{1}{2\omega L},$$

from which, $R = 3\omega L = 2.4 \text{ k}\Omega$. If R is more than this value, the inductor is unable to store sufficient energy to ensure that one rectifier is conducting at all times.

In general, choke input filters have good voltage regulation and low rectifier peak currents but give relatively low output voltages. The use of a reservoir capacitor, as in Fig. 8.9, provides

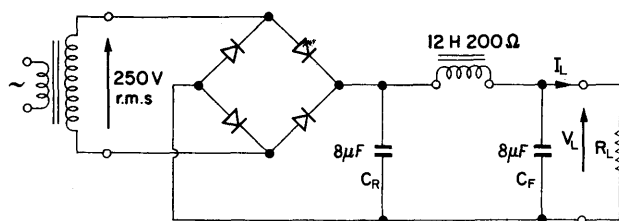


FIG. 8.9. Full wave rectifier with capacitor input filter. Provides high output voltages, but has high rectifier peak currents and relatively poor regulation.

a capacitor input filter, which has high output voltages but poor regulation and high rectifier peak currents. Capacitor input filters are used where the load is relatively constant as, for instance, in radio receivers. Comparison of the two types of filter circuits is made in the graph of Fig. 8.10.

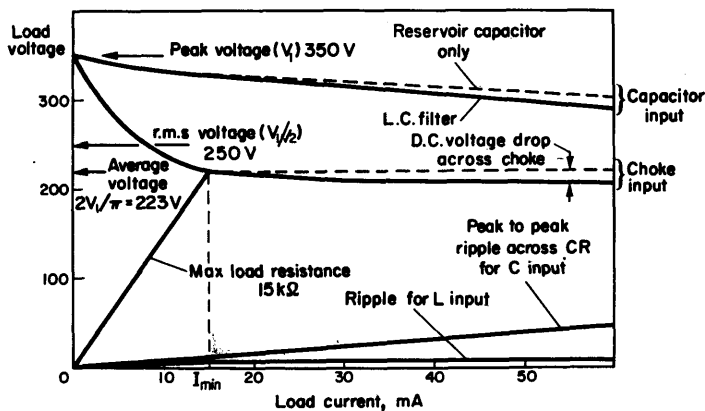


FIG. 8.10. Comparison of the performance of the two types of output filter circuits. The output voltage is the same for both systems, under zero load conditions, but in the case of the choke input filter it falls rapidly until the effective load resistance is $15\text{ k}\Omega$. Thereafter it remains constant.

8.6. VOLTAGE MULTIPLIERS

Two rectifiers of the type shown in Fig. 8.4 may be used with the same transformer winding. If the diodes are connected in opposite manner, as in Fig. 8.11, the two d.c. outputs are

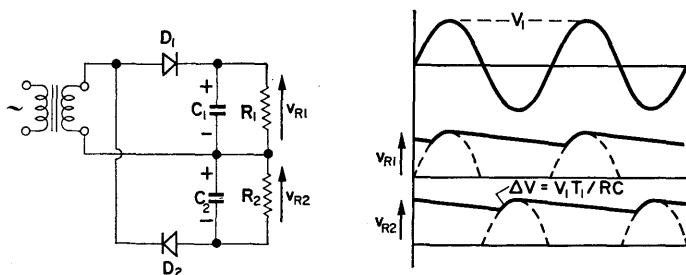


FIG. 8.11. The voltage doubler. If the load current is small, the output voltage is twice the peak value of input voltage.

effectively added giving an output voltage approaching twice the peak input voltage.

An alternative form of voltage multiplier is given in Fig. 8.12. This has a common connection between input and output, which

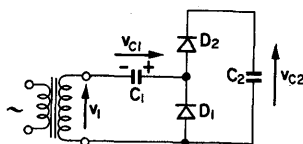


FIG. 8.12. Alternative form of voltage doubler.

can be a desirable feature in some applications. On negative half-cycles of V_1 , C_1 charges up to the peak value of V_1 through D_1 . On positive half-cycles D_1 is non-conducting and the anode of D_2 is raised to twice the peak value of V_1 . After a number of cycles C_2 charges to $2V_1$.

Any number of stages may be employed in this circuit arrangement, enabling very large voltages to be developed from low volt-

age sources. In Fig. 8.13, C_3 will charge to V_{C2} through D_3 and then will be raised $2V_1$ by the charge on C_1 . The voltage across C_3 will charge C_4 through D_4 . Similarly, C_5 will charge to the voltage across C_4 through D_5 and then be raised $2V_1$ by C_3 . Each of the output capacitors is charged to $2V_1$ thus providing an output voltage 6 times the peak input voltage.

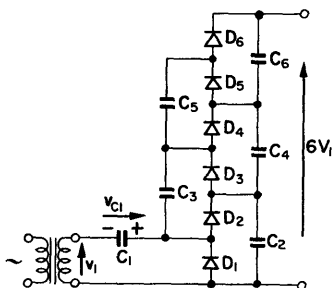


FIG. 8.13. The voltage multiplier. The circuit is a development of Fig. 8.12 and may be extended to provide very large voltages.

8.7. VOLTAGE STABILIZATION

The power supplies so far described have output voltages determined by two main factors: (a) the supply voltage, and (b) the load current drawn. Changes in either of these will cause the output voltage to change. In order to make the output voltage relatively insensitive to variations in supply voltage, or load current, some form of voltage stabilization is necessary.

Gas Discharge Tube

A simple way of ensuring that the output voltage is stable is to use the constant voltage developed across a gas discharge, as in Fig. 8.14.

DESIGN EXAMPLE 8.1

Required, a nominal 100 V supply for a 25 mA load current derived from a 200 V source.

A suitable discharge tube is the 108 C1 (the 108 indicates the operating voltage), having an operating current range of 5–30 mA and requiring a striking voltage of 140 V.

In order to accommodate changes in load current it is desirable to operate the tube near the middle of its current range. Let I_N be 20 mA. From Fig. 8.14, the input current, $I = I_N + I_L$ = 20 + 25 = 45 mA.

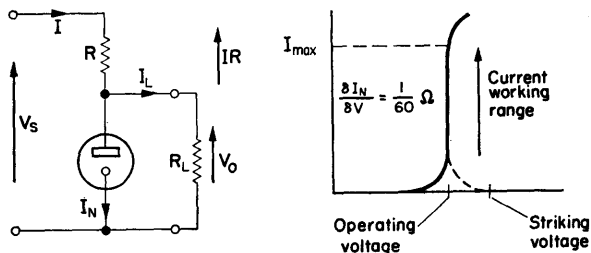


FIG. 8.14. Use of a gas discharge tube to provide voltage stabilization.

The value of the series resistor R , necessary to drop the voltage from V_S to V_O is given by:

$$R = \frac{V_S - V_O}{I_N + I_L} = \frac{92 \text{ V}}{45 \text{ mA}} \doteq 2 \text{ k}\Omega.$$

As I_L is reduced the current through the tube increases. Thus the load current can vary from 25 to 40 mA without an appreciable change in the output voltage.

Differential resistance. This is the change in tube voltage for a given change in tube current and is of the order of 100Ω . Thus a change of 5 mA will change the output voltage by approximately 0.5 V.

Striking voltage. As shown in Fig. 8.14, a higher voltage than the operating voltage is required to initiate the discharge, and V_S must be sufficient for this purpose. Some discharge tubes have

an auxiliary trigger electrode which is used for striking the discharge.

The range of discharge tube stabilizers is from 50 to 150 V, but higher voltages can be stabilized by using two tubes in series. In this case provision must be made for striking one tube independently of the other. A method is shown in Fig. 8.15 in

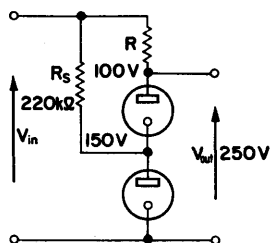


FIG. 8.15. Voltage stabilization using two gas discharge tubes in series. The resistor R_s provides a path for striking the lower regulator.

which R_s provides a path for striking the lower regulator. The upper tube strikes subsequently due to the source voltage.

Voltage reference tubes. The discharge tube, by operating at a specified current, gives a defined voltage that can be used as a reference voltage source. Special tubes are available for this purpose and a common reference voltage is 85 V. (See Design Example 8.5.)

High voltage stabilizers. The corona discharge at high voltage can be used to stabilize voltages of the order of 1000 V. Operation is in a manner similar to that described for gas discharge tubes but operating current levels are much lower.

8.8. SEMICONDUCTOR STABILIZER DIODES

Junction diodes can be produced with a well-defined breakdown voltage when operated with reverse voltage applied. A typical characteristic for a silicon breakdown diode is given in

Fig. 8.16. The usual range of operation is from 3 to 20 V. The manner of application is similar to that of gas discharge tubes but no striking voltage is required. Large currents can be passed by breakdown diodes but, since the device maintains a constant voltage across itself, the maximum safe current is determined by the power dissipation of the device. This is from 200 mW for a small free mounted device to several watts for a stud mounted diode.

The breakdown voltage is a function of temperature with a typical variation of from -2 to $+8$ mV/°C. Diodes with temperature coefficients of the order of 10 μ V/°C can be obtained for use as voltage reference sources. When used for this purpose the diode should be operated from a constant current supply.

DESIGN EXAMPLE 8.2

Required, from a 20 V source, a stabilized voltage supply having a nominal voltage of 6.8 V and providing a load current of 15 mA \pm 10 mA.

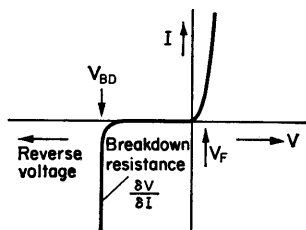


FIG. 8.16. Typical characteristic of a silicon breakdown diode.

The circuit arrangement is as shown in Fig. 8.17a while in Fig. 8.17b is drawn an approximation of the supply output.

A 1S7068A diode has a nominal breakdown voltage of 6.8 V and an incremental resistance, $\delta V/\delta I = 2 \Omega$ at a current of 15 mA.

The maximum load current will flow when the diode current is a minimum. If the minimum diode current is 15 mA, then the current drawn from the source is

$$I = I_L + I_D = 25 \text{ mA} + 15 \text{ mA} = 40 \text{ mA}.$$

The voltage to be dropped across the series resistor is

$$V_R = V_S - V_{BD} = 20 \text{ V} - 6.8 \text{ V} = 13.2 \text{ V}.$$

$$R_S = \frac{V_R}{I} = \frac{13.2 \text{ V}}{40 \text{ mA}} = 330 \Omega.$$

The output voltage falls approximately $\Delta V_L = R_{\text{out}} \Delta I_L$ as the load current increases from its minimum to its maximum value.

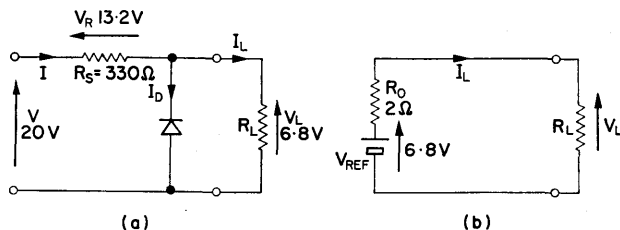


FIG. 8.17. (a) Circuit arrangement of Design Example 8.2, with (b) an approximate representation of the supply output.

Thus, $\Delta V_L = 2 \times 20 \times 10^{-3} = 0.04 \text{ V}$.

Under these conditions the maximum possible dissipation in the diode is $I V_L \doteq 300 \text{ mW}$, which is well within the stated dissipation of the device.

8.9. CATHODE FOLLOWER AS VOLTAGE STABILIZER

It was shown in Fig. 1.24 that the output voltage of a cathode follower closely follows the grid voltage. If the grid voltage is held at some constant value, the cathode will be at nearly the same value, and largely independent of the current through, or the voltage across, the valve.

A circuit diagram of a cathode follower voltage stabilizer is given in Fig. 8.18a, in which R , the unregulated supply resistance, will normally be less than the r_a of the valve. In the equivalent network of the output (Fig. 8.18b), R_{out} is the effective incremental resistance.

The output voltage,

$$V_O = V_G - V_{GK}, \quad (8.10)$$

where V_{GK} is the grid-cathode voltage necessary to provide the load current. Change in output voltage, as the load is varied, is due to the change in V_{GK} necessary to maintain the current. For instance, with $\mu = 50$ and $r_a = 10 \text{ k}\Omega$, a change of 10 mA

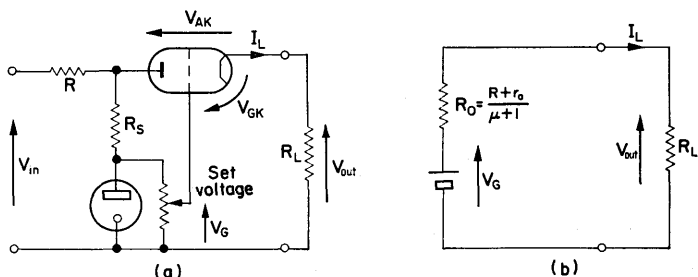


FIG. 8.18. The cathode follower voltage stabilizer and its equivalent output network.

in load current will cause an output voltage change of approximately 2 V. For this application a valve with a high g_m is desirable.

DESIGN EXAMPLE 8.3

Required, a stabilized 150 V supply to provide a maximum load current of 75 mA.

Series valve. Referring to Fig. 8.18a, V_{AK} is the difference between the unregulated and regulated voltages. The series valve passes the load current I_L , and has this excess voltage dropped across it. It must therefore be capable of dissipating the power $V_{AK}I_L$ watts. Using the system of Fig. 8.9 with a choke input filter, the excess voltage will be about 65 V which, at a current of 75 mA, produces a power of approximately 5 W. Let the valve chosen be an A2293 triode having a maximum dissipation of 15 W, an r_a of 700Ω and a μ of 6. (Note the very low amplifica-

tion factor for this type of valve.) From the anode characteristics, plotted in Fig. 8.19a, it is apparent that, with an anode voltage of about 60 V, the required load current can be passed with V_{GK} still several volts negative.

Reference supply. A 150 V stabilizer tube is used as the grid voltage reference, and operated at a nominal current of 10 mA. The resistor R_s supplies the striking voltage, and its value is such that when carrying 10 mA it provides approximately 150 V to the stabilizer tube.

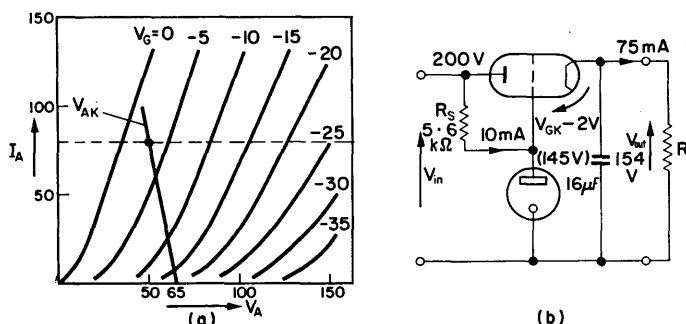


FIG. 8.19. Circuit diagram for Design Example 8.3, and the characteristics of the A2293 triode.

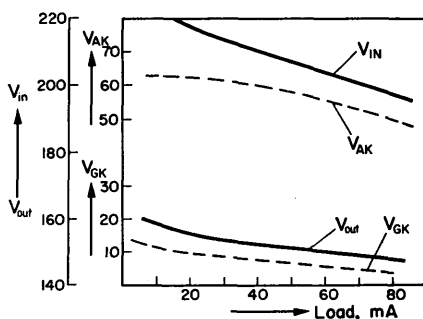


FIG. 8.20. Performance of the circuit of Design Example 8.3. Cathode follower voltages are plotted against load current.

The circuit diagram of the cathode follower stabilizer is given in Fig. 8.19b with conditions for an output current of 75 mA. The capacitor ensures a low supply impedance at high frequency.

Performance. In Fig. 8.20 the cathode follower voltages are plotted against load current. The source resistance, that is the resistance of the unstabilized supply, is given by the slope of V_{IN} and is approximately $400\ \Omega$. The output resistance can be obtained from the expression of Fig. 8.18b,

$$R_{out} = \frac{r_a + R}{\mu + 1} = \frac{700 + 400}{6 + 1} = 160\ \Omega.$$

8.10. EMITTER FOLLOWER AS VOLTAGE STABILIZER

The output voltage from an emitter follower is the base voltage less the base-emitter voltage required to maintain the emitter current. Since V_{BE} is usually small, the emitter voltage closely follows the base voltage and the system is comparable with the cathode follower stabilizer of the previous example. The load current is effectively the emitter current, which equals the base current times the current gain of the output transistor. The input current to the stabilizer can be reduced by using a compound emitter follower.

DESIGN EXAMPLE 8.4

Required, a current variable over the range 10–60 mA at -10.5 V from a regulated -20 V supply.

The circuit diagram of a compound emitter follower stabilizer is given in Fig. 8.21.

Current gain. The current gain should be sufficient to ensure that the base current of the input transistor is negligible compared with the current drawn by the resistance chain. The latter is 1 mA and, for a current gain of 2000 the maximum base

current,

$$I_B = \frac{60 \text{ mA}}{2000} = 30 \mu\text{A}.$$

The change in voltage at the base of T_1 , as the load current changes from minimum to maximum, will be approximately 0.25 V.

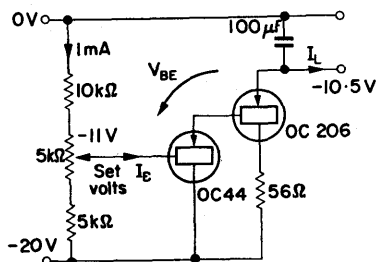


FIG. 8.21. Compound emitter follower stabilizing circuit of Design Example 8.4.

Output transistor. A current of 60 mA is required. An OC206 transistor is capable of passing such a current and its collector dissipation is 400 mW. However, with the full excess voltage of 9.5 V, and at the maximum load current, the dissipation is 570 mW. A resistor is therefore included in the collector circuit to reduce the voltage dropped across the transistor. In this case

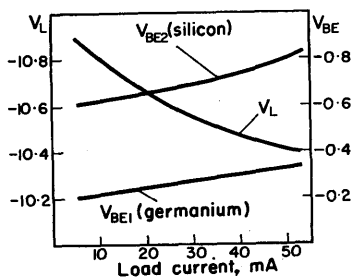


FIG. 8.22. Changes in V_{BE} required to maintain the load current, plotted for the two transistors of Fig. 8.21. Total $V_{BE} = V_{BE1} + V_{BE2}$.

a $56\ \Omega$ resistor will reduce the maximum dissipation of the output transistor to 360 mW. This resistor also serves as protection for the transistor when excess load current is drawn.

Output impedance. An electrolytic capacitor across the output terminals ensures that the supply has low impedance at high frequency. At low frequency the high current gain ensures that the output impedance is low. The main change in output voltage, as the load current varies, is due to the change in V_{BE} required to maintain the load current. This is illustrated in the graph of Fig. 8.22.

8.11. CLOSED LOOP VOLTAGE REGULATOR

The two previous stabilizers perform as simple closed loop systems. Referring to the cathode follower circuit (Fig. 8.18), as I_L is increased V_{GK} is increased (i.e. becomes less negative) to supply the demand, thus reducing the voltage across the valve and offsetting the increased voltage across R .

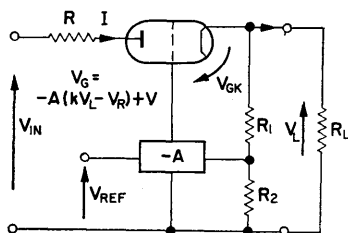


FIG. 8.23.

Closed loop voltage regulator. The symbol $k = R_2/R_1 + R_2$.

Since, from eqn. (8.10), $V_O = V_G - V_{GK}$, an increase in V_{GK} will cause the output voltage to fall. This fall can be counteracted by increasing V_G . The output voltage V_O is compared with a reference voltage and any change is inverted, amplified and fed to the grid. Such a system is illustrated in Fig. 8.23. The grid voltage,

$$V_G = -A(kV_L - V_R) + V, \quad (8.11)$$

where V is the voltage at the amplifier output when $kV_L = V_R$. The load voltage, $V_L = I_L R_L \doteq IR_L$ where I is the current from the rectifier. From eqn. (8.10), $IR_L = V_G - V_{GK}$ and, substituting eqn. (8.11) for V_G ,

$$\begin{aligned} IR_L &= -A(kV_L - V_R) + V - V_{GK} \\ &= -A(kIR_L - V_R) + V - V_{GK}. \end{aligned}$$

Therefore

$$I(R_L + AkR_L) + AV_R = V - V_{GK},$$

or

$$IR_L = \frac{AV_R + V - V_{GK}}{(1 + Ak)}$$

and

$$V_L = \frac{V_R + [(V - V_{GK})/A]}{1/A + k}. \quad (8.12)$$

It is seen that changes in V_{GK} are reduced by $1/A$. If the gain A is sufficiently large,

$$V_L = \frac{V_R}{k}. \quad (8.13)$$

The output voltage can be set by varying either V_R , the reference voltage, or k , the proportion of the output voltage applied to the difference amplifier.

Incremental Representation

The output resistance, ripple voltage and stabilization against input voltage changes can be determined from the incremental equivalent network of Fig. 8.24:

$$i \doteq \frac{v_{in} + \mu v_{gk}}{R_{in} + r_a + R_L}. \quad (8.14)$$

Since $R_1 + R_2$ is much greater than R_L , these resistors may be neglected:

$$i = \frac{v_{in} - \mu(Ak + 1)v_L}{R_{in} + r_a + R_L} = \frac{v_{in} - \mu(Ak + 1)iR_L}{R_{in} + r_a + R_L}, \quad (8.15)$$

from which,

$$i = \frac{v_{in}}{R_{in} + r_a + R_L + \mu R_L(Ak + 1)}.$$

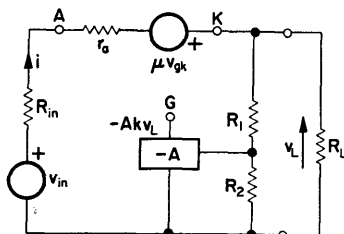


FIG. 8.24. Equivalent network of the closed loop voltage regulator, to investigate output resistance, ripple voltage and stabilization.

Therefore

$$v_L = iR_L = \frac{v_{in}R_L}{R_{in} + r_a + R_L[1 + \mu(Ak + 1)]}.$$

If A is large,

$$v_L = \frac{[v_{in}/(1 + \mu Ak)] R_L}{[(R_1 + r_a)/(1 + \mu Ak)] + R_L}. \quad (8.16)$$

From this equation an equivalent circuit (Fig. 8.25) can be drawn as the incremental representation of the power supply.

DESIGN EXAMPLE 8.5

Required, a 150 V, 75 mA supply with nominal output resistance of 20 Ω . The ripple voltage must be less than 10 mV peak-to-peak at full load current.

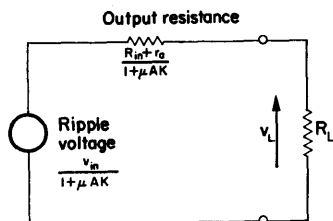


FIG. 8.25. Incremental representation of the closed loop voltage regulator output circuit.

To achieve the low output resistance a closed loop system is necessary and this takes the form of Fig. 8.26.

Difference amplifier. A cathode coupled amplifier is desirable for this purpose as it has inherent low drift.

Referring to Fig. 8.10, the output impedance of the capacitor input type of power supply is estimated as 800Ω . The output resistance of the regulated supply is, from Fig. 8.25,

$$R_{out} = \frac{R_{in} + r_a}{1 + \mu A k}$$

For an anode working voltage of approximately 125 V, an A2293 has $r_a = 700 \Omega$ and $\mu \doteq 4$. Also, $k \doteq V_{REF}/V_O \doteq 0.5$ if an 85 V reference source is used.

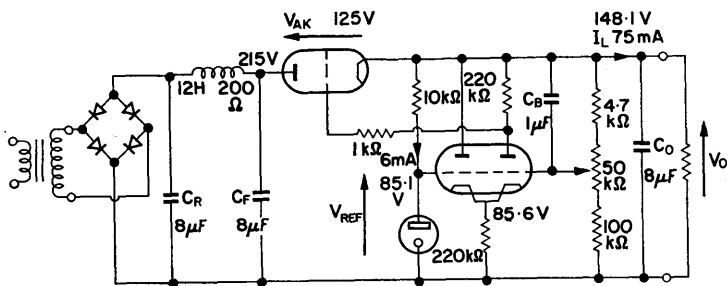


FIG. 8.26. Circuit arrangement of Design Example 8.5.

Thus,

$$R_{\text{out}} = \frac{800 + 700}{1 + 4 \times A \times 0.5}.$$

From this, since R_{out} is required to be 20Ω , $A = 1500/40$; let it be made a minimum of 40.

The gain for a cathode coupled amplifier of the type shown in Fig. 8.26 is given by

$$A = \frac{\mu R_L}{2r_a + R_L} \quad (\text{see 6.4}). \quad (8.17)$$

To achieve a gain of 40 a large value of R_L is required and the valve will necessarily be operated at a low current level. A valve which is suitable for operation under such conditions is the ECC83 high μ triode. If A is assumed to be a signless quantity, then, from eqn. (8.17),

$$R_L = \frac{2r_a A}{\mu - A}.$$

Estimated values for r_a and μ , over the working range, are $100 \text{ k}\Omega$ and 80 respectively.

Thus,

$$R_L = \frac{2 \times 100 \text{ k}\Omega \times 40}{80 - 40} = 200 \text{ k}\Omega.$$

Let R_L be the preferred value of $220 \text{ k}\Omega$.

Cathode resistor. A value of $220 \text{ k}\Omega$ provides a low common mode gain while allowing a reasonable cathode current of 0.36 mA .

Reference supply. The 85A2 reference tube requires an operating current of 6 mA for optimum performance. This can be provided from the 150 V supply through a $10 \text{ k}\Omega$ resistor.

Ripple voltage. The 100 c/s ripple voltage has an estimated value of 1 V peak-to-peak at the output of the L - C filter. This

is reduced by the factor $1/\mu A k$ to 12.5 mV by the action of the regulator. At the ripple frequency, k can be made equal to unity by using a capacitor C_B to bypass the voltage dividing chain. The magnitude of the ripple voltage is thus of the order of 6 mV at full load.

In Fig. 8.27 the output voltage of the regulator is plotted against load current. The broken line indicates the series valve grid-cathode voltage required to maintain the load current.

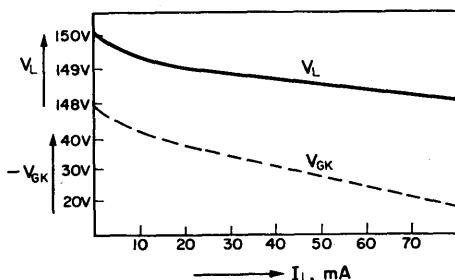


FIG. 8.27. Performance of Design Example 8.5. Output voltage is plotted against load current. The broken line indicates the series valve grid-cathode voltage V_{GK} required to maintain the load current.

8.12. TRANSISTOR SERIES REGULATOR

It is a frequent requirement, particularly with transistor systems, to derive several low impedance voltage sources from the main supply rail.

DESIGN EXAMPLE 8.6

Required, a transistor series regulator to provide 60 mA at -5 V from a -15 V stabilized supply. The nominal output impedance should be 0.1Ω .

The excess voltage is developed across a compound emitter follower. Referring to Figs. 8.21 and 8.22, it is seen that the main change in output voltage from such a circuit, as the load current is varied, is due to the change in V_{BE} required to maintain

the load current. In the circuit of Fig. 8.28 the output voltage is compared with a reference voltage, using a longtail pair. The difference voltage is amplified and applied to the series element so as to offset changes in V_{BE} .

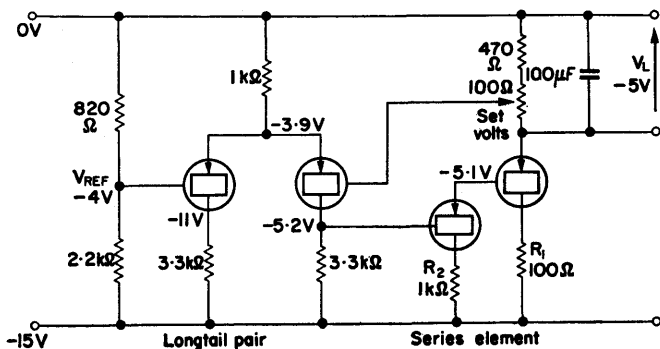


FIG. 8.28. Circuit diagram of Design Example 8.6.

Series element. The output transistor must be capable of dissipating $10\text{ V} \times 60\text{ mA} = 600\text{ mW}$. The maximum collector dissipation of an OC84 transistor with a cooling clip, and at 35°C , is 350 mW . A series resistor in the collector will reduce the collector dissipation and also limit the current under short circuit conditions. A suitable value is $100\ \Omega$ which will drop 6 V of the 10 V excess voltage when the load current is 60 mA . This reduces the collector dissipation to 240 mW at full load.

If an OC44 is used to drive the output transistor, the overall current gain of the pair is 5000. As the input base current required for full load current is then only $12\ \mu\text{A}$, loading on the difference amplifier will be small. The output resistance R_s of the series element is approximately $5\ \Omega$, due to the change in V_{BE} with load current.

Difference amplifier. The output resistance of the closed loop system is

$$R_{\text{out}} = \frac{R_s}{1 + A_v k},$$

where R_s is the output resistance of the series element alone, and k is the fraction of the output voltage fed back.

A suitable value for k is 0.8, making $V_R = 0.8 V_o = 4$ V. For $R_s = 5 \Omega$, the voltage gain required to make $R_{out} = 0.1 \Omega$ is

$$A_v \doteq R_s/R_{out} k \doteq 63.$$

For a long tail pair,

$$A_v = \frac{g_m R_L}{2} \text{ [from eqn. (6.23)],}$$

or,

$$R_L = 2A_v/g_m = 3.1 \text{ k}\Omega \text{ (for } g_m = 40 \text{ mA/V).}$$

Collector resistors of $3.3 \text{ k}\Omega$ ensure that the necessary gain is attained.

Emitter resistor. As the reference voltage is -4 V the emitter voltage will be slightly less negative at -3.9 V. A $1 \text{ k}\Omega$ emitter resistor fixes the total collector current at 4 mA . Transistor T_2

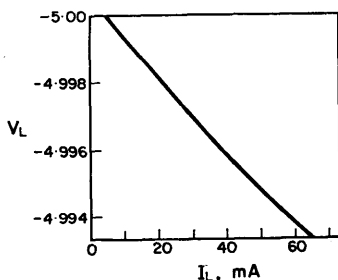


FIG. 8.29. Closed loop series stabilizer output voltage plotted against load current.

passes 3 mA to give a collector voltage of approximately -5 V required for the input of the compound emitter follower stage. The 1 mA in the other collector resistor produces a voltage of -11 V at the collector of T_1 . Thus, both transistors are operating in the linear range.

In Fig. 8.29 output voltage is plotted against load current for the closed loop series stabilizer. It indicates a nominal output resistance of $0.09\ \Omega$ at the full load current of 60 mA.

8.13. OUTPUT TRANSISTOR PROTECTION

If the output of a series stabilizer is short circuited, unless the current is limited, the output transistor can be destroyed by excessive dissipation. In the previous example, the collector

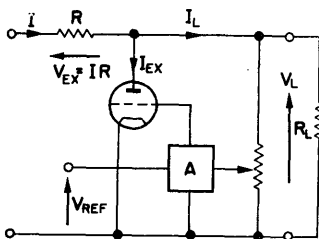


FIG. 8.30. Shunt stabilizing circuit. The output voltage controls the excess current drawn through the shunt element, such that under all load conditions I is constant.

resistors protect the compound emitter follower stage, under overload conditions, by dropping the collector voltage and bottoming the transistors.

Another form of protection, commonly in use, employs a network that is switched by excessive current and reduces the input voltage of the series element to zero. The output transistor is reverse biased eliminating possibility of damage.

Shunt Stabilizers

This family of regulators maintains the output voltage constant, by drawing a constant current from the supply. Referring to Fig. 8.30 the excess current, $I_{EX} = I - I_L$, is taken from the shunt element in a manner similar to a discharge tube supply.

The shunt element can be either a valve or a transistor. The excess voltage is dropped across R which may be a separate resistor or the inherent resistance of the unregulated supply.

8.14. CONSTANT CURRENT SUPPLIES

Just as a constant voltage supply can be obtained from an amplifier with voltage (shunt) feedback, a constant current supply can be obtained from an amplifier with current (series) operated feedback. This is discussed in Chapter 7. The constant current devices of Chapter 5 are elementary forms of such supplies.

CHAPTER 9

Oscillators

Introduction

An electronic oscillator may be described as a device which, whilst obtaining its power from a d.c. source, provides an alternating output without changing its circuit configuration by means of mechanical switching. Such a definition thus excludes rotating machinery and vibrators, etc.

Oscillators fall into two classes; firstly, those which provide a sinusoidal output, and secondly, "relaxation" types whose outputs have a large harmonic content. This latter class is dealt with in Chapter 10 on waveform generators.

9.1. SINUSOIDAL OSCILLATORS—BASIC CONSIDERATIONS

Figure 9.1 represents a current source having resistance R_s , feeding a parallel circuit of R_L , C and L . The current $i(s)$ need not be a specific input but could be noise signals due to thermal agitation or switching transients, etc.

$$v(s) = Z \cdot i(s) \quad (9.1)$$

$$= \frac{i(s)}{G_s + G_L + sC + (1/sL)}. \quad (9.2)$$

Multiplying through by s/C ,

$$v(s) = \frac{i(s) (s/C)}{s^2 + [s(G_s + G_L)/C] + (1/LC)}. \quad (9.3)$$

The denominator of eqn. (9.3) is the characteristic equation of the circuit, and the performance of the circuit is principally determined by its roots. Thus, let

$$s^2 + \frac{s(G_S + G_L)}{C} + \frac{1}{LC} = 0. \quad (9.4)$$

Solving this equation,

$$s = -\left(\frac{G_S + G_L}{2C}\right) \pm j \sqrt{\left[\frac{1}{LC} - \left(\frac{G_S + G_L}{2C}\right)^2\right]}. \quad (9.5)$$

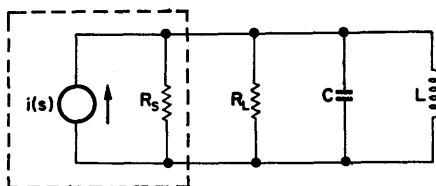


FIG. 9.1. A current source of resistance R_s , feeding a parallel circuit of R_L , C and L .

There are therefore two roots of the form

$$s_1 = -\alpha + j\omega \quad \text{and} \quad s_2 = -\alpha - j\omega, \quad (9.6)$$

and the solution is

$$v(t) = A \exp(-\alpha + j\omega)t + B \exp(-\alpha - j\omega)t. \quad (9.7)$$

The nature of s_1 and s_2 is largely determined by the term $(G_S + G_L)$. Thus, if $(G_S + G_L) = 0$, $s = j\sqrt{1/LC}$ and denoting $1/LC$ by ω_0^2 ,

$$s_1 = +j\omega_0 \quad \text{and} \quad s_2 = -j\omega_0.$$

Hence, for $G_S = G_L$,

$$v(t) = A \exp(j\omega_0 t) + B \exp(-j\omega_0 t), \quad (9.8)$$

and the solution represents an oscillation of ω_0 radians per second, of constant amplitude.

More generally, where $(G_S + G_L)$ does not equal 0, given a disturbing signal, oscillations will commence if the roots s_1 and s_2 have imaginary parts, i.e. if in eqn. (9.5), $1/LC$ is greater than $[(G_S + G_L)/2C]^2$. Furthermore, the amplitude of oscillation will increase with time if $(G_S + G_L)$ is less than 0, which implies that G_L is negative. The concept of a negative value of G_L means that energy is supplied to overcome the loss resistance that is always associated with a tuned circuit.

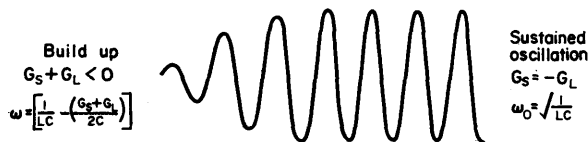


FIG. 9.2. Build-up of an oscillation. The condition for commencement of oscillation is that $G_S + G_L$ is negative, and the amplitude stabilizes when $G_S = -G_L$.

From these considerations, the requirements for a build-up of oscillation, as shown in Fig. 9.2, are as follows:

- (a) A negative resistance component to compensate for tuned circuit losses and provide a divergent oscillation.
- (b) A variable resistance component which reduces the real part of the roots to zero when the required amplitude is reached.
- (c) A frequency determining element.
- (d) An initiating signal.

9.2. NEGATIVE RESISTANCE

Defining a negative resistance as an element through which current decreases as the voltage across it increases, it may be represented on a current-voltage characteristic. Thus, in Fig. 9.3, the part of the curve lying between *A* and *B* is a negative resistance region having a slope of $-G$.

Any device whose current-voltage characteristics include such a region, possesses one of the requirements for oscillation, and by suitable circuit arrangement may be used as an oscillator.

As examples of such devices there are:

- (a) Dynatron Oscillator using the tetrode negative resistance characteristic.
- (b) The Transitron Oscillator using a pentode with screen and suppressor grids connected.
- (c) Solid state devices such as point-contact transistors, thermistors and tunnel diodes.

The Dynatron and Transitron oscillators are now mostly of historical interest, but the tunnel diode is becoming widely used for high frequency oscillators in the range 100 Mc/s to 10kMc/s.

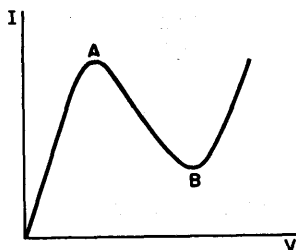


FIG. 9.3. Current-voltage curve showing a negative resistance region AB , where, as the voltage increases the current decreases.

Alternatively, a negative resistance can be obtained by feedback connection of an amplifier. From eqn. (7.6), the output impedance of an amplifier with feedback is written as:

$$Z_{\text{out}} = \frac{Z_{oA}}{1 - A\beta}, \quad (9.9)$$

which is negative for a loop gain $A\beta$ greater than unity. It is this method of obtaining negative resistance which is now most commonly used in the design of oscillators.

Sinusoidal oscillators of the feedback type fall into two classes, inductance-capacitance types, and resistance-capacitance (phase-shift) types. These are considered in detail later in this chapter.

9.3. AMPLITUDE STABILIZATION

It was shown in § 9.1 that for oscillations to build up it is necessary that G_L should be negative and greater than G_S . In other words, the damping term of eqn. (9.4) should be negative. In addition the value of G_L must decrease with increasing amplitude of oscillation until, at the required amplitude, $G_S = -G_L$, making the damping term zero.

Alternatively, referring to eqn. (9.9) for feedback amplifiers, for the build-up condition the loop gain $A\beta$ should be greater than unity, and decrease until it reaches unity when the correct amplitude of oscillation is reached. Given a constant feedback factor β , this implies that the amplifier gain must decrease as the signal amplitude increases, and to achieve this some non-linear element is necessary.

Grid Leak Stabilization

In tuned L - C oscillators, a common method of varying gain with signal amplitude, and thus providing oscillator limitation, is by the use of a grid leak. The required non-linearity is provided

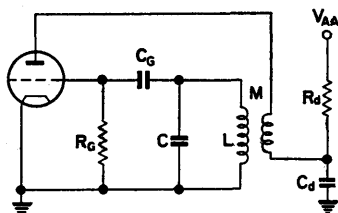


FIG. 9.4. Circuit diagram of a tuned grid oscillator employing grid leak amplitude stabilization. R_D and C_D are decoupling elements.

by the bottom bend of the valve I_A/V_G characteristic. In Fig. 9.4 which represents a tuned grid oscillator, C_G and R_G form the grid leak combination, the time constant of which is chosen to be much greater than the period of oscillation $1/f$. It should not, however, be so great that changes in operating conditions cannot

be accepted without affecting circuit performance. In this example, which is typical of a local oscillator for a superheterodyne receiver at medium frequency, say 1 Mc/s, suitable values would be $R_G = 1 \text{ M}\Omega$, and $C_G = 100 \text{ pF}$, with a time constant of 10^{-4} sec. This is sufficiently long compared with the oscillatory period of 0.68×10^{-6} sec for a local frequency of 1.45 Mc/s.

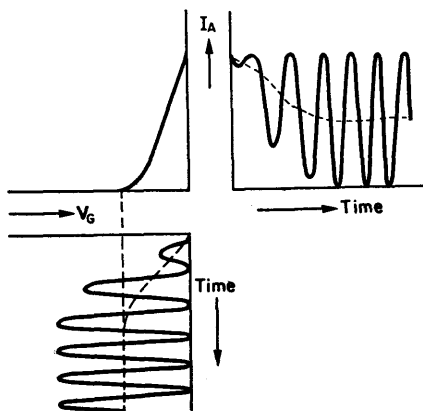


FIG. 9.5. Build up of oscillation with grid leak amplitude stabilization, after the oscillator is switched on at time $t = 0$.

The amplitude stabilizing effect of the grid leak may best be explained with reference to Fig. 9.5 showing a typical build up of oscillation. The effective g_m is given by the slope of the I_A/V_G curve, which is high at $V_G = 0$ and becomes progressively lower as the grid bias is carried more negative. The grid bias is determined by the charge on C_G . Grid current flows on positive peaks of grid signal voltage and charges the capacitor. Due to the CR time constant the charge is additive, and the bias is carried negative thus reducing the gain of the amplifier. The process continues until the g_m is just sufficient to maintain oscillation when the amplitude stabilizes. Should now the gain become reduced, instantaneously the positive signal peaks would cease to carry the grid positive with respect to the cathode, and no

grid current would flow. Some part of the charge on C_g would then leak away, and the effective grid bias would be reduced until the positive peaks again caused grid current to flow. Operation would then stabilize at a smaller amplitude of oscillation.

This form of operation is under class C conditions with the operating grid bias beyond cut-off. It causes a discontinuous anode current to flow, but a tuned circuit having a reasonably high Q ensures that the anode voltage is sinusoidal, by providing a low impedance path for harmonic frequencies.

Squegging

At the point of amplitude-stable-oscillation, the time constant is such that, the amount of charge leaking away from the capacitor between positive signal peaks is just equal to the amount that is restored when grid current flows. If the time constant is too great, and signal amplitude is excessive, more charge is supplied by grid current than is allowed to leak away between peaks, and the valve is quickly biased to a negative voltage much greater than the cut-off point. Anode current then ceases and oscillations cannot be maintained. The capacitor gradually discharges through the grid leak resistor, until the bias is low enough to allow anode current to flow and oscillations to recommence. The cycle repeats itself and results in intermittent bursts of oscillations known as *squegging*. This condition can normally be prevented by careful choice of grid leak values. When the oscillator is used in a radio receiver, a large h.t. decoupling resistor also helps to prevent it. Such a resistor causes the oscillator anode voltage to rise with a decrease in anode current, thus moving the cut-off voltage to a higher negative value.

9.4. SURVEY OF FEEDBACK L - C OSCILLATORS

The most general type of oscillator is the tuned anode-tuned grid arrangement shown in Fig. 9.6. Only the signal paths are drawn, and feedback is seen to be via the anode to grid capacitance. Figure 9.7 similarly represents four commonly encoun-

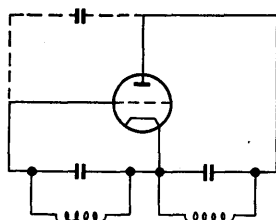
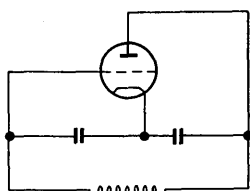


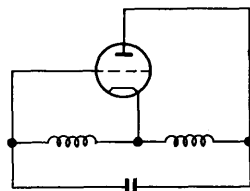
FIG. 9.6. Tuned anode-tuned grid oscillator. Feedback is present through C_{ag} the anode to grid capacitance.



$$\omega^2 = 1/L \frac{C_1 C_2}{C_1 + C_2}$$

$$g_m = g_a C_2 / C_1$$

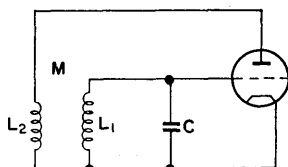
(a) Colpitts



$$\omega^2 = \frac{1}{(L_1 + L_2 - 2M)C}$$

$$\mu = (L_1 + M) / (L_2 + M)$$

(b) Hartley

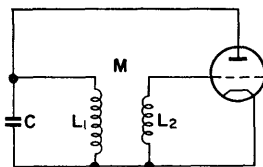


$$\omega^2 = 1/[L_1 C (1 - A)]$$

$$M = - \left[\frac{L_2 A}{\mu(1 - A)} + \frac{CR}{g_m} \right]$$

Where R is the effective series primary resistance, and $A = L_2 R / L_1 r_a$

(c) Tuned grid



$$\omega^2 = 1/L_1 C$$

$$g_m = \frac{1}{M} (g_a - G)$$

Where G is the shunt conductance across the tuned circuit

(d) Tuned anode

FIG. 9.7. Four commonly encountered oscillator types.

tered oscillators which are variations on this basic circuit arrangement.

Associated with each circuit are the relevant equations defining the frequency and the conditions for maintenance of oscillation.

The tuned transformer types of oscillator are extensively used as local oscillators in radio receivers. The tuned anode is more stable to h.t. fluctuations than is the tuned grid and in addition has less harmonic content and provides a greater amplitude output. The tuned grid, however, has a more constant amplitude when the oscillator frequency is varied over its tuning range. For use at v.h.f. the Colpitts type is usually preferred, although the Hartley oscillator may also be used at frequencies in excess of 40 Mc/s. Two common ways of obtaining the operating conditions for these circuits are:

- (a) to find the condition under which the loop gain is unity,
- (b) to determine the nodal or circuital equations and equate the determinant to zero. (A brief introduction to determinants is given in Appendix A.)

Both methods are demonstrated in the two design examples which follow.

9.5. THE TUNED ANODE OSCILLATOR

Two circuit arrangements of the tuned anode oscillator are given in Fig. 9.8. They differ in the manner in which h.t. is fed to the anode. In the parallel feed case the effect of R is to reduce

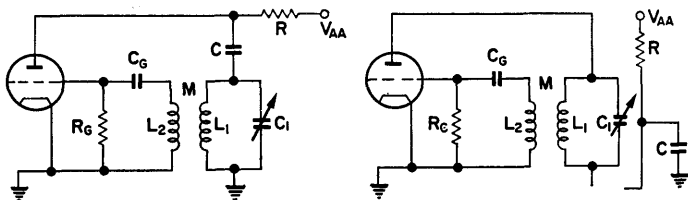


FIG. 9.8. Shunt and series fed tuned anode oscillators.

amplitude variation, as the frequency is changed, but has the disadvantage that it damps the tuned circuit.

Design Considerations

To determine the operating conditions the circuit of Fig. 9.7d is redrawn as the small signal equivalent network of Fig. 9.9, in

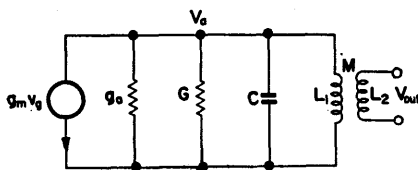


FIG. 9.9. Small signal equivalent network of Fig. 9.7d.

which G represents the effective shunt conductance across the tuned circuit. The equations of this network are written as:

$$-g_m v_g = v_a \left(g_a + sC + G + \frac{1}{sL} \right),$$

$$v_{out} = -\frac{sM}{sL_1} v_a = -\frac{M}{L_1} v_a.$$

For unity loop gain, $v_o = v_g$ and

$$\frac{M}{L_1} g_m + g_a + sC + G + \frac{1}{sL_1} = 0.$$

Multiplying through by sL_1 ,

$$sMg_m + sL_1g_a + s^2L_1C + sL_1G + 1 = 0,$$

and in terms of real frequency,

$$-\omega^2 L_1 C + 1 + j\omega(L_1 g_a + L_1 G + Mg_m) = 0.$$

Equating real components,

$$\omega^2 = 1/L_1 C. \quad (9.10)$$

Equating imaginary components,

$$g_m = -\frac{L_1}{M}(g_a + G). \quad (9.11)$$

Thus, the circuit will oscillate at a frequency $f = 1/[2\pi \sqrt{LC}]$ if the effective g_m of the valve is $-(L_1/M)(g_a + G)$. In this latter expression, the negative sign is associated with the mutual inductance and indicates that oscillation will only occur for one connection of the feedback winding.

Tight coupling and low values of M are helpful in maintaining frequency stability. However, the tuned circuit should have a high Q to reduce the harmonic content of the oscillation and accordingly L_1 (in Fig. 9.9) is made large. Since $M = k \sqrt{(L_1 L_2)}$, this implies a low value of L_2 . Another consideration which requires that the grid inductance should be small is that, with the stray capacitances associated with it, its resonant frequency should be much greater than the highest frequency at which the circuit is to oscillate. Methods have been suggested⁽³⁰⁾ for calculating the inductance of the feedback winding but these in general yield values somewhat smaller than required. In practice, the number of turns of the feedback winding is initially made one-third to one-half of the number of turns of the main winding. This usually gives an inductance greater than that actually required and the final adjustments are made experimentally.

Choice of a Valve

The choice of a valve for use as a local oscillator in a radio receiver is somewhat limited because composite valves are commonly employed. As an example the ECH81 triode-heptode has a triode section specifically designed to have the correct characteristics for use as an oscillator, while the heptode section is used for frequency changing purposes. The valve manufacturer's data sheets usually indicate the correct electrode voltages, leak resistance and grid current required when such a valve is to be used as an oscillator. Where a separate valve is to be used, one should be chosen having a high value of g_m and r_a . A high r_a

tends to make the frequency of oscillation more independent of valve parameters, and hence more stable, while a high value of g_m provides greater ease of oscillation.

Design Steps

1. Calculate the inductance which, with the selected variable capacitor, will resonate over the required frequency range.
2. Make the grid winding have one-half the turns of the primary winding. Since inductance is proportional to the square of the turns, L_2 is thus $L_1/4$.
3. Determine the value of G , the effective shunt conductance across the tuned circuit, and with a knowledge of the effective g_m and r_a of the valve, from eqn. (9.11) evaluate M .
4. Knowing M , L_1 and L_2 , calculate the coupling coefficient k .
5. Choose C_G which with the recommended grid leak resistor will have a time constant 4 or 5 times $1/f_{\min}$.
6. Select an anode resistor to give the correct operating anode voltage and decouple it.

DESIGN EXAMPLE 9.1

Required, a series fed, tuned anode oscillator using the triode section of an ECH81, covering the frequency range 1–2 Mc/s. The supply voltage is 250 V.

From the valve data sheets, with $V_A = 100$ V, recommended operating conditions are obtained with $I_G = 200$ μ A and $R_G = 47$ k Ω . The effective g_m is given as 650 μ A/V, $r_a = 6$ k Ω , and the mean anode current $I_A = 4.5$ mA.

Let the selected variable capacitor, with strays, tune over the range 50–450 pF. With an inductance of 100 μ H, a frequency range of approximately 760 kc/s to 2.2 Mc/s is obtainable, which meets the specification. Thus, $L_1 = 100$ μ H and initially make $L_2 = L_1/4 = 25$ μ H.

For a Q of 100 at the top frequency of 2 Mc/s, the resistance of L_1 is $r = \omega L/Q \doteq 12.5$ Ω . The effective shunt conductance across the tuned circuit is Cr/L , which is 6.25 μ mhos at $C = 50$ pF and 56.25 μ mhos at $C = 450$ pF.

From eqn. (9.11) for maintenance of oscillation, M should equal or be greater than $(g_a + G)L/g_m$. If the condition is satisfied for the larger value of G it will be satisfied over the whole tuning range. Thus, since $r_a = 6 \text{ k}\Omega$, $g_a = 166 \text{ }\mu\text{mhos}$,

$$M = \frac{(166 + 56) \times 10^{-6} \times 100 \times 10^{-6}}{650 \times 10^{-6}} = 34 \text{ }\mu\text{H}.$$

The coefficient of coupling

$$k = \frac{M}{\sqrt{(L_1 L_2)}} = \frac{34 \times 10^{-6}}{\sqrt{100 \times 25 \times 10^{-12}}} = 0.68.$$

Grid leak. At the lowest frequency of 1 Mc/s , $1/f = 1 \text{ }\mu\text{sec}$. From the data sheet, the recommended value for R_G is $47 \text{ k}\Omega$.

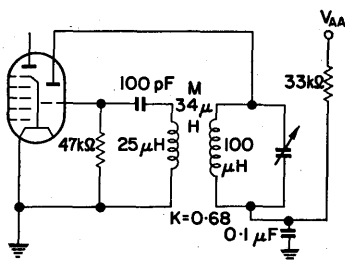


FIG. 9.10. Completed circuit diagram of Design Example 9.1.

If this is used with a capacitor of 100 pF a time constant of $4.7 \text{ }\mu\text{sec}$ is obtained which is sufficiently long.

Anode decoupling. For a V_A of 100 V from an h.t. of 250 V the anode resistor must drop 150 V at the mean anode current of 4.5 mA .

Thus,

$$R = 150/4.5 = 33 \text{ k}\Omega.$$

A $0.1 \text{ }\mu\text{F}$ capacitor is suitable for decoupling and the completed circuit is given in Fig. 9.10.

This treatment has been simplified in order to show the basic approach to oscillator design. No attempt has been made to obtain constant amplitude over the tuning range, nor has provision been made for the "tracking" which would be necessary in a radio receiver local oscillator. An excellent treatment leading to the design of the more sophisticated circuit to meet these requirements is given by Sturley.⁽¹⁶⁾

9.6. COLPITTS OSCILLATOR (TRANSISTOR)

In the case of the valve oscillator it was shown that some non-linearity was required to limit the amplitude of oscillation after the build-up period, and the bottom bend of the I_A/V_G characteristic served this purpose. In a similar manner, when using a transistor, a non-linearity is introduced by allowing the transistor to bottom.

The basic circuit arrangement is given in Fig. 9.11, and the frequency of oscillation is determined by the combination of L ,

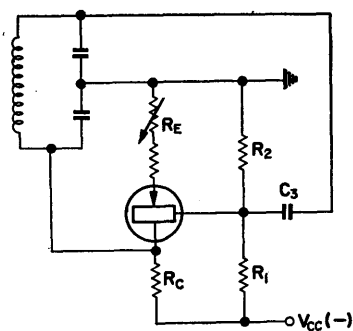


FIG. 9.11. Colpitts transistor oscillator.

C_1 and C_2 . L is provided with an iron dust core to permit accurate frequency adjustment. R_1 , R_2 and R_E give the correct bias conditions, and the variable part of R_E is adjusted to obtain an acceptable waveform.

Design Considerations

In this example the conditions for oscillation are determined using method (b) of § 9.4. An approximate equivalent network is drawn in Fig. 9.12 in which G_1 is the conductance of the collector resistor and R_B represents the effective parallel combination of R_1 and R_2 .

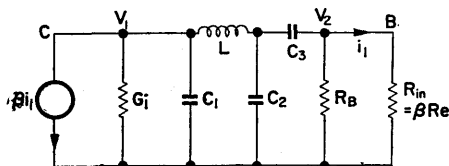


FIG. 9.12. Approximate equivalent network of the Colpitts transistor oscillator. The coupling capacitor C_3 isolates the collector d.c. voltage from the base and is ignored in analysis.

To a first approximation r_{in} may be considered as being supplied from a constant voltage source V_2 . The effective g_m of the transistor is then

$$g'_m = \beta/r_{in} \doteq \beta/\beta R_E \doteq 1/R_E \quad [\text{from eqn. (2.35)}]. \quad (9.12)$$

If C_3 is very large it may be neglected and, writing G_2 for the conductance of the parallel combination of R_B and r_{in} , the equations of the network are:

$$\begin{aligned} \left(G_1 + sC_1 + \frac{1}{sL} \right) v_1 - \frac{1}{sL} v_2 &= -g_m v_2, \\ -\frac{1}{sL} v_1 + \left(\frac{1}{sL} + sC_2 + G_2 \right) v_2 &= 0. \end{aligned}$$

The determinant is:

$$\begin{aligned} s^3 LC_1 C_2 + s^2 (LC_1 G_2 + LC_2 G_1) + s (LG_1 G_2 + C_1 + C_2) \\ + G_1 G_2 + g_m = 0. \end{aligned}$$

Writing this expression in terms of real frequency and equating imaginary terms to zero,

$$\omega^2 = \frac{[LG_1G_2/(C_1 + C_2)] + 1}{LC_1C_2/(C_1 + C_2)} \div \frac{1}{LC_1C_2/(C_1 + C_2)} \\ \left(= \frac{1}{\frac{1}{2}LC} \quad \text{if } C_1 = C_2 \right). \quad (9.13)$$

Equating real terms to zero and substituting for ω ,

$$g_m = \frac{G_1C_2^2 + G_2C_1^2}{C_1C_2} (= G_1 + G_2 \quad \text{if } C_1 = C_2). \quad (9.14)$$

As r_{in} is much greater than R_B , $G_2 \div 1/R_B$.

Hence for the case where $C_1 = C_2$,

$$g'_m = 1/R_B + 1/R_C.$$

But, from eqn. (9.12),

$$g'_m = 1/R_E,$$

Therefore

$$1/R_E = 1/R_B + 1/R_C. \quad (9.15)$$

Choice of Transistor

The main consideration is that of the cut-off frequency of the transistor. Commonly, r.f. transistors are used in fixed frequency oscillator circuits up to 1.25 times the cut-off frequency, while in variable frequency oscillators the limit is usually about 0.8 times f_α .

Design Steps

1. Using expression (9.13), select values for L , C_1 and C_2 to obtain the desired frequency of oscillation.
2. Set up the correct bias conditions by suitable choice of R_1

and R_2 which, with R_E , will determine the mean collector current.

3. Select the value of R_C and using eqn. (9.15) calculate R_E .

DESIGN EXAMPLE 9.2

Required, a Colpitts oscillator operating at 500 kc/s, and using an OC 44 transistor. A supply voltage of -9 V is available.

The tuned circuit. The collector capacitance is effectively across the tuned circuit and is a function of collector voltage. To obtain frequency stability independent of the collector capacitance the tuned circuit capacitors should be relatively large. Let $C_1 = C_2 = 1000$ pF.

From eqn. (9.13),

$$L = 2/\omega^2 C = 200 \mu\text{H}.$$

D. C. biasing. This may be done using emitter resistor stabilization as described in § 2.11. A voltage divider of $R_1 = 10$ k Ω and $R_2 = 2.2$ k Ω will provide a base voltage of -1.5 V and ensures a low d.c. resistance for the base supply. The collector current is then a function of the emitter resistor, and the emitter voltage is also about -1.5 V. Let the mean collector current be initially chosen as 2 mA. With a collector resistor of 2.7 k Ω , the mean collector voltage will be -4.6 V and will thus be able to swing between -1.5 and -7.7 V without distortion.

$$R_B = \frac{R_1 R_2}{R_1 + R_2} = \frac{22 \times 10^3}{12.2} = 1.8 \text{ k}\Omega.$$

From eqn. (9.15),

$$R_E = \frac{R_B R_C}{R_B + R_C} = \frac{1.8 \times 2.7 \times 10^3}{4.5} = 1.08 \text{ k}\Omega.$$

Let R_E be made up of a 330 Ω fixed resistor and a 1 k Ω variable resistor. Final adjustment of the circuit is made by varying this resistor until oscillation is just taking place. This avoids the distortion of the waveform which would otherwise occur if the transistor was overdriven.

9.7. RESISTANCE-CAPACITANCE OSCILLATORS

Due to the size of high value inductances, R - C oscillators have, in the past, been preferred to L - C types for operation at low frequencies. In fact, the use of modern ferrite materials now enables such inductances to be made physically small, so this consideration is no longer of such importance.

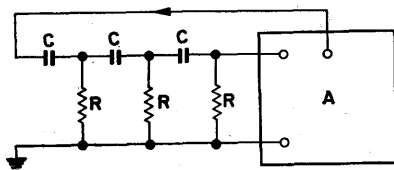


FIG. 9.13. The arrangement of a phase shift oscillator. The C - R network provides a phase shift of 180° and the required amplifier gain is -29 .

The two most common types of R - C oscillators are:

- (a) *Phase shift.* This type of oscillator is illustrated in Fig. 9.13. The feedback network provides a phase shift of 180° at the frequency of oscillation. It can be shown that in this circuit, for equal capacitors and resistors, infinite input impedance and zero output impedance of the amplifier, the condition for maintenance of oscillation is that the gain should be -29 . This is the gain required to compensate for the attenuation of the phase shifting network. The frequency of oscillation of the phase-shift oscillator set up in this manner is $f = 1/(2\pi RC\sqrt{6})$. Tapered networks using different values of C and R and the addition of an extra phase-shifting stage can reduce the attenuation of the feedback path.
- (b) *Bridge type.* The feedback network of the bridge type oscillator provides zero phase shift at the frequency of oscillation. A typical circuit is that of the Modified Wien Bridge which is treated in detail in the next section.

9.8. MODIFIED WIEN BRIDGE OSCILLATOR

For wide range tuneable oscillators the Wien Bridge (or one of its modifications) is frequently used for operation from 1 to 10^7 c/s. This type of oscillator provides a range of frequency

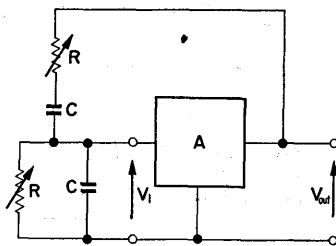


FIG. 9.14. Arrangement of a Wien bridge oscillator. The R - C network provides zero phase shift at the frequency of operation and the required amplifier gain is 3.

variation which is much greater than can be obtained from L - C type oscillators.

Design Considerations

Figure 9.14 illustrates the basic circuit arrangement. Writing $T = CR$, the forward voltage transfer function for the feedback network is:

$$\frac{v_{in}}{v_{out}} = \frac{sT}{(sT)^2 + 3sT + 1},$$

which is the feedback factor β .

The condition for maintenance of oscillation is that the loop gain, $A\beta$ should be unity. That is,

$$\frac{j\omega TA}{(j\omega T)^2 + 3j\omega T + 1} = 1$$

or

$$\omega^2 T^2 + (A - 3)j\omega T - 1 = 0.$$

Equating imaginary terms to zero,

$$A = 3. \quad (9.16)$$

Equating real terms to zero,

$$\omega = 1/CR. \quad (9.17)$$

Thus if the amplifier has zero phase shift, infinite input resistance and zero output resistance, it is required to have a gain of 3 and the frequency of oscillation is given by $\omega = 1/CR$. Since L - C oscillators have their frequency inversely proportional to the square root of LC the Wien Bridge circuit can obviously provide a wider frequency range, and it is for this reason that it is generally preferred for use in laboratory type instruments. By using a ganged variable resistor, a 10 to 1 variation in frequency is readily obtained. In practice it is difficult to obtain perfect matching of the resistors over the complete range, and the amplifier will certainly have a finite output impedance. In addition the gain of the amplifier is likely to vary with frequency, so that it is probable that at some point in the tuning range the conditions for maintenance of oscillation will not be met. To ensure that this does not happen, thus causing oscillations to cease, a non-linear element is usually included in the circuit, acting in such a manner that the gain of the amplifier is always maintained at a suitable level.

Design Steps

1. Design an amplifier having a gain of 3 and with nominally zero phase shift through it.
2. From eqn. (9.17) calculate values of C and R to obtain the correct frequency or range of frequencies.
3. Provide some non-linear element to stabilize the amplifier gain and thus to maintain the conditions required for oscillation.

DESIGN EXAMPLE 9.3

Required, a modified Wien bridge oscillator covering the frequency range 1 to 10 kc/s.

The amplifier. A suitable amplifier to provide a gain of 3 without signal inversion is the common-cathode type described in § 6.4, and illustrated in Fig. 9.15. The gain of such an amplifier is:

$$A = \frac{\mu R_L}{[r_a(r_a + R_L)/(\mu + 1) R_K] + 2r_a + R_L}$$

$$= \frac{\mu R_L}{2r_a + R_L} \quad (\text{for large } R_K) \quad (9.18)$$

$$= \frac{\mu(\mu + 1) R_K R_L}{r_a(r_a + R_L)} \quad (\text{for small } R_K). \quad (9.19)$$

Let the valve chosen be a 12AT7 having $r_a = 10 \text{ k}\Omega$ and $\mu = 50$, and make $R_L = 20 \text{ k}\Omega$.

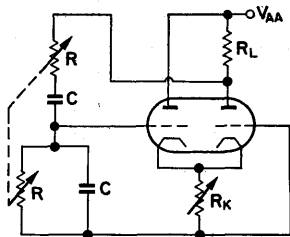


FIG. 9.15. The modified Wien bridge circuit of Design Example 9.3.

Substituting these values in eqn. (9.19) yields that $0.12R_K = 3$.

Thus, for initiation of oscillation, $R_K = 25 \Omega$. An increase in this value initially causes the oscillator to be overdriven and a distorted waveform results.

However, a further increase in R_K causes a reduction in gain due to the increase in cathode bias voltage, $V_K = I_K R_K$, and in

practice R_K is increased from its minimum value until a satisfactory waveform is obtained.

Frequency. Let the selected ganged potentiometer have a maximum value of $50\text{ k}\Omega$. R will be maximum at the lowest frequency, 1 kc/s . Thus, $C = 1/\omega R = 3184\text{ pF}$; make it 3300 pF .

Gain stabilization. In the completed circuit of Fig. 9.16 gain stabilization is achieved by applying negative feedback to the

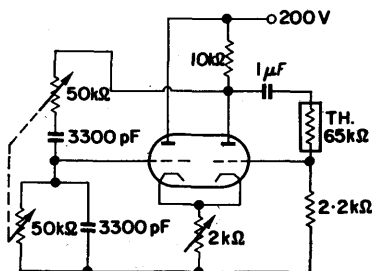


FIG. 9.16. Completed circuit of Design Example 9.3.

second half of the valve via a thermistor. C_1 serves as a blocking capacitor, keeping the anode voltage off the grid.

A thermistor is a non-linear device having a high negative temperature coefficient of resistance, and in this circuit its stabilizing action is as follows. An increase in amplifier gain causes the anode voltage to rise, leading to an increase in current through the thermistor. The resulting increase in temperature reduces the thermistor resistance, which increases negative feedback thus tending to restore the original gain.

9.9. MULTI-RANGE MODIFIED WIEN BRIDGE USING TRANSISTORS

Design Considerations.

As transistors are essentially current operated devices conditions for the maintenance of oscillation may most conveniently

be established by consideration of current flow, instead of voltage as was done in the previous example. Thus, drawing the feedback network as in Fig. 9.17, the current transfer function may be written as:

$$\frac{i_1}{i_2} = \frac{R/(1 + sCR)}{[R/(1 + sCR)] + [(1 + sCR)/sC]}.$$

Denoting CR by T ,

$$\frac{i_1}{i_2} = \frac{sT}{1 + 3sT + (sT)^2}.$$

This is of the same form as the basic equation developed for the valve circuit. If i_1 is the input current and i_2 is the output current of an amplifier of gain 3, the system will oscillate at a

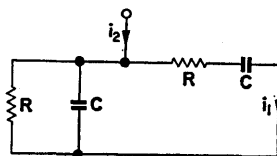


FIG. 9.17. Current, zero phase shift network. For $\omega = 1/CR$, i_1 and i_2 are in phase.

frequency of $\omega = 1/CR$ radians per second. The design steps for this circuit are thus the same as those of the previous example.

DESIGN EXAMPLE 9.4

Required, a modified Wien bridge transistor oscillator covering the frequency range 30 c/s to 30 kc/s.

Current amplifier. A suitable arrangement is a two-stage transistor amplifier with current feedback. This has the required properties of low input resistance and high output resistance, and is illustrated in Fig. 9.18. It is desirable that the input resistance should be much less than R and the output resistance much greater than R . Under these conditions i_2 is assumed to be provided from a constant current source.

The gain of the amplifier with feedback is $A/(1 - A\beta)$, and if A is sufficiently high this equals $1/\beta$. Thus, for maintenance of oscillation, $\beta = 1/3$. The feedback factor β , in this circuit is $R_2/(R_1 + R_2)$ so that R_1 must be made equal to twice R_2 . For

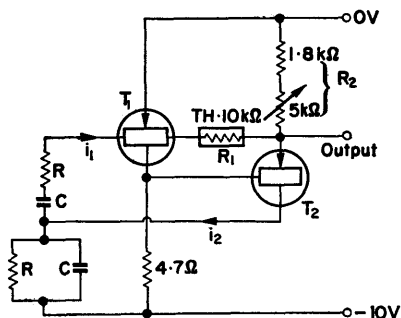


FIG. 9.18. Circuit diagram of Design Example 9.4.

this application 2 G 306 alloy type transistors are suitable and these can be directly coupled as shown. For a supply voltage of -9 V , a nominal current of 2 mA is reasonable for T_1 . A larger current would require a lower value collector resistor, and this would cause an appreciable reduction in gain because of the high input resistance of T_2 . In order to provide an output voltage of 1 V peak-to-peak, a relatively high value for R_2 is required.

Frequency determining components. Let the frequency requirement be provided by three ranges, $30\text{--}300\text{ c/s}$, 300 c/s to 3 kc/s and $3\text{--}30\text{ kc/s}$, and consider firstly the low frequency range. Make $C = 0.5\text{ }\mu\text{F}$, so that at 300 c/s , $R = 1/\omega C = 1.06\text{ k}\Omega$. Similarly, at 30 c/s , $R = 10.6\text{ k}\Omega$. The resistance component of the network may therefore be made up of a fixed resistor of $1\text{ k}\Omega$ and a variable $10\text{ k}\Omega$ resistor in series, as shown in Fig. 9.19. The two variable resistors are ganged, as are the two rotary switches which select the capacitors to be used. By making $C = 0.05\text{ }\mu\text{F}$

the oscillator will tune over the range 300 c/s to 3 kc/s, while for the range 3–30 kc/s a $0.005 \mu\text{F}$ is required.

Gain stabilization. Gain stabilization is achieved by the use of a non-linear feedback circuit as was done in Design Example 9.3. R_1 is a $10 \text{ k}\Omega$ thermistor and, being twice the nominal value

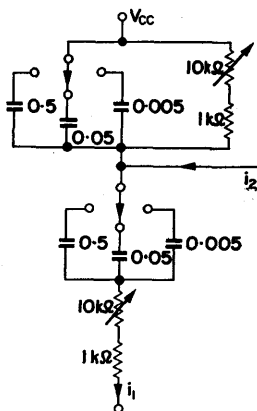


FIG. 9.19. Frequency determining network of Design Example 9.4.

of R_2 , fulfils the condition for the maintenance of oscillation. The variable part of R_2 permits final circuit adjustments to be made.

9.10. FREQUENCY STABILITY

If the loop gain $A\beta$ of an oscillator is unity the circuit will oscillate, and the frequency of oscillation will be that at which the phase shift round the loop is zero. Should any change take place in the phase angle of $A\beta$ then the frequency of oscillation will automatically take up a new value at which the loop phase shift is again zero. Thus for good frequency stability a network should be used which, for a small change in frequency, provides a large change in phase angle. A resonant L - C circuit has this

feature which improves as Q is increased. Figure 9.20 represents the equivalent network of a quartz crystal, and such a device might typically have a Q one thousand times as great as an L - C tuned circuit operating under the same conditions. It is for this reason that quartz crystals are used where a fixed frequency is required with very good frequency stability.

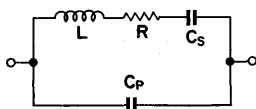


FIG. 9.20. Equivalent network of a quartz crystal.

The Series Resonant Oscillator

A crystal, as represented by Fig. 9.20, has two main resonant frequencies.

- (a) Series resonance with L and C_s .
- (b) Parallel resonance with L and C_p .

For maximum stability the series resonant condition is normally preferred for both crystal and L - C circuits. This is because at series resonance the circuit has low impedance and is consequently less affected by external loading than is the high impedance parallel circuit. In the circuit of Fig. 9.21 representing

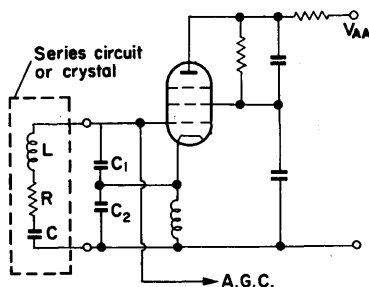


FIG. 9.21. Series resonant oscillator. The values of C_1 and C_2 are much greater than C .

a series resonant oscillator, the frequency determining elements may be either a series tuned circuit or a crystal. Other special steps, taken to improve frequency stability are

- (a) the use of cathode feedback to eliminate Miller capacitance, and
- (b) the use of low reactances across the valve input and output, to mask changes in valve capacitances.

Sandeman⁽³¹⁾ has shown that the input impedance of the valve circuit, looking into the series combination of C_1 and C_2 , is:

$$Z_{in} = -jX_1 - jX_2 - X_1X_2g_m,$$

the third term of which represents a negative resistance. Thus, as established in § 9.1, for oscillations to build up, this negative resistance should be greater than R , the resistance of the series tuned circuit (or crystal). The condition for maintenance of constant amplitude oscillation is that it should equal R , and the frequency of oscillation is given by:

$$f = \frac{1}{2\pi\sqrt{LC}} \sqrt{\left(1 + \frac{C}{C_1} + \frac{C}{C_2}\right)}. \quad (9.20)$$

EXAMPLE. Let the series tuned circuit be made up of a capacitor $C = 250$ pF and an inductance $L = 100$ μ H having resistance $R = 5$ Ω . The resonant frequency of the circuit is thus 1 Mc/s. If $C_1 = 3000$ pF, and $C_2 = 10,000$ pF, then from eqn. (9.20),

$$f = 1 \text{ Mc/s} \times \sqrt{(1 + 0.083 + 0.025)} = 1.053 \text{ Mc/s}.$$

At this frequency, C_1 has a reactance of approximately 50 Ω , and the reactance of C_2 is 15 Ω .

Equating the negative resistance to the resistance of the tuned circuit,

$$X_1X_2g_m = R; \quad 750 g_m = 5 \quad \text{and} \quad g_m = 6.6 \text{ mA/V}.$$

Thus a valve is required having an effective g_m of 6.6 mA/V, and the frequency of oscillation is 1.053 Mc/s.

If a crystal is used instead of the series L - C circuit, the value of R might typically have a value of $100\ \Omega$ as compared to the $5\ \Omega$ of the inductance in this example. Different values of C_1 and C_2 are then required; these capacitors being given values as large as possible consistent with the conditions for maintenance of oscillation. The cathode inductance L_2 is chosen having a low d.c. resistance and a reactance high compared with the reactance of C_2 .

Automatic Gain Control

As in previous examples it is necessary that the valve g_m should be large enough to satisfy the condition for build-up of oscillation, falling to a lower value for constant-amplitude-operation. The use of automatic gain control with a variable- μ pentode meets this requirement, and enables the valve to be operated under Class A conditions. Automatic gain control is used in all cases where an extremely low harmonic content of the output waveform is required, another factor contributing to frequency stability. To provide the automatic gain control, the output signal is amplified and rectified, in some auxiliary circuit, and then fed back as a d.c. voltage which controls the bias, and hence the g_m of the valve.

9.11. THE TUNNEL DIODE OSCILLATOR

Figure 9.22 represents the voltage-current characteristic of a typical tunnel diode, the region between P and V displaying the properties of negative resistance. Provided that the diode is operated in this region it may be used as the active element of an oscillator, and, due to its very low inherent capacitance, frequencies in the range 100 Mc/s to 10 kMc/s are possible. The small signal equivalent network of a tunnel diode, when suitably biased to operate in its negative resistance region, is given in Fig. 9.23. The effective negative resistance shunts the junction capacitance c , and this parallel combination is in series with r_s , the series resistance of the diode and l_s the lead inductance. At

the frequencies to be used, the inductance of the leads is significant and must be taken into account when deciding what total inductance is required to obtain the desired frequency of os-

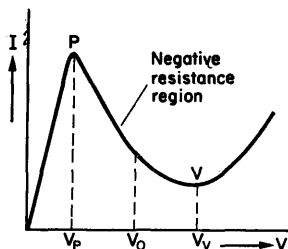


FIG. 9.22. Voltage-current characteristic of a typical tunnel diode. V_p is the peak voltage and V_v the valley voltage.

cillation. With the extra inductance added, the equivalent network may be redrawn as in Fig. 9.24 which is similar to the network of Fig. 9.2 from which the conditions for oscillation were

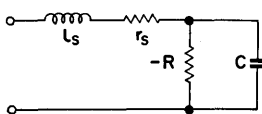


FIG. 9.23. Small signal equivalent network of a tunnel diode.

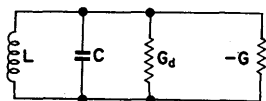


FIG. 9.24. Equivalent network of a tunnel diode, with external inductance, for the determination of the conditions for oscillation.

derived. G_d is the effective shunt conductance across the tuned circuit; $G_d = 1/R_d = Cr/L$. By the same considerations as before, oscillations will build up if G_d is less than $-G$.

Design Considerations

If the condition for build-up is satisfied, in the absence of an external load, the amplitude of oscillation will increase until the voltage peaks are carried into the region of positive resistance of the characteristic. In this condition the waveform will be highly distorted and a relatively low frequency of oscillation will result. If L is decreased in value, the dynamic resistance of the tuned

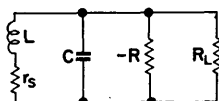


FIG. 9.25. Tunnel diode equivalent network with external load.

circuit is reduced and the load on the diode increased. This has the effect of reducing the amplitude of oscillation thus confining it to the negative resistance region. At the same time, the frequency increases as L is further reduced until, when L has a value which makes G_d equal to $-G$, the maximum frequency of oscillation is obtained. This frequency, the cut-off frequency, is given by:

$$f_c = \frac{1}{2\pi RC} \sqrt{\left(\frac{R}{r_s} - 1\right)}, \quad (9.21)$$

where R is the effective negative resistance, and C and r_s are the diode capacitance and series resistance. Instead of reducing L , the amplitude of oscillation may be restricted by an external load across the parallel tuned circuit which reduces the shunt conductance G_d . This may be represented by the approximate equivalent network of Fig. 9.25 provided that R_L is much greater than r_s .

In practice, oscillations are confined to the negative resistance region by the adjustment of such a load and also by adjusting the d.c. bias across the diode.

Since as loading is increased, the amplitude of oscillation and the frequency decrease, the available output power may be

expressed as a function of frequency. This is done in the following equations given by McCann.⁽³²⁾

Frequency of oscillation

$$f = \frac{1}{2\pi\sqrt{LC}} \quad (\text{if } R \gg r_s). \quad (9.22)$$

Load resistance

$$R_L = \frac{V_p'}{mI_p'}. \quad (9.23)$$

Power into load

$$P_L = \frac{mV_p'I_p'}{8} \mu\text{W} \quad (9.24)$$

where V_p' and I_p' are peak-to-peak values of voltage and current in millivolts and milliamps respectively. The symbol m denotes the fraction of output appearing in R_L and is given by:

$$m = 1 - \frac{2.5 V_p'}{300} \left(\frac{f}{f_c} \right)^2. \quad (9.25)$$

These expressions are not exact since they are based on an approximation for the negative resistance of the tunnel diode. They do, however, provide a useful first approach to the design of an oscillator which may be finally adjusted experimentally.

For germanium tunnel diodes, the maximum peak to peak voltage swing within the negative resistance region is $V_p - V_p'$, equals about 300 mV, and this can only be supplied to a load at frequencies less than $0.63f_c$. At frequencies greater than this, but less than f_c , the output voltage is reduced.

For gallium arsenide diodes, the maximum voltage swing is somewhat greater than 300 mV. Since for a given type the voltage swing differs little from one component to another, choice of diodes is limited to their available peak current, and hence the oscillatory power which they are capable of providing.

EXAMPLE. Consider an S.T.C. JK 30A germanium tunnel diode for operation as a sinusoidal oscillator at 500 Mc/s. From the

manufacturer's data sheets, for a typical unit:

Minimum lead inductance $I_s = 1.0 \text{ m}\mu\text{H}$.

Junction capacitance $c = 40 \text{ pF}$.

Peak current $I_p = 5.0 \text{ mA}$.

Valley current $I_v = 0.6 \text{ mA}$.

Peak voltage $V_p = 60 \text{ mV}$.

Valley voltage $V_v = 320 \text{ mV}$.

Cut-off frequency $f_c = 1100 \text{ Mc/s}$.

For maximum output power, the oscillatory voltage should extend over the full negative resistance region, giving a peak-to-

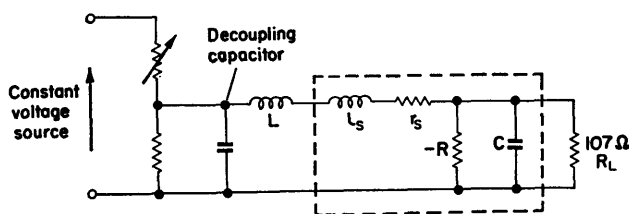


FIG. 9.26. Equivalent network of the tunnel diode oscillator. The variable resistor is used to set the operating bias point.

peak swing of 260 mV. The bias point should therefore be set at about 190 mV and made adjustable, as shown in Fig. 9.26.

From eqn. (9.25),

$$m = 1 - \frac{650}{300} \times \frac{25}{121} = 0.55.$$

From eqn. (9.23),

$$R_L = \frac{260}{0.55 \times 4.4} = 107.$$

From eqn. (9.24),

$$P_L = \frac{0.55 \times 260 \times 4.4}{8} = 79 \mu\text{W}.$$

An increase in the value of the load resistance would reduce loading on the diode and cause the voltage to swing into the positive resistance region. Oscillation would then take place in a relaxation mode. A decrease in the load resistance would result in a reduced output voltage, and hence a reduction in oscillatory power.

CHAPTER 10

Waveform Generators

Introduction

When the loop gain of an oscillator is very much greater than unity, the output waveform is not sinusoidal, but varies between two limits. Such non-linear oscillators have been examined by Van der Pol⁽³³⁾ and are known as relaxation oscillators.

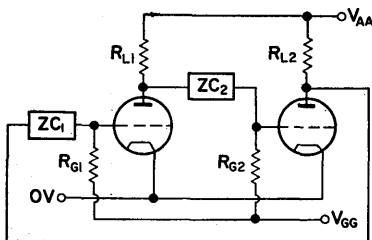


FIG. 10.1. Two-stage amplifier with output connected to input, thus forming a positive feedback system. The form taken by the coupling impedances, Z_{C1} and Z_{C2} , determine the class of multivibrator.

The most important class of relaxation oscillators is the multivibrator family which may be divided into three main groups as follows:

- Astable multivibrators (A.M.V.), having no stable state.
- Monostable multivibrators (M.M.V. or flip-flop), having one stable state.
- Bistable multivibrators (B.M.V. or binary), having two stable states.

Each of these types can be considered as a two-stage amplifier with output connected to input, as shown in the circuit diagram of Fig. 10.1.

10.1. GENERAL SURVEY OF THE THREE TYPES

A.M.V.

If the coupling impedances Z_{C1} and Z_{C2} are capacitors and $V_{GG} = 0$ the device is an astable multivibrator. Because of the

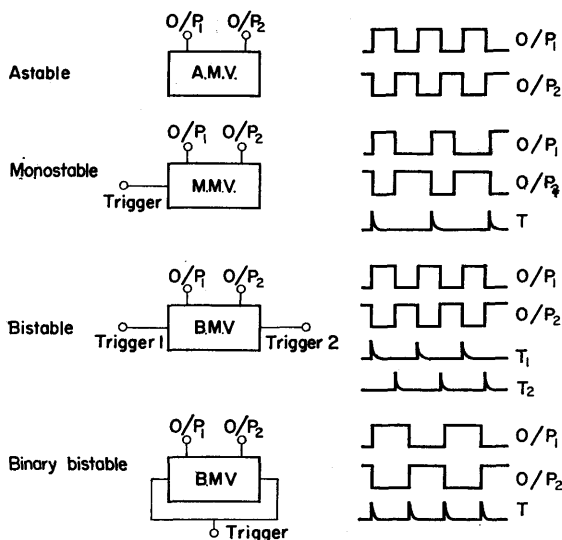


FIG. 10.2. Basic types of multivibrator.

a.c. coupling it has no stable state and will provide an output voltage of rectangular form, the duration of which is controlled by the time constants of the grid circuits.⁽³⁴⁾ Applications of the A.M.V. include:⁽³⁵⁾

- (a) *Timing oscillator.* The symmetrical A.M.V. can be used as a "clock generator" producing X and Y pulses, each anode providing one output. (See Fig. 10.2.)

- (b) *Variable frequency oscillator.* The frequency of oscillation may be controlled electronically by varying V_{GG} or mechanically, by changing component values in the grid network.
- (c) *Frequency divider.* The A.M.V. can be readily synchronized to an input signal and used for counting down.
- (d) *Harmonic generation.* Because of the rapid transitions of the waveform high order harmonics are generated.

B.M.V.

If the coupling impedances of Fig. 10.1 are resistive and V_{GG} is taken to a negative value so that either valve may be held cut-off, the bistable conditions can be obtained.⁽³⁶⁾ It can be arranged that either valve is conducting, holding the other valve beyond cut-off, and such a stable state can be maintained indefinitely. To change the state of the device a trigger signal must be introduced. The B.M.V. is the most widely used type of multivibrator, and among its many applications there are:⁽³⁶⁾

- (a) *Counting.* As two successive input signals are necessary to restore the circuit to its original state, it may be used for counting by two.
- (b) *Memory element.* The two alternative states of the B.M.V. may be designated "no" (or "0") and "yes" (or "1") and this facility is used in shift register circuits.

M.M.V.

If one coupling impedance is resistive and the other is capacitive the device will have one stable state. The valve with capacitive coupling is held "on", while the other valve is held "off" by the resistive coupling and negative V_{GG} . When triggered, a single output pulse is obtained, of duration determined by the grid time constant. The M.M.V. is commonly used for:

- (a) *Pulse forming.* An input pulse can be transformed into a pulse of controlled duration and amplitude.

- (b) *Counting.* The M.M.V., having once been triggered, is insensitive to further pulses until it reverts to its former state. This property makes the device useful as a counter.
- (c) *Delay.* The trailing edge of the output waveform may be used to provide a pulse delayed from the input pulse. Since the duration of the output waveform can be controlled, as in the A.M.V., a variable delay is obtainable.

Although valves were the active elements originally employed in multivibrators, the transistor has proved to be more suitable in nearly all applications. Several hundred transistors may be operated for the same dissipation as one valve, and since both *nnp* and *pnp* types are available, and direct coupling may be used, the transistor is more versatile than the valve. Most of the examples of this chapter are therefore devoted to the use of transistors.

10.2. TRANSISTOR SWITCHING

Direct Coupling

In Fig. 10.3a T_1 and T_2 are transistors having the typical characteristics of Fig. 10.3b. When T_1 is conducting T_2 is "off", because the bottoming voltage of T_1 is less than the conducting voltage of T_2 .

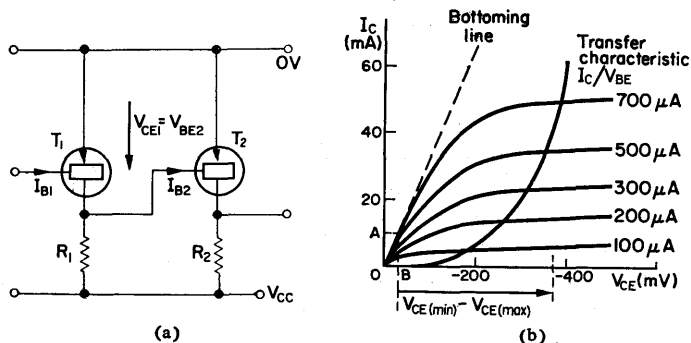


FIG. 10.3. Direct coupled transistors. When T_1 is conducting T_2 is off and vice-versa.

If the base of T_1 is supplied with a current of 1 mA, and if $V_{CC}/R_1 = 10$ mA, then T_1 will bottom at approximately 30 mV, which is less than the conducting value of V_{BE} for T_2 . If I_{B1} becomes zero, the collector voltage of T_1 will try to approach V_{CC} , but the base of T_2 will hold the voltage to approximately 0.4 V. The major part of the current previously flowing into the collector of T_1 will now be flowing into the base of T_2 . Thus,

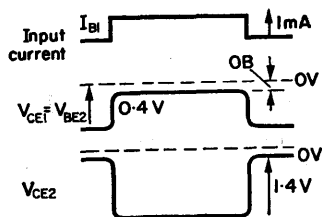


FIG. 10.4. Switching waveforms obtained from the transistors arranged as in Fig. 10.3.

although there is a transfer of current from T_1 to T_2 , the voltage at the collector of T_1 changes by less than 0.4 V. This has been considered previously with respect to direct coupled amplifiers. The waveforms obtained are shown in Fig. 10.4.

Resistor Coupling

If a greater collector voltage swing is required, than is possible with direct coupling, the collector of T_1 may be connected to the base of T_2 by a resistor. Such a resistor reduces the base current I_{B2} to a value that is sufficient to switch T_2 , but does not cause excessive voltage drop in R_1 . Thus, if V_{BE2} and $I_{B2} \cdot R_1$ are neglected,

$$I_{B2} \doteq V_{CC}/R_B \quad (\text{see Fig. 10.5}). \quad (10.1)$$

Normally, R_B is selected such that the transistor will just bottom. This gives a defined switching level of the order of 50 mV and ensures low power dissipation in the device. Referring to the characteristic curves of Fig. 10.6, if R_C is 1 k Ω the drive current

required to bottom the transistor is approximately $120\text{ }\mu\text{A}$. The value of base current required is a function of the collector current. If a larger collector resistor is used, the base current necessary for bottoming will be reduced.

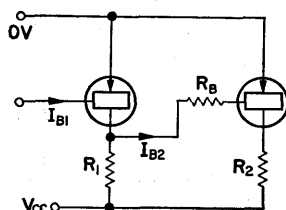


FIG. 10.5. Use of coupling resistor to allow a greater voltage swing at the collector of the first transistor.

Saturated Operation

The maximum current that can flow in the collector is the saturation current, and this occurs when V_{CE} is a minimum ($\div 0\text{ V}$). Thus, $I_{SAT} = V_{CC}/R_C$. For saturated operation, the

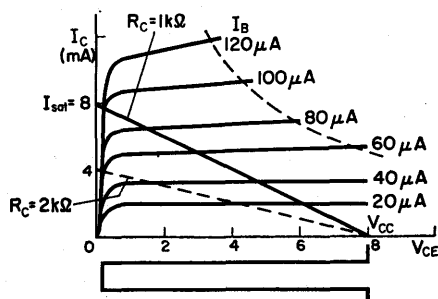


FIG. 10.6. Determination of the base current necessary to turn a transistor "on".

limits of the output waveform are: ($V_{CE} \div 0\text{ V}$, $I_C = I_{SAT}$) and ($V_{CE} \div V_{CC}$, $I_C = I_{CE0} \div 0$). The power dissipation, $P_C = I_C V_{CE}$ is small in either condition since in the first case $I_C \div 0$, and in the second case $V_{CE} \div 0$.

Collector current

$$I_C = I_{CE0} + h_{FE} \cdot I_B, \quad (10.2)$$

where h_{FE} is the large signal s/c current gain. Thus, $I_B = I_{SAT}/h_{FE}$ gives the required value of base current for saturation. To ensure that saturation is attained the minimum value of h_{FE} should be used.

10.3. SPEED OF TRANSISTOR SWITCHING

(Fig. 10.7)

When a transistor is switched on, for saturated operation it must pass through three different conditions:

- Transistor "off". The base-emitter junction is reverse biased and only leakage current flows in the collector circuit. $I_C = I_{CE0}$.
- Transistor in active region of operation. $I_C = I_{CE0} + h_{FE} \cdot I_B$.
- Transistor in saturated condition. $I_C = I_{SAT}$.

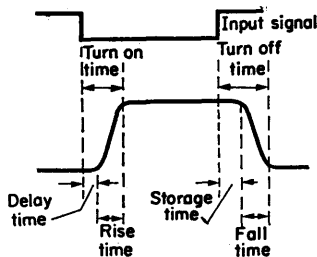


FIG. 10.7. Transistor switching sequence for a rectangular pulse input.

When the transistor is switched off the sequence is reversed, and the time taken to pass through these three conditions is the switching time.

The switching on sequence requires that a charge be put into the base, while when switching off the charge must be removed,

and the speed of operation is related to the time required to accomplish this. The increase in base current to provide such a charge, above that necessary for saturation, is called the overdrive current. Overdrive will decrease the turn-on time, but in general, will increase the turn-off time because of carrier storage. The use of overdrive makes provision for the spread in characteristics and ensures that transistors with the lowest current gain are bottomed.

To assist in charging and discharging the base, it is usual to shunt the coupling resistor with a *speed up* capacitor. This should be large enough to supply the required charge, but not so large as to slow down the switching time by requiring a large recharging period.

10.4. TRANSISTOR BISTABLE MULTIVIBRATOR

Figure 10.8 represents the basic arrangement of a symmetrical, collector-to-base coupled circuit. It is required that, as a stable condition, when T_1 is conducting T_2 should be cut off.

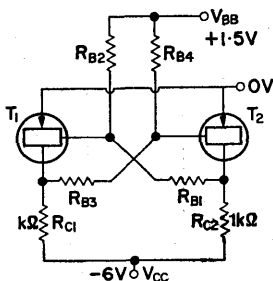


FIG. 10.8. Basic arrangement of a symmetrical collector-to-base coupled circuit.

The application of a positive trigger pulse to the base of T_1 drives it to cut off, and the resulting negative voltage transmitted from its collector to the base of T_2 causes that transistor to conduct. This state (T_2 conducting and T_1 cut off) is maintained until another trigger pulse is applied to the base of T_2 .

Design Considerations

The choice of component values is to some extent a matter of compromise. Since the transistors are saturated when "on", the amplitude of the output voltage waveform is independent of the value of the collector resistor. The selection of this resistor is therefore a compromise between economy of current and speed of operation.

The speed-up capacitors are not essential for operation of the circuit, but should be used where small rise times are required. They should be chosen such that, with the coupling resistors, they form time constants equal to the transistor input circuit time constant, $r_{b'e} \cdot C_{in}$. A capacitor greater than this will decrease the rise time further, but tend to give an overshoot.

The use of a positive base supply V_{BB} reduces the switching time out of the saturation condition. If the bias chain is of much greater resistance than the collector resistor, the collector voltage may be considered as being either at V_{CC} or at 0 V, depending on whether the transistor is "off" or "on". Thus, when T_1 is conducting, $V_{C1} \div 0$, and the base voltage of T_2 ,

$$V_{B2} = V_{BB} \cdot \frac{R_4}{(R_3 + R_4)}, \quad (10.3)$$

which should be sufficient to hold T_2 cut off. When T_1 is cut off, $V_{C1} \div V_{CC}$ and V_{B2} will be approximately -0.3 V, causing T_2 to conduct.

Choice of Transistor

This is largely determined by the required speed of operation; if f_1 is the cut-off frequency of the transistor, then a speed of operation of the order of $f_1/10$ is possible.

Design Steps

1. Select values for the collector resistors, to provide the required saturation current.

2. Construct a load line on the characteristic curves, and determine the base current for saturation. Allow for 100% overdrive.
3. Calculate values for the coupling and bias resistors, and choose a suitable speed up capacitor.

DESIGN EXAMPLE 10.1

Required, a bistable multivibrator capable of operation up to 250 kc/s. A suitable transistor is the 2G 301 having a cut-off frequency of 3–6 Mc/s. Let V_{CC} be -6 V and $V_{BB} = +1.5$ V.

Make $R_{C1} = R_{C2} = 1$ k Ω giving a saturation current of $V_{CC}/R_C = 6$ mA. If the load line is drawn in Fig. 10.6 it will be seen that a base current I_B of 100 μ A is required for saturation. Let the design figure be 200 μ A to allow for transistors having low current gain (100% overdrive).

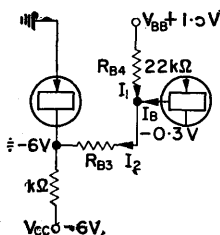


FIG. 10.9. Calculation of coupling resistance for Design Example 10.1.

Bias resistors. The positive bias supply must provide the leakage current $I_{CB0(\max)}$ ($= 60$ μ A, from the manufacturer's data).

Thus,

$$R_{B2} = R_{B4} = \frac{V_{BB}}{I_{CB0(\max)}} = \frac{1.5 \text{ V}}{60 \mu\text{A}} = 25 \text{ K}.$$

Let them have the preferred value of 22 k Ω .

Coupling resistors. When the base is forward biased, R_{B4} passes current:

$$I_1 = 0.08 \text{ mA} \quad (\text{see Fig. 10.9}).$$

But

$$I_2 = I_B + I_1 = 0.28 \text{ mA}.$$

Therefore

$$R_{B3} = \frac{V_{CC}}{I_2} = \frac{6 \text{ V}}{0.28 \text{ mA}} \doteq 21 \text{ k}\Omega.$$

This is a maximum value for R_{B1} and R_{B3} which may, with advantage be reduced to accommodate variations in voltage supply and resistor tolerances. Let the design value be $18 \text{ k}\Omega$.

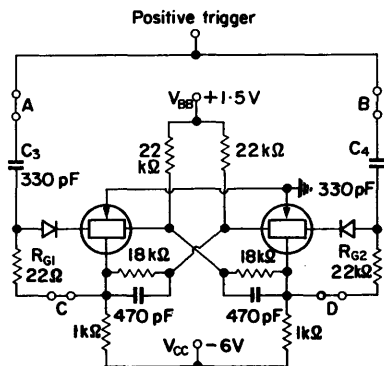


FIG. 10.10. Completed circuit of Design Example 10.1. The triggering arrangement provides binary operation.

Speed-up capacitors. The optimum value for speed-up capacitors can be calculated, but for the transistors chosen a value of 470 pF is indicated.

In Fig. 10.10 the completed circuit is drawn together with a suitable triggering arrangement.

10.5. TRIGGERING

To change the bistable from one state to the other, diode gating is usually employed. The “on” transistor forward biases the diode connected to its base, while the “off” transistor reverse biases its base diode. The former base will thus accept a positive pulse which switches it “off” and changes the state of the circuit.

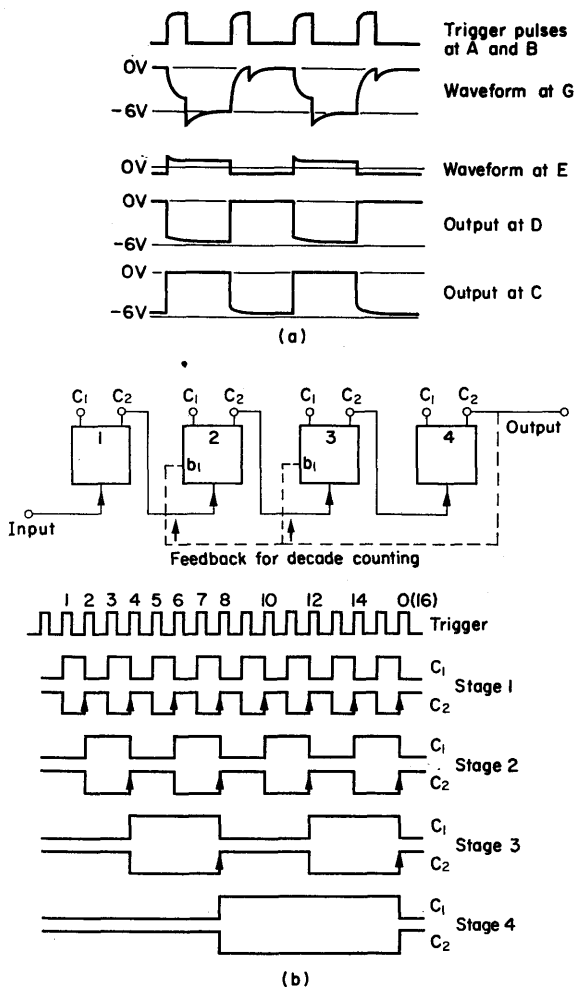


FIG 10.11. (a) Waveforms obtained when the circuit of Fig. 10.10 is operated as a binary element. (b) Connection of binary elements to form a four stage counter. This is basically a binary counter but application of feedback as shown transforms it into a decade counter.

In some applications, for instance shift registers, gating is controlled from another stage in which case the network is opened at *C* and *D*. Other applications require two channels for input pulses. If the network is opened at *A* and *B*, only the first pulse of a series on one channel will switch the device, unless the other channel is triggered. A series of waveforms obtained when the circuit is operated as a binary counter is drawn in Fig. 10.11 a.

Input Capacitors C_3 and C_4

These are required to switch off a transistor with a positive going trigger pulse. The selection of values is a compromise between ensuring operation and avoiding limitation of the repetition rate. They should be large enough to remove the base charge in the switching off sequence, but not so large that they are unable to discharge sufficiently before the arrival of the next triggering pulse.

10.6. ALTERNATIVE GATING METHODS

Collector Triggering

Referring to Fig. 10.12, with T_1 conducting, D_1 is reverse biased. Trigger pulses are therefore routed to the collector of

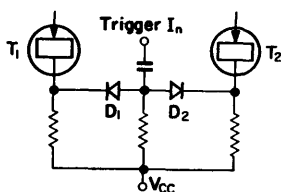


FIG. 10.12. Collector triggering for binary operation.

T_2 and from there to the base of T_1 via the cross-coupling network. This method has the advantage of only requiring one input capacitor, but a larger trigger pulse is necessary.

Collector Triggering using a Transistor

This method is frequently used for (DCTL) direct coupled logic circuits, and has the basic arrangement of Fig. 10.13. A negative voltage applied to the base of T_3 or T_4 will switch on the non-conducting transistor of the B.M.V. It will not, however, have any effect on the conducting transistor. The circuit may be modified to that of Fig. 10.14. Assume an initial condition of

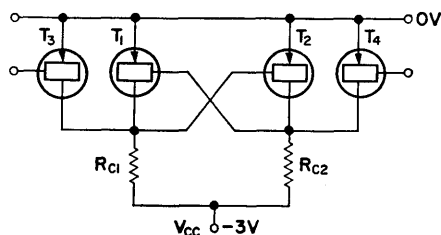


FIG. 10.13. Collector triggering using transistors. The trigger transistors are T_3 and T_4 .

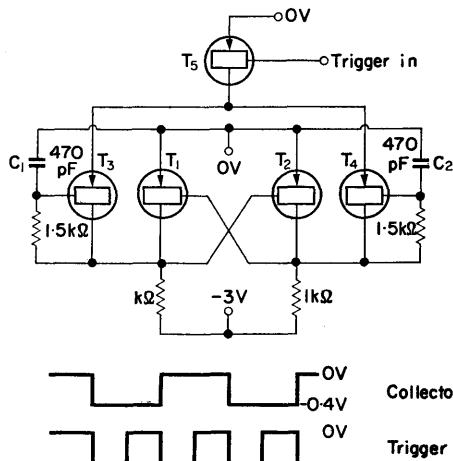


FIG. 10.14. Modification to the circuit of Fig. 10.13 to provide binary operation.

T_1 conducting and T_2 "off". Since T_3 is normally non-conducting, C_1 will only be charged to the bottoming voltage, but C_2 will be charged to the maximum collector voltage of -0.4 V. The application of a trigger to the base of T_3 , causing it to conduct, effectively connects the emitters of T_3 and T_4 to 0 V. Thus, the voltage on C_2 is applied between base and emitter of T_4 , causing it to conduct, and this in turn switches off T_1 (and switches on T_2).

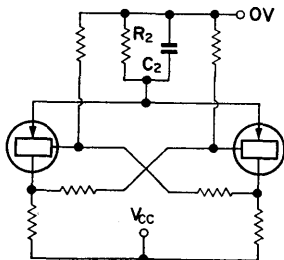


FIG. 10.15. Provision of base bias using emitter resistor R_E .

10.7. EMITTER COUPLED BISTABLE MULTIVIBRATOR

The positive base bias supply may be obtained by using a common emitter resistor, bypassed by a capacitor for high frequency currents, as shown in Fig. 10.15. To maintain the same conditions as in the previous example, V_{CC} is increased by -6 to -7.5 V. As the collector current is 6 mA,

$$R_E = \frac{V_{BB}}{I_E} = \frac{1.5 \text{ V}}{6 \text{ mA}} = 250 \Omega.$$

The switching time is of the order of $1 \mu\text{sec}$, and the time constant $C_E R_E$ should be made at least 10 times greater than this. Let $C_E R_E = 10 \mu\text{sec}$. Then

$$C_E = 10^{-5}/250 = 4 \times 10^{-9}. \text{ Let it be } 0.047 \mu.$$

If the emitter resistor is not bypassed, emitter coupling can be used and one of the collector-to-base coupling networks removed.

The circuit then becomes that of Fig. 10.16. The regenerative loop consists of a common collector stage driving a common base stage, which is coupled back to the former by R_{B3} and R_{B4} . The collector of T_2 is "free" since it does not enter directly into the feedback loop, and R_{C2} can have any value provided that it is less than R_{C1} .

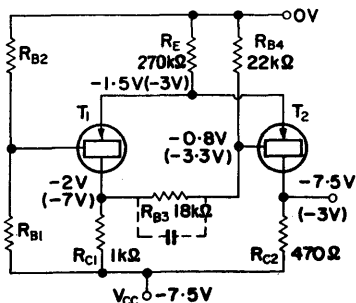


FIG. 10.16. Emitter coupled multivibrator. The voltages in brackets refer to the condition of T_2 conducting.

When T_1 is "on", T_2 is "off", because its base is positive with respect to the emitter voltage. When T_2 conducts it draws an increased current through R_E cutting T_1 "off". The base voltage of T_1 will become more negative when T_1 is "off", because it will only be drawing leakage current. If it becomes -2 V, then its emitter should be approximately -3 V, to ensure that the emitter-base junction is reverse biased. Thus,

$$I_{E2} = \frac{V_E}{R_E} = \frac{3 \text{ V}}{270} = 10 \text{ mA}.$$

With $R_{C2} = 470 \Omega$, the output voltage will vary between -7.5 and -3 V. Such an arrangement has a loop gain less than unity at zero frequency and will not switch from one state to another. It will, in fact, perform as an amplifier with the output limiting at -7.5 V (cut-off) or -3 V (conducting).

If C is made sufficiently large, the circuit will have a gain which is greater than unity at high frequency, and will be switched by

relatively fast moving waveforms. The gain may also be increased by the use of a larger R_{C1} or R_E . If C is made $0.01 \mu\text{F}$ the device will perform effectively as a trigger circuit. Typical waveforms for the “switching” and “non-switching” states of this circuit are given in Fig. 10.17.

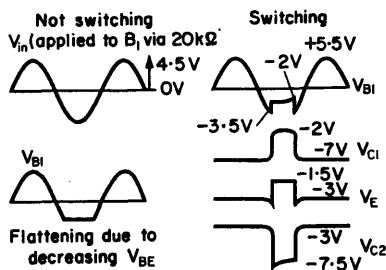


FIG. 10.17. Typical waveforms for the circuit of Fig. 10.16.

10.8. SYMMETRICAL TRIGGER B.M.V.

The symmetrical B.M.V. can also be used as a trigger device. To switch a transistor “on”, the input voltage must be raised to a value that will produce conduction, and the reverse process is required for switching the transistor “off”. The circuit of Fig. 10.18a can be triggered by the appropriate voltage at either

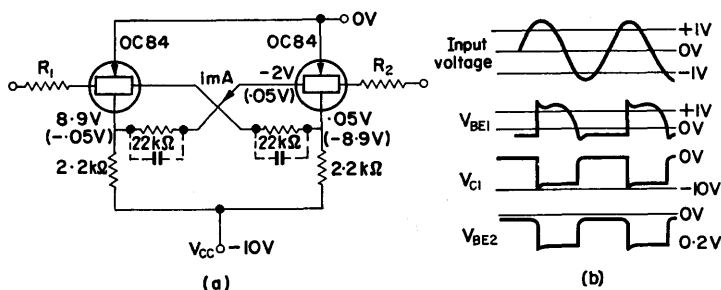


FIG. 10.18. Use of a symmetrical B.M.V. as a trigger device. The waveforms show the circuit being used to square a sine wave input.

base, i.e. -0.3 V to bring a transistor "on" and 0 V to switch "off". The waveforms obtained with a sinusoidal input are given in Fig. 10.18b.

10.9. COMPLEMENTARY BISTABLE NETWORKS

If the *npn* and *pnp* transistors of Fig. 10.19 are biased correctly, the combination will have a current gain greater than unity with no signal inversion. It therefore has properties similar

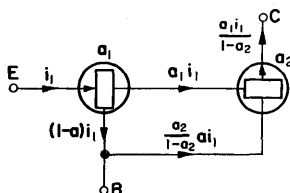


FIG. 10.19. Complementary pair to provide current gain without signal inversion.

to a point contact transistor, and is able to exhibit a negative resistance across its input terminals. The combination may be used in the form of Fig. 10.20. When T_1 is "off", $V_{C1} = -V$

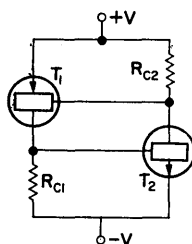


FIG. 10.20. Coupling of complementary device to provide a regenerative loop.

and V_{BE2} is too small to turn T_2 "on". Both transistors are therefore "off". With T_1 "on", $V_{C1} \doteq +V$ and transistor T_2 also conducts.

A circuit employing this combination of transistors is given in Fig. 10.21. When the input voltage exceeds the reference voltage V_R , both transistors are switched on regeneratively. The emitter resistor R_E draws current and V_{E1} falls to approximately 3 V. A further fall in V_{E1} will cause T_1 to start cutting off, which regeneratively switches off both transistors.

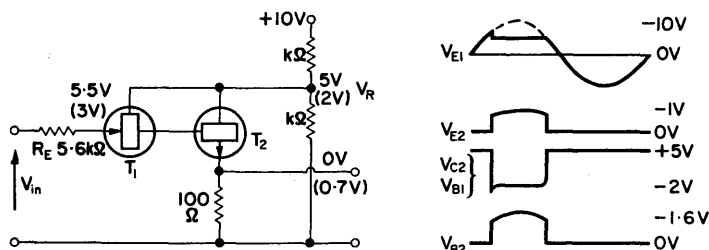


FIG. 10.21. Complementary bistable network. A square wave output is obtained from a sinusoidal input.

With such a network, a relatively large current pulse can be obtained from the emitter of T_2 . Since the input circuit demands an increasing current as the voltage falls, it exhibits a negative resistance. The use of too large a value for R_E can reduce the gain so much that the network will not switch.

10.10. THERMIONIC VALVE B.M.V.

Design Considerations

The basic circuit is given in Fig. 10.22. For high frequency operation, the anode load resistors should be as small as possible, since when a valve is cut off the anode voltage rises on a time constant $C_A R_L$ where C_A is the total anode capacitance. The cross-coupling networks must be so designed that each valve is held cut off when the other is conducting. Speed-up capacitors assist the switching action, as they do in the transistor circuit, and are usually in the range of 22–100 pF.

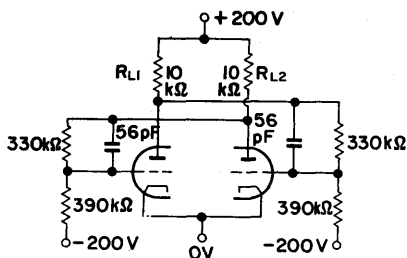


FIG. 10.22. Basic circuit of a thermionic valve B.M.V.

Design Steps

1. Plot a load line for the selected anode resistor, and determine the maximum and minimum voltages to which the anode is carried.
2. Calculate values for the coupling resistance chain such that, at the lower anode voltage (when one valve is conducting), the grid of the other valve is held well beyond the cut off voltage. Similarly, at the higher anode voltage (when the valve is cut off), the grid of the other valve is taken sufficiently positive to ensure full conduction.
3. Select a suitable speed-up capacitor.

Choice of a Valve

It is convenient to use a double triode for this application, and of the three mentioned in Chapter 1 the ECC82 (12AU7) is suitable. The high g_m of an ECC81 could lead to instability, due to parasitic oscillation, whereas the low g_m of an ECC83 is insufficient for this application.

DESIGN EXAMPLE 10.2

Required, a symmetrical bistable multivibrator, using an ECC82 valve from a ± 200 V supply.

The load line for a $10\text{ k}\Omega$ anode resistor is plotted on the characteristic curves drawn in Fig. 10.23. With the valve cut off the

anode voltage is at full h.t. When conducting, the valve draws grid current, holding the grid at 0 V, and the anode voltage is +90 V. Thus, the anode voltage swing is 110 V. In the "on" condition, the anode dissipation is 1.21 W which is well within the valve rating (2.5 W).

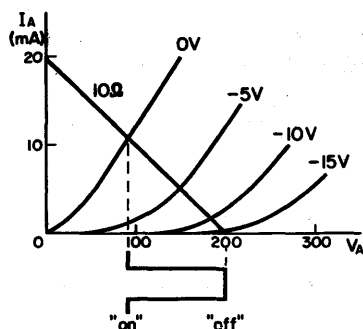


FIG. 10.23. Characteristic curves for an ECC82 with a $10\text{ k}\Omega$ load line. The anode voltage swings through 110 V between cut-off and $V_{GK} = 0$.

Coupling chain. This is made of large value resistors, compared with R_L so as not to limit the voltage swing of the anode. To ensure that the valve is cut off the grid voltage should be more negative than -20 V . The grid must be taken positive to ensure

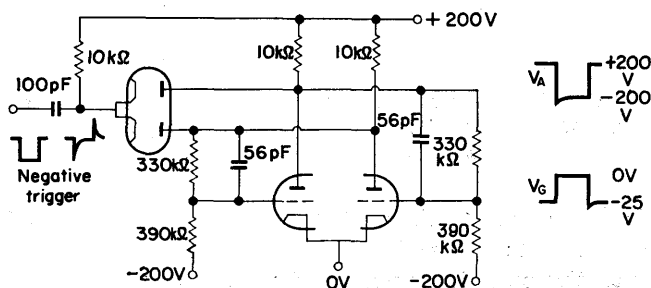


FIG. 10.24. Completed circuit of Design Example 10.2 with a suitable triggering arrangement.

that the valve is brought fully on. These conditions determine the ratio of R_1 and R_2 , and are satisfied by $R_1 = 330 \text{ k}\Omega$ and $R_2 = 390 \text{ k}\Omega$. Using these values the grid is carried to $+10$ and -43 V in its two alternative states. The completed circuit, with a suitable triggering arrangement, given is in Fig. 10.24.

Triggering. Due to the connection between the cathodes and h.t., via the $10 \text{ k}\Omega$ resistor, the two diodes are so biased that only the one connected to the anode of the non-conducting valve passes the trigger signal. This is then routed to the grid of the "on" valve via the anode-grid coupling network.

Alternative triggering and biasing. The circuit diagram of Fig. 10.25 is an alternative arrangement in which a common cathode resistor is used to provide the necessary bias for the double

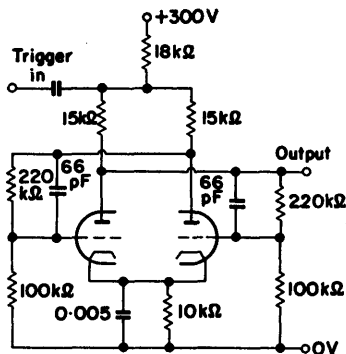


FIG. 10.25. Use of cathode bias to eliminate the need for a negative voltage supply, in a B.M.V. The triggering arrangement is suitable for a binary counter.

triode. This eliminates the need of a negative voltage supply. The common $18 \text{ k}\Omega$ anode resistor enables the binary to be triggered. The negative pulse is routed, via the anode of the "off" valve, to the grid of the "on" valve and causes it to switch off.

10.11. CATHODE COUPLED B.M.V.⁽⁴⁰⁾

It is sometimes required that a voltage step (or a pulse) be generated when a voltage reaches a predetermined level. Such a facility is provided by the circuit of Fig. 10.26 which gives an output step of 30 V when the input voltage reaches 150 V. The valve used is an ECC81 operating from a supply voltage of +300 V.

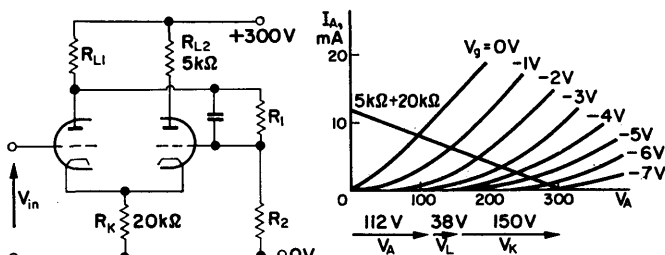


FIG. 10.26. Cathode coupled B.M.V. (Schmitt Trigger), switching at an input of 150 V.

Voltage at the Cathode

It is required that V_1 , which is initially cut off, should start conducting when $V_{IN} = 150$ V. Thus, to make $V_{GK1} = -2$ V, the voltage at the cathode must be 152 V, and with this cathode voltage V_2 must be conducting. Let R_K be 20 k Ω . Then, $I_{A2} = 152 \text{ V}/20 \text{ k}\Omega = 7.6 \text{ mA}$ which is the change in current which will occur when V_2 is switched "off". For an output voltage change greater than 30 V, R_{L2} must be made 5 k Ω . The total load is therefore 25 k Ω and a load line for this value is plotted on the characteristic curves.

Voltage Divider R_1R_2

The voltage divider R_1R_2 determines the cathode voltage of V_2 by cathode follower action. From the load line, for an I_A of 7.6 mA, $V_{GK2} = -0.5$ V, and thus $V_{G2} = 151.5$ V. Since

V_1 is cut off, its anode voltage is +300 V, and R_1 should be approximately equal to R_2 to provide the required grid voltage. Let $R_1 = R_2 = 1 \text{ M}\Omega$.

V_1 Anode Resistor

When V_1 conducts, the fall in anode voltage carries G_2 beyond cut off:

$$V_{G2} = \frac{1}{2}(V_K + V_{AK1}). \quad (10.4)$$

V_2 will start to conduct again when $V_{G2} \div V_K$, or, from eqn. (10.4), when $V_K = V_{AK1}$.

As V_{IN} falls, V_{AK1} increases until V_{GK2} comes within the grid base. If R_{L1} is made $5 \text{ k}\Omega$, an input voltage of 150 V will switch V_1 "on", and the grid of V_2 will be carried to 131 V. This will cause V_2 to cut off. To bring V_2 back into conduction, V_{IN} must be reduced to approximately 135 V, i.e. a "backlash" of 15 V

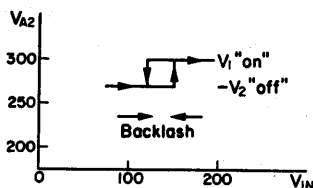


FIG. 10.27. Representation of "backlash" as a function of input voltage.

(see Fig. 10.27). If, however, $R_{L1} = 10 \text{ k}\Omega$, V_{IN} must be reduced to 120 V to produce the changeover, and the backlash is 30 V. The choice of R_{L1} is seen to be determined by the amount of backlash acceptable.

Reduction of Backlash

Backlash may be reduced by using a smaller value for R_{L1} . If it is made too small, it is possible for the loop gain to fall below unity, and the switching action will cease. Alternatively, as

shown in Fig. 10.28, backlash may be reduced by amplifying the input signal. An amplifier of gain A before the B.M.V. will reduce the backlash by the factor $1/A$.

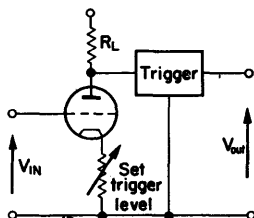


FIG. 10.28. Reduction of "backlash" by the use of an auxiliary amplifier. Backlash is reduced by the factor $1/A$ if the amplifier gain is A . The variable resistor permits adjustment of the voltage at which the device triggers.

10.12. MONOSTABLE MULTIVIBRATORS

Resistors and capacitors are the most common timing elements, although inductance-resistance timing is sometimes employed. The M.M.V. is used principally for pulse forming and delay generation.

Collector-to-Base Coupled M.M.V.

Referring to Fig. 10.29, the connection from the collector of T_1 to the diode, via R , biases the diode such that it is "open" when T_1 is conducting, and "closed" when T_2 is conducting (i.e. when T_1 is cut off). Thus, a positive going waveform will be accepted to switch off T_1 . When triggered, the positive excursion of the T_2 collector is transferred to the base of T_1 which is held beyond cut off while C_B discharges through R_{B1} . When the base voltage of T_1 is sufficiently reduced, T_1 again conducts and T_2 is cut off until the arrival of the next trigger pulse. Timing is thus effected by the time constant $C_B R_{B1}$ and is largely independent of the supply voltages.

Design Considerations

With the initial conditions of T_1 conducting and T_2 cut off, the collector voltage of $T_2 = V_{CC}$ and the collector voltage of $T_1 \div 0$. If the value of V_{BE1} for saturation is $V'_{BE1} (\div 0.3 \text{ V})$, the voltage on the capacitor, $C_B \div V_{CC} - V'_{BE1}$. When the circuit is triggered, T_2 conducts and its collector voltage switches to the

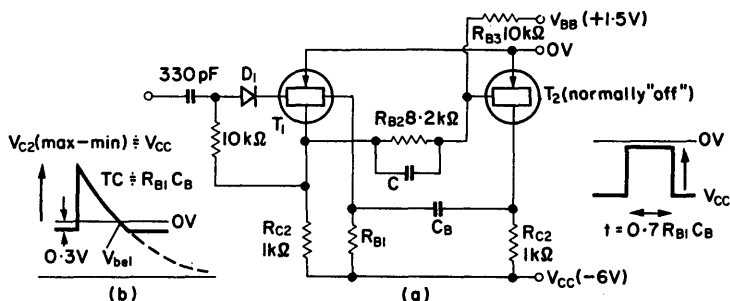


FIG. 10.29. Collector-to-base coupled M.M.V. A positive trigger at the input causes the generation of a rectangular pulse at the T_2 collector.

bottoming voltage, $V_{(\min)2}$, i.e. a voltage excursion of $V_{CC} - V_{(\min)2}$, and T_1 cuts off. The voltage on C_B is therefore increased to:

$$\begin{aligned} V_{\max} &= (V_{CC} - V'_{BE}) - (V_{CC} - V_{(\min)2}) \\ &= 2V_{CC} - V'_{BE} - V_{(\min)2}. \end{aligned} \quad (10.5)$$

C_B now discharges through R_{B1} according to the law:

$$v = V_{\max} \exp(-t/T), \quad (10.6)$$

where T is the time constant $C_B R_{B1}$. This is plotted in Fig. 10.29 b. T_1 will start to conduct again when

$$v = V_{CC} - V''_{BE1}, \quad (10.7)$$

where V''_{BE1} is a little less negative than V'_{BE} ($\doteq -0.25$ V). Combining these three equations,

$$V_{CC} - V''_{BE1} = (2V_{CC} - V_{(\min)2} - V'_{BE}) \exp(-t/T). \quad (10.8)$$

Neglecting $V_{(\min)2}$, V'_{BE} and V''_{BE1} ,

$$\exp(-t/T) \doteq 0.5.$$

Therefore

$$-t/T = \log_e 2,$$

and

$$t = 0.7 C_B R_{B1}. \quad (10.9)$$

If R_{B1} is returned to V'_{BB} instead of to V_{CC} , by similar considerations it may be shown that:

$$t/T = \log_e \frac{V_{CC} + V'_{BB}}{V_{CC}}. \quad (10.10)$$

Thus, the pulse length can be changed electrically by varying V'_{BB} .

The choice of collector resistor R_C is a compromise. For economy of collector current and low collector dissipation a relatively large value is used. On the other hand a small value of R_C is required, giving a small collector time constant for high speed operation. The use of a small R_C has the added advantages, that it makes the circuit insensitive to external loading and also causes only a small voltage drop due to leakage current.

The positive base bias provided by R_{B3} and V_{BB} is only strictly necessary when operation over a wide temperature range is required.

Design Steps

1. Select values for R_C and V_{CC} which will permit the necessary rise and fall times of the output pulse.
2. Calculate the saturation current, i.e. the current which will cause V_{CC} volts to be dropped across R_C .

3. Assume the minimum h_{FE} for the selected transistor and determine the base current required for bottoming; choose values of R_{B2} and R_{B3} to provide this current.
4. Using eqn. (10.9), calculate values of C_B and R_{B1} , to provide the required pulse length.

DESIGN EXAMPLE 10.3

Required, a monostable multivibrator to provide an output pulse of $5 \mu\text{sec}$ duration.

For this pulse length, rise and fall times of the order of $1 \mu\text{sec}$ are necessary, and typical values for R_C and V_{CC} are $1 \text{ k}\Omega$ and -6 V .

Base resistors R_{B2} , R_{B3} . $I_{\text{sat}} = V_{CC}/R_C = 6 \text{ mA}$. With a minimum h_{FE} of 20, $I_B = I_{\text{sat}}/h_{FE} = 300 \mu\text{A}$.

(a) If positive base bias is *not* used

$$R'_{B2} = 6 \text{ V}/0.3 \text{ mA} = 20 \text{ k}\Omega.$$

This represents a maximum value. Make $R'_{B2} = 15 \text{ k}\Omega$ to allow for voltage variations.

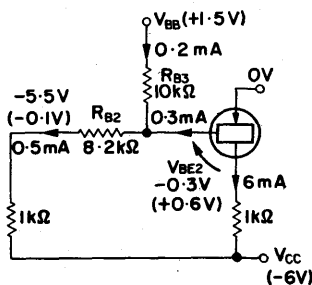


FIG. 10.30. Determination of the values of R_{B2} and R_{B3} .

(b) If positive bias is used and $V_{BB} = 1.5 \text{ V}$, as shown in Fig. 10.30, let $R_{B3} = 10 \text{ k}\Omega$. Then, when T_2 is conducting the current in R_{B3} ,

$$I_3 = \frac{1.5 \text{ V} + 0.3 \text{ V}}{10 \text{ k}\Omega} = 0.2 \text{ mA}.$$

The current in R_{B2} ,

$$I_2 = I_B + I_3 = 0.5 \text{ mA.}$$

Voltage across R_{B2} ,

$$\begin{aligned} V_1 &= -V_{CC} - I_2 R_C + V_{BE} \\ &= 6 - 0.5 - 0.3 \div 5 \text{ V.} \end{aligned}$$

Thus,

$$R_{B2} = \frac{V_1}{I_2} = \frac{5 \text{ V}}{0.5 \text{ mA}} = 10 \text{ k}\Omega.$$

Again to allow for voltage variations, let R_{B2} have the preferred value of $8.2 \text{ k}\Omega$. When T_1 is conducting its collector voltage $V'_{C1} = -0.1 \text{ V}$. Thus,

$$\begin{aligned} V_{BE2} &= V_{BB} - \frac{R_{B3}}{R_{B2} + R_{B3}} (V_{BB} - V'_{C1}) \\ &= 1.5 \text{ V} - 0.9 \text{ V} = +0.6 \text{ V.} \end{aligned}$$

The base-emitter junction of T_2 is suitably reverse biased.

Timing network $C_B R_{B1}$. In small transistors the maximum base current is of the order of 1 mA .

Thus, the minimum value of $R_{B1} = V_{CC}/I_{B(\text{max})} = 6 \text{ V}/1 \text{ mA}$. Let R_{B1} be the preferred value of $5.6 \text{ k}\Omega$.

From eqn. (10.9),

$$C_B = \frac{t}{0.7 R_{B1}} \div \frac{5 \times 10^{-6}}{4 \times 10^3} = 1250 \text{ pF.}$$

10.13. THE DIRECT COUPLED M.M.V. (Fig. 10.31)

Operation

In the stable state T_2 , bottomed by the current in R_B , is conducting. A negative trigger pulse on the base of T_3 causes a reduction of the negative collector voltage of T_3 and T_1 . This

change is transferred to the base of T_2 via C_B , which is charged to $V_{CC} - V'_{BE}$.

T_2 is thus cut off and held off for a period determined by the time constant $R_B C_B$.

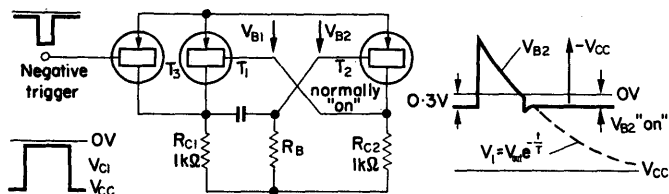


FIG. 10.31. The direct coupled M.M.V.

The exponential discharge of C_B is terminated, and T_2 switches "on" when $V_{B2} \doteq -0.25$ V. As in the previous example, it can be shown that

$$t = T \log_e \frac{2V_{CC} - V'_{BE}}{V_{CC} - V''_{BE}}, \quad (10.11)$$

and for $V_{CC} \gg V'_{BE}$,

$$t = 0.7 C_B R_B. \quad (10.12)$$

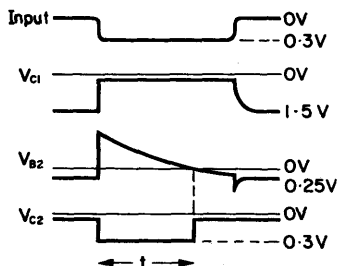


FIG. 10.32. Waveforms obtained from the circuit of Fig. 10.31.

EXAMPLE. Using an MA 240 transistor with $R_B = 10$ k Ω and $C_B = 1000$ pF, $T = 10^{-5}$ sec.

The waveforms obtained from such an arrangement are given in Fig. 10.32. Substituting values in eqn. (10.11) yields:

$$t = 10^{-5} \times 0.78 \doteq 8 \mu\text{sec.}$$

Collector saturation voltage. The specification for the MA240 requires that, for $I_C = 2$ mA and $I_B = 0.3$ mA, the saturation collector voltage should not exceed 70 mV. It is typically 40 mV.

Base bias resistor R_B . This should be small enough to allow T_2 to bottom.

If $R_{C2} = 1$ k Ω and $V_{CC} = -1.5$ V, $I_{C(\text{sat})} = 1.5$ mA.

For a minimum $h_{FE} = 15$, $I_{B(\text{sat})} = 1.5 \text{ mA}/15 = 0.1$ mA.

Making $R_B = 10$ k Ω gives $I_B = 0.12$ mA. If $I_{C(\text{sat})}$ is increased (by making $R_{C2} = 500 \Omega$, for instance), 10 k Ω will be too high a value for R_B , and the circuit will have no stable state, but will oscillate. Thus, as with all transistor monostable multivibrators, to provide large variations in pulse width C_B must be varied and not R_B .

10.14. ASYMMETRICAL M.M.V.

The circuit of Fig. 10.33 represents an asymmetrical monostable multivibrator. In its normal state T_1 is "on", and $V_{E1} \doteq +0.3$ V. The current $I_1 \doteq V_{EE}/R_{E1}$ is sufficient to ensure that V_{C1} holds T_2 "off".

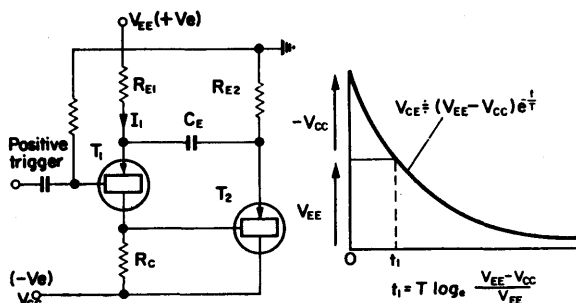


FIG. 10.33. Asymmetrical M.M.V. Because of the emitter coupling T_2 has a "free" collector.

The application of a positive trigger causes a reduction in I_1 , and the resulting change in V_{C1} allows T_2 to start conducting. The T_2 emitter therefore goes negative and, since C_E cannot charge instantaneously, the emitter of T_1 is also taken negative. T_1 regeneratively switches off, and T_2 bottoms. In this fully switched state the emitters of both transistors are at approximately V_{CC} volts and the voltage across R_{E1} is $V_{EE} - V_{CC}$ (where V_{CC} is negative for *pnp* transistors).

C_E now starts to charge through R_{E1} and when the charge reaches V_{CC} volts, T_1 starts to conduct. T_1 then switches on regeneratively and T_2 switches off again.

10.15. ASTABLE MULTIVIBRATORS

The A.M.V. is a free running multivibrator which produces rectangular pulses at a predetermined repetition frequency. It may therefore be used as the basic timing circuit for sweep generators, counters, etc. Figure 10.34 represents a symmetrical

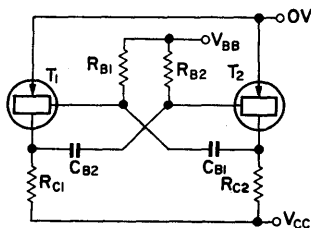


FIG. 10.34. Symmetrical A.M.V.

collector-to-base coupled circuit, having an operation as follows. Assume an initial condition of T_1 conducting and T_2 cut off. C_{B2} now charges through R_{B2} carrying the base of T_2 negative until T_2 starts to conduct. The collector voltage of T_2 then begins to rise, carrying the T_1 base positive; T_1 regeneratively cuts off and T_2 bottoms. C_{B1} now charges, the base of T_1 goes negative until T_1 conducts again and the cycle repeats.

Design Considerations

The way base voltage varies with time is indicated in Fig. 10.35,

$$v_B = (-V_{CC} - V_{BB} + V'_{BE}) \exp(-t/T) + V_{BB},$$

where conduction takes place when V_B falls to approximately -0.3 V. If V_{BE} is small compared with V_{CC} and V_{BB} , and this is usually the case, then:

$$V_{BB} = -(V_{CC} + V_{BB}) \exp(-t/T)$$

or

$$t = T \log_e \left(1 + \frac{V_{CC}}{V_{BB}} \right)$$

$$= C_B R_B \log_e 2 \quad (\text{if } V_{CC} = V_{BB}).$$

Therefore

$$t = 0.7 C_B R_B. \quad (10.13)$$

The period for a symmetrical system is $2t_1 = 1.4 C_B R_B$.

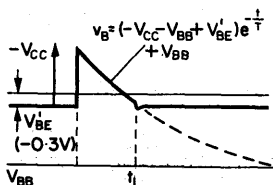


FIG. 10.35. Base waveform of the astable multivibrator.

Design Steps

1. Select suitable collector resistors and calculate the saturation current which will flow.
2. Using the minimum value of h_{FE} for the type of transistor to be used, determine the minimum base current which will cause this saturation current.
3. Calculate the maximum value of R_B to provide the necessary base current.
4. Using eqn. (10.13) evaluate C_B .

DESIGN EXAMPLE 10.4

Required, an astable multivibrator having a period of 0.1 msec. (i.e. a P.R.F. of 10 kc/s), using a -1.5 V supply voltage. Let the transistor chosen be an MA 240 with a quoted minimum h_{FE} of 15. Make the collector resistors 2.2 k Ω .

Collector saturation current

$$I_{C(\text{sat})} = \frac{V_{CC}}{R_C} = \frac{1.5 \text{ V}}{2.2 \text{ k}\Omega} = 0.68 \text{ mA.}$$

Minimum base current

$$I_{B(\text{min})} = \frac{I_{C(\text{sat})}}{h_{FE(\text{min})}} = \frac{0.68 \text{ mA}}{15} = 45 \mu\text{A.}$$

The transistor will conduct when $V''_{BE} = -0.3$ V.

Thus,

$$R_{B(\text{max})} = \frac{V_{CC} - V''_{BE}}{I_{B(\text{min})}} = \frac{1.5 - 0.3 \text{ V}}{45 \mu\text{A}} = 27 \text{ k}\Omega.$$

This is the maximum value. Let the design value be 22 k Ω , to ensure saturation.

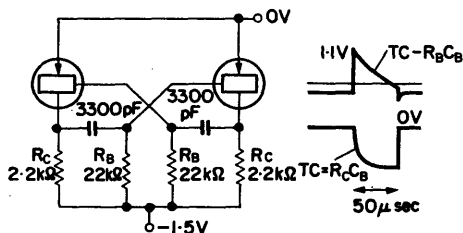


FIG. 10.36. Completed circuit of Design Example 10.4.

$$\text{Half period} = 0.7 C_B R_B = 50 \mu\text{sec.}$$

Therefore

$$C_B = \frac{5 \times 10^{-5}}{0.7 \times 22 \times 10^3} = 3300 \text{ pF.}$$

The completed circuit is given in Fig. 10.36.

The collector waveform, obtained from this circuit, can be made more rectangular by the use of smaller collector resistors, thus reducing the time constant $R_C C_B$. Alternatively use may be made of the Darlington connection shown in Fig. 10.37. This connection gives a current gain of $(h_{FE})^2$, which, when substituted in the above calculations, leads to a bigger R_B and smaller C_B . The $R_C C_B$ time constant is thus reduced.

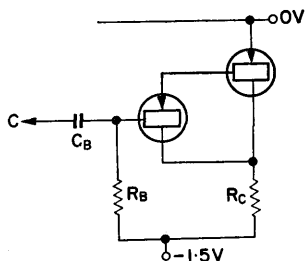


FIG. 10.37. The use of the Darlington connection leads to a better collector waveform than that obtained from the network of Fig. 10.36.

10.16. EMITTER COUPLED A.M.V.

The circuit has the form of Fig. 10.38 and is similar to the previously described emitter coupled M.M.V. The output waveform can be obtained from a "free" collector, i.e. one which does not enter directly into the feedback loop.

Operation

When T_2 starts conducting, the base of T_1 is taken positive by the full excursion of the T_2 collector voltage, i.e. 20 V. Since the base of T_1 was originally held at 2 V positive by the base current in R_1 , V_{B1} becomes +22 V and the emitter voltage is 2 V.

The emitter of T_2 is held at approximately 0 V, because the base is earthed, and the T_1 emitter voltage rises on a time con-

stant approximately $C_2 R_3$ as C_2 charges to $+6$ V. The charging current, which is drawn from the emitter of T_2 , falls off exponentially and consequently the collector current of T_2 , is reduced causing the collector to become more negative.

This charge is transferred to the base of T_1 via C_1 (which has no effect on the timing). Thus the T_1 base and emitter voltages approach equality and when the base becomes sufficiently negative, with respect to the emitter, T_1 conducts. The resulting voltage produced across R_3 is transferred to the emitter of T_2 making $V_{E2} \div -3.5$ V, and T_2 is cut off.

The collector voltage of T_2 therefore changes to V_{CC} and this change is applied to the base of T_1 , completing the regenerative loop.

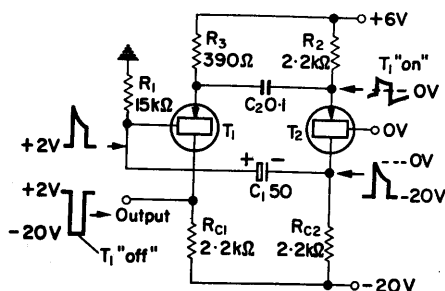


FIG. 10.38. Emitter coupled A.M.V. The free collector of this network provides a well-defined rectangular pulse.

The emitter voltage of T_2 now rises from -3.5 V towards $+6$ V on the time constant $C_2 R_2$. When the emitter reaches a slight positive voltage, T_2 conducts and the cycle repeats.

10.17. COMPLEMENTARY A.M.V.

The negative resistance arrangement of § 10.9 may be used with an R - C network as an astable multivibrator, as shown in Fig. 10.39.

Operation

With both transistors "off" V_{C2} is at 10 V, and point A is held at 0 V by the diode. Point B now rises towards 20 V on the time constant $C_1 R_2$ until it is sufficiently positive, with respect to V_{C2} , to cause T_1 to conduct. This in turn brings T_2 into conduction. The current drawn by T_2 collector causes V_{C2} to fall, and this

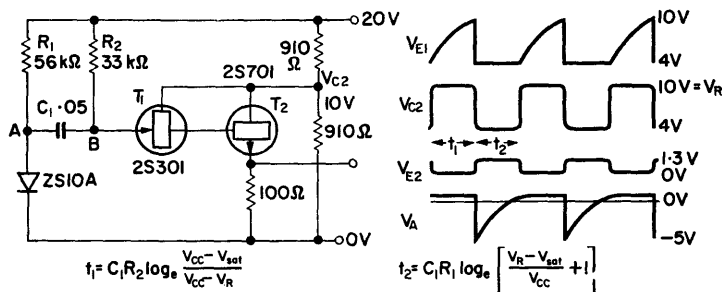


FIG. 10.39. Complementary astable multivibrator. V_{sat} is the transistor saturation voltage.

fall is transferred to point A via T_1 and C_1 . Point A is thus taken negative. It now rises towards 20 V on the time constant $C_1 R_1$, but is caught at 0 V by the "catching" diode, and the transistors are switched "off".

10.18. DIFFERENTIATING AND INTEGRATING NETWORKS

It is frequently required that the rectangular waveform obtained from an A.M.V. be used to provide a narrow pulse at either its leading or trailing edge, or both. This may be accomplished by the simple "differentiating" network of Fig. 10.40. Since C_d cannot charge instantaneously the leading edge of the input waveform appears across R_d . The capacitor C_d now charges on the time constant $R_d C_d$, and the voltage across R_d falls exponentially on the same time constant. After a time

$4C_dR_d$, the voltage across the resistor is approximately zero and remains thus until the arrival of the trailing edge. The sequence is then repeated in the opposite direction. The output from such a network, in response to an input rectangular waveform of duration D , is given in Fig. 10.41, and shows the effect of varying the time constant C_dR_d .

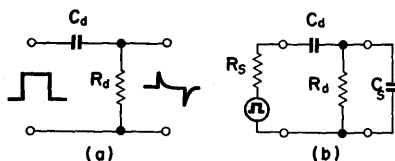


FIG. 10.40. Simple "differentiating" network.

In practice, the driving circuit will have some resistance R_s and the resistor R_d will be shunted by a capacitance C_s , e.g. the input capacitance of an amplifier to which the network is connected. The effective circuit is therefore that of Fig. 10.40 b. The leading edge of the output waveform now rises on the time constant

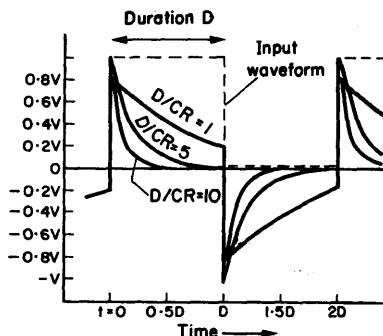


FIG. 10.41. Response of simple "differentiating" network to a rectangular waveform.

R_sC_s , but as this may be made very small, rise times of the order of a fraction of a microsecond are possible, provided that the rise time of the input waveform leading edge is faster than this.

The presence of C_s also causes a reduction in the amplitude of the output signal. Thus,

$$\frac{V_{\text{out}}}{V_{\text{in}}} = \frac{C_d}{C_s + C_d}. \quad (10.14)$$

The output from a simple “differentiating” circuit is seen to be a positive “spike”, synchronous with the positive-going leading edge of a rectangular input waveform, and a negative “spike” synchronous with the negative going trailing edge. These spikes may be squared-off and unwanted spikes removed by the use of limiter circuits.

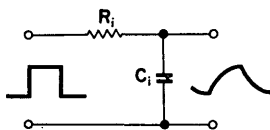


FIG. 10.42. Simple “integrating” network.

Even when limited, the pulse is not rectangular. However, it can be made to approach the rectangular shape by the use of a small value of inductance in series with R_d . If L is made equal to $\frac{1}{2}C_s R_d^2$, then the resulting resonant effect will produce a pulse which is broader at the top and which has a steeper trailing edge.

If, as in Fig. 10.42, the output is taken from across the capacitor instead of from the resistor, the network acts as an “integrator”. In fact a true integration of a rectangular waveform is a triangular waveform, i.e. one in which the voltage rises and falls linearly with time. In the simple network shown, however, both rise and fall are exponential with a time constant $R_i C_i$.

10.19. LINEAR SWEEP GENERATORS

Figure 10.43 represents an ideal linear sweep waveform having the law $V = at$ for t greater than 0. Such a waveform is required for time-bases and is also used in comparator circuits.

A simple way of providing a sweep voltage is to charge a capaci-

tor through a large resistor. The charge is, of course, exponential, as shown in Fig. 10.44, but if only the first part of the output waveform is used, then a reasonably linear rise is obtained. For

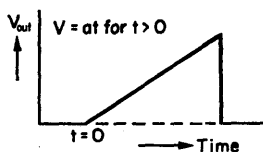


FIG. 10.43. Ideal linear sweep waveform.

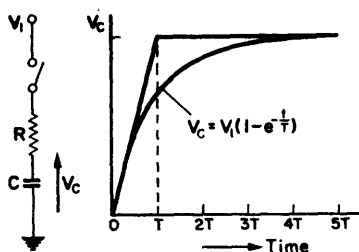


FIG. 10.44. Exponential rise in V_C as a capacitor is charged through a resistor.

instance, if v_C is allowed to rise to only 10% of the full voltage, the non-linearity is 5%:

$$\begin{aligned} v_C &= V_1[1 - \exp(-t/T)]. \\ v_C &= \frac{V_1 t}{T} \left[1 - \frac{t}{2T} + \frac{t^2}{6T^2} \dots \right] \\ &= at \left[1 - \frac{t}{2T} + \frac{t^2}{6T^2} \dots \right], \end{aligned}$$

where $a = V_1/T$.

Thus, for small values of t , $v_C = at$ (as in Fig. 10.43).

At the end of the required sweep, the capacitor must be discharged, and this may be done by a transistor connected as in Fig. 10.45.

When non-conducting, i.e. during the sweep period, the transistor should be reverse biased. A silicon transistor is preferred to a germanium type in this application because of its low leakage current.

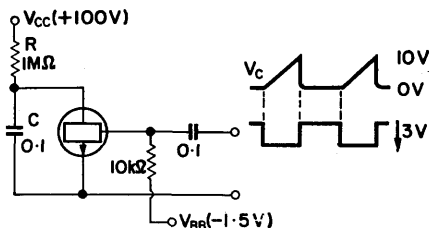


FIG. 10.45. Use of a transistor to discharge the capacitor of an R - C sweep network.

10.20. USE OF A CONSTANT CURRENT GENERATOR (Fig. 10.46)

For a given supply voltage, the performance can be improved by charging the capacitor from a constant current generator instead of through a resistor. For a rise of 10 V in 10 msec,

$$\frac{dV}{dt} = \frac{I}{C} = 1000 \text{ V/sec.}$$

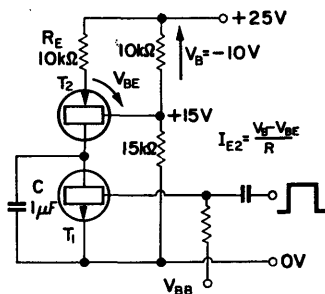


FIG. 10.46. Linear sweep generator. T_2 provides a constant current of approximately 1 mA.

Let I be 1 mA, then $C = 1 \mu\text{F}$.

$$I = \alpha I_E \div \frac{V_{B2}}{R_E}.$$

Therefore

$$R_E = 10 \text{ k}\Omega.$$

If T_2 is a silicon transistor, the resistance of the current source will be approximately r_C , i.e. several megohms.

10.21. SAWTOOTH GENERATOR USING AVALANCHE SWITCHING

If the characteristics of a transistor are plotted for collector voltages greater than those normally used, they take the form of Fig. 10.47. With increasing collector voltage a region is reached where large collector currents result from very small changes in V_C . This region is known as the avalanche region and occurs at a collector voltage at which h_{fb} tends to unity. The effect of

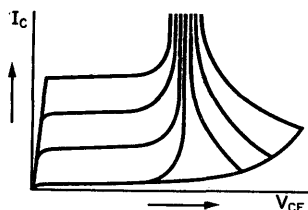


FIG. 10.47. Germanium alloy transistor characteristics showing avalanche breakdown region.

reverse biasing the base of the transistor is to hold off the breakdown point to a considerably greater voltage. Once breakdown is initiated, however, the voltage across the transistor falls to the lower value if the base resistor is sufficiently large. Figure 10.47 represents the breakdown characteristic of an OC44 transistor, and in Fig. 10.48 is drawn the circuit diagram of a sawtooth generator making use of this breakdown phenomenon.

Sweep Amplitude

The amplitude of the sweep obtained from such a circuit is effectively determined by the emitter voltage swing. The approximate range of this swing is between the breakdown voltages for (a) the collector-base junction with emitter open circuit, $V_{(BR)CBO}$, and (b) the collector-emitter with base open circuit, $V_{(BR)CEO}$. It is usually of the order of 20 V, and in this example is from 53 to 28 V.

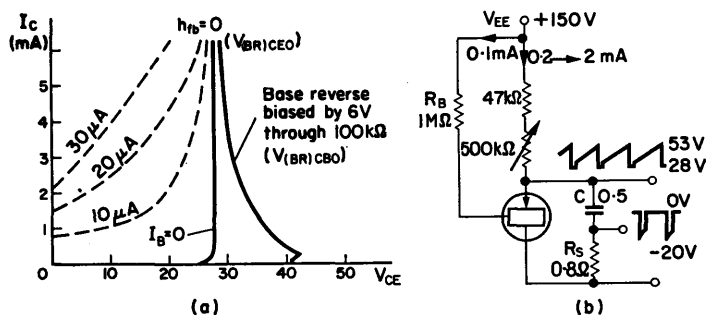


FIG. 10.48. Linear sawtooth generator using avalanche breakdown.

Operation

At the start of the sweep, the base of the transistor is held at $V_{(BR)CBO}$. The capacitor C charges through the emitter resistor until the emitter-base junction becomes forward biased (i.e. the emitter reaches $V_{(BR)CBO}$). The voltage across the transistor then falls to $V_{(BR)CEO}$.

This transition is extremely rapid because of the negative resistance effect exhibited when the transistor current increases as the voltage decreases.

Design Considerations

Supply voltage. To obtain a linear sawtooth waveform the capacitor should be charged from a constant current source, and

the use of a high voltage and large series resistor is therefore indicated. The supply voltage should be at least 5 times the sawtooth amplitude.

For a germanium alloy transistor, providing a sawtooth amplitude of 20 V, let V_{EE} be 150 V. The mean emitter voltage is approximately 40 V, and the voltage across the emitter resistor V_R is 110 V.

Sweep speed dV/dt . For a maximum sweep speed of 20 V in 5 msec,

$$\frac{dV}{dt} = \frac{20}{5 \times 10^{-3}} = 4 \times 10^3 \text{ V/sec},$$

$Q = CV$, where Q is the charge on the capacitor,

$$i = \frac{dQ}{dt} = C \frac{dV}{dt},$$

where V is the voltage across C .

If $C = 0.5 \mu\text{F}$, $i = 0.5 \times 10^{-6} \times 4 \times 10^3 = 2 \text{ mA}$.

This current is supplied through the emitter resistor.

Thus,

$$i = V_R/R_E \quad \text{and} \quad R_E = \frac{110 \text{ V}}{2 \text{ mA}} = 55 \text{ k}\Omega.$$

Let R_E be a 47 k Ω resistor in series with a 500 k Ω variable resistor. This will enable the sweep duration to be varied over the range 5–50 msec.

Base resistor R_B . This should be sufficiently large to limit the collector dissipation $P_C = I_B \cdot V_{(BR)CBO}$. The dissipation is limited to 5 mW if $R_B = 1 \text{ M}\Omega$, so this is a suitable value.

Peak emitter current. A small value resistor R_S in series with the capacitor serves to limit the peak emitter current which might otherwise damage the transistor. In this example it is made 68 Ω and the peak emitter current is limited to about 0.3 mA. A large negative-going pulse is obtainable across R_S , synchronous with the start of the sweep waveform.

10.22. MILLER TIMEBASE GENERATOR

This widely used timebase generator is illustrated in Fig. 10.49 and makes use of an amplifier having signal inversion, to which negative feedback is applied. It is in fact the integrating network previously considered in Chapter 7.

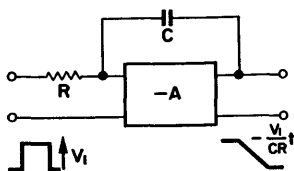


FIG. 10.49. Schematic diagram of a Miller integrator. The amplifier has signal inversion.

From eqn. (7.2),

$$\frac{v_{\text{out}}}{v_{\text{in}}} = \frac{\alpha A}{1 - A\beta} = -\frac{\alpha}{\beta} \cdot \frac{1}{1 - 1/A\beta},$$

where

$$\alpha = \frac{1}{1 + sCR} \quad \text{and} \quad \beta = \frac{sCR}{1 + sCR}.$$

Therefore

$$\frac{v_{\text{out}}(s)}{v_{\text{in}}(s)} = -\frac{1}{sCR} \cdot \frac{1}{1 - [(1 + sCR)/sCRA]}.$$

Rearranging, and for a step input of amplitude V_1 ,

$$v_{\text{out}}(s) = \frac{A}{CR(1 - A)} \cdot \frac{V_1}{s + [1/CR(1 - A)]}.$$

$$v_{\text{out}}(t) = AV_1 \left[1 - \exp\left(\frac{-t}{CR(1 - A)}\right) \right]. \quad (10.15)$$

The output voltage is thus the same as would be obtained from an amplifier fed from a capacitor $C(1 - A)$ in series with a resistor R , as shown in Fig. 10.50.

Determination of non-linearity

Expanding eqn. (10.15),

$$v_{\text{out}}(t) = \frac{AV_1 t}{CR(1-A)} \times \left[1 - \frac{1}{2} \frac{t}{CR(1-A)} - \frac{1}{6} \left(\frac{t}{CR(1-A)} \right)^2 - \dots \right]. \quad (10.16)$$

Thus, for small t the error is $\frac{1}{2} \frac{t}{CR(1-A)}$.

After one time constant, $t = CR$, the error is $50/(1-A)\%$, so for an error less than 1% the amplifier gain A should be greater than -49 . Such a gain may readily be obtained from a single pentode valve, as shown in Fig. 10.51.

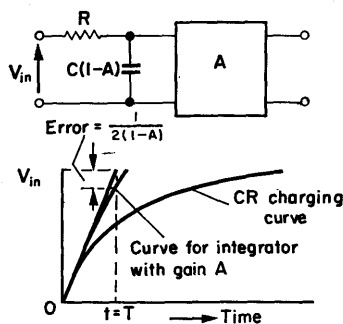


FIG. 10.50. Representation of Fig. 10.49 to show the effective increase in capacitance due to the amplifier gain.

Operation

In the initial condition, the valve is cut off by the negative bias on the suppressor grid. The control grid is slightly positive with respect to the cathode, and grid current flows. The anode voltage is at V_{AA} so C is charged to that value.

The circuit is triggered by a positive going rectangular waveform applied to the suppressor grid, the leading edge of which causes the anode to start conducting. The resulting fall in v_A is transferred to the grid, via C , carrying it negative with respect to the cathode. This effect, which occurs at $t = 0$, is self-adjusting, the negative going excursions of v_A being equal to that of v_G .

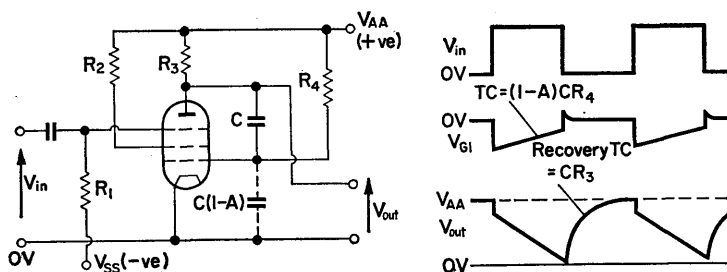


FIG. 10.51. Miller integrator. The gating waveform is applied to the suppressor grid, thus initiating "rundown".

The grid voltage takes up the necessary value to provide the required anode current. C now starts to discharge through the resistor R_4 which demands a constant current,

$$I_R = \frac{V_{AA} - v_G}{R_4} \doteq V_{AA}/R_4.$$

Since C is being discharged by this constant current the anode voltage must fall linearly. Thus,

$$Q = CV, \text{ so } i = \frac{dv_A}{dt} C,$$

and the rate of change of anode voltage,

$$\frac{dv_A}{dt} = -\frac{i}{C} = -\frac{V_{AA}}{R_4} \frac{1}{C} \text{ volts/sec,} \quad (10.17)$$

which is seen to be independent of the valve characteristics.

The time base is terminated by the arrival of the trailing edge of the gating waveform, which cuts the anode off. The anode voltage v_A immediately rises and this rise, transferred through C , brings the grid voltage to zero where it is clamped by grid current. C now charges on the recovery time constant CR_3 , restoring the system to its initial state.

Alternatively, the circuit may be considered as an integrator of the form of Fig. 10.50. Using eqn. (10.16),

$$v_A(t) = \frac{AV_{AA}t}{CR_4(1-A)} \left[1 - \frac{1}{2} \frac{t}{CR_4(1-A)} \dots \right], \quad (10.18)$$

where A is the gain of the pentode, and will have a negative sign to indicate signal inversion. For a large A the error terms may be neglected, and when this expression is differentiated, eqn. (10.17) is obtained.

10.23. TRANSISTOR MILLER TIMEBASE GENERATOR

Consider an amplifier with low input resistance, and having a transfer impedance $Z_t = v_{out}/i_{in}$, connected as in Fig. 10.52. From eqn. (7.21), the forward voltage transfer function,

$$\begin{aligned} \frac{v_{out}(s)}{v_{in}(s)} &= -\frac{Z_2}{Z_1} \frac{1}{1 - Z_2/Z_t} \\ &= -\frac{1}{sCR} \frac{1}{1 - 1/sCZ_t} \\ &= \frac{1}{CR} \frac{1}{s - 1/CZ_t}, \\ \frac{v_{out}(t)}{v_{in}(t)} &= \frac{Z_t}{R} [1 - \exp(t/CZ_t)], \end{aligned} \quad (10.19)$$

where Z_t is a negative quantity for negative feedback. Expanding eqn. (10.19) and for an input step of V_1 volts,

$$\begin{aligned} v_{\text{out}}(t) &= -\frac{V_1 Z_t}{R} \left[\frac{t}{CZ_t} + \frac{1}{2} \left(\frac{t}{CZ_t} \right)^2 + \frac{1}{6} \left(\frac{t}{CZ_t} \right)^3 + \dots \right] \\ &= -\frac{V_1 t}{CR} \left[1 + \frac{1}{2} \left(\frac{t}{CZ_t} \right) + \frac{1}{6} \left(\frac{t}{CZ_t} \right)^2 + \dots \right]. \end{aligned}$$

Thus, for an error less than 1% at $t = CR$, $50R/Z_t < 1$.

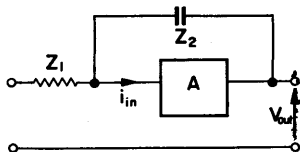


FIG. 10.52. Amplifier with transfer impedance Z_t connected as a Miller timebase generator.

Design Considerations

The operation of the basic circuit, drawn in Fig. 10.53, is similar to that of the valve circuit. During the sweep period the capacitor is charged through R and the recovery is on the time constant CR_C .

Constant Current

Ideally, it is required to maintain a constant current out of the capacitor. Since V_{BE} does not change by more than a fraction of a volt the voltage across R , and hence the current through it, is effectively constant.

Thus,

$$I_R = V_{CC}/R. \quad (10.20)$$

Not all this current is drawn from C , however, because of the base current which flows, but the circuit is designed so that i_B forms only a small part of I_R .

Output Voltage

The output waveform varies between 0 V (transistor saturated), and V_{CC} volts (transistor cut-off). Thus maximum current flows through R_C with the transistor saturated

$$I_{\max} = V_{CC}/R_C. \quad (10.21)$$

Using the values of Fig. 10.53,

$$I_{\max} = 20 \text{ V}/4 \text{ k}\Omega = 5 \text{ mA}.$$

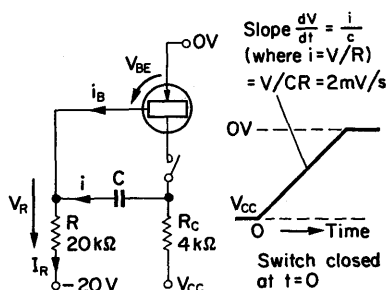


FIG. 10.53. Basic circuit of a transistor Miller timebase generator

While the time base is running C requires an additional 1 mA, so the saturation current to be supplied from the transistor is 6 mA.

Base Current

The maximum base current

$$i_B = \frac{I_{C(\text{sat})}}{h_{FE}} = \frac{6 \text{ mA}}{80} \doteq 75 \mu\text{A}. \quad (10.22)$$

At the end of the sweep i_C is thus reduced by 75 μA , i.e. an error of 7.5%.

Design Steps

1. Using eqn. (10.21) select a value for R_C to provide several milliamps maximum current.
2. Calculate the base current required for saturation.
3. Make R of such value that the percentage of the current through it, provided by i_B , equals the acceptable percentage error by which the current may deviate.
4. Select C to give the required sweep time constant and check that the recovery time constant CR_C is acceptable.
5. Arrange suitable switching circuitry.

DESIGN EXAMPLE 10.5

Required, a timebase waveform of 20 V amplitude, 10 msec duration, and 10 msec recovery. The waveform is to have a linearity tolerance of 5%. Since the sweep amplitude is to be 20 V this value is chosen for V_{CC} .

Collector resistor R_C . To ensure a current of several milliamps, so that the full current gain h_{FE} of the transistor is used and a low output resistance is obtained, let $R_C = 4 \text{ k}\Omega$.

Base current. For an h_{FE} of 80,

$$i_{B(\max)} = \frac{20 \text{ V}}{4 \text{ k}\Omega} \times \frac{1}{80} = 60 \mu\text{A}.$$

Resistor R . For 5% error, I_R should be 20 times $i_{B(\max)}$ ($\div 1 \text{ mA}$). Therefore

$$R = V_{CC}/I_R = \frac{20 \text{ V}}{1 \text{ mA}} = 20 \text{ k}\Omega.$$

Capacitor.

$$\frac{dV}{dt} = \frac{20 \text{ V}}{10 \text{ msec}} = 2000 \text{ V/sec} = \frac{V}{CR}.$$

$$C = \frac{V}{R} \frac{dt}{dV} = \frac{20 \text{ V}}{2 \times 10^3 \times 20 \times 10^3} = 0.5 \mu\text{F}.$$

Recovery time. The recovery time constant $CR_C = 0.5 \times 10^{-6} \times 4 \times 10^3 = 2 \text{ msec}$. The capacitor will thus be able to charge 20 V in 10 msec and the specification is met.

Gating. In the final circuit of Fig. 10.54, T_2 is used as a switch. It acts as a common base stage and does not change the current gain appreciably.

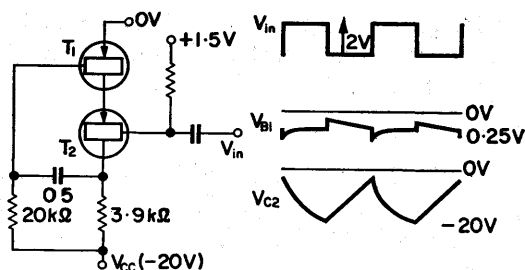


FIG. 10.54. Completed circuit of Design Example 10.5. Gating is effected by T_2 .

10.24. REDUCTION OF RECOVERY TIME

The recovery time, which equals $5CR_C$, can be reduced by decreasing either R_C or C . Reduction of R_C requires an increase in base current which will reduce linearity. Alternatively, a reduc-

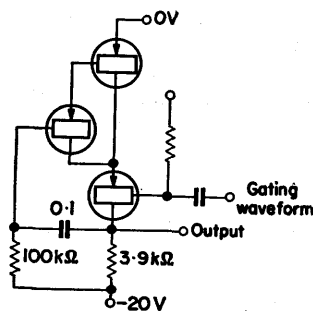


FIG. 10.55. Use of Darlington connection to reduce recovery time.

tion in C necessitates a larger value for R and again linearity is reduced. A solution is to make use of the Darlington connection which increases the current gain to approximately $(h_{FE})^2$. The base current is then reduced by (h_{FE}^{-1}) permitting R to be increased without a reduction in linearity. The circuit is drawn in Fig. 10.55.

If $R = 100 \text{ k}\Omega$ for a 10 msec sweep duration $C = 1 \text{ }\mu\text{F}$, and the recovery time, $5CR_C = 2 \text{ msec}$. This arrangement will provide a linearity at least 10 times better than in the previous example.

CHAPTER 11

Some General Design Considerations

IN THIS chapter consideration is given to some general aspects of electronic design practice which are applicable to all the preceding design chapters. Subjects dealt with include the factors influencing the choice of resistors and capacitors, and the design centre rating system for thermionic valves. The chapter is concluded with some notes on screening and earths.

11.1. RESISTORS⁽⁴²⁾

The main characteristics to be considered in selecting a resistor for a specific application are size, wattage rating, stability and tolerance. There are in addition, noise, maximum operating voltage, frequency range, and temperature and voltage coefficients, each of which may also be of importance in special cases.

Resistors may be divided into two groups, high stability and general purpose. The high stability group includes cracked carbon, wirewound and metal film resistors, while the general purpose component is usually of carbon composition construction.

Wattage Rating

This specifies the maximum amount of power which may be dissipated in a component without excessive rise in temperature, and is usually stated for operation in an ambient temperature up to 40°C. Where the ambient temperature is in excess of this figure, the component should be derated in accordance with the manufacturers derating curves. Typically, a component rated at

40°C might have its maximum permissible dissipation reduced by 50% when used in an ambient of 70°C. It is good design practice to operate carbon resistors at 60% of their rated value.

Stability

This is an indication of the ability of a resistor to retain its stated value during a reasonable period of storage and also throughout its useful life.

Tolerance

Stated as a percentage of the resistance of the component, this indicates the maximum and minimum values which may be expected of a component having a given nominal resistance. The most common tolerances are ± 20 , ± 10 and $\pm 5\%$ and a designer should anticipate that the majority of resistors will have values which lie close to the two limits. Components having 5% tolerance are normally only used in critical positions. In semi-critical positions such as anode, screen and bias resistors 10% tolerance may be used, while 20% components should only be employed as grid resistors or in other non-critical positions.

Preferred Value

Resistors are manufactured in a range of preferred values such that any resistor plus its tolerance is approximately equal in value to the next larger resistor minus its tolerance. The preferred values given in Table 11.1 are in accordance with both the American R.M.A. and British Standard specifications.

TABLE 11.1 PREFERRED RESISTOR VALUES

10**	16	27	43	68**
11	18*	30	47**	75
12*	20	33**	51	82*
13	22**	36	56*	91
15**	24	39*	62	100**

Resistors are commonly available in multiples of ten of the stated values, between 10Ω and $10\text{ M}\Omega$. The complete list of Table 11.1 is available in 5% components. Those marked with one asterisk are supplied in 5 and 10% tolerances, while those with two asterisks are obtainable in 5, 10 and 20%.

11.2. RESISTOR TYPES

Carbon Composition

These are the cheapest resistors available and hence the most widely used. American types are available in ratings of $\frac{1}{4}$, $\frac{1}{2}$, 1, 2, 4 and 5 W, while British types include ratings of $\frac{1}{10}$, $\frac{1}{4}$, $\frac{1}{2}$, 1 and $2\frac{1}{2}$ W. Stability generally is poor and the resistance may change several percent during lengthy periods of storage, and as much as 10% throughout the normal life of the resistor. In addition to thermal agitation noise which is present in all resistive elements, the composition resistor generates extra noise when current is flowing through it. This fact is only of serious importance in such specialized applications as are found, for instance, in the medical-electronic field where requirements often couple high gain with low noise.

Cracked Carbon

Where a resistor of greater stability is required the cracked carbon type is employed. In normal use changes in resistance rarely exceed 2%, and such resistors are extensively used in the analogue computing field. Standard tolerances are ± 1 and $\pm 5\%$ and wattage ratings are available from $\frac{1}{10}$ up to 2 W.

Wirewound Resistors

These are manufactured with either ordinary or non-inductive windings and are used where even greater stability is desired, or where it is necessary to dissipate more power than is possible with carbon resistors. The load of a cathode follower circuit is

a typical application. Due to its type of construction the maximum value normally encountered is of the order of 50 k Ω . Wire-wound resistors operate with high surface temperatures and should be sited so as to ensure adequate ventilation and to avoid damage to adjacent components.

11.3. CAPACITORS⁽⁴³⁾

Capacitors are characterized by their stability, tolerance, working voltage, dielectric absorption, leakage current, insulation resistance and power factor. The first two of these characteristics have the same significance, referred to the value of capacitance, as was stated in § 11.1 for resistors.

Working Voltage

This indicates the maximum voltage to which the capacitor should be subjected in normal use. It is commonly given for both d.c. and a.c. conditions and is valid over a given range of ambient temperatures. Where the stated ambient is exceeded, the working voltage should be suitably derated. Both working voltage and temperature influence the expected life of capacitor. In some types, operation at a temperature 10°C higher than the permitted maximum results in a reduction in life of 50%. Operation of capacitors at voltages much less than the stated maximum extends the life of the component significantly; an important consideration when designing equipment for which a high degree of reliability is required.

Dielectric Absorption

If a fully charged capacitor is momentarily discharged, and then left open circuited, a further charge will build up in the component due to the energy absorbed by the dielectric during the charging process. The phenomenon is known as dielectric absorption and results in a reduction in capacitance as frequency is increased. It also introduces undesirable time lags in pulse and high speed switching circuits.

Leakage Resistance

When a capacitor is charged from a d.c. source and the source is then removed, the charge will not be held indefinitely but will leak away due to the flow of leakage currents. The effect is as if the capacitor was shunted by a resistance, and the time a given component takes to discharge to 36.8% of its initial charge is usually given as a CR time constant. Leakage currents increase with temperature and are of significance where the capacitor is used to couple two points of different d.c. potential.

Insulation Resistance

This is an indication of the effective series resistance of a capacitor, and since it varies with capacitance, again a figure of ohms-farads is quoted. Where a capacitor is to be shunted by a high value resistance to provide a given time constant, the effect of insulation resistance on the resulting time constant should be considered. Such a requirement is often met in servomechanisms when stabilization is to be achieved by the use of passive networks.

Power Factor

When an alternating current flows in a capacitor the current leads the voltage by an angle somewhat less than the ideal 90° . The power factor of a component is the cosine of this phase angle and for a perfect capacitor equals zero. The power factor may also be defined as the ratio of power wasted per cycle to useful power per cycle. It is a function of applied voltage and determines the capacitor internal heating.

11.4. CAPACITOR TYPES

Capacitors are most conveniently grouped according to the dielectric used. Only the more commonly encountered types are here discussed.

Ceramic

These may be divided into two groups according to their permittivities and temperature coefficients. The first group having low permittivity, low loss and precise temperature coefficients find typical use in tuned circuits of radio receivers for temperature compensating purposes. Those having permittivities in excess of 500 generally provide less stability with changes in temperature, having higher losses and lower d.c. working voltage than the low permittivity types. They are only suitable for working with small a.c. voltages and are used mainly as r.f. bypass capacitors. Values up to $0.015 \mu\text{F}$ are commonly available with tolerances of $\pm 20\%$.

Mica

Mica is a dielectric which provides high stability and low loss, and enables capacitors to be made with small capacitance tolerances. Working voltages are generally in excess of 300 V and insulation resistance is in the range 3000–6000 $\text{M}\Omega$. Where good long-term stability is required silvered mica components may be used. They exhibit very small changes in value at frequencies up to several megacycles per second and are often used in v.h.f. intermediate frequency transformers. Mica capacitors have very low power factors and are available with 5, 10 and 20% tolerances and values ranging from 33 pF to $0.01 \mu\text{F}$.

Polystyrene

The main advantages of the polystyrene capacitor are its low dielectric absorption, excellent power factor and very high insulation resistance which varies little with changes in temperature, enabling it to be used in long time constant circuits. This type of capacitor is extensively used in the analogue computing field. Its main disadvantage is the maximum temperature at which it should be used. This should not normally exceed 60°C .

Polyester

These are low cost components with high insulation resistance, but whose dielectric absorption is worse than that of polystyrene.

Impregnated Paper

These are relatively cheap general purpose capacitors providing high capacitance to volume ratios and capable of working at reasonably high d.c. voltages. Single units in tubular form are manufactured in values between 0.001 and 1.0 μF , generally having $\pm 20\%$ tolerance. For greater capacitance, a number of units are enclosed in a metal case and connected in parallel. Irrespective of the d.c. working voltages, the maximum a.c. working voltage for a single unit is normally about 300 V r.m.s. at 50 c/s. Insulation resistance varies according to the impregnant used and decreases with increasing temperature. For use for coupling between anode and grid, plastic impregnated capacitors are preferred to the wax impregnated type because of their higher resistance. The power factor of impregnated paper capacitors is in the range 0.005–0.01 at 1 kc/s and increases with frequency. Stability is normally of the order of 1–5%.

Metallized Paper

The use of metallized paper results in a smaller component for a given capacitance, and has the advantage that dielectric punctures caused by the application of excessive voltages are self-healing. Insulation resistance, however, is much less than that of impregnated paper types and for this reason they are not used for coupling purposes. They are, however, commonly used for decoupling h.f. and i.f. circuits where the main requirement is that of low impedance. The power factor of a metallized paper capacitor is about 0.02 at 1 kc/s and capacitance stability is normally between 5 and 10%.

Electrolytic Capacitors

These have a higher capacitance-volume ratio than any other capacitor, particularly at low working voltages, but they may only be used in circuit positions where they are subjected to substantially direct voltage. The capacitors must be connected correctly with regard to polarity and are extensively used as a.f. bypass and smoothing components. When used for smoothing in power supply circuits, care must be taken to ensure that not only is the maximum ripple voltage not exceeded, but also that the d.c. voltage plus peak ripple voltage is less than the voltage rating of the component. The maximum rated voltage for electrolytic capacitors rarely exceeds 500 V and is commonly made much less; 6 and 12 V ratings are readily available. When operated at the stated working voltage, leakage current is fairly high and increases with temperature. The operation of normal type electrolytic capacitors in high ambient temperatures and in the presence of large a.c. voltages tends to reduce their service life. These conditions should therefore be avoided in the interests of reliability. Where high ambient temperatures are expected tantalum electrolytic capacitors may be employed. These generally have lower leakage current than the normal type and are extremely small. Ratings are available between 2.5 and 25 V which makes them suitable for use in transistor circuits. Electrolytic capacitors generally have very wide tolerances, $-20\% + 100\%$ being typical.

11.5. VALVE RATING SYSTEMS

A thermionic valve has usually been designed for a specific application, and the limiting conditions under which it may be operated are stated in the maker's data sheets. Such data is provided to enable the equipment designer to obtain maximum service life for the valve when used in the application for which it is intended. There are various systems by which these limiting conditions may be stated and the two most often used are

the "absolute-maximum rating system" and the "design-centre rating system".

Absolute Maximum System

This system originated in the early days of the thermionic valve, when all power supplies were obtained from batteries, so that all supply voltages could only decrease with time and rarely exceed their original values. The limitations imposed by this system only take account of changes in operating conditions caused by the anticipated spread in valve characteristics. As the name implies, such limitations are absolute, and the designer should ensure that they are not exceeded under the worst conditions. He should therefore take account of possible supply voltage fluctuations, load changes, variations in environmental conditions and tolerances in component values, and for each limitation, establish some average design value which is less than the stated absolute maximum.

Design Centre System

The three types of power supply systems now most commonly in use are, a.c. and d.c. mains, storage battery with connected charger, and dry batteries. To take account of the expected voltage fluctuations from these various systems, and because of the danger of absolute ratings being treated as if they were design ratings, valve data sheets now generally list limiting conditions according to the design centre system. In this system, the valve manufacturer has selected limiting values such that, providing they are not exceeded, the normal variations in power supply voltages, environmental conditions, component values and loads, etc., will not cause the absolute ratings for that type of valve to be exceeded. It is assumed that good design practice is followed and that the valve is only used for the purpose for which it has been manufactured.

For both these systems the stated ratings are to some extent interdependent and care should be taken to ensure that in work-

ing at one maximum rating another rating is not automatically exceeded. It is, in fact, quite common for a single rating to determine the operating conditions of a valve.

11.6. GENERAL RECOMMENDATIONS

The subjects of valve rating systems and recommendations for the use of thermionic valves, have been treated in detail elsewhere.⁽⁴⁴⁾ A few of the more important considerations are set out below.

Supply and Heater Voltages

Provided that design centre ratings have not been exceeded, equipment may be operated from power supplies whose voltages variations are limited to $\pm 10\%$. Where, however, such variations are encountered, and where mains transformer tapplings are provided, it is good practice to make suitable adjustment so as to operate the valve heaters at a voltage or current as close to the nominal value as possible. Operation at the rated voltage or current leads to optimum valve life and performance. For indirectly heated valves with heaters connected in parallel, the heater voltage of individual valves should, in any case, be within $\pm 7\%$ of the rated voltage when the supply voltage is at its nominal value.

Valve Electrodes

Valves should always be operated with a d.c. connection between each electrode and the cathode. For indirectly heated valves the electrode voltages quoted in the maker's data sheets are given with respect to the cathode.

The Cathode

With the exception of certain rectifier valves, the voltage between cathode and heater should be kept low and generally

should not exceed 100 V. Where this voltage cannot be kept low, the resistance between heater and cathode should be kept as high as possible, i.e. a high value cathode resistor is indicated. However, from consideration of hum and heater-cathode leakage current, the cathode resistor should not normally be greater than 20 k Ω .

The Control Grid

The maximum permissible value of resistance between control grid and cathode is usually given in the maker's data sheets and this value should not be exceeded. The limit is imposed to prevent reverse grid current carrying the grid potential increasingly positive, thus causing increasing anode current and leading to the possible destruction of the valve. It is good design practice to keep the grid-cathode resistance as low as possible, and generally, with self-bias, 1 M Ω should be the maximum value used.

The Screen Grid

As the onset of control grid current is often determined by the screen grid voltage, in circuits where a low grid bias voltage is used, low screen grid voltages should be avoided. In some power output circuits it is common practice to connect the screen grid direct to h.t. provided that the screen dissipation is not exceeded. In the presence of large signals, however, the effect of a cathode resistor is reduced and a screen resistor then becomes necessary; one which drops the h.t. voltage by 20% is usually sufficient.

11.7. SCREENING⁽⁴⁵⁾

When an electric current flows in a conductor electromagnetic energy is radiated, the magnitude of which is a function of the amplitude and frequency of the current. Any conductor situated within the radiated field will have some of this energy induced in it, and thus undesirable coupling between different parts of a circuit may result. It is sometimes possible to mitigate this effect

by arranging that equal and opposite self-cancelling voltages are induced. This is the principle which dictates that the conductors providing the alternating filament current to a valve should be twisted together, to avoid the pick up of hum voltages at mains frequency. The method is effective up to 5 kc/s, and the effectiveness depends to a large extent on the uniformness and tightness of the twist employed. The adequate separation of the component parts of a circuit from a radiating source will also reduce pick up, since, at a distance, the flux density will be reduced. Where however such methods are ineffective, an attempt must be made to contain the radiated field by means of a conducting screen, and the following notes are intended as a guidance to this end.

Selection of Screening Materials

The effectiveness of a conducting screen in reducing the energy of an electromagnetic wave is the result of two effects.

- (a) Absorption loss as the wave passes through the conducting medium.
- (b) Reflection loss occurring at each surface of discontinuity.

Both are frequency dependent and are also affected by the nature of the material. The provision of a screen should aim at causing the maximum overall loss to a radiated field, and the material chosen depends on whether the field is largely electric or magnetic.

In general, magnetic materials provide greater absorption loss to radiated electromagnetic energy, while good conductors, such as copper or aluminium, give more reflection loss. These latter materials make effective screens for electric fields, but their efficiency falls as frequency is increased. Aluminium is nevertheless commonly used for v.h.f. intermediate frequency transformer screening cans. In the presence of an alternating magnetic field, the screening efficiency of aluminium and copper falls as frequency decreases. At low (audio) frequencies, therefore, it is necessary to employ such high permeability metals as Mu-metal or Permalloy to provide satisfactory screening of magnetic fields.

Screening of Cables

This is mainly influenced by the impedance of the radiating source and the pick-up cable.

High Impedance Radiators

These are conductors having large series impedance (greater than $1\text{ k}\Omega$), in which h.f. voltages may be developed, with respect to earth, with very little current flowing. The radiation field is largely electric and can induce large h.f. voltages in adjacent high impedance circuits, but little current in low impedance circuits. A high impedance circuit is here intended to mean a circuit having a high termination impedance. A lead connected to the control grid of a valve may therefore be considered to be a high impedance circuit, and thus susceptible to such radiation. The use of copper braid screening is effective in preventing pick up from such a source, provided that the screen is at earth potential along its entire length. For short leads earthing at one end is usually sufficient, but at high frequencies and for long leads the screening should normally be earthed at more than one point.

Low Impedance Radiators

These are metallic conductors making a closed loop, which permits large currents to flow while developing little voltage. The fields resulting from such a source are largely magnetic and can induce large currents in low impedance circuits but little voltage in high impedance circuits. Conventional copper braiding is not effective in preventing magnetic coupling below 5 kc/s , but its effectiveness improves as frequency increases.

Earths and Earth Loops

Where, in a piece of electronic equipment, connections are made to earth at various points, currents may flow between such points, through the earth path. If these currents are at high fre-

quency, the earth loops so formed can act as low impedance radiators as defined above. The resulting fields, which are largely magnetic, can induce currents in low impedance circuits, physically close to earth, which are difficult to remove. For this reason, in high frequency equipment it is good practice to make earth connections at a single point.

The need for care in the use of multiple earths is not restricted to equipment operating at high frequencies. It is, for instance, of extreme importance in zero frequency (d.c.) amplifiers, in which requirements often couple high gain with low noise. In order to meet the low noise requirements, three different earths are commonly specified, signal earth, chassis earth and power earth. The first of these provides a reference for signal voltages and must therefore be kept "clean". Where it is necessary to make connection between the signal path and earth, for instance through a series C - R network for stabilization purposes, it is to signal earth that such connection is made. It is necessary that the chassis of an amplifier be held at earth potential for safety in handling, and also so that valve screening cans, which are connected to chassis, shall be effective as screens. A separate lead is therefore provided for earthing the chassis, and this too should be kept relatively free from noise. Since most noise arises from the power supplies, either in the form of h.t. ripple or in mains hum, the return path of h.t. power supplies is via a separate power earth connection. The three earths thus specified should not be "commoned" at the amplifier, but should be connected by separate leads to a single earth point at the power supply unit. This ensures that noise currents do not flow in the signal and chassis earths, giving rise to noise voltages at the amplifier output.

APPENDIX A

Solutions of Simple Network Problems

Basic Network Theorems^{46,47}

(a) KIRCHHOFF'S CURRENT LAW (KCL)

The algebraic sum of currents flowing into a point (or node) is zero. Thus, in Fig. A.1,

$$i_1 + i_2 + i_3 = 0. \quad (\text{A.1})$$

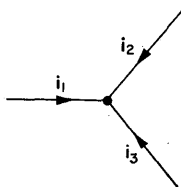


FIG. A.1. Kirchhoff's current law. $i_1 + i_2 + i_3 = 0$.

(b) KIRCHHOFF'S VOLTAGE LAW (KVL)

The sum of voltages around a closed loop is zero. Thus, in Fig. A.2,

$$v_1 + v_2 + v_3 = 0. \quad (\text{A.2})$$

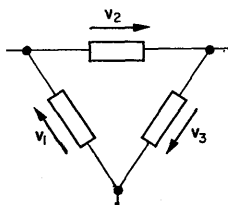


FIG. A.2. Kirchhoff's voltage law. The arrows indicate that the instantaneous voltage is measured from head to end.

$$v_1 + v_2 + v_3 = 0.$$

EXAMPLE A.1. It is required to find the voltage across R_3 of Fig. A.3.

By KCL, the current flowing into node A is equal to the current flowing out of it

$$i = i_1 + i_2; \quad (\text{A.3})$$

and for node B ,

$$i_2 = i_3. \quad (\text{A.4})$$

From Ohm's law,

$$i_1 = \frac{v_1}{R_1}, \quad i_2 = \frac{v_1 - v_2}{R_2}, \quad i_3 = \frac{v_2}{R_3}.$$

Using conductances in place of resistances, eqns. (A.3) and (A.4) can be written as follows:

$$(G_1 + G_2) v_1 - G_2 v_2 = i \quad (\text{node } A), \quad (\text{A.5})$$

$$-G_2 v_1 + (G_2 + G_3) v_2 = 0 \quad (\text{node } B). \quad (\text{A.6})$$

These equations can be written down on inspection. The elements associated with v_1 are G_1 and G_2 , and the coupling element with node B is G_2 .

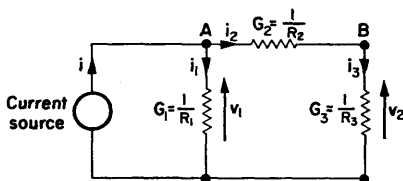


FIG. A.3. Network for example A.1. The elements are drawn as conductances for nodal analysis.

Similarly, for node B , at which the voltage is v_2 , the elements are G_2 and G_3 , and the coupling element is again G_2 . In this case there is no current generator and the right-hand side of the equation is zero.

From the above equations, the voltages v_1 and v_2 can be found as functions of the input current. A simple method of solving these simultaneous equations is as follows.

The coefficients of the left-hand sides of the equations are set out as an array,

$$\begin{vmatrix} (G_1 + G_2) & -G_2 \\ -G_2 & (G_2 + G_3) \end{vmatrix}.$$

If the elements of this system are cross-multiplied, the *determinant* of the equations is obtained, provided that the product of the upper right and lower left terms is made negative.

Thus, the determinant

$$\begin{aligned}\Delta &= (G_1 + G_2)(G_2 + G_3) - (-G_2)^2, \\ &= (G_1G_2 + G_2G_3 + G_3G_1).\end{aligned}\quad (\text{A.7})$$

Replacing the left-hand column of the coefficient array with the right-hand sides of eqns. (A.5) and (A.6) the following array is obtained:

$$\begin{vmatrix} i & -G_2 \\ 0 & (G_2 + G_3) \end{vmatrix}.$$

Cross-multiplying,

$$\Delta_{v1} = (G_2 + G_3)i. \quad (\text{A.8})$$

Similarly, if the right-hand side of the coefficient array is replaced by the right-hand sides of eqns. (A.5) and (A.6),

$$\begin{vmatrix} (G_1 + G_2) & i \\ -G_2 & 0 \end{vmatrix},$$

and the determinant is,

$$\Delta_{v2} = G_2i. \quad (\text{A.9})$$

Using eqns. (A.7), (A.8) and (A.9),

$$\begin{aligned}v_1 &= \frac{\Delta_{v1}}{\Delta} \\ &= \frac{(G_2 + G_3)i}{(G_1G_2 + G_2G_3 + G_3G_1)}.\end{aligned}\quad (\text{A.10})$$

$$\begin{aligned}v_2 &= \frac{\Delta_{v2}}{\Delta} \\ &= \frac{G_2i}{(G_1G_2 + G_2G_3 + G_3G_1)}.\end{aligned}\quad (\text{A.11})$$

All the simultaneous equations in this book can be solved by this method which may be extended to deal with more complicated systems.⁽⁴⁸⁾ Since v_1 and v_2 are the voltages at the nodal points, eqns. (A.5) and (A.6) are the *nodal equations* and are formed by *nodal analysis*.

EXAMPLE A.2. Consider the network of Fig. A.4. If the dependent variables are assumed to be the loop or circual currents i_1 and i_2 , these can be determined by the application of KVL. The currents are drawn flowing in a clockwise direction to assist in the formalization of the equations. Thus,

$$(R_1 + R_2)i_1 - R_2i_2 = v, \quad \text{for loop 1,} \quad (\text{A.12})$$

$$-R_2i_1 + (R_2 + R_3 + R_4)i_2 = 0, \quad \text{for loop 2.} \quad (\text{A.13})$$

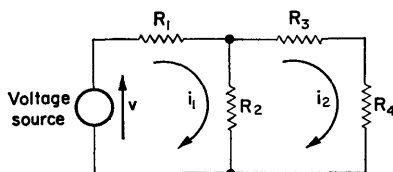


FIG. A.4. Network for example A.2. Loop currents i_1 and i_2 are drawn in a clockwise direction.

Proceeding as in the previous example, the coefficient array is

$$\begin{vmatrix} (R_1 + R_2) & -R_2 \\ -R_2 & (R_2 + R_3 + R_4) \end{vmatrix}$$

and the determinant is

$$\begin{aligned} \Delta &= (R_1 + R_2)(R_2 + R_3 + R_4) - (-R_2)^2 \\ &= (R_1 R_2 + R_1 R_3 + R_1 R_4 + R_2 R_3 + R_2 R_4). \end{aligned} \quad (\text{A.14})$$

$$\begin{vmatrix} v & -R_2 \\ 0 & (R_2 + R_3 + R_4) \end{vmatrix}$$

so that,

$$\Delta_{11} = (R_2 + R_3 + R_4)v, \quad (\text{A.15})$$

and,

$$i_1 = \frac{\Delta_{11}}{\Delta} = \frac{(R_2 + R_3 + R_4)v}{R_1(R_2 + R_3 + R_4) + R_2(R_3 + R_4)}.$$

Also,

$$\begin{vmatrix} (R_1 + R_2) & v \\ -R_2 & 0 \end{vmatrix},$$

so that,

$$\Delta_{12} = vR_2, \quad (\text{A.16})$$

and,

$$i_2 = \frac{\Delta_{12}}{\Delta} = \frac{vR_2}{R_1(R_2 + R_3 + R_4) + R_2(R_3 + R_4)}.$$

Equations (A.12) and (A.13) are *circuital equations* and are formed by *circuital analysis*.

APPENDIX B

Application of the Laplace Transform

WHEN a network contains reactive as well as resistive elements, the equations are in integral-differential form. For the LCR circuit shown in Fig. B.1, the equation resulting from the application of Kirchhoff's voltage law is

$$v = Ri + \frac{1}{C} \int_0^t i \, dt + L \frac{di}{dt}. \quad (\text{B.1})$$

By using the Laplace Transformation it is possible to transform the equation into an algebraic form, which can then be treated in same manner as the equations of Appendix A.

Equation (B.1) after transformation becomes,

$$\begin{aligned} v(s) &= Ri(s) + \frac{1}{sC} i(s) + sLi(s) \\ &= \left(R + \frac{1}{sC} + sL \right) i(s), \end{aligned} \quad (\text{B.2})$$

where v and i are functions of the Laplace variable s instead of time as is implied in eqn. (B.1). Integration is indicated by an s in the denominator, and differentiation by an s in the numerator. Thus in Fig. B.1 R , C and L

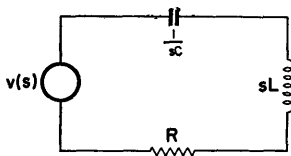


FIG. B.1. An L - C - R circuit with transformed impedance.

can be represented by the transformed impedances R , $1/sC$ and sL . (If before the application of the voltage there is charge on the capacitor or current in the inductance, the representation is a little more complex and reference should be made to a standard work on network theory.^(46,47))

Thus,

$$i(s) = \frac{v(s)}{R + (1/sC) + sL}. \quad (\text{B.3})$$

If v is a sinusoidal signal, which is the case for a frequency response measurement, the Laplace variable s can be replaced by $j\omega$. The circuit current as a function of frequency is then,

$$i(j\omega) = \frac{v(j\omega)}{R + (1/j\omega C) + j\omega L}. \quad (\text{B.4})$$

If it is required to determine the form of the output for a given input signal, the equation can be changed back into the time domain by using the inverse transforms given in Table B.1. This method is employed in § 3.9 to find the time response of a capacitively coupled amplifier.

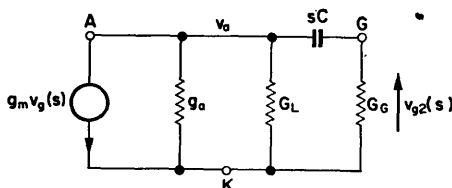


FIG. B.2. Transformed network for nodal analysis of the low frequency performance of a valve amplifier.

EXAMPLE B.1 Figure B.2 represents the anode network of a n amplifier. It is required to find the frequency response and the output signal resulting from the application of a rectangular step of voltage to the input terminals of the amplifier.

The nodal equations are written down by inspection, using the method given in Appendix A:

$$(g_a + G_L + sC) v_a(s) - sC v_{g2}(s) = -g_m v_{g1}(s), \quad (\text{B.5})$$

$$-sC v_a(s) + (G_G + sC) v_{g2}(s) = 0. \quad (\text{B.6})$$

$$v_{g2}(s) = \frac{-g_m sC v_{g1}(s)}{(g_a + G_L + sC)(G_G + sC) - (sC)^2} \quad (\text{B.7})$$

$$= \frac{-g_m}{(G_G + g_a + G_L)} \cdot \frac{1}{1 + [G_G(g_a + G_L)/(G_G + g_a + G_L) sC]} v_{g1}(s)$$

or

$$\frac{v_{g2}(s)}{v_{g1}(s)} = A_0 \frac{1}{1 + (1/sT_2)} \quad (\text{3.6})$$

if the substitutions of § 3.5 are used.

TABLE B.1. LAPLACE TRANSFORM PAIRS

	Function of time	Function of s	
1.	$1 (t > 0)$	$\frac{1}{s}$	Step function of unit amplitude applied at time $t = 0$
2.	$V (t > 0)$	$\frac{V}{s}$	Step function of amplitude V
3.	$\exp(-at)$	$\frac{1}{s + a}$	
		$\frac{1}{s} \frac{1}{1 + (a/s)}$	
4.	$1 - \exp(-at)$	$\frac{a}{s(s + a)}$	
		$\frac{1}{s} \frac{1}{1 + (a/s)}$	

If the frequency response expression is required, the Laplace variable is replaced by $j\omega$.

Thus,

$$\frac{v_{g2}(j\omega)}{v_{g1}(j\omega)} = A_0 \frac{1}{1 + (1/j\omega T_2)}.$$

Since the Laplace transform of a rectangular step input of amplitude V is V/s (from Table B.1), the output as a function of s is

$$v_{g2}(s) = A_0 \frac{1}{1 + (1/sT_2)} \cdot \frac{V}{s}. \quad (\text{B.8})$$

By using transform pair 3 from Table B.1 the output response as a function of time can be obtained directly.

Thus,

$$v_{g2}(t) = A_0 \exp(-t/T_2) V. \quad (\text{B.9})$$

The form of the response is shown graphically in Fig. 3.18.

APPENDIX C

Symbols used in this book

British Standard Specification No. 3363, 1961, entitled "Letter symbols for light-current semi-conductor devices", makes recommendations for symbols to be used when describing transistor circuits. This system has been extended, in the same form, for use with thermionic valve circuits and is stated briefly below.

Symbols

<i>a</i> or <i>A</i> , Anode	} Thermionic valve
<i>g</i> or <i>G</i> , Grid	
<i>k</i> or <i>K</i> , Cathode	
<i>s</i> or <i>S</i> , Screen	

<i>c</i> or <i>C</i> , Collector	} Transistor
<i>b</i> or <i>B</i> , Base	
<i>e</i> or <i>E</i> , Emitter	

v or *V*, Voltage

i or *I*, Current

P, Power

$\left. \begin{matrix} i \\ v \end{matrix} \right\}$ with subscripts $\begin{pmatrix} c \\ b \\ e \end{pmatrix}$ or $\begin{pmatrix} a \\ g \\ k \end{pmatrix}$ represents the instantaneous

value of a varying component.

$\left. \begin{matrix} i \\ v \end{matrix} \right\}$ with subscripts $\begin{pmatrix} C \\ B \\ E \end{pmatrix}$ or $\begin{pmatrix} A \\ G \\ K \end{pmatrix}$ represents the instantaneous

total value.

$\left. \begin{matrix} I \\ V \end{matrix} \right\}$ with subscripts $\begin{pmatrix} c & a \\ b & \text{or } g \\ e & k \end{pmatrix}$ represents the r.m.s. value of a

varying component.

$\left. \begin{matrix} I \\ V \end{matrix} \right\}$ with subscripts $\begin{pmatrix} C & A \\ B & \text{or } G \\ E & K \end{pmatrix}$ represents the d.c. or no-signal

value. Maximum and minimum values are indicated by the use of subscripts (max) and (min).

Electrical Parameters

	<i>Device</i>	<i>Associated Circuit</i>
Resistance	r	R
Reactance	x	X
Impedance	z	Z
Admittance	y	Y
Conductance	g	G
Inductance	l	L
Capacitance	c	C

Double Subscripts

Where capital V has two capital subscripts, this represents a voltage supply provided for the particular electrode of the device. For example V_{CC} refers to a transistor collector supply voltage while V_{GG} represents a voltage supply provided specifically for the grid of a thermionic valve. Where the two subscripts are different, the first subscript denotes the terminal at which the voltage is measured and the second subscript denotes the reference terminal. For example, V_{BE} represents the d.c. or

no-signal voltage measured at the base, with respect to the emitter of a transistor. Other parameters may also be denoted by the use of double subscripts, as with c_{gk} the capacitance which exists between the grid and cathode of a valve, or r_{bb} the resistance between the actual base point and the base connector.

Matrix Notation

The first subscript in the matrix notation for semiconductor devices identifies the element of the four-pole matrix. Thus,

i input
o output
f forward
r reverse

A second subscript is used to identify the circuit configuration:

e common emitter
b common base
c common collector

For example, using *h* parameters:

$h_{ib}(h_{11})$ —The small signal value of the input impedance with the output short circuited to alternating current.

$h_{rb}(h_{12})$ —The small signal value of the reverse voltage transfer ratio with the output voltage held constant.

$h_{fb}(h_{21}, \alpha)$ } The small signal forward current transfer ratio with
 $h_{fe}(h'_{21}, \beta)$ } the output short circuited to alternating current.

$h_{ob}(h_{22})$ } The small signal value of the output admittance
 $h_{oe}(h'_{22})$ } with the input open circuited to alternating current.

Static values of parameters are indicated by capital subscripts,

e.g.,

h_{FE}

The static value of the forward current transfer ratio with the output voltage held constant.

Additional Symbols

f_α	}	The frequency at which the magnitude of the parameter indicated by the subscript is 0.707 of the low frequency value.
f_β		
f_1		The frequency at which the modulus of h_{fe} is equal to unity.
I_{CBO}	}	The collector current when the collector is biased in the reverse (high resistance) direction with respect to the reference terminal and the other terminal is open circuited.
I_{CEO}		
$V_{(BR)}$		Breakdown voltage.
$V_{(BR)CBO}$	}	The breakdown voltage between the terminal indicated by the first subscript when it is biased in the reverse (high resistance) direction with respect to the reference terminal and the other terminal is short circuited.
$V_{(BR)CEO}$		
$V_{CE(sat)}$		Collector-to-emitter saturation voltage.
$V_{CE(knee)}$		Collector knee voltage.
P_{tot}		Total power dissipated within a device.
T_{amb}		Ambient temperature.
T_j		Junction temperature.
r_e, r_b, r_c	}	Components of the common base small-signal T equivalent circuit.
c_e, c_c, α, β		
r_{bb}, r_{be}, c_{be}	}	Components of the small signal hybrid-equivalent circuit.
r_{bc}, c_{be}, r_{ce}		
r_{bc}, g_m		
g_m is also used as the mutual conductance of a thermionic valve.		
r_a the anode resistance of a thermionic valve.		
μ the amplification factor of a valve.		

Bibliography

1. ZIMMERMAN, H.J. and MASON, S.J., *Electronic Circuit Theory*, Wiley, New York, 1959.
2. LANGMUIR, I., *Phys. Rev.* **2**, 1913.
3. VALLEY, G.E. and WALLMAN, H., *Vacuum Tube Amplifiers*, McGraw-Hill, New York, 1948.
4. MILLER, J.M., *Sci. Pap. U.S. Bur. Stand.* No. 351, 1919.
5. SHOCKLEY, W., *Bell Syst. tech. J.* **28**, July 1949.
6. SHOCKLEY, W., *Holes and Electrons in Semiconductors*, Van Nostrand, New York, 1950.
7. JAMES, J.R. and BRADLEY, D.J., *Electron. Technol.* **38**, March 1961.
8. EBERS, J.J. and MOLL, J.L., *Proc. Inst. Radio Engrs*, **42**, New York, Dec. 1954.
9. RYDER-SMITH, S.C., *Electron. Technol.* **38**, Oct. 1961.
10. *Reference Manual of Transistor Circuits*, Mullard, London, 1960.
11. CHANDI, S.K., *Trans. Inst. Radio Engrs*, C.T. **4**, New York, Sept. 1957.
12. SHEA, R.F., *Transistor Circuit Engineering*, Wiley, New York, 1958.
13. BODE, H.W., *Network Analysis and Feedback Amplifier Design*, Van Nostrand, New York, 1945.
14. TERMAN, F.E., *Radio Engineering*, McGraw-Hill, New York, 1951.
15. HAFLER, D. and KEROES, H.I., *Audio Engng.* **35**, Nov. 1951.
16. STURLEY, K.R., *Radio Receiver Design*, Chapman & Hall, London, 1947.
17. LANGFORD-SMITH, F., *Radio Designers Handbook*, Iliffe, London, 1953.
18. JOYCE, M.V. and CLARKE, K.K., *Transistor Circuit Analysis*, Addison-Wesley, New York, 1961.
19. WALSTON, J.H. and MILLER, J.R., *Transistor Circuit Design*, McGraw-Hill, New York, 1963.
20. KORN, G.A. and KORNE, T.M., *Electronic Analog Computers*, McGraw-Hill, New York, 1952.
21. WASS, C.A. and GARNER, K.C., *Introduction to Electronic Analogue Computers*, Pergamon, London, 1964.
22. PAUL, R.J., *Fundamental Analogue Techniques*, Blackie, London, 1964.
23. LYNCH, W.A., *Proc. Inst. Radio Engrs*, **39**, New York, Sept. 1951.
24. BENSON, F.A., *Electron. Engng.*, **24**, Sept. 1952.
25. COHEN, E. and JENKINS, R.O., *Proc. Instn elect. Engrs*, B, **107**, May 1960.
26. WALKER, D.E., *Electron. Engng.* **34**, June 1962.

27. HULL, A.W., *Proc. Inst. Radio Engrs*, N.Y. New York, 1918.
28. BRUNETTI, C., *Proc. Inst. Radio Engrs*, 27, New York, 1929.
29. SOMMERS, H.S., *Proc. Inst. Radio Engrs*, 47, New York, July 1959.
30. THOMAS, H.A., *The Theory and Design of Valve Oscillators*, Chapman & Hall, London, 1951.
31. SANDEMAN, E.K., *Radio Engineering*, Chapman & Hall, London, 1947.
32. MCCANN, M.R., *The Tunnel Diode as an Oscillator*, S.T.C. App. Report, London, 1961.
33. VAN DER POL, B., *Phil. Mag.* 2, 1926.
34. ABRAHAM, H. and BLOCH, E., *Ann. der Physik*, 12, 1919.
35. MILLMAN, J. and TAUB, H., *Pulse and Digital Circuits*, McGraw-Hill, New York, 1956.
36. ECCLES, W.H. and JORDAN, F.W., *Radio Rev.* 1, London, 1919.
37. CHANCE, B., *Waveforms*, McGraw-Hill, New York, 1948.
38. NEETESON, P.A., *Junction Transistors in Pulse Circuits*, Philips Tech. Lib., Eindhoven, 1959.
39. BEAUFOY, R., *J. Instn elect. Engrs*, May 1959.
40. SCHMITT, O.H., *J. Sci. Instrum.* 15, Jan. 1938.
41. WILLIAMS, F.C. and MOODY, M.F., *J. Instn elect. Engrs*, IIIA, 7, 1946.
42. DUMMER, G.W., *Fixed Resistors*, Pitman, London, 1956.
43. DUMMER, G.W., *Fixed Capacitors*, Pitman, London, 1956.
44. *The Use of Electronic Valves*, Brit. Stand. Code CP1005, London, 1954.
45. PEARLSTON, C.B., *Trans. Inst. Radio Engrs*, R.F. 14, New York, Oct. 1962.
46. JAEGER, J.C., *An introduction to the Laplace Transformation with engineering applications*, Methuen, London, 1949.
47. VAN VALKENBURG, M.E., *Introduction to Modern Network Synthesis*, Wiley, New York, 1959.
48. WEINBERG, L., *Network Analysis and Synthesis*, McGraw-Hill, New York, 1962.

Index

- Absolute maximum system of valve rating 388
- Absorption loss 391
- Alloy type transistor 26, 34
- Amplification factor of a valve 4
- Amplifiers
 - capacitively coupled 61
 - class A 117, 131
 - class B push-pull 123, 135
 - direct coupled 181
 - negative feedback 217
 - tuned 138
 - zero frequency 179
- A.M.V. (Astable multivibrator) 327, 358
 - complementary 362
 - emitter coupled 361
- Anode decoupling 78
- Anode efficiency of power amplifier 113
- Audio power amplifier
 - valve 117, 123
 - transistor 131, 135
- Automatic drift correction 258
- Asymptotic approximation 239
- Avalanche breakdown voltage 32
- Avalanche switching 368

- Backlash in Schmitt trigger operation 350
- Bandpass amplifier 161
- Bandwidth
 - of capacitively coupled amplifier 61
 - of cascaded stages 152
 - of negative feedback amplifiers 219, 239
 - of single tuned circuit 143
- Base current biasing 42
- Binary element 338
- Bistable networks, complementary 344
- B.M.V. (bistable multivibrator) 334, 345
 - cathode coupled 349
 - emitter coupled 341
 - symmetrical trigger 343
 - thermionic valve 345
- Bottoming voltage 8
- Bridge rectifier 267

- Capacitively coupled transistor amplifiers 94
 - current gain at high frequency 97
 - effect of emitter capacitor 101
 - high frequency performance 109
 - low frequency performance 99
 - tandem stages 104
- Capacitively coupled valve amplifiers 61
 - anode decoupling 78
 - bandwidth 61
 - cathode follower output 93
 - effect of cathode bypass capacitor 73
 - effect of screen decoupling 75
 - gain and frequency response 62
 - gain-bandwidth product 68
 - pentode amplifier 86

- Capacitively coupled valve amplifiers (*cont.*)
 - time response 80
 - triode amplifier 83
- Capacitor input filter 273
- Capacitor types, selection of 383
- Catching diode 363
- Cathode bias 10
- Cathode coupled amplifier 20, 197
- Cathode coupled B.M.V. 349
- Cathode follower 16, 21
 - as a coupling element 195
 - as a feedback device 222
 - as a voltage stabilizer 279
 - output stage 93, 188
- Choke input filter 271
- Chopper type z.f. amplifier 180
- Circuit analysis 197, 397
- Class A audio power amplifier 131
- Class A power amplifier 113, 127
- Class B push-pull amplifier 123, 135
- Closed loop performance of feedback amplifiers 239
- Closed loop voltage regulator 284
- Coefficient of coupling 158
- Collector feedback biasing 45
- Colpitt's oscillator 307
- Common base operation 28
- Common cathode operation 14
- Common collector operation 247
- Common emitter operation 29
- Common mode effects 199
- Comparator 365
- Complementary bistable networks 344
- Complementary devices in z.f. amplifiers 209
- Composite characteristics 124
- Compound emitter follower 282
- Computing amplifier 230
 - applications 235
 - low input impedance 233
- Constant current generator 367
- Constant current tail for longtail pair 201
- Constant selectivity 147
- Corona discharge 277
- Counter, four-stage 338
- Counting 329
- Coupling networks for z.f. amplifiers 195, 204
- Cross-over distortion 135
- Current amplifier, with defined gain 262
- Cut-off frequency of transistors 164
- Darlington connection 248, 361
- Decade counter 338
- Decoupling 163
- Delay, variable 330
- Design centre rating system 388
- Determinants 395
- Dielectric absorption 383
- Difference amplifier 287
- Differential anode resistance 3
- Differential input resistance 36
- Differential resistance of gas discharge tube 276
- Differentiating network 363
- Diffused base transistor 35
- Direct coupled amplifier (*see* z.f. amplifier) 181, 207
 - with feedback 250
 - stabilization of 251
- Direct coupled emitter follower 248
- Direct coupled transistor logic (DCTL) 340
- Dissipation factor 141
- Dominant lag stabilization 252
- Double tuned circuits 157
- Drift
 - automatic correction of 258
 - in transistor d.c. amplifiers 212
 - in feedback amplifiers 257
 - in zero frequency amplifiers 180
- Drift transistor 35
- Dynamic resistance 139, 159

- Earths and earth loops 392
- Emitter follower 247
 - as voltage stabilizer 282
 - capacitor coupled 249
 - using Darlington connection 248
- Emitter resistor stabilization 47
- Epitaxial mesa transistor 35

- Field effect transistor 233
- Figure of merit, for cascaded amplifiers 152
- Frequency divider 329
- Frequency response
 - of capacitively coupled amplifier 64
 - of zero frequency amplifier 179, 193
 - using straight line asymptotes 66
- Full wave rectifier 267

- Gain-bandwidth product 31
 - of capacitively coupled amplifiers 68
 - of cascaded stages 152, 161
 - of single tuned circuit amplifier 143
- Gain margin 238
- Gas discharge tube 195
 - for voltage stabilization 275
- Gating 378
 - diode 337
 - methods 339
- Graded base transistor 35
- Grid current 299
- Grid cut-off voltage 4
- Grid leak stabilization 298
- Grounded grid amplifier 17
- Grown junction transistor 34

- Half wave rectifier 266
- Hand capacity effects 151
- Harmonic distortion 115
- Harmonic generation 329

- High impedance radiators 392
- High input resistance amplifier 244
- Hybrid equivalent circuit 39
- Hybrid π equivalent network 165

- Impedance changer 246
- Input resistance of transistor amplifier 53
- Insulation resistance of a capacitor 384
- Integrating network 365
- Integrator 235
- Integrator, Miller 373
- Interelectrode capacitance 9

- Kirchhoff's Laws 394

- Laplace transform, applications of 398
- Leakage current 25
- Leakage resistance of a capacitor 384
- Load line 18
- Logarithmic representation of frequency response 239
- Longtail pair 197, 213
 - as a difference amplifier 200
 - frequency response 203
 - gain control of 203
 - with constant current tail 201
- Loop gain of capacitively coupled amplifier 218
- Low impedance radiators 392

- Majority carriers 23
- Memory element 329
- Mesa transistor 35
- Miller effect 9, 205
- Miller timebase generator 371
- Minority carriers 23
- Modified T equivalent network 165
- Modified Wien bridge oscillator 312
- Modulator type d.c. amplifier 180, 259

- Motorboating 78
- M.M.V. (Monostable multivibrator) 328, 351
 - asymmetrical 357
 - collector-to-base coupled 351
 - direct coupled 355
- Mutual conductance 4
- Negative feedback, to stabilize transistor operation 236
- Negative feedback amplifiers 217
 - bandwidth of 239
 - computing amplifier 230
 - current amplifier 223
 - d.c. amplifier 250
 - drift problem in 257
 - high input resistance 244
 - loop gain 218
 - low input impedance 233
 - series-series feedback 228
 - shunt-shunt feedback 226
 - stability of 237, 240
 - with parallel feedback 242
 - voltage amplifier 221
- Negative resistance 296
- Negative temperature coefficient 135
- Network analysis 394
- Neutralization 166
- Nodal analysis 395
- Normalized selectivity curve 154
- Oscillators
 - basic considerations 294
 - amplitude stabilization of 298
 - frequency stability 318
 - modified Wien bridge 312
 - phase shift 311
 - series resonant 319
 - squegging 300
 - tuned grid 298
 - tunnel diode 321
- Output conductance of a transistor 38
- Output resistance of transistor amplifier 54
- Overdrive 336
- Overload protection 292
- Parallel feedback 242
- Parallel tuned circuit 138
- Parasitics in push-pull amplifiers 127
- Partition factor 89
- Permeability tuning 147, 160
- Phase margin 238
- Planar transistor 36
- Potential barrier 24
- Power amplifiers
 - anode efficiency 113
 - distortion in 114
 - power output 116, 136
- Power factor of a capacitor 384
- Power gain of transistor amplifier 55
- Preferred values of resistors 381
- Pulse forming 329
- Punch through 31
- Q (magnification) 139
- Quartz crystal 319
- R-C oscillators 311
- Rectifiers 25
 - bridge 267
 - full wave 267
 - half wave 266
- Recovery time of timebase generator 378
- Reference supply 281
- Reflection loss 391
- Relaxation oscillators 327
- Reservoir capacitor 268
- Resistors, selection of 380
- Reverse saturation current 25
- Ripple in power supplies 268
- Ripple reduction 270
- Rise time 82

- Sawtooth generator using avalanche switching 368
- Schmitt trigger 349
- Screening 390
- Secondary emission 6
- Series resonant oscillator 319
- Shift register 339
- Short circuit current gain 28
- Shunt-shunt feedback 260
- Single tuned circuit amplifier 139
- Speed of transistor switching 333
- Squegging 300
- Stability
 - of amplifiers with negative feedback 237
 - of component values 381
- Stabilization factor 46, 49
- Stabilization
 - of d.c. amplifiers 251
 - of feedback amplifiers 240
 - of gain in feedback amplifiers 219
- Stabilizer diodes 277
- Staggered tuned circuit amplifiers 154
- Starvation condition, of a pentode 8
- Static characteristics of the junction transistor 36
- Striking voltage of gas discharge tube 276
- Surface barrier transistor 34
- Sweep generators 365
- Switching, transistor 330

- Tandem stages, of transistor amplifiers 104
- Thermal runaway 45, 127
- Thermistor 135, 315
- Three halves power law 2
- Timebase generator, Miller 371, 374
- Time response, of capacitively coupled amplifiers 80
- Timing oscillator 328
- Tolerance of component values 381
- Transfer characteristic 37
- Transformation ratio 133
- Transistor
 - amplifier characteristics 50
 - biasing 42
 - current relationships 28
 - frequency effects 29
 - gain-bandwidth product 31
 - power dissipation 33
 - potential diagrams 27
 - saturated operation 332
 - series regulator 289
 - small signal representation 39
 - static characteristics 36
 - summary of types 34
 - switching 330
 - voltage breakdown 31
- Transitional lag stabilization 254
- Triggering 337
- Tuned amplifiers 138, 164
- Tuned anode oscillator 302
- Tuned grid oscillator 298
- Tunnel diode oscillator 321

- Ultra linear output stage 126
- Unilateralization 167

- Variable frequency oscillator 329
- Variable-mu pentode 141
- Voltage breakdown in transistors 31
- Voltage feedback ratio 38
- Voltage gain characteristic 52
- Voltage multiplier 274
- Voltage reference tubes 277
- Voltage regulator 284
- Voltage stabilization 275

- Wattage rating of resistors 380
- Working voltage of capacitors 383

- Zener breakdown 31
- Zener diode 209
- Zero frequency amplifiers 179
- Zeroing z.f. amplifiers 181

**SOME OTHER PERGAMON
TITLES OF INTEREST**

JOHN J. SPARKES
Junction Transistors
260 pages

A. M. P. BROOKES
Advanced Electric Circuits
194 pages

D. G. TUCKER
**Elementary Electrical Network
Theory**
*"This book deserves to become extremely
popular as an introductory volume".
Technical Education and Industrial
Training.*
180 pages

**J. R. ABRAHAMMS and
G. J. PRIDHAM**
**Semiconductor Circuits
Theory, Design and Experiment**
224 pages

For a complete list of books appearing to date in
The Commonwealth and International Library,
please write to The Education Department,
Pergamon Press Ltd., Headington Hill Hall, Oxford.

Contents of this Book

The Thermionic Valve

The Semiconductor

**The Capacitively Coupled
Amplifier**

Power Amplifiers

Tuned Amplifiers

Zero Frequency Amplifiers

Negative Feedback Amplifiers

Power Supplies

Oscillators

Waveform Generators

**Some General Design
Considerations**

**Appendix A Solution of Simple
Network Problems**

**Appendix B Application of the
Laplace Transform**